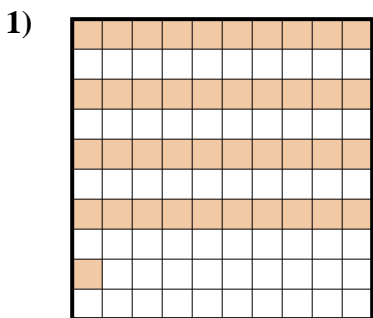


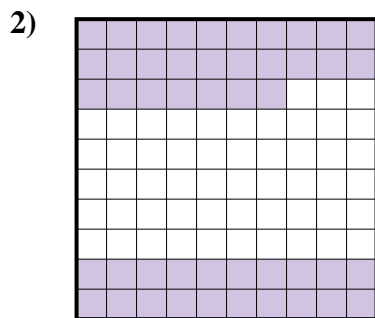


Déterminez quelle lettre représente le mieux la valeur colorée relative à la figure.

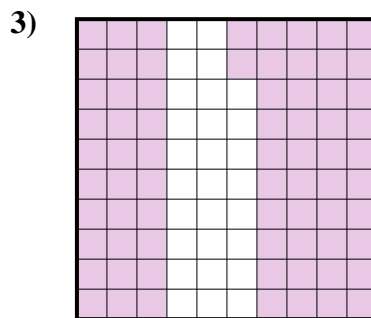
Réponses



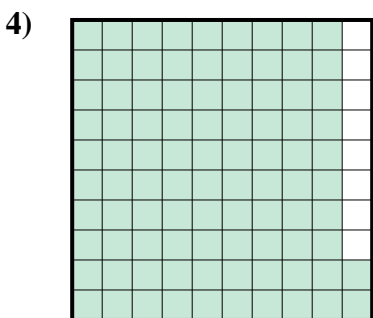
- A. 410,00
- B. 0,41
- C. 410,0
- D. 0,041




- A. 470,00
- B. 47
- C. 0,47
- D. 4,7



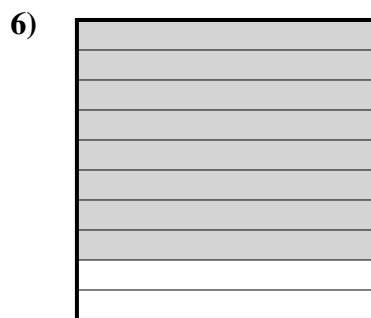
- A. 7,2
- B. 0,072
- C. 0,72
- D. 720,0



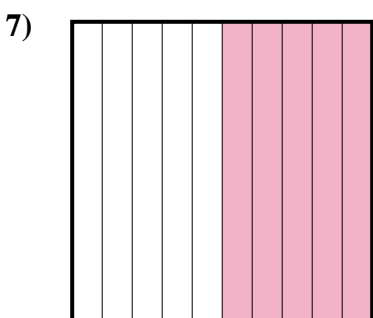
- A. 0,92
- B. 920,00
- C. 92
- D. 9,2




- A. 0,06
- B. 60
- C. 0,6
- D. 600,0



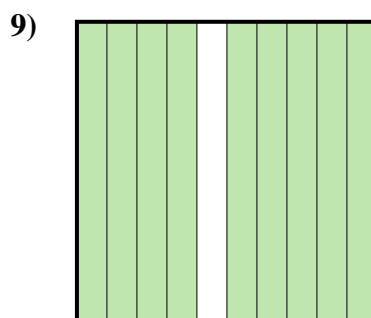
- A. 80
- B. 800,0
- C. 0,8
- D. 0,08



- A. 0,05
- B. 0,5
- C. 5
- D. 500,00



- A. 30
- B. 3
- C. 0,03
- D. 0,3



- A. 0,9
- B. 0,09
- C. 900,00
- D. 9

1. _____

2. _____

3. _____

4. _____

5. _____

6. _____

7. _____

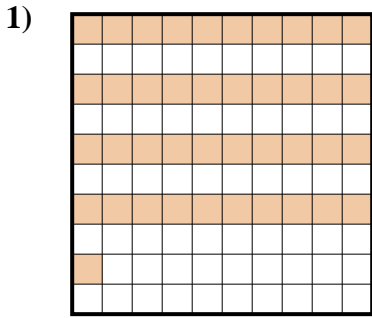
8. _____

9. _____

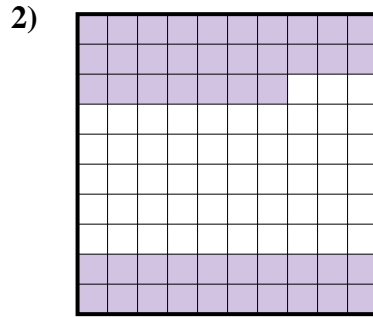


Déterminez quelle lettre représente le mieux la valeur colorée relative à la figure.

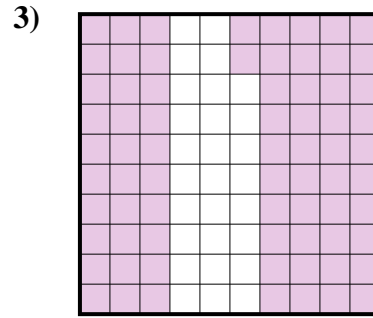
Réponses



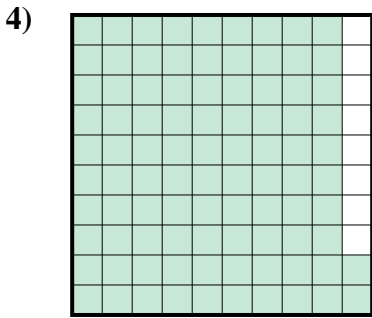
- A. 410,00
- B. 0,41
- C. 410,0
- D. 0,041



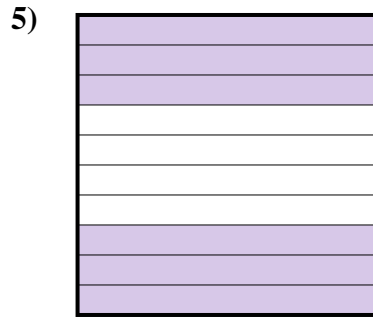
- A. 470,00
- B. 47
- C. 0,47
- D. 4,7




- A. 7,2
- B. 0,072
- C. 0,72
- D. 720,0



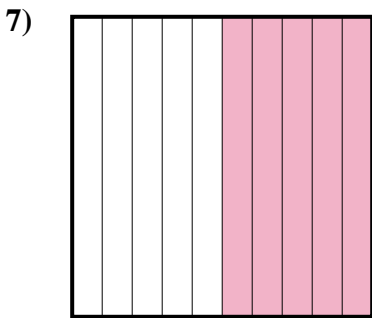
- A. 0,92
- B. 920,00
- C. 92
- D. 9,2




- A. 0,06
- B. 60
- C. 0,6
- D. 600,0



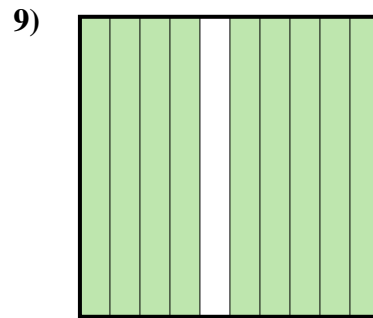
- A. 80
- B. 800,0
- C. 0,8
- D. 0,08



- A. 0,05
- B. 0,5
- C. 5
- D. 500,00



- A. 30
- B. 3
- C. 0,03
- D. 0,3



- A. 0,9
- B. 0,09
- C. 900,00
- D. 9

- 1. **B**
- 2. **C**
- 3. **C**
- 4. **A**
- 5. **C**
- 6. **C**
- 7. **B**
- 8. **D**
- 9. **A**