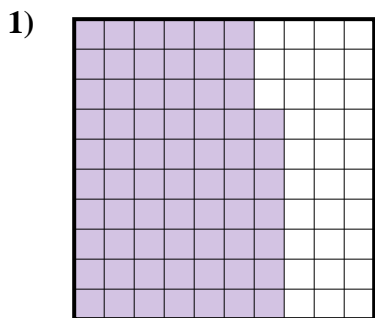





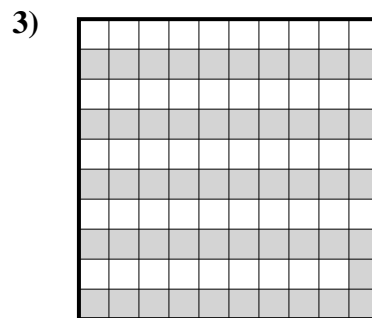
Déterminez quelle lettre représente le mieux la valeur colorée relative à la figure.

Réponses

- A. 67
B. 0,67
C. 670,00
D. 6,7



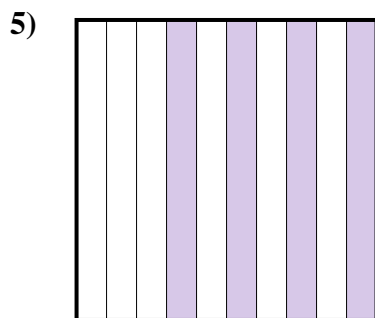
- A. 0,2
B. 2
C. 200,0
D. 200,00



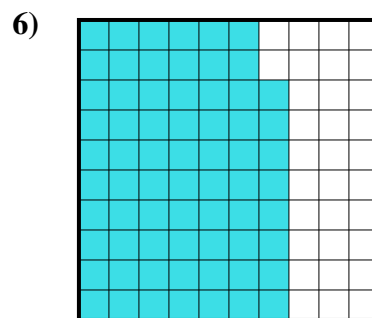
- A. 0,051
B. 51
C. 510,00
D. 0,51



- A. 0,9
B. 90
C. 9
D. 900,0



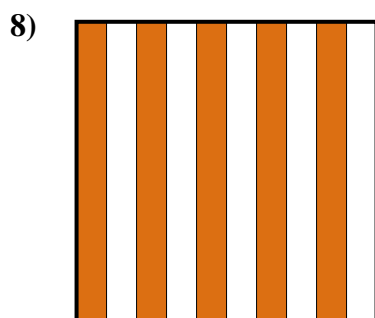
- A. 0,4
B. 4
C. 40
D. 0,04



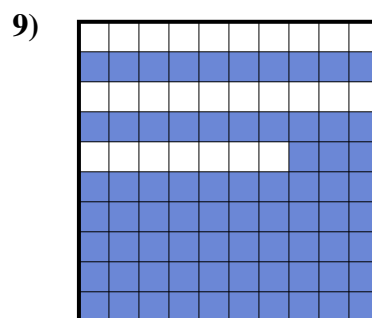
- A. 0,68
B. 6,8
C. 680,0
D. 680,00



- A. 700,00
B. 0,7
C. 7
D. 700,0



- A. 50
B. 500,0
C. 0,05
D. 0,5



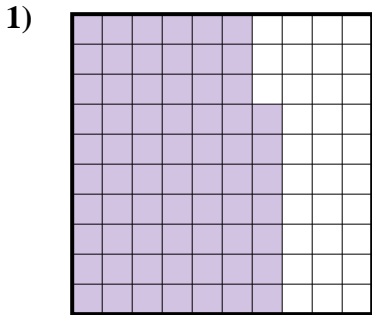
- A. 730,0
B. 73
C. 7,3
D. 0,73

1. _____
2. _____
3. _____
4. _____
5. _____
6. _____
7. _____
8. _____
9. _____




Déterminez quelle lettre représente le mieux la valeur colorée relative à la figure.

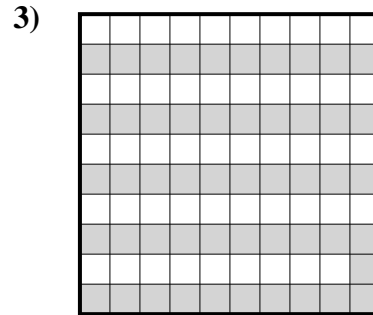
Réponses



- A. 67
- B. 0,67
- C. 670,00
- D. 6,7



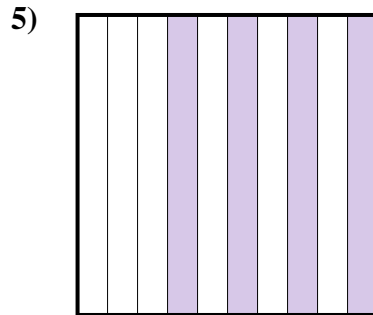
- A. 0,2
- B. 2
- C. 200,0
- D. 200,00



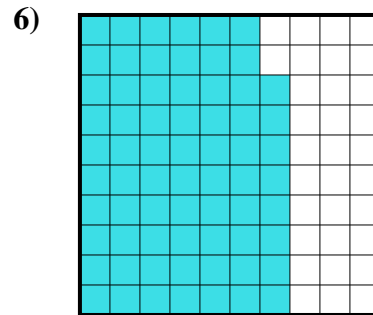
- A. 0,051
- B. 51
- C. 510,00
- D. 0,51



- A. 0,9
- B. 90
- C. 9
- D. 900,0



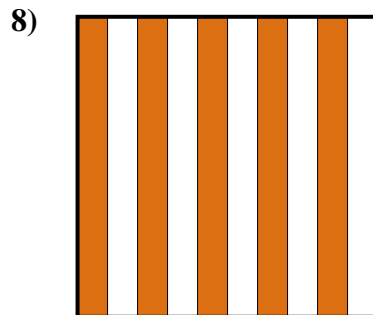
- A. 0,4
- B. 4
- C. 40
- D. 0,04



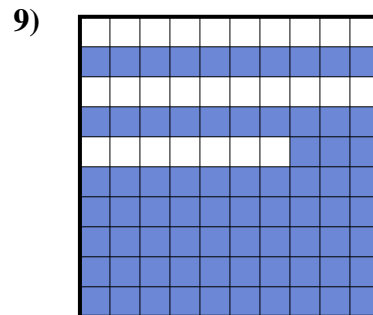
- A. 0,68
- B. 6,8
- C. 680,0
- D. 680,00



- A. 700,00
- B. 0,7
- C. 7
- D. 700,0



- A. 50
- B. 500,0
- C. 0,05
- D. 0,5



- A. 730,0
- B. 73
- C. 7,3
- D. 0,73

- 1. **B**
- 2. **A**
- 3. **D**
- 4. **A**
- 5. **A**
- 6. **A**
- 7. **B**
- 8. **D**
- 9. **D**