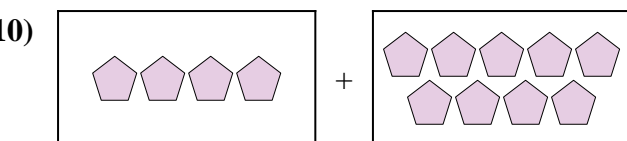
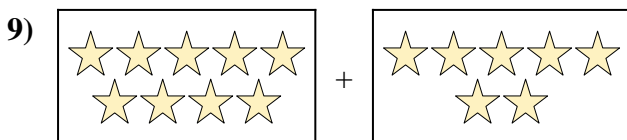
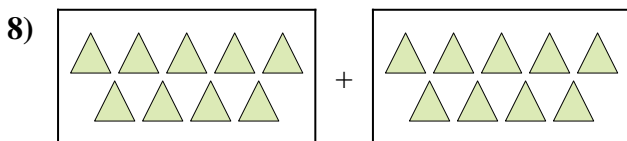

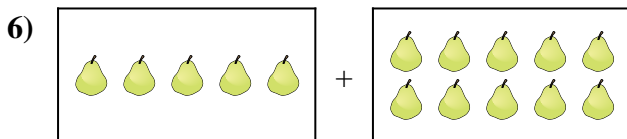
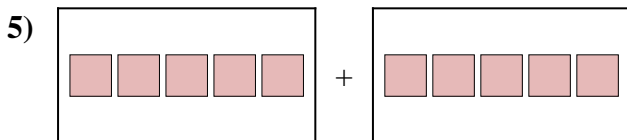
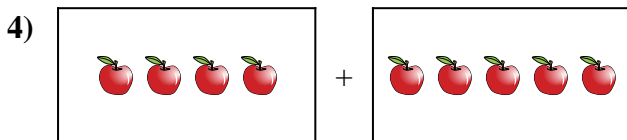

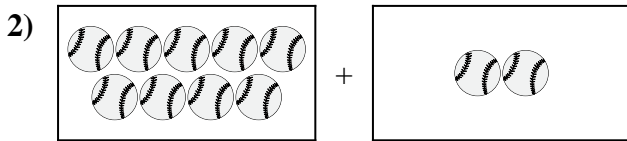





Exprimez le problème visuel sous forme d'équation avec réponse.

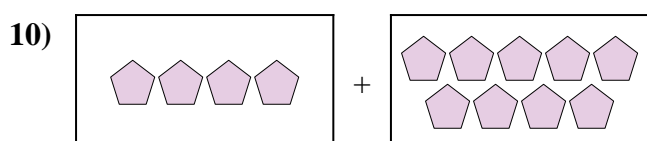
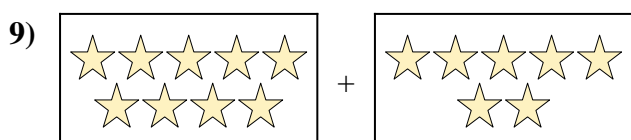
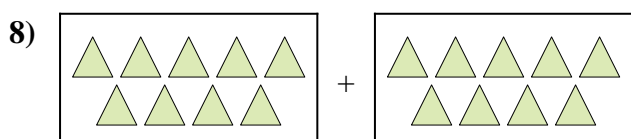

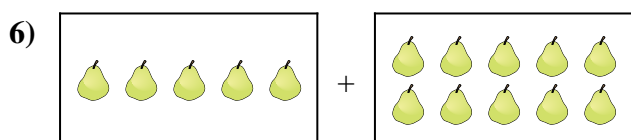
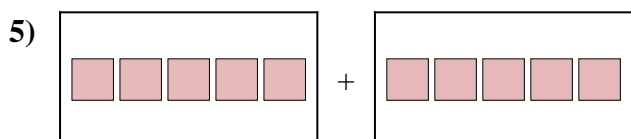
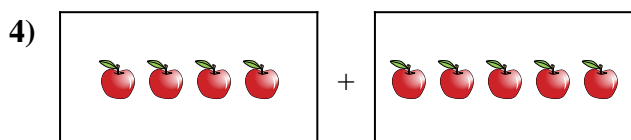

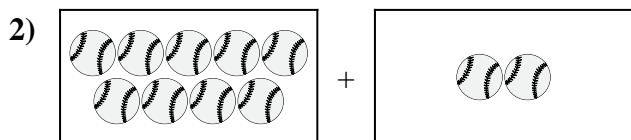
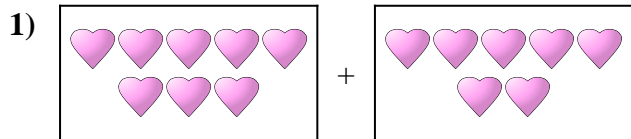


**Réponses**

1. \_\_\_\_\_
2. \_\_\_\_\_
3. \_\_\_\_\_
4. \_\_\_\_\_
5. \_\_\_\_\_
6. \_\_\_\_\_
7. \_\_\_\_\_
8. \_\_\_\_\_
9. \_\_\_\_\_
10. \_\_\_\_\_



Exprimez le problème visuel sous forme d'équation avec réponse.



**Réponses**

1. **8 + 7 = 15**

2. **9 + 2 = 11**

3. **8 + 7 = 15**

4. **4 + 5 = 9**

5. **5 + 5 = 10**

6. **5 + 10 = 15**

7. **5 + 7 = 12**

8. **9 + 9 = 18**

9. **9 + 7 = 16**

10. **4 + 9 = 13**