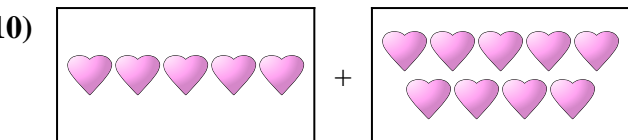
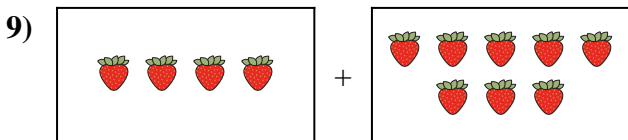
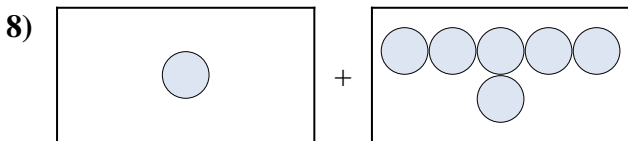
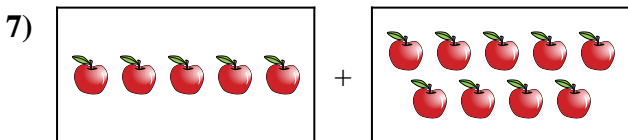

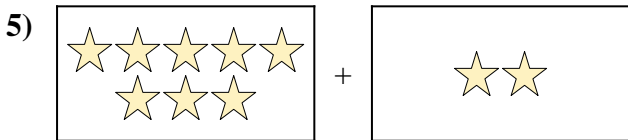
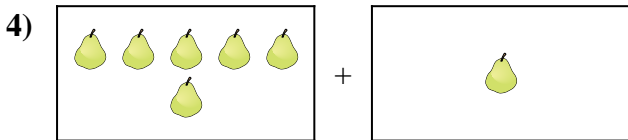
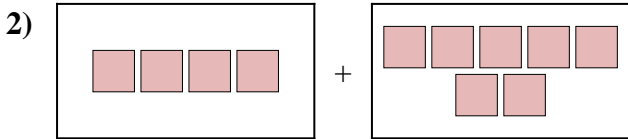
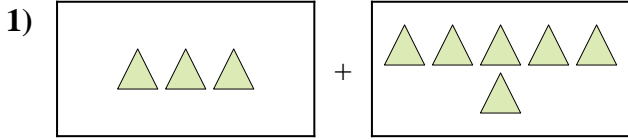




Exprimez le problème visuel sous forme d'équation avec réponse.

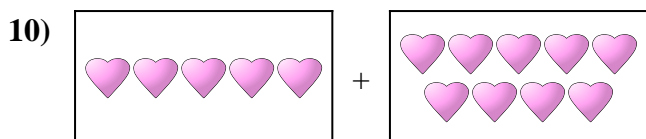
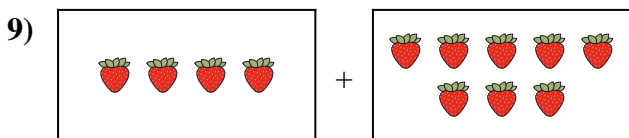
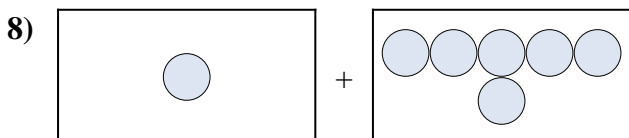
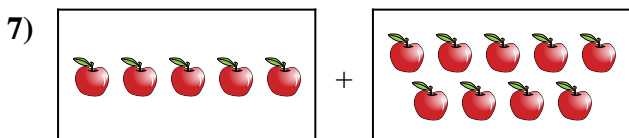

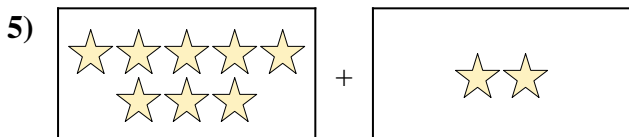
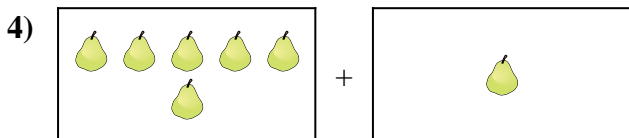
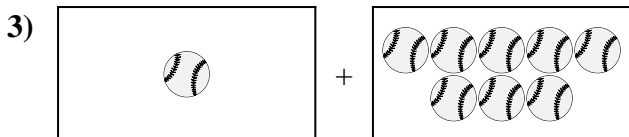
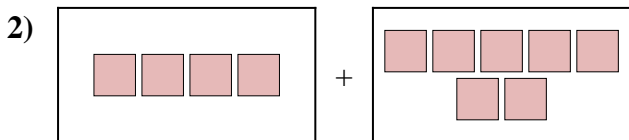
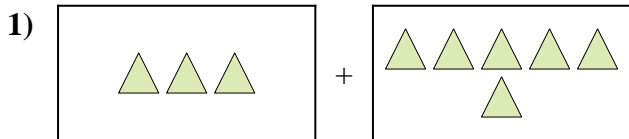
Réponses



1. _____
2. _____
3. _____
4. _____
5. _____
6. _____
7. _____
8. _____
9. _____
10. _____



Exprimez le problème visuel sous forme d'équation avec réponse.



Réponses

1. $3 + 6 = 9$

2. $4 + 7 = 11$

3. $1 + 8 = 9$

4. $6 + 1 = 7$

5. $8 + 2 = 10$

6. $10 + 9 = 19$

7. $5 + 9 = 14$

8. $1 + 6 = 7$

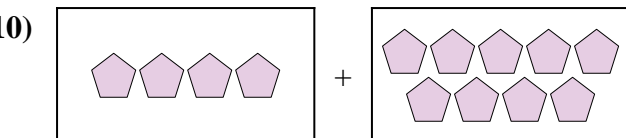
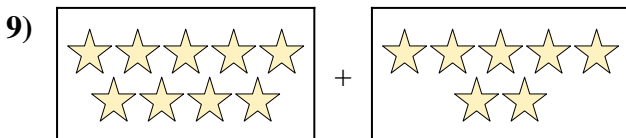
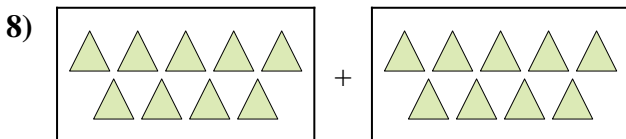

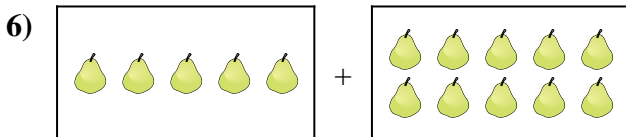
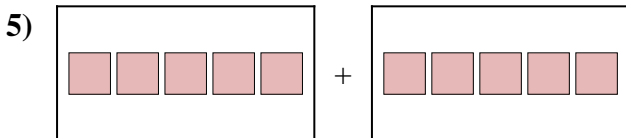
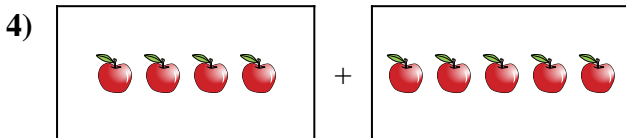

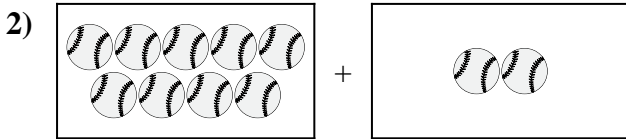
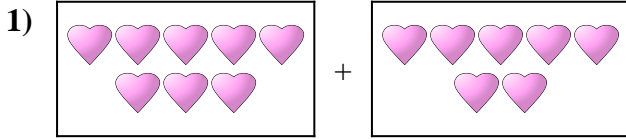
9. $4 + 8 = 12$

10. $5 + 9 = 14$



Exprimez le problème visuel sous forme d'équation avec réponse.

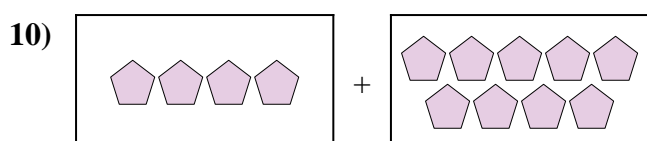
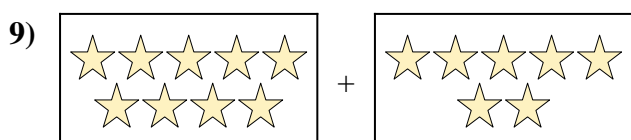
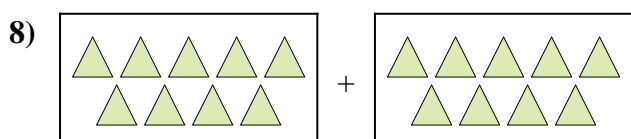

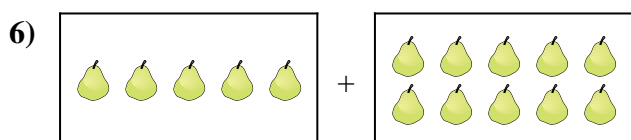
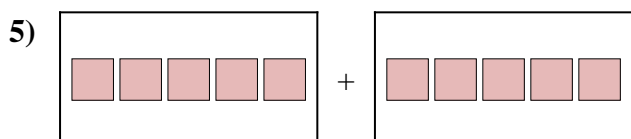
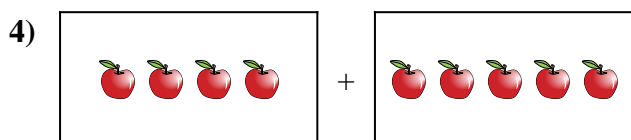

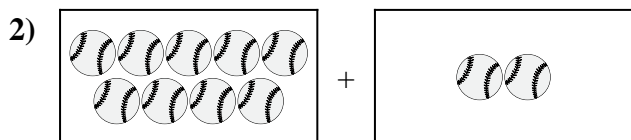
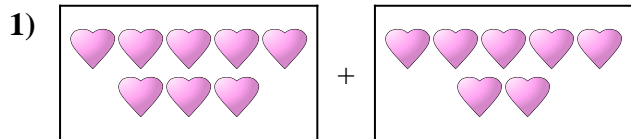
Réponses



1. _____
2. _____
3. _____
4. _____
5. _____
6. _____
7. _____
8. _____
9. _____
10. _____



Exprimez le problème visuel sous forme d'équation avec réponse.



Réponses

1. **8 + 7 = 15**

2. **9 + 2 = 11**

3. **8 + 7 = 15**

4. **4 + 5 = 9**

5. **5 + 5 = 10**

6. **5 + 10 = 15**

7. **5 + 7 = 12**

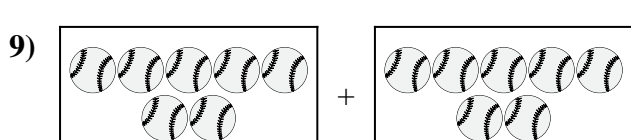
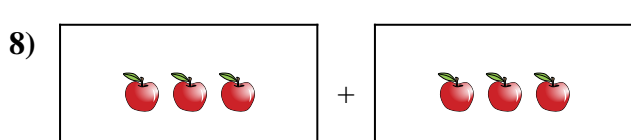
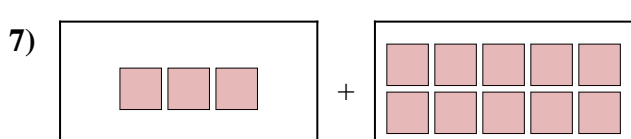
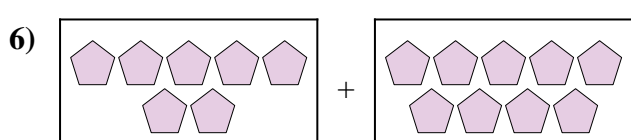
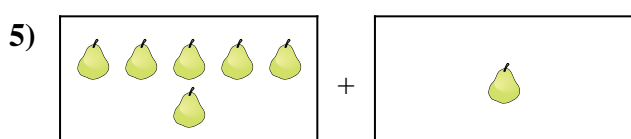
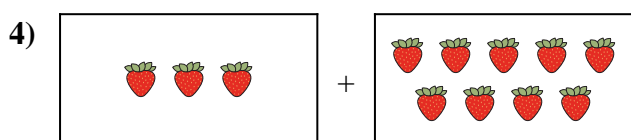
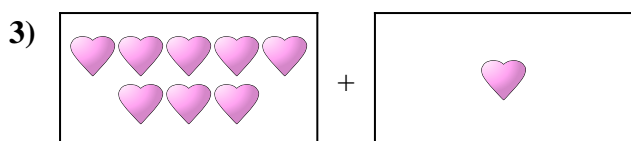
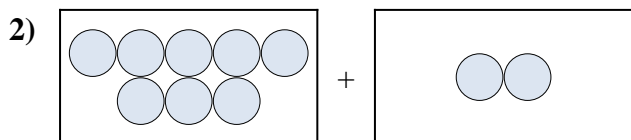

8. **9 + 9 = 18**

9. **9 + 7 = 16**

10. **4 + 9 = 13**



Exprimez le problème visuel sous forme d'équation avec réponse.

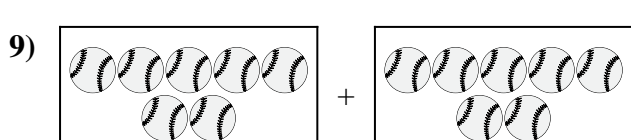
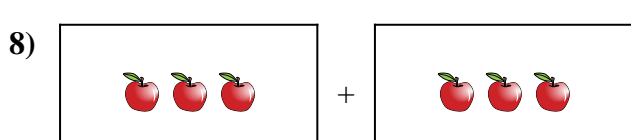
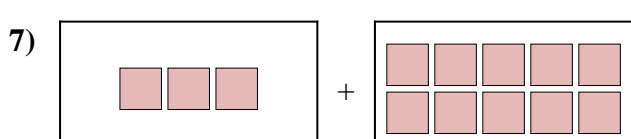
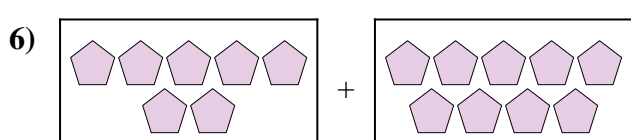
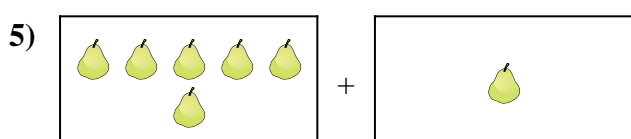
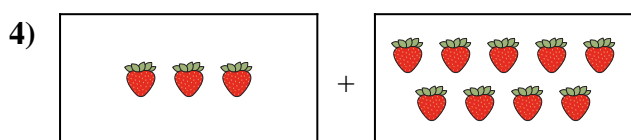
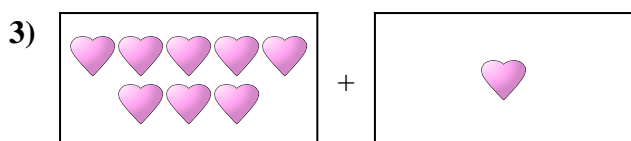
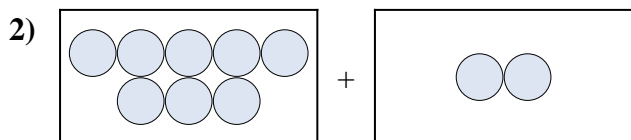



Réponses

1. _____
2. _____
3. _____
4. _____
5. _____
6. _____
7. _____
8. _____
9. _____
10. _____



Exprimez le problème visuel sous forme d'équation avec réponse.



Réponses

1. 9 + 1 = 10

2. 8 + 2 = 10

3. 8 + 1 = 9

4. 3 + 9 = 12

5. 6 + 1 = 7

6. 7 + 9 = 16

7. 3 + 10 = 13

8. 3 + 3 = 6

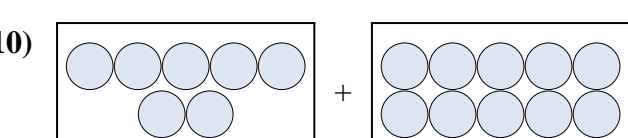

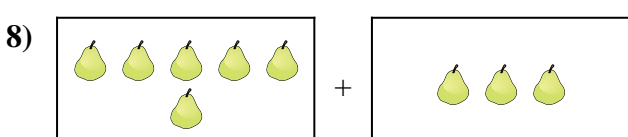

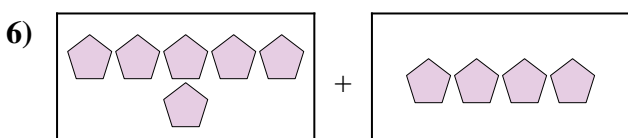
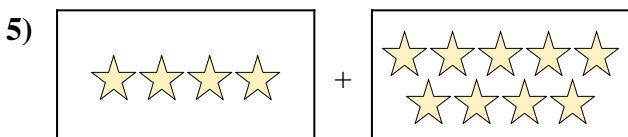
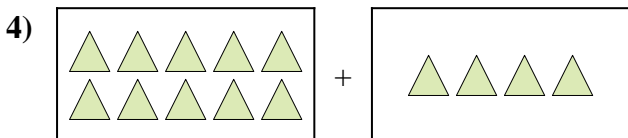
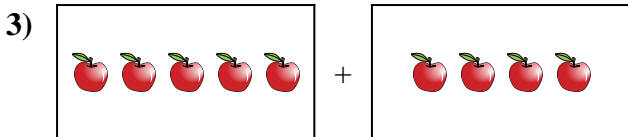
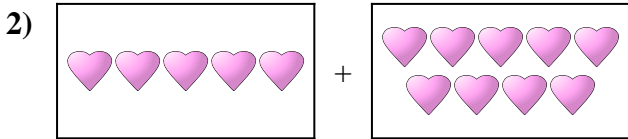
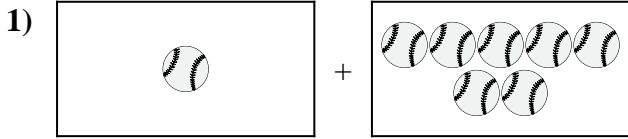
9. 7 + 7 = 14

10. 5 + 2 = 7



Exprimez le problème visuel sous forme d'équation avec réponse.

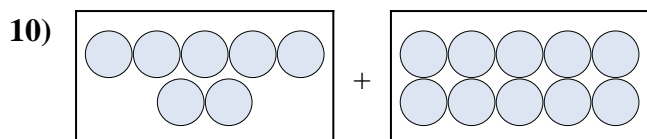

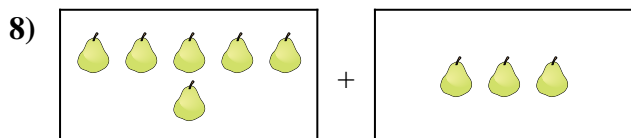

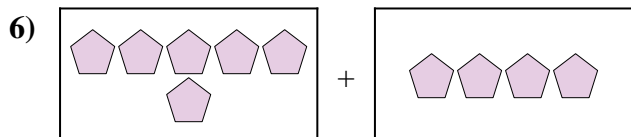
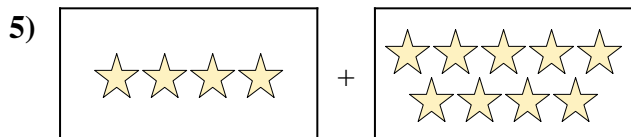
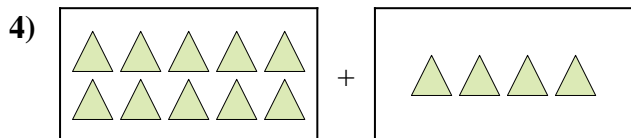
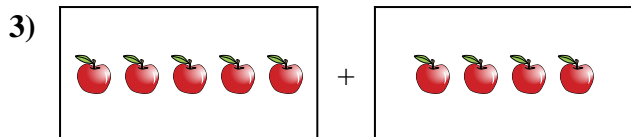
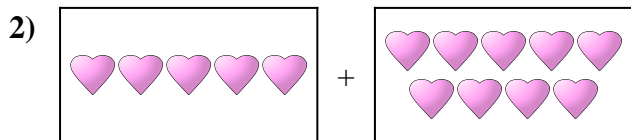
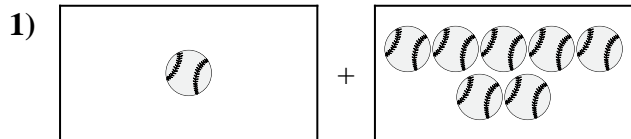
Réponses



1. _____
2. _____
3. _____
4. _____
5. _____
6. _____
7. _____
8. _____
9. _____
10. _____



Exprimez le problème visuel sous forme d'équation avec réponse.



Réponses

1. 1 + 7 = 8

2. 5 + 9 = 14

3. 5 + 4 = 9

4. 10 + 4 = 14

5. 4 + 9 = 13

6. 6 + 4 = 10

7. 6 + 10 = 16

8. 6 + 3 = 9

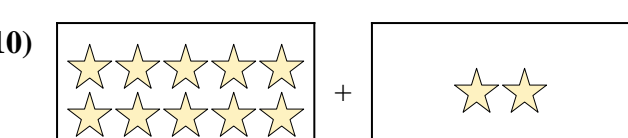
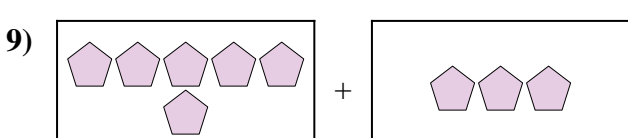
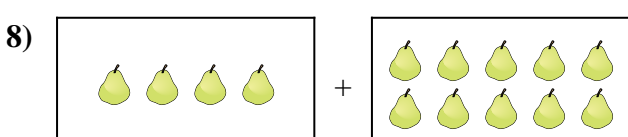
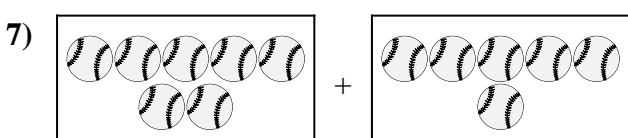

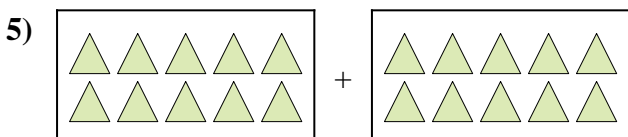
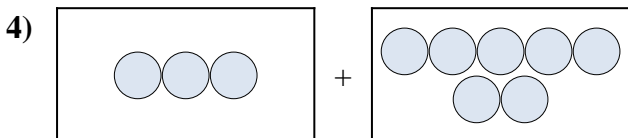
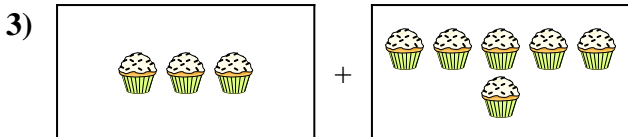
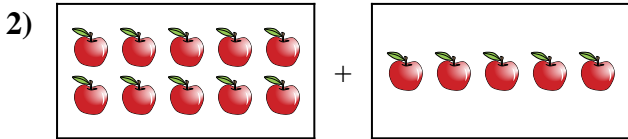
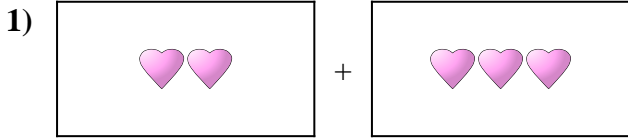
9. 7 + 4 = 11

10. 7 + 10 = 17



Exprimez le problème visuel sous forme d'équation avec réponse.

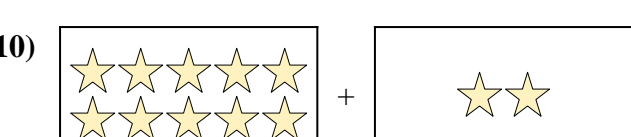
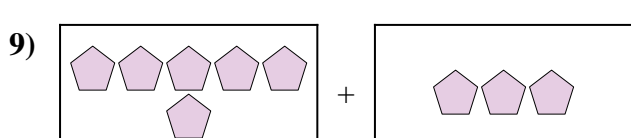
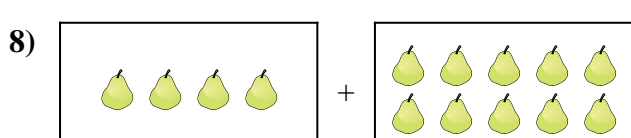
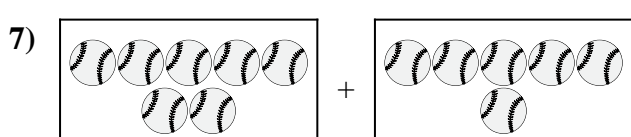

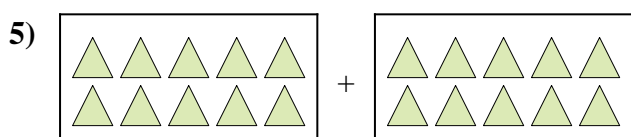
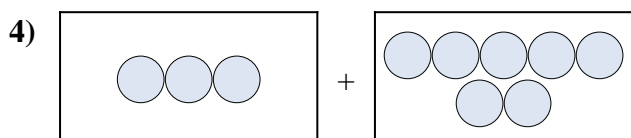

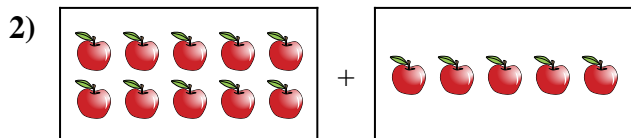
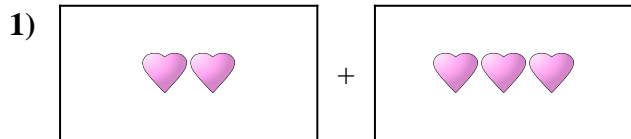
Réponses



1. _____
2. _____
3. _____
4. _____
5. _____
6. _____
7. _____
8. _____
9. _____
10. _____



Exprimez le problème visuel sous forme d'équation avec réponse.



Réponses

1. $2 + 3 = 5$

2. $10 + 5 = 15$

3. $3 + 6 = 9$

4. $3 + 7 = 10$

5. $10 + 10 = 20$

6. $10 + 3 = 13$

7. $7 + 6 = 13$

8. $4 + 10 = 14$

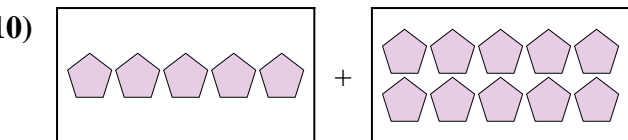
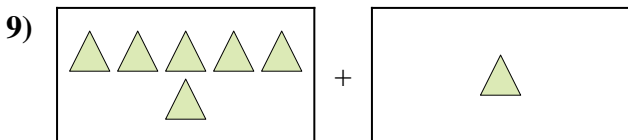
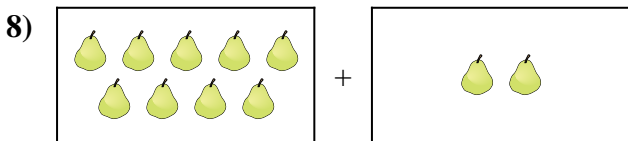
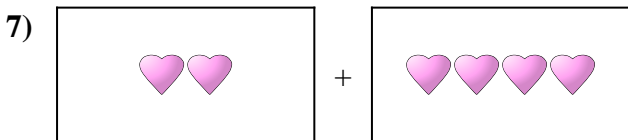
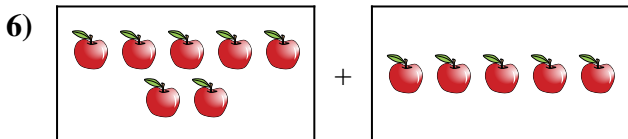
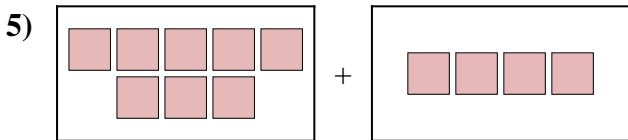
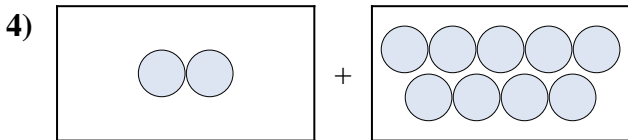
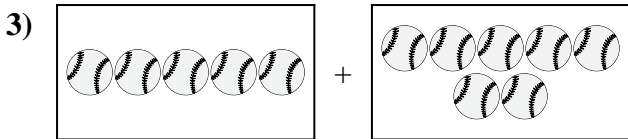

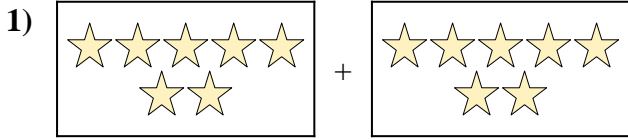
9. $6 + 3 = 9$

10. $10 + 2 = 12$



Exprimez le problème visuel sous forme d'équation avec réponse.

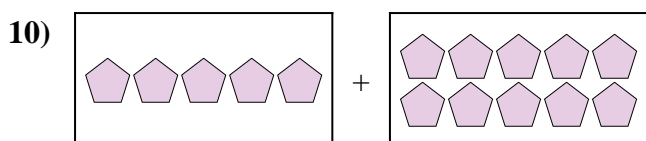
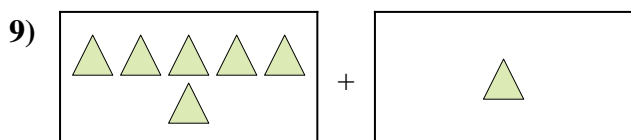
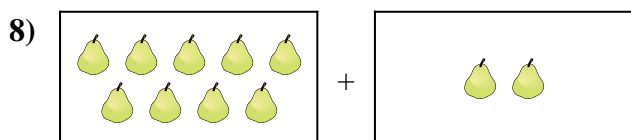
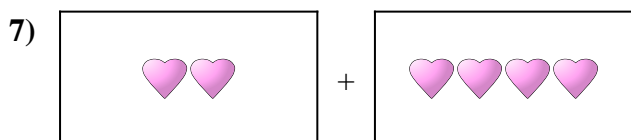
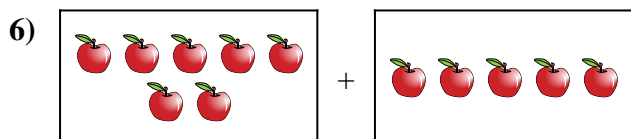
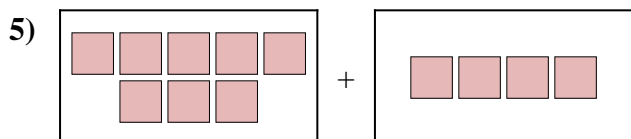
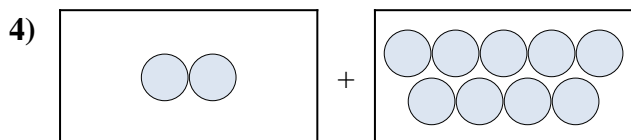
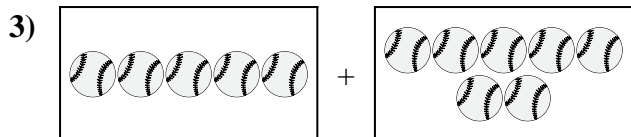

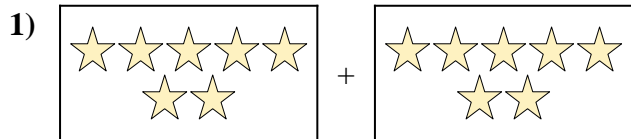
Réponses



1. _____
2. _____
3. _____
4. _____
5. _____
6. _____
7. _____
8. _____
9. _____
10. _____



Exprimez le problème visuel sous forme d'équation avec réponse.



Réponses

1. $7 + 7 = 14$

2. $6 + 1 = 7$

3. $5 + 7 = 12$

4. $2 + 9 = 11$

5. $8 + 4 = 12$

6. $7 + 5 = 12$

7. $2 + 4 = 6$

8. $9 + 2 = 11$

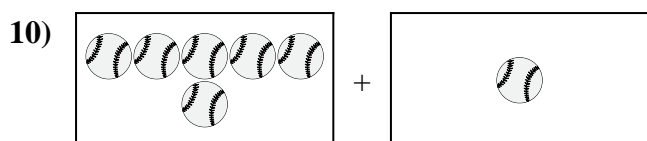
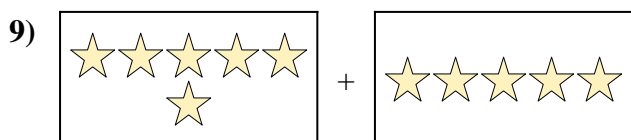
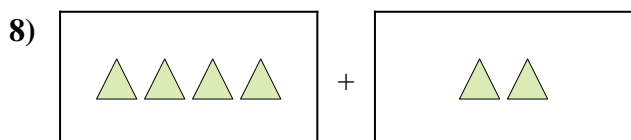
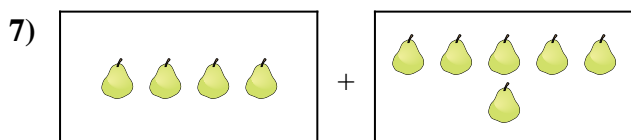
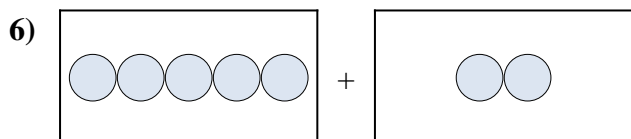
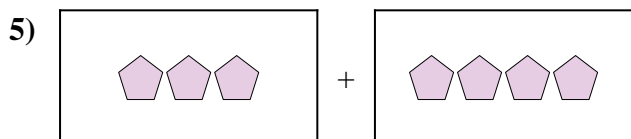
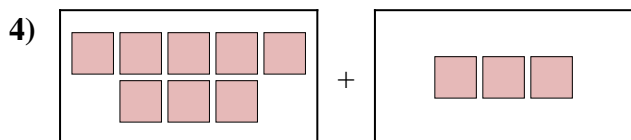

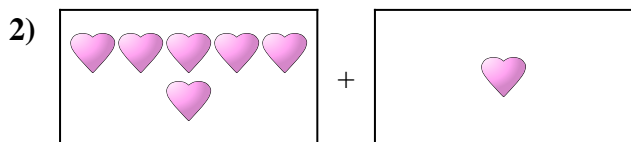
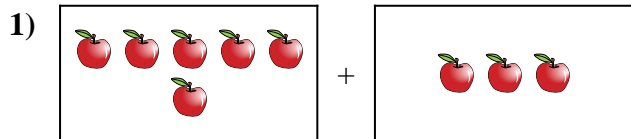
9. $6 + 1 = 7$

10. $5 + 10 = 15$



Exprimez le problème visuel sous forme d'équation avec réponse.

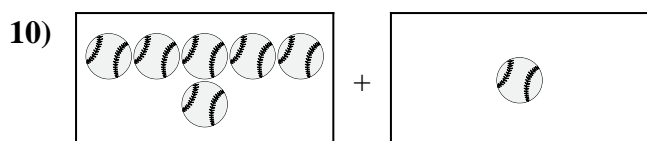
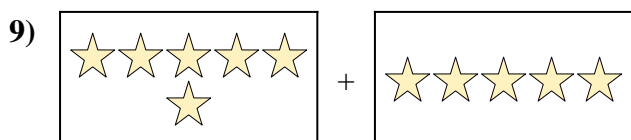
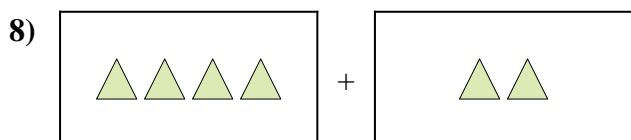
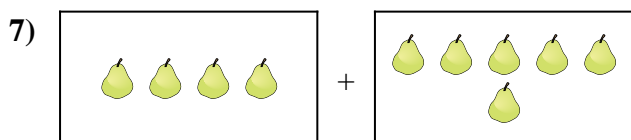
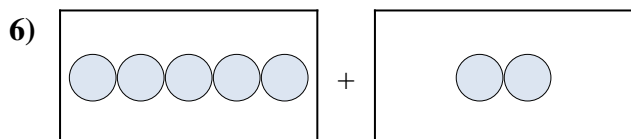
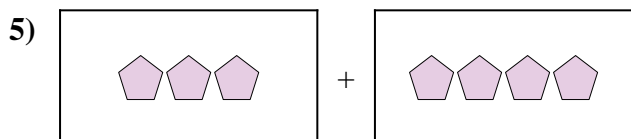
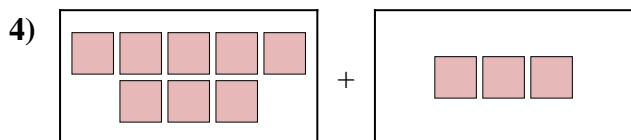

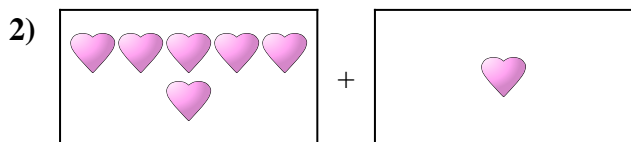
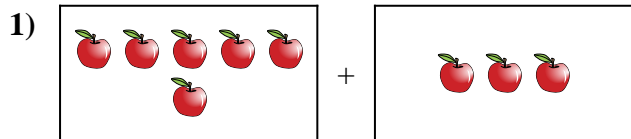
Réponses



1. _____
2. _____
3. _____
4. _____
5. _____
6. _____
7. _____
8. _____
9. _____
10. _____



Exprimez le problème visuel sous forme d'équation avec réponse.



Réponses

1. $6 + 3 = 9$

2. $6 + 1 = 7$

3. $10 + 4 = 14$

4. $8 + 3 = 11$

5. $3 + 4 = 7$

6. $5 + 2 = 7$

7. $4 + 6 = 10$

8. $4 + 2 = 6$


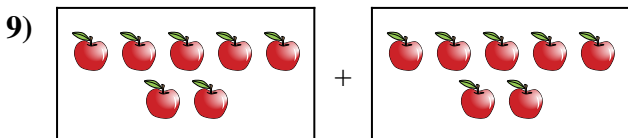
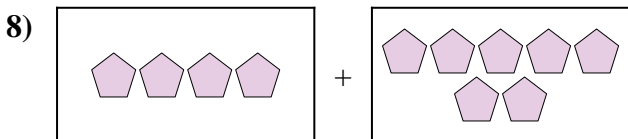
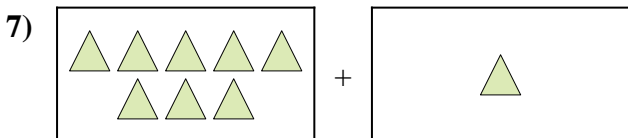
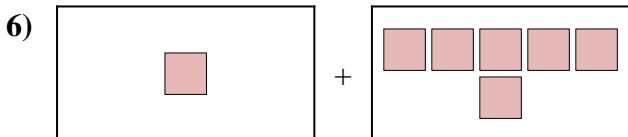
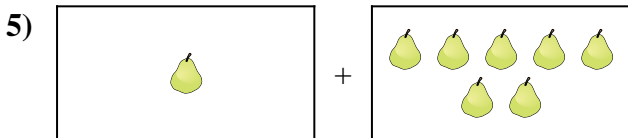
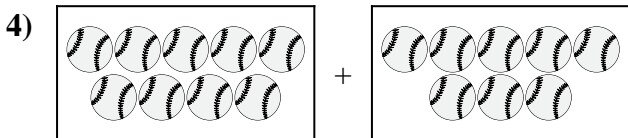
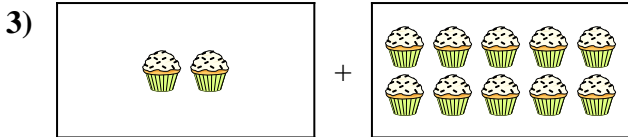
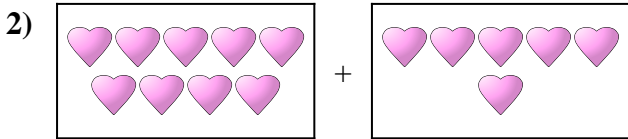
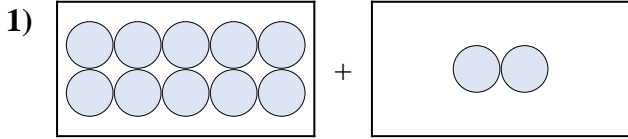
9. $6 + 5 = 11$

10. $6 + 1 = 7$



Exprimez le problème visuel sous forme d'équation avec réponse.


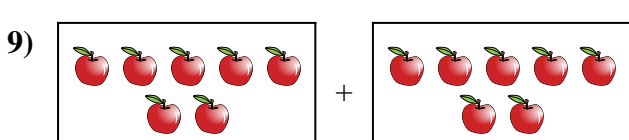
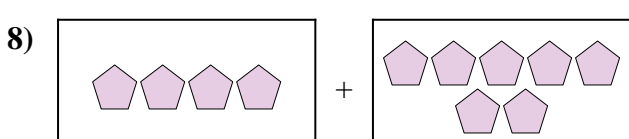
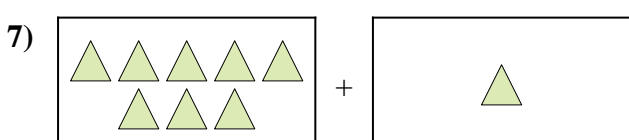
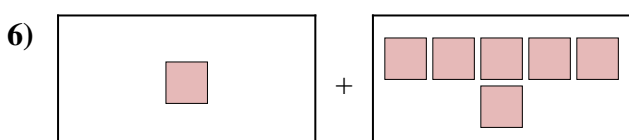
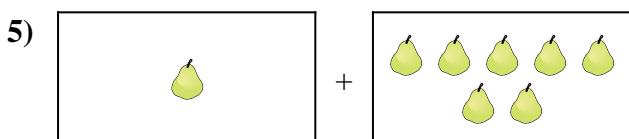
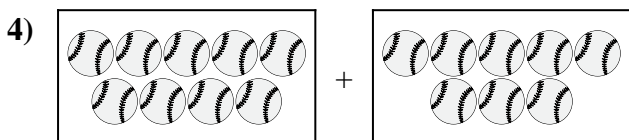
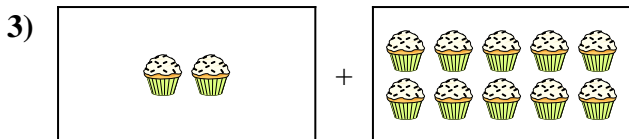
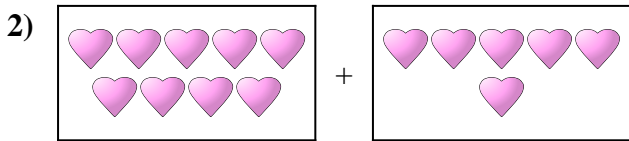
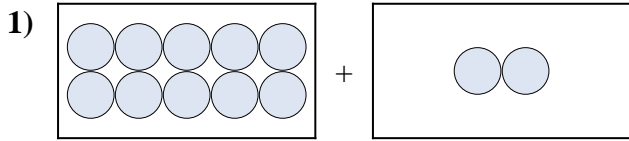
Réponses



1. _____
2. _____
3. _____
4. _____
5. _____
6. _____
7. _____
8. _____
9. _____
10. _____



Exprimez le problème visuel sous forme d'équation avec réponse.



Réponses

1. $10 + 2 = 12$

2. $9 + 6 = 15$

3. $2 + 10 = 12$

4. $9 + 8 = 17$

5. $1 + 7 = 8$

6. $1 + 6 = 7$

7. $8 + 1 = 9$

8. $4 + 7 = 11$

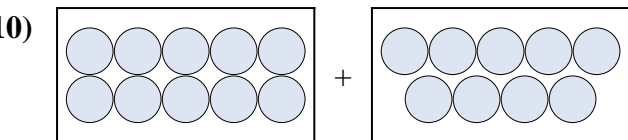
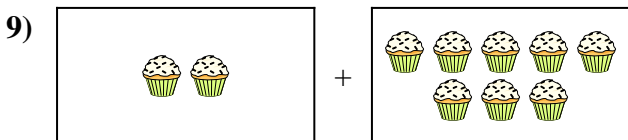
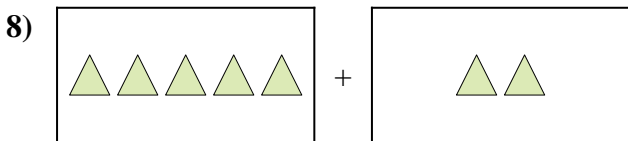
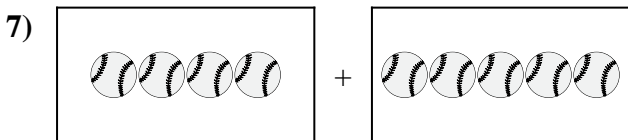
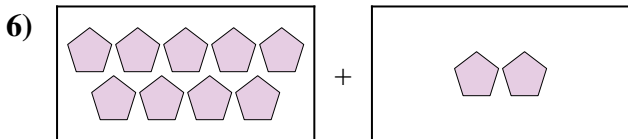
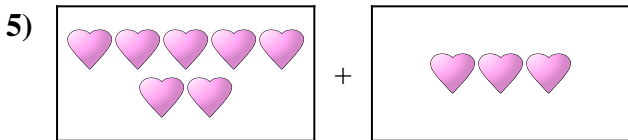
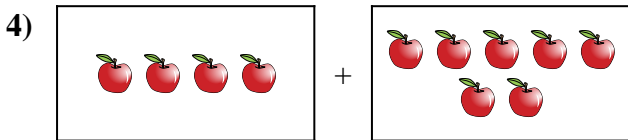
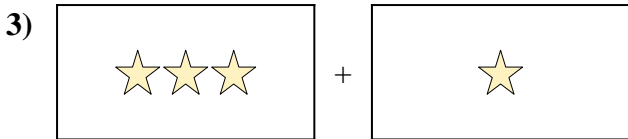
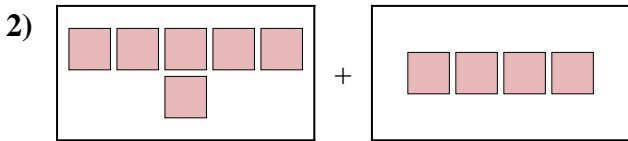
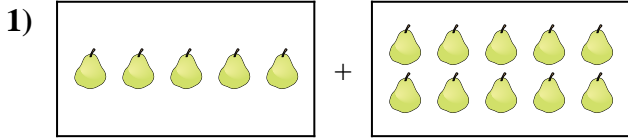
9. $7 + 7 = 14$

10. $9 + 7 = 16$



Exprimez le problème visuel sous forme d'équation avec réponse.

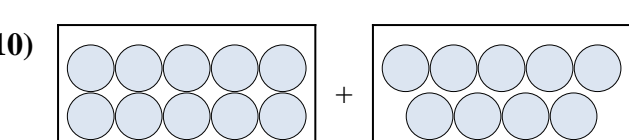
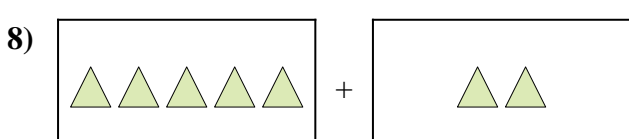
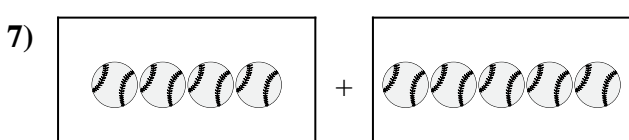
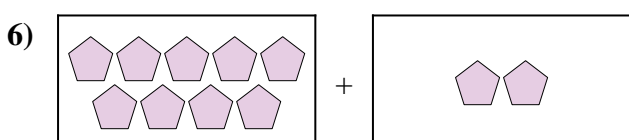
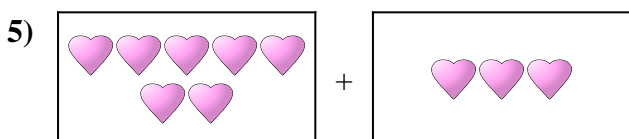
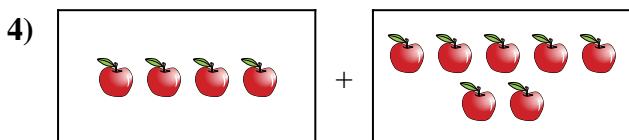
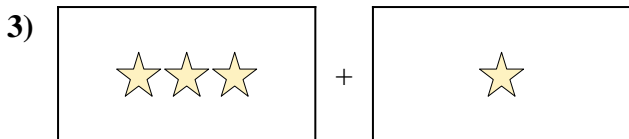
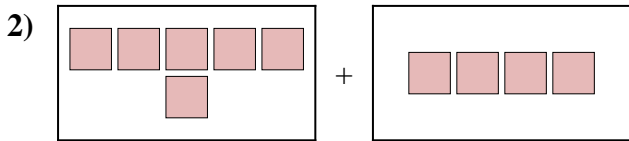
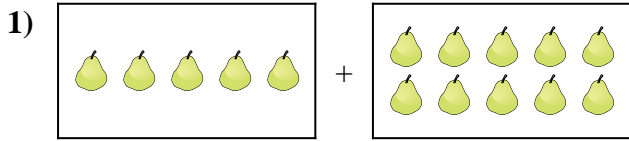
Réponses



1. _____
2. _____
3. _____
4. _____
5. _____
6. _____
7. _____
8. _____
9. _____
10. _____



Exprimez le problème visuel sous forme d'équation avec réponse.



Réponses

1. **5 + 10 = 15**

2. **6 + 4 = 10**

3. **3 + 1 = 4**

4. **4 + 7 = 11**

5. **7 + 3 = 10**

6. **9 + 2 = 11**

7. **4 + 5 = 9**

8. **5 + 2 = 7**

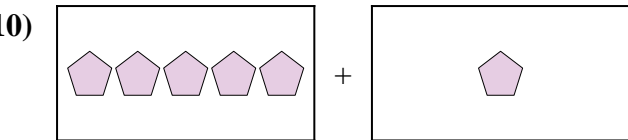
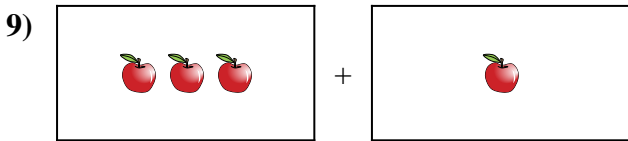
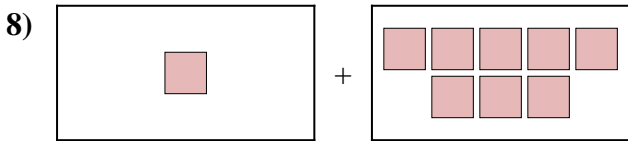
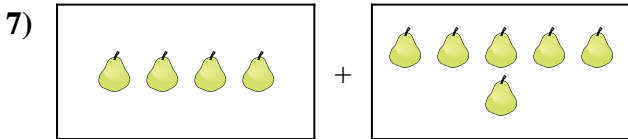

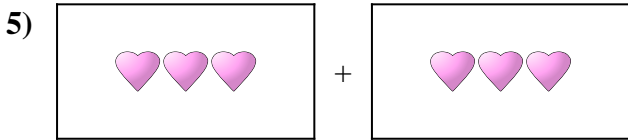
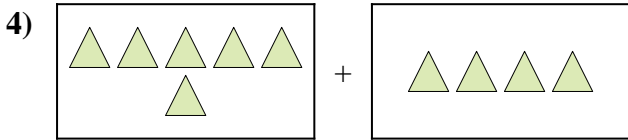
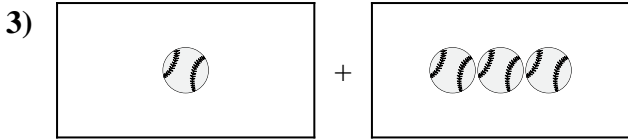
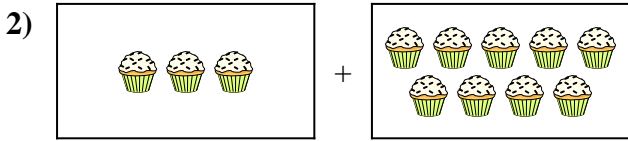
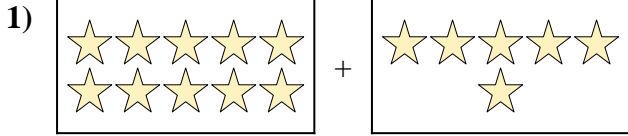
9. **2 + 8 = 10**

10. **10 + 9 = 19**



Exprimez le problème visuel sous forme d'équation avec réponse.

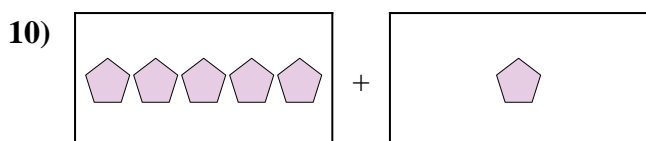
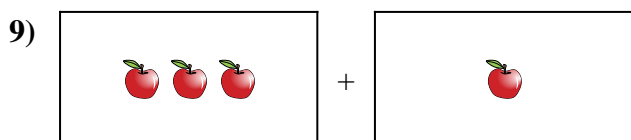
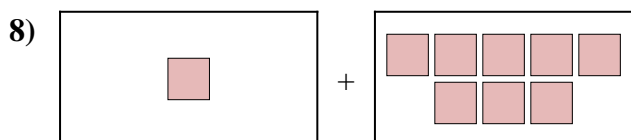
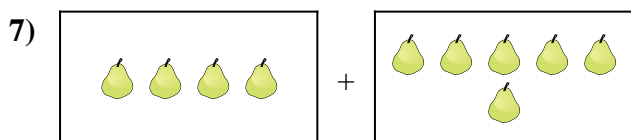

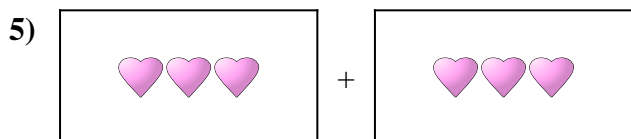
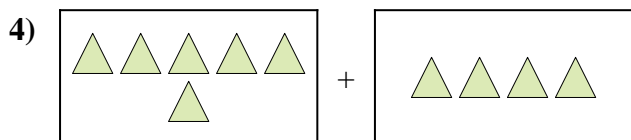
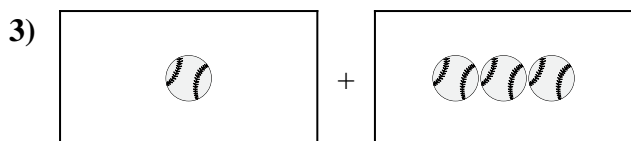

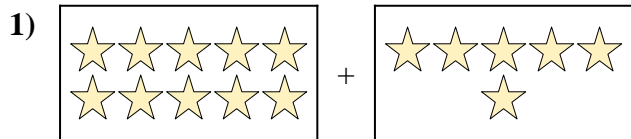
Réponses



1. _____
2. _____
3. _____
4. _____
5. _____
6. _____
7. _____
8. _____
9. _____
10. _____



Exprimez le problème visuel sous forme d'équation avec réponse.



Réponses

1. $10 + 6 = 16$

2. $3 + 9 = 12$

3. $1 + 3 = 4$

4. $6 + 4 = 10$

5. $3 + 3 = 6$

6. $7 + 3 = 10$

7. $4 + 6 = 10$

8. $1 + 8 = 9$

9. $3 + 1 = 4$

10. $5 + 1 = 6$