



Déterminez quelle lettre représente la somme.

1)  $\frac{2}{3} + \frac{2}{3}$

3)  $\frac{1}{2} + \frac{1}{2}$

5)  $\frac{1}{4} + \frac{2}{4}$

7)  $\frac{4}{8} + \frac{1}{8}$

9)  $\frac{6}{10} + \frac{9}{10}$

11)  $\frac{3}{10} + \frac{3}{10}$

13)  $\frac{2}{6} + \frac{4}{6}$

2)  $\frac{3}{5} + \frac{3}{5}$

4)  $\frac{2}{4} + \frac{3}{4}$

6)  $\frac{4}{12} + \frac{6}{12}$

8)  $\frac{2}{5} + \frac{1}{5}$

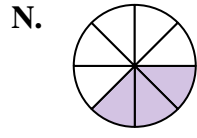
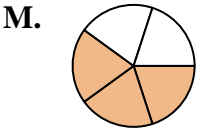
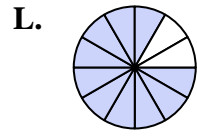
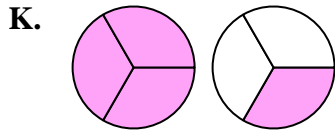
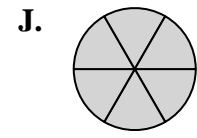
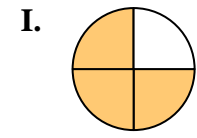
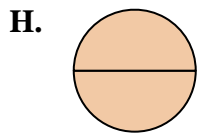
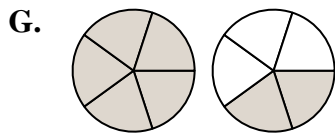
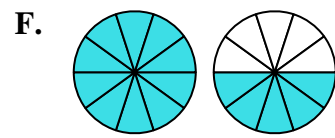
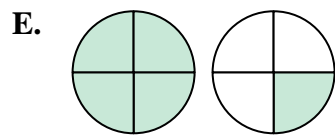
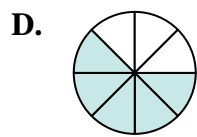
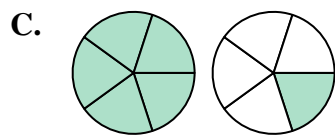
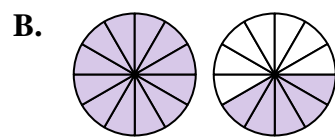
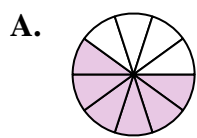
10)  $\frac{6}{12} + \frac{11}{12}$

12)  $\frac{2}{8} + \frac{1}{8}$

14)  $\frac{3}{5} + \frac{4}{5}$

**Réponses**

1. \_\_\_\_\_
2. \_\_\_\_\_
3. \_\_\_\_\_
4. \_\_\_\_\_
5. \_\_\_\_\_
6. \_\_\_\_\_
7. \_\_\_\_\_
8. \_\_\_\_\_
9. \_\_\_\_\_
10. \_\_\_\_\_
11. \_\_\_\_\_
12. \_\_\_\_\_
13. \_\_\_\_\_
14. \_\_\_\_\_





Déterminez quelle lettre représente la somme.

1)  $\frac{2}{3} + \frac{2}{3}$

3)  $\frac{1}{2} + \frac{1}{2}$

5)  $\frac{1}{4} + \frac{2}{4}$

7)  $\frac{4}{8} + \frac{1}{8}$

9)  $\frac{6}{10} + \frac{9}{10}$

11)  $\frac{3}{10} + \frac{3}{10}$

13)  $\frac{2}{6} + \frac{4}{6}$

2)  $\frac{3}{5} + \frac{3}{5}$

4)  $\frac{2}{4} + \frac{3}{4}$

6)  $\frac{4}{12} + \frac{6}{12}$

8)  $\frac{2}{5} + \frac{1}{5}$

10)  $\frac{6}{12} + \frac{11}{12}$

12)  $\frac{2}{8} + \frac{1}{8}$

14)  $\frac{3}{5} + \frac{4}{5}$

**Réponses**

1. **K**  $1\frac{1}{3}$

2. **C**  $1\frac{1}{5}$

3. **H**  $\frac{2}{2}$

4. **E**  $1\frac{1}{4}$

5. **I**  $\frac{3}{4}$

6. **L**  $\frac{10}{12}$

7. **D**  $\frac{5}{8}$

8. **M**  $\frac{3}{5}$

9. **F**  $1\frac{5}{10}$

10. **B**  $1\frac{5}{12}$

11. **A**  $\frac{6}{10}$

12. **N**  $\frac{3}{8}$

13. **J**  $\frac{6}{6}$

14. **G**  $1\frac{2}{5}$

