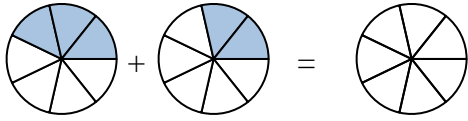




Ajoutez les fractions visuelles pour résoudre les problèmes.

**Réponses**

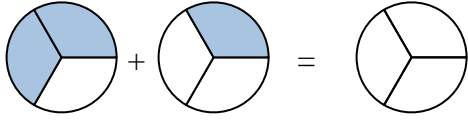
Ex)



Ex.  $\frac{3}{7}$   $\frac{2}{7}$   $\frac{5}{7}$

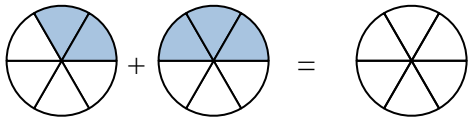
1. \_\_\_\_\_

1)



2. \_\_\_\_\_

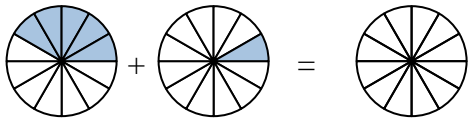
2)



3. \_\_\_\_\_

4. \_\_\_\_\_

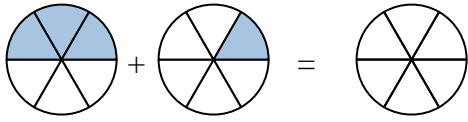
3)



5. \_\_\_\_\_

6. \_\_\_\_\_

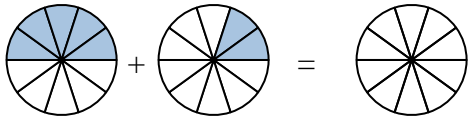
4)



7. \_\_\_\_\_

8. \_\_\_\_\_

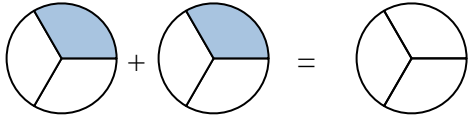
5)



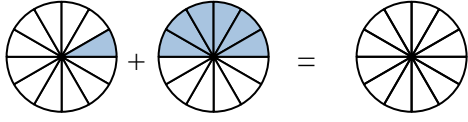
9. \_\_\_\_\_

10. \_\_\_\_\_

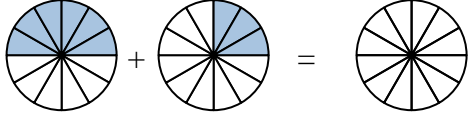
6)



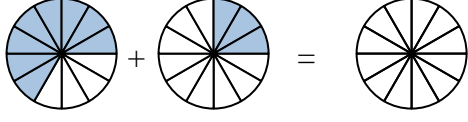
7)



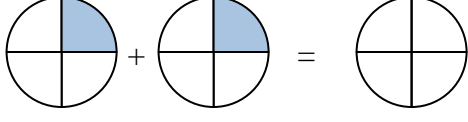
8)



9)

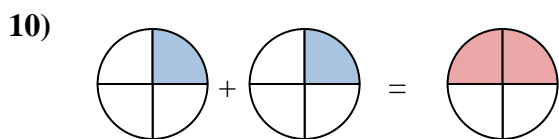
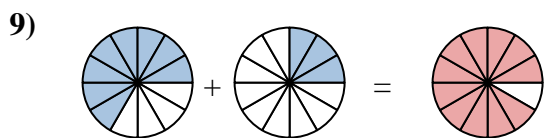
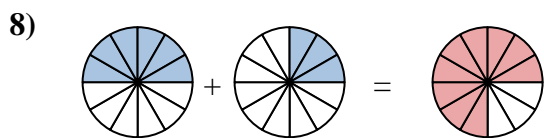
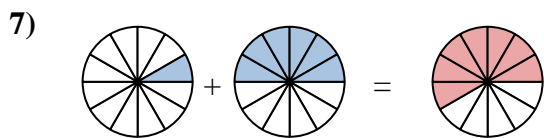
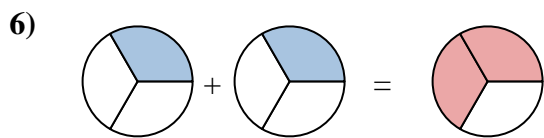
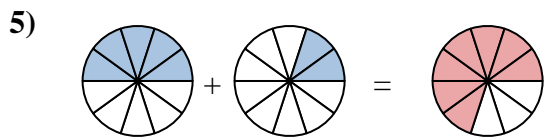
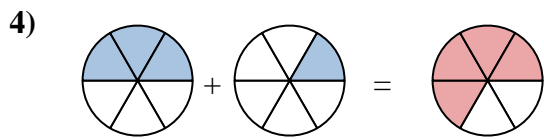
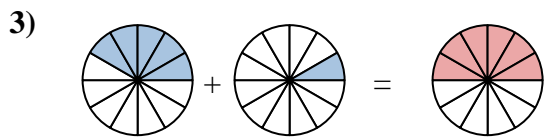
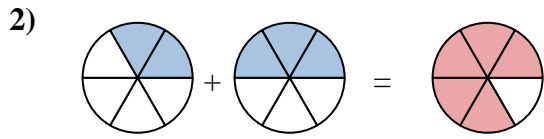
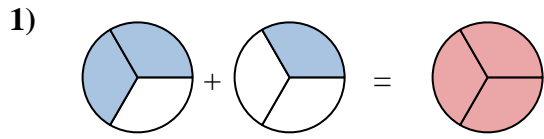
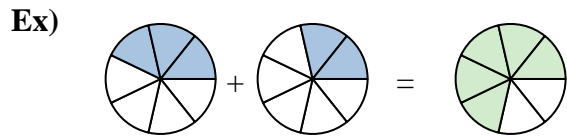


10)





Ajoutez les fractions visuelles pour résoudre les problèmes.



**Réponses**

Ex.	$\frac{3}{7}$	$\frac{2}{7}$	$\frac{5}{7}$
1.	$\frac{2}{3}$	$\frac{1}{3}$	$\frac{3}{3}$
2.	$\frac{2}{6}$	$\frac{3}{6}$	$\frac{5}{6}$
3.	$\frac{5}{12}$	$\frac{1}{12}$	$\frac{6}{12}$
4.	$\frac{3}{6}$	$\frac{1}{6}$	$\frac{4}{6}$
5.	$\frac{5}{10}$	$\frac{2}{10}$	$\frac{7}{10}$
6.	$\frac{1}{3}$	$\frac{1}{3}$	$\frac{2}{3}$
7.	$\frac{1}{12}$	$\frac{6}{12}$	$\frac{7}{12}$
8.	$\frac{6}{12}$	$\frac{3}{12}$	$\frac{9}{12}$
9.	$\frac{8}{12}$	$\frac{3}{12}$	$\frac{11}{12}$
10.	$\frac{1}{4}$	$\frac{1}{4}$	$\frac{2}{4}$