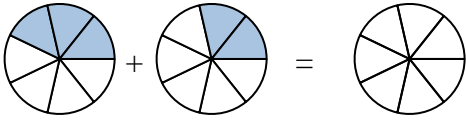




Ajoutez les fractions visuelles pour résoudre les problèmes.

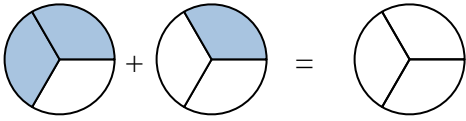
**Réponses**

Ex)



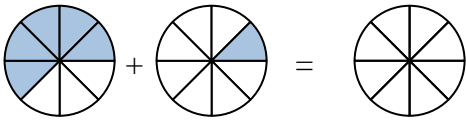
Ex.  $\frac{3}{7}$     $\frac{2}{7}$     $\frac{5}{7}$

1)



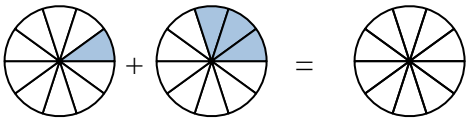
1. \_\_\_\_\_

2)



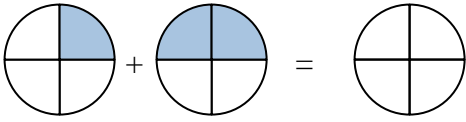
2. \_\_\_\_\_

3)



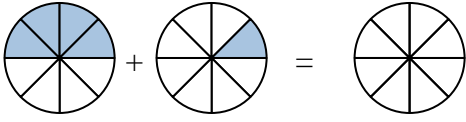
3. \_\_\_\_\_

4)



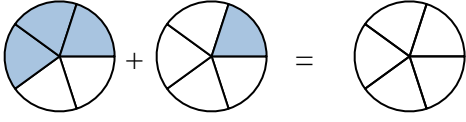
4. \_\_\_\_\_

5)



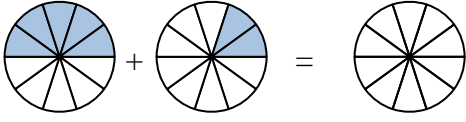
5. \_\_\_\_\_

6)



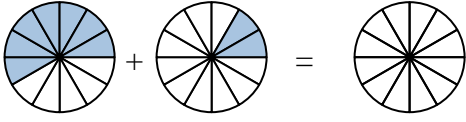
6. \_\_\_\_\_

7)



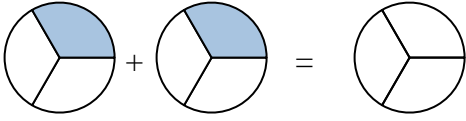
7. \_\_\_\_\_

8)



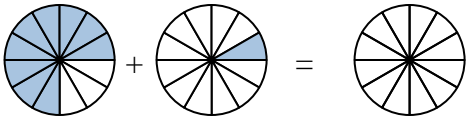
8. \_\_\_\_\_

9)



9. \_\_\_\_\_

10)

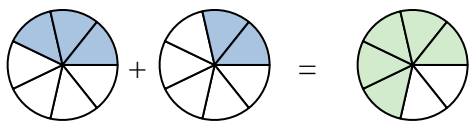


10. \_\_\_\_\_



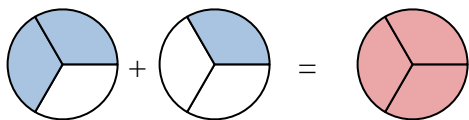
Ajoutez les fractions visuelles pour résoudre les problèmes.

Ex)



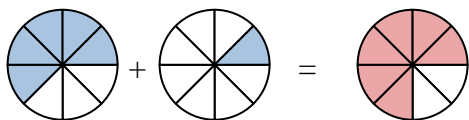
Ex.  $\frac{3}{7}$   $\frac{2}{7}$   $\frac{5}{7}$

1)



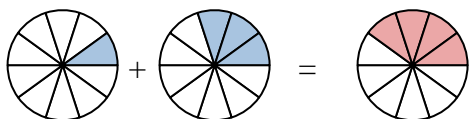
1.  $\frac{2}{3}$   $\frac{1}{3}$   $\frac{3}{3}$

2)



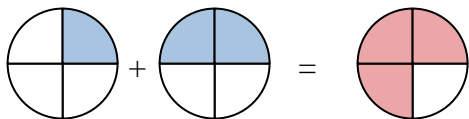
2.  $\frac{5}{8}$   $\frac{1}{8}$   $\frac{6}{8}$

3)



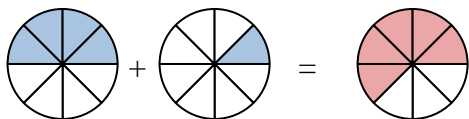
3.  $\frac{1}{10}$   $\frac{3}{10}$   $\frac{4}{10}$

4)



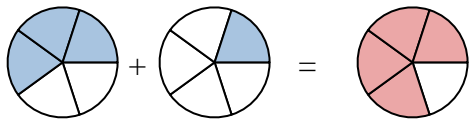
4.  $\frac{1}{4}$   $\frac{2}{4}$   $\frac{3}{4}$

5)



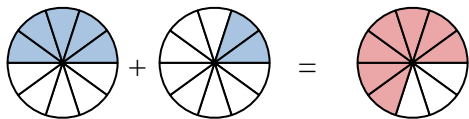
5.  $\frac{4}{8}$   $\frac{1}{8}$   $\frac{5}{8}$

6)



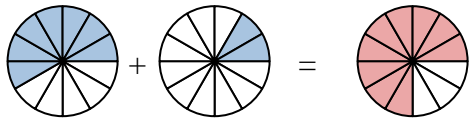
6.  $\frac{3}{5}$   $\frac{1}{5}$   $\frac{4}{5}$

7)



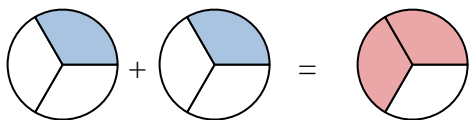
7.  $\frac{5}{10}$   $\frac{2}{10}$   $\frac{7}{10}$

8)



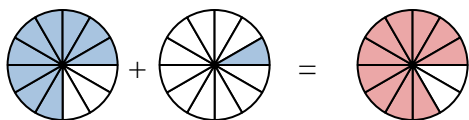
8.  $\frac{7}{12}$   $\frac{2}{12}$   $\frac{9}{12}$

9)



9.  $\frac{1}{3}$   $\frac{1}{3}$   $\frac{2}{3}$

10)



10.  $\frac{9}{12}$   $\frac{1}{12}$   $\frac{10}{12}$

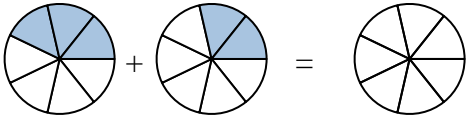
**Réponses**



Ajoutez les fractions visuelles pour résoudre les problèmes.

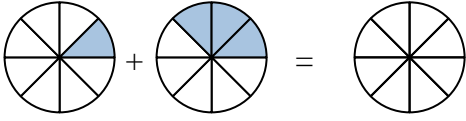
**Réponses**

Ex)



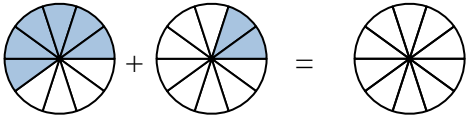
Ex.  $\frac{3}{7}$     $\frac{2}{7}$     $\frac{5}{7}$

1)



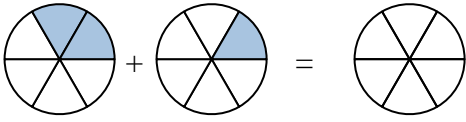
1. \_\_\_\_\_

2)



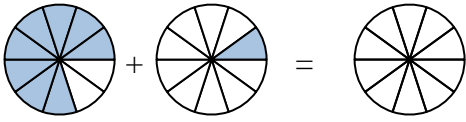
2. \_\_\_\_\_

3)



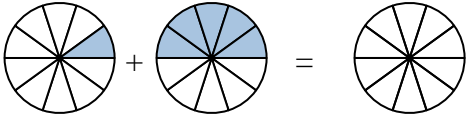
3. \_\_\_\_\_

4)



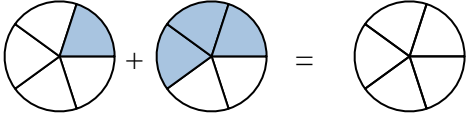
4. \_\_\_\_\_

5)



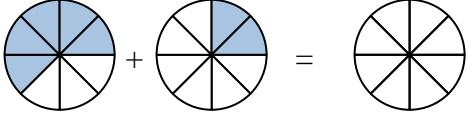
5. \_\_\_\_\_

6)



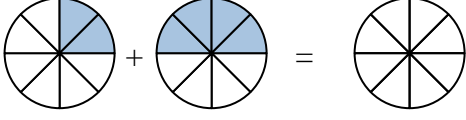
6. \_\_\_\_\_

7)



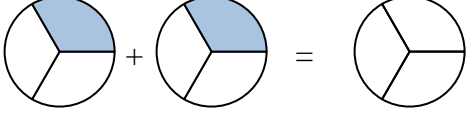
7. \_\_\_\_\_

8)



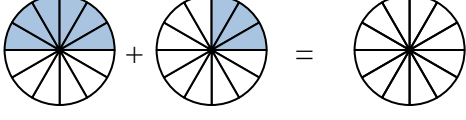
8. \_\_\_\_\_

9)



9. \_\_\_\_\_

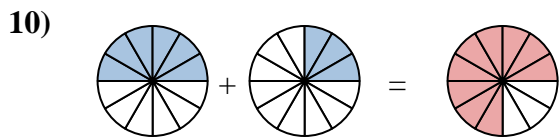
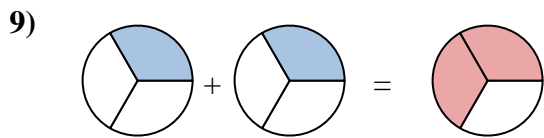
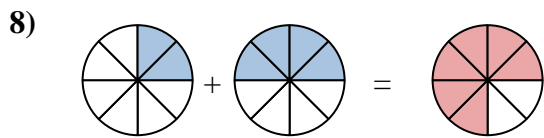
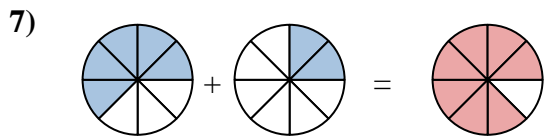
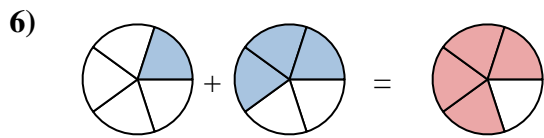
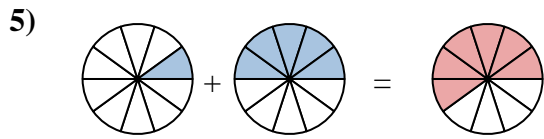
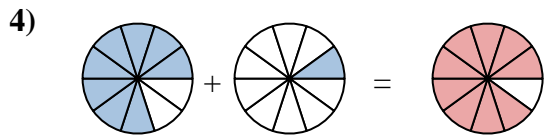
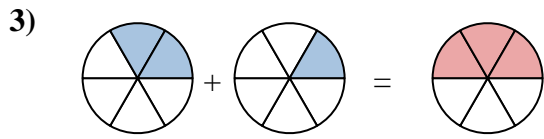
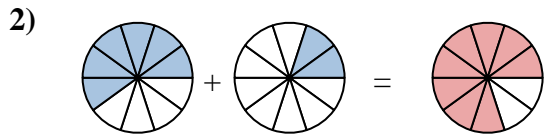
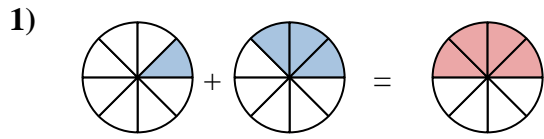
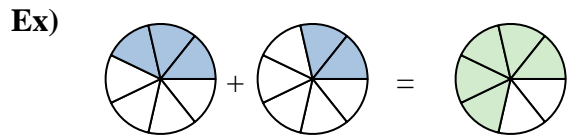
10)



10. \_\_\_\_\_



Ajoutez les fractions visuelles pour résoudre les problèmes.



**Réponses**

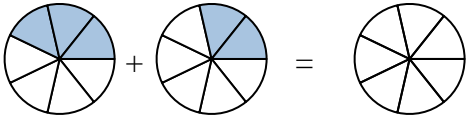
Ex.	$\frac{3}{7}$	$\frac{2}{7}$	$\frac{5}{7}$
1.	$\frac{1}{8}$	$\frac{3}{8}$	$\frac{4}{8}$
2.	$\frac{6}{10}$	$\frac{2}{10}$	$\frac{8}{10}$
3.	$\frac{2}{6}$	$\frac{1}{6}$	$\frac{3}{6}$
4.	$\frac{8}{10}$	$\frac{1}{10}$	$\frac{9}{10}$
5.	$\frac{1}{10}$	$\frac{5}{10}$	$\frac{6}{10}$
6.	$\frac{1}{5}$	$\frac{3}{5}$	$\frac{4}{5}$
7.	$\frac{5}{8}$	$\frac{2}{8}$	$\frac{7}{8}$
8.	$\frac{2}{8}$	$\frac{4}{8}$	$\frac{6}{8}$
9.	$\frac{1}{3}$	$\frac{1}{3}$	$\frac{2}{3}$
10.	$\frac{6}{12}$	$\frac{3}{12}$	$\frac{9}{12}$



Ajoutez les fractions visuelles pour résoudre les problèmes.

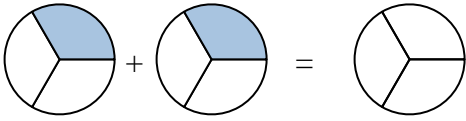
**Réponses**

Ex)



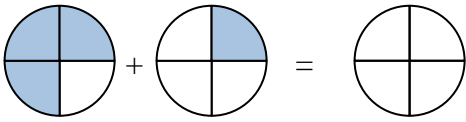
Ex.  $\frac{3}{7}$      $\frac{2}{7}$      $\frac{5}{7}$

1)



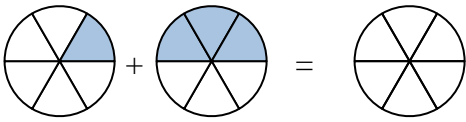
1. \_\_\_\_\_

2)



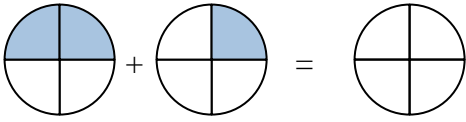
2. \_\_\_\_\_

3)



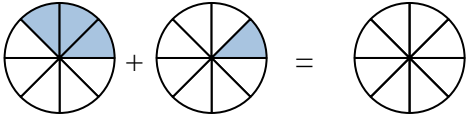
3. \_\_\_\_\_

4)



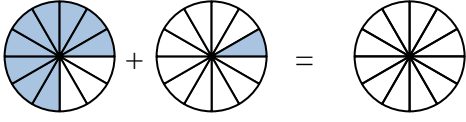
4. \_\_\_\_\_

5)



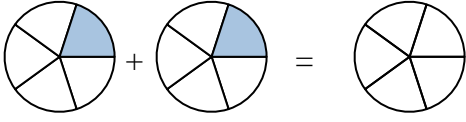
5. \_\_\_\_\_

6)



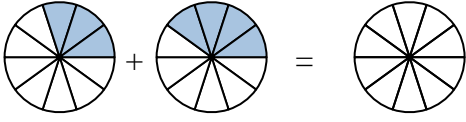
6. \_\_\_\_\_

7)



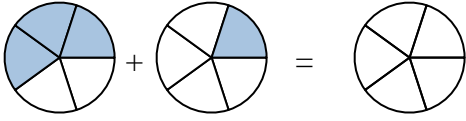
7. \_\_\_\_\_

8)



8. \_\_\_\_\_

9)



9. \_\_\_\_\_

10)

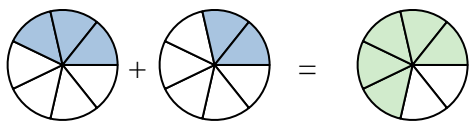


10. \_\_\_\_\_



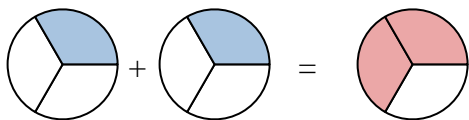
Ajoutez les fractions visuelles pour résoudre les problèmes.

Ex)



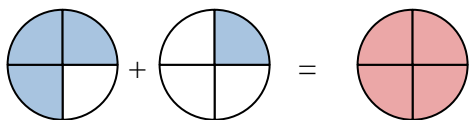
Ex.  $\frac{3}{7}$   $\frac{2}{7}$   $\frac{5}{7}$

1)



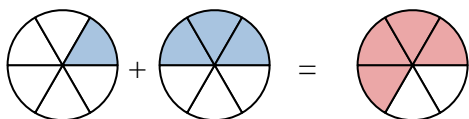
1.  $\frac{1}{3}$   $\frac{1}{3}$   $\frac{2}{3}$

2)



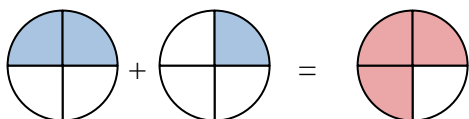
2.  $\frac{3}{4}$   $\frac{1}{4}$   $\frac{4}{4}$

3)



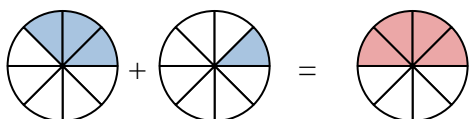
3.  $\frac{1}{6}$   $\frac{3}{6}$   $\frac{4}{6}$

4)



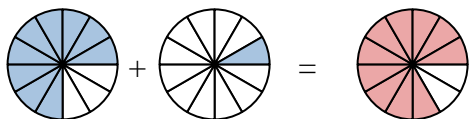
4.  $\frac{2}{4}$   $\frac{1}{4}$   $\frac{3}{4}$

5)



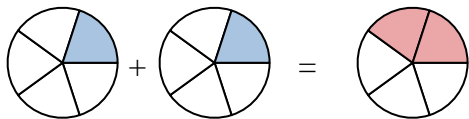
5.  $\frac{3}{8}$   $\frac{1}{8}$   $\frac{4}{8}$

6)



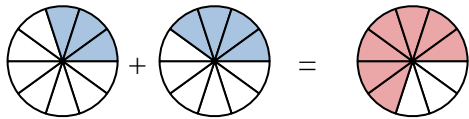
6.  $\frac{9}{12}$   $\frac{1}{12}$   $\frac{10}{12}$

7)



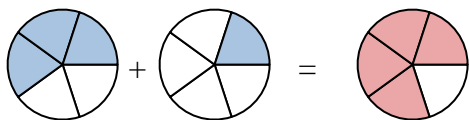
7.  $\frac{1}{5}$   $\frac{1}{5}$   $\frac{2}{5}$

8)



8.  $\frac{3}{10}$   $\frac{4}{10}$   $\frac{7}{10}$

9)



9.  $\frac{3}{5}$   $\frac{1}{5}$   $\frac{4}{5}$

10)



10.  $\frac{1}{5}$   $\frac{2}{5}$   $\frac{3}{5}$

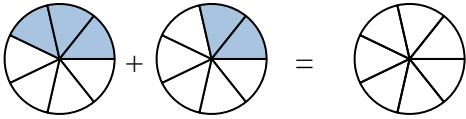
**Réponses**



Ajoutez les fractions visuelles pour résoudre les problèmes.

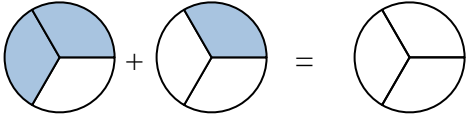
**Réponses**

Ex)



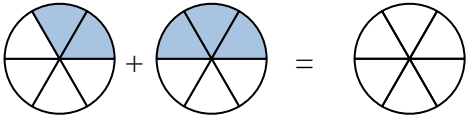
Ex.  $\frac{3}{7}$     $\frac{2}{7}$     $\frac{5}{7}$

1)



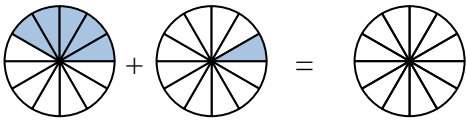
1. \_\_\_\_\_

2)



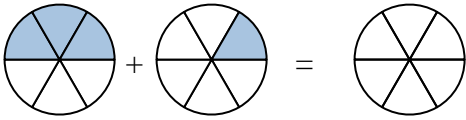
2. \_\_\_\_\_

3)



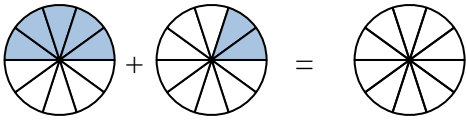
3. \_\_\_\_\_

4)



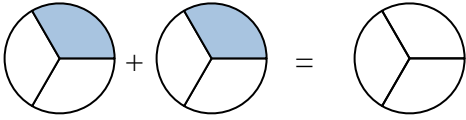
4. \_\_\_\_\_

5)



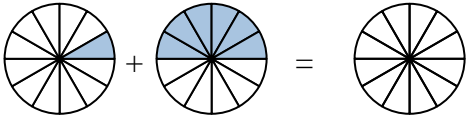
5. \_\_\_\_\_

6)



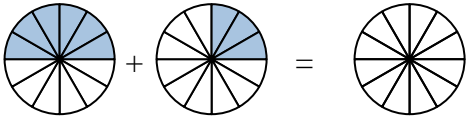
6. \_\_\_\_\_

7)



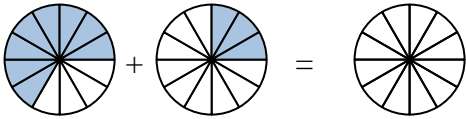
7. \_\_\_\_\_

8)



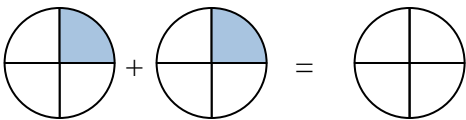
8. \_\_\_\_\_

9)



9. \_\_\_\_\_

10)

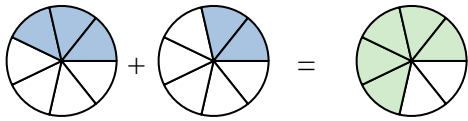


10. \_\_\_\_\_

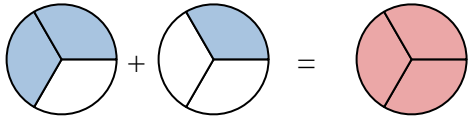


Ajoutez les fractions visuelles pour résoudre les problèmes.

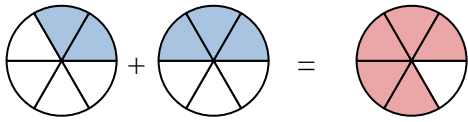
Ex)



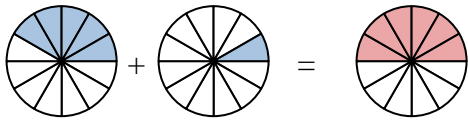
1)



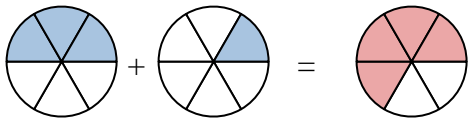
2)



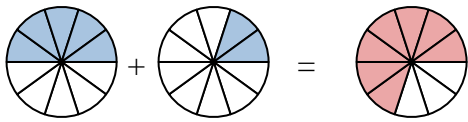
3)



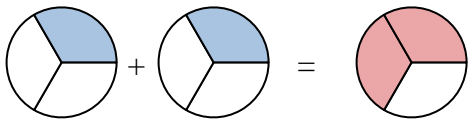
4)



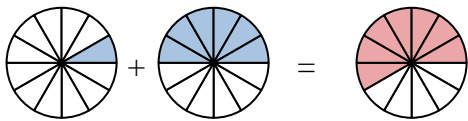
5)



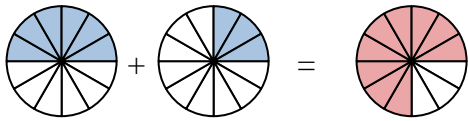
6)



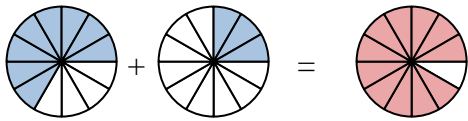
7)



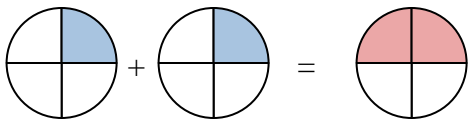
8)



9)



10)



**Réponses**

Ex.	$\frac{3}{7}$	$\frac{2}{7}$	$\frac{5}{7}$
1.	$\frac{2}{3}$	$\frac{1}{3}$	$\frac{3}{3}$
2.	$\frac{2}{6}$	$\frac{3}{6}$	$\frac{5}{6}$
3.	$\frac{5}{12}$	$\frac{1}{12}$	$\frac{6}{12}$
4.	$\frac{3}{6}$	$\frac{1}{6}$	$\frac{4}{6}$
5.	$\frac{5}{10}$	$\frac{2}{10}$	$\frac{7}{10}$
6.	$\frac{1}{3}$	$\frac{1}{3}$	$\frac{2}{3}$
7.	$\frac{1}{12}$	$\frac{6}{12}$	$\frac{7}{12}$
8.	$\frac{6}{12}$	$\frac{3}{12}$	$\frac{9}{12}$
9.	$\frac{8}{12}$	$\frac{3}{12}$	$\frac{11}{12}$
10.	$\frac{1}{4}$	$\frac{1}{4}$	$\frac{2}{4}$

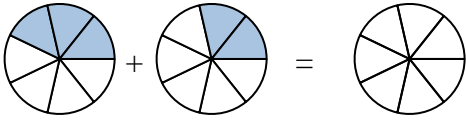




Ajoutez les fractions visuelles pour résoudre les problèmes.

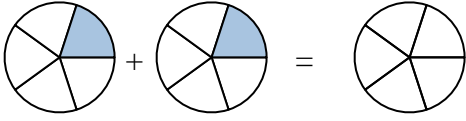
**Réponses**

Ex)



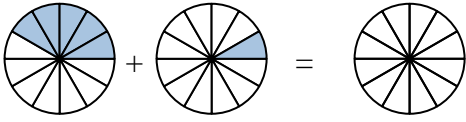
Ex.  $\frac{3}{7}$     $\frac{2}{7}$     $\frac{5}{7}$

1)



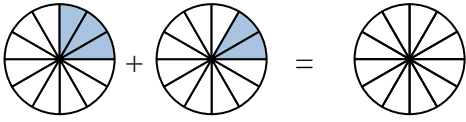
1. \_\_\_\_\_

2)



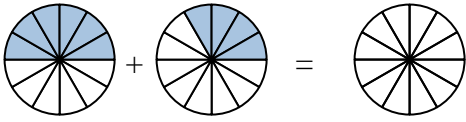
2. \_\_\_\_\_

3)



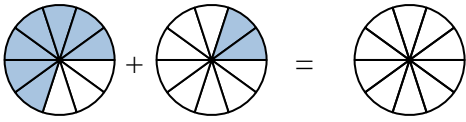
3. \_\_\_\_\_

4)



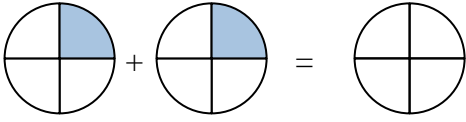
4. \_\_\_\_\_

5)



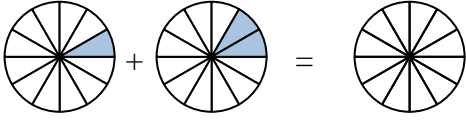
5. \_\_\_\_\_

6)



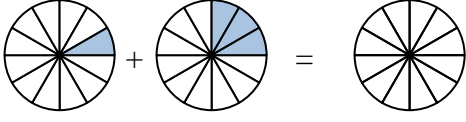
6. \_\_\_\_\_

7)



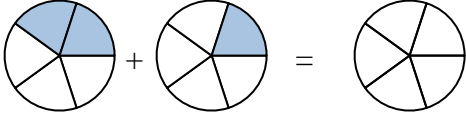
7. \_\_\_\_\_

8)



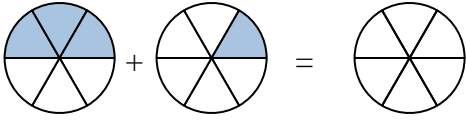
8. \_\_\_\_\_

9)



9. \_\_\_\_\_

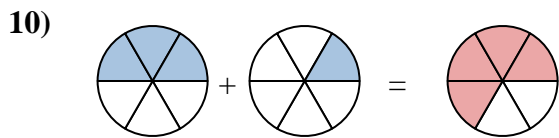
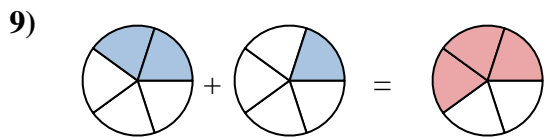
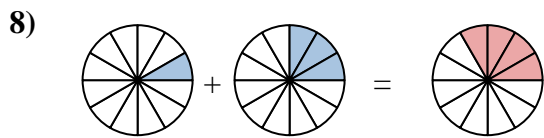
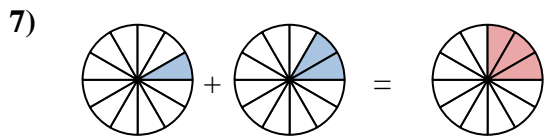
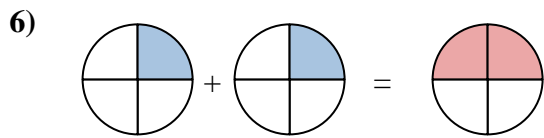
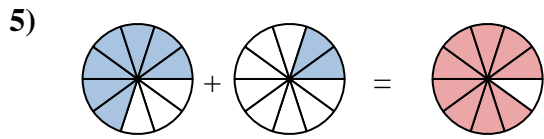
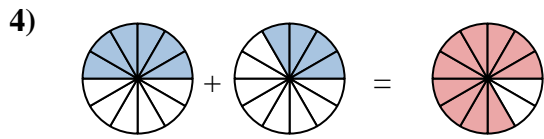
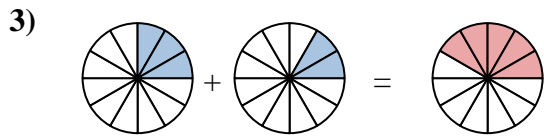
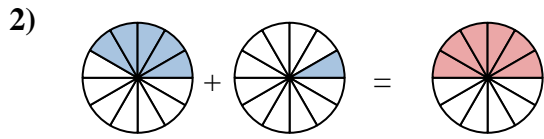
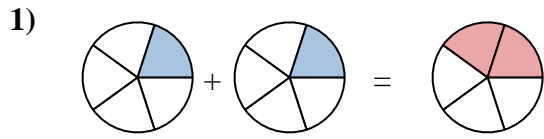
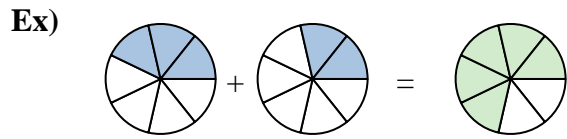
10)



10. \_\_\_\_\_



Ajoutez les fractions visuelles pour résoudre les problèmes.



**Réponses**

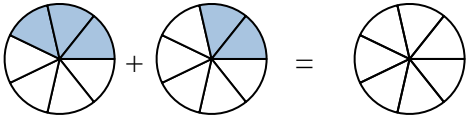
Ex.	$\frac{3}{7}$	$\frac{2}{7}$	$\frac{5}{7}$
1.	$\frac{1}{5}$	$\frac{1}{5}$	$\frac{2}{5}$
2.	$\frac{5}{12}$	$\frac{1}{12}$	$\frac{6}{12}$
3.	$\frac{3}{12}$	$\frac{2}{12}$	$\frac{5}{12}$
4.	$\frac{6}{12}$	$\frac{4}{12}$	$\frac{10}{12}$
5.	$\frac{7}{10}$	$\frac{2}{10}$	$\frac{9}{10}$
6.	$\frac{1}{4}$	$\frac{1}{4}$	$\frac{2}{4}$
7.	$\frac{1}{12}$	$\frac{2}{12}$	$\frac{3}{12}$
8.	$\frac{1}{12}$	$\frac{3}{12}$	$\frac{4}{12}$
9.	$\frac{2}{5}$	$\frac{1}{5}$	$\frac{3}{5}$
10.	$\frac{3}{6}$	$\frac{1}{6}$	$\frac{4}{6}$



Ajoutez les fractions visuelles pour résoudre les problèmes.

**Réponses**

Ex)



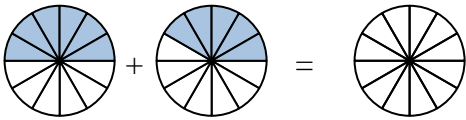
Ex.  $\frac{3}{7}$     $\frac{2}{7}$     $\frac{5}{7}$

1)



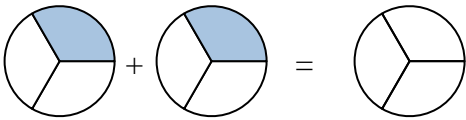
1. \_\_\_\_\_

2)



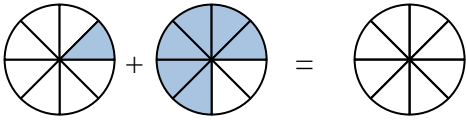
2. \_\_\_\_\_

3)



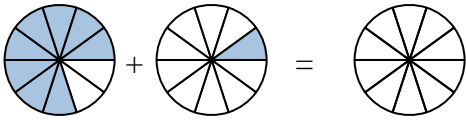
3. \_\_\_\_\_

4)



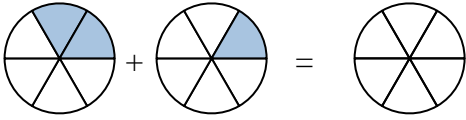
4. \_\_\_\_\_

5)



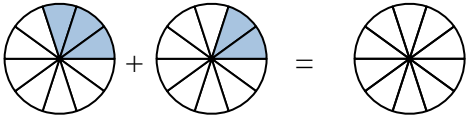
5. \_\_\_\_\_

6)



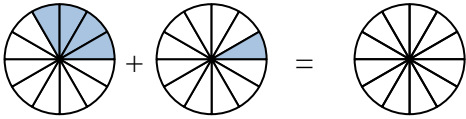
6. \_\_\_\_\_

7)



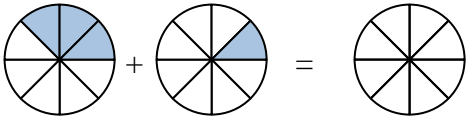
7. \_\_\_\_\_

8)



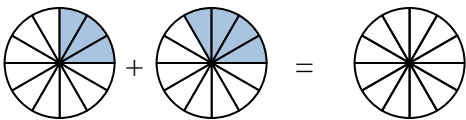
8. \_\_\_\_\_

9)



9. \_\_\_\_\_

10)



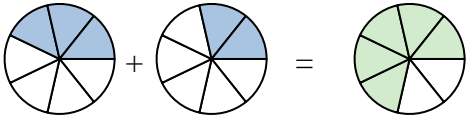
10. \_\_\_\_\_



Ajoutez les fractions visuelles pour résoudre les problèmes.

**Réponses**

Ex)



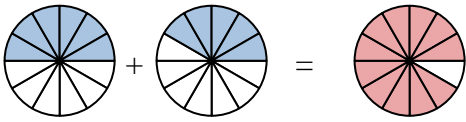
Ex.  $\frac{3}{7}$     $\frac{2}{7}$     $\frac{5}{7}$

1)



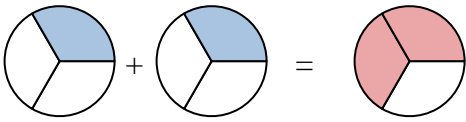
1.  $\frac{2}{5}$     $\frac{3}{5}$     $\frac{5}{5}$

2)



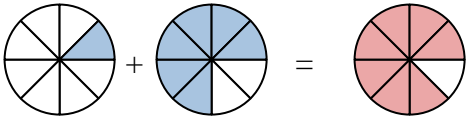
2.  $\frac{4}{8}$     $\frac{4}{8}$     $\frac{8}{8}$

3)



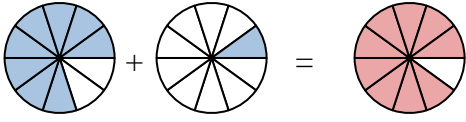
3.  $\frac{2}{3}$     $\frac{1}{3}$     $\frac{3}{3}$

4)



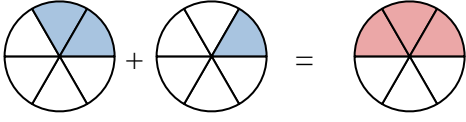
4.  $\frac{1}{8}$     $\frac{7}{8}$     $\frac{8}{8}$

5)



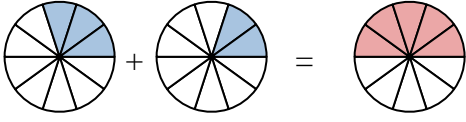
5.  $\frac{4}{10}$     $\frac{6}{10}$     $\frac{10}{10}$

6)



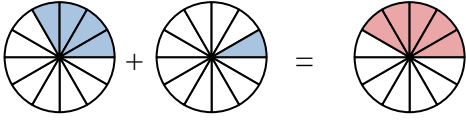
6.  $\frac{2}{6}$     $\frac{4}{6}$     $\frac{6}{6}$

7)



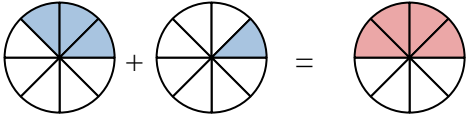
7.  $\frac{3}{12}$     $\frac{9}{12}$     $\frac{12}{12}$

8)



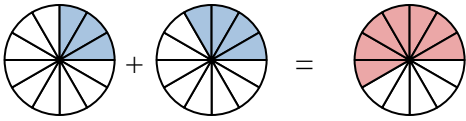
8.  $\frac{4}{10}$     $\frac{6}{10}$     $\frac{10}{10}$

9)



9.  $\frac{3}{8}$     $\frac{5}{8}$     $\frac{8}{8}$

10)



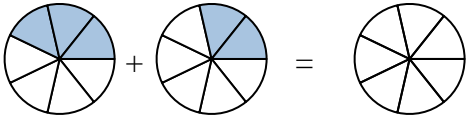
10.  $\frac{4}{12}$     $\frac{8}{12}$     $\frac{12}{12}$



Ajoutez les fractions visuelles pour résoudre les problèmes.

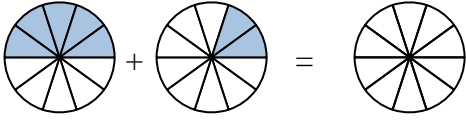
**Réponses**

Ex)



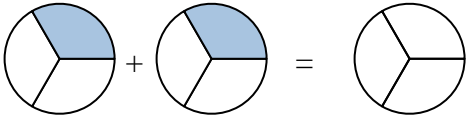
Ex.  $\frac{3}{7}$      $\frac{2}{7}$      $\frac{5}{7}$

1)



1. \_\_\_\_\_

2)



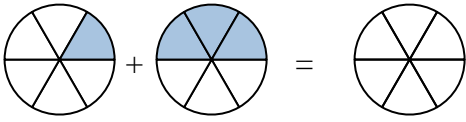
2. \_\_\_\_\_

3)



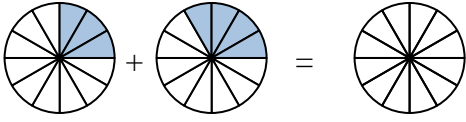
3. \_\_\_\_\_

4)



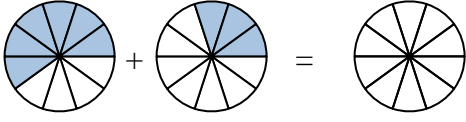
4. \_\_\_\_\_

5)



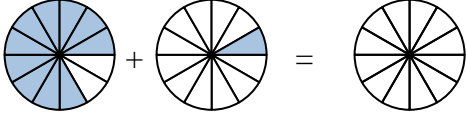
5. \_\_\_\_\_

6)



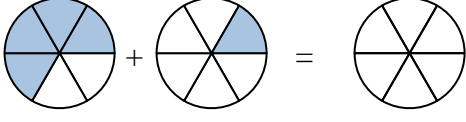
6. \_\_\_\_\_

7)



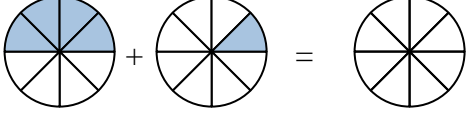
7. \_\_\_\_\_

8)



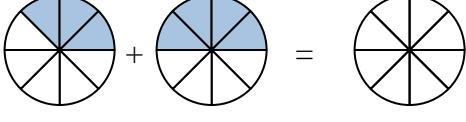
8. \_\_\_\_\_

9)



9. \_\_\_\_\_

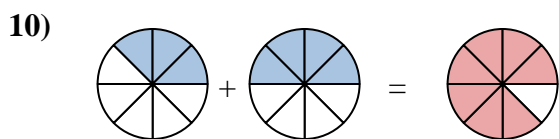
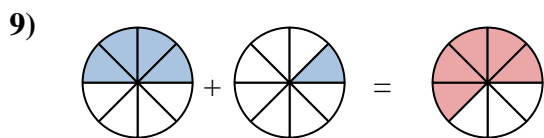
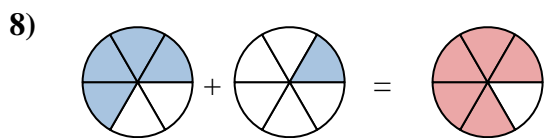
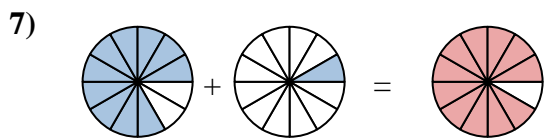
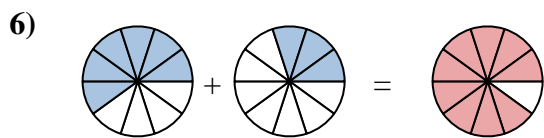
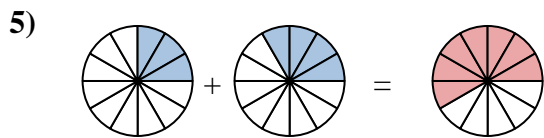
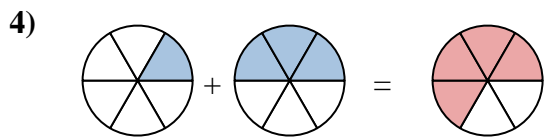
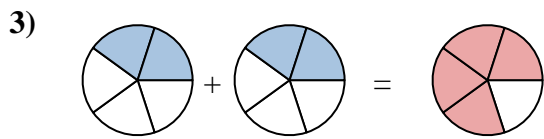
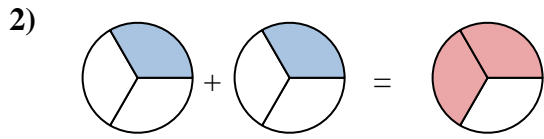
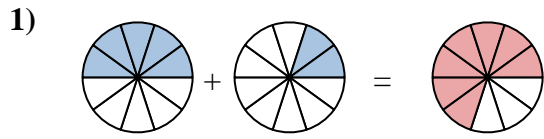
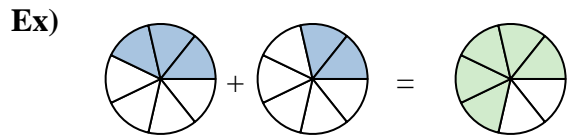
10)



10. \_\_\_\_\_



Ajoutez les fractions visuelles pour résoudre les problèmes.



**Réponses**

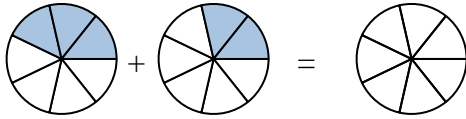
Ex.	$\frac{3}{7}$	$\frac{2}{7}$	$\frac{5}{7}$
1.	$\frac{5}{10}$	$\frac{2}{10}$	$\frac{7}{10}$
2.	$\frac{1}{3}$	$\frac{1}{3}$	$\frac{2}{3}$
3.	$\frac{2}{5}$	$\frac{2}{5}$	$\frac{4}{5}$
4.	$\frac{1}{6}$	$\frac{3}{6}$	$\frac{4}{6}$
5.	$\frac{3}{12}$	$\frac{4}{12}$	$\frac{7}{12}$
6.	$\frac{6}{10}$	$\frac{3}{10}$	$\frac{9}{10}$
7.	$\frac{10}{12}$	$\frac{1}{12}$	$\frac{11}{12}$
8.	$\frac{4}{6}$	$\frac{1}{6}$	$\frac{5}{6}$
9.	$\frac{4}{8}$	$\frac{1}{8}$	$\frac{5}{8}$
10.	$\frac{3}{8}$	$\frac{4}{8}$	$\frac{7}{8}$



Ajoutez les fractions visuelles pour résoudre les problèmes.

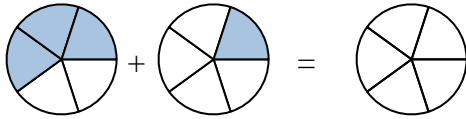
**Réponses**

Ex)



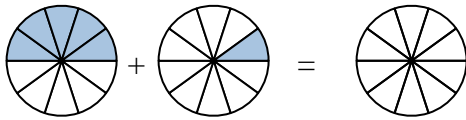
Ex.  $\frac{3}{7}$     $\frac{2}{7}$     $\frac{5}{7}$

1)



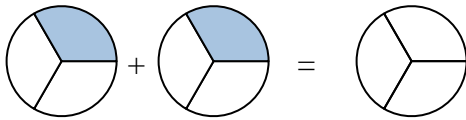
1. \_\_\_\_\_

2)



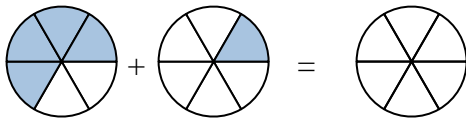
2. \_\_\_\_\_

3)



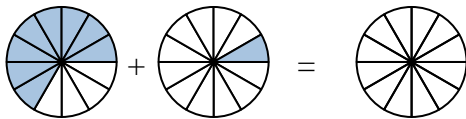
3. \_\_\_\_\_

4)



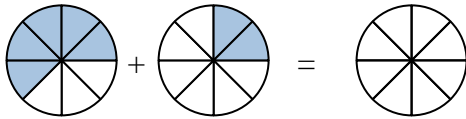
4. \_\_\_\_\_

5)



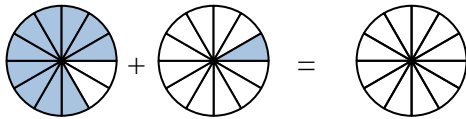
5. \_\_\_\_\_

6)



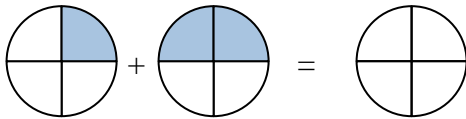
6. \_\_\_\_\_

7)



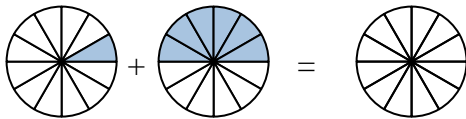
7. \_\_\_\_\_

8)



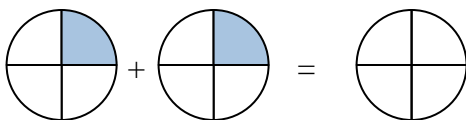
8. \_\_\_\_\_

9)



9. \_\_\_\_\_

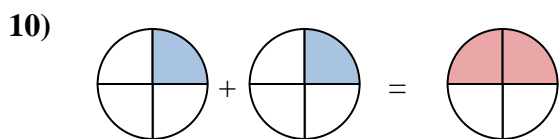
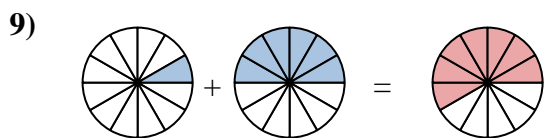
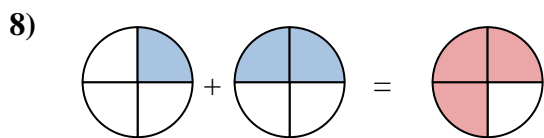
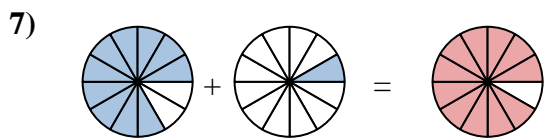
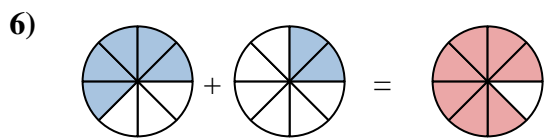
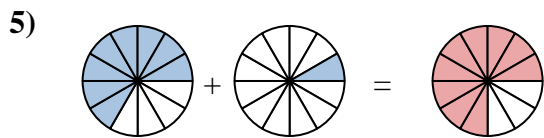
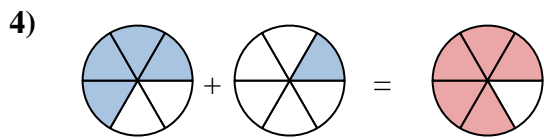
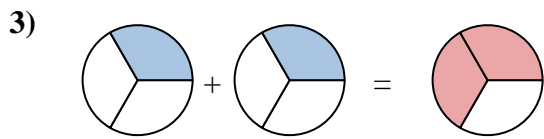
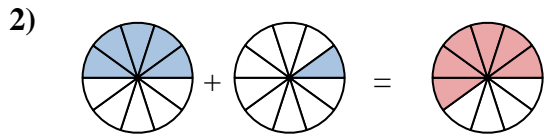
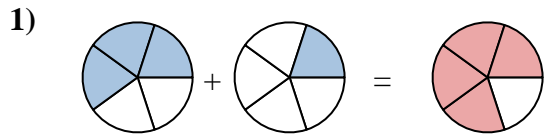
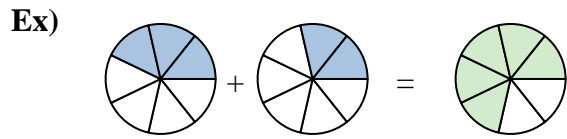
10)



10. \_\_\_\_\_



Ajoutez les fractions visuelles pour résoudre les problèmes.



**Réponses**

Ex.	$\frac{3}{7}$	$\frac{2}{7}$	$\frac{5}{7}$
1.	$\frac{3}{5}$	$\frac{1}{5}$	$\frac{4}{5}$
2.	$\frac{5}{10}$	$\frac{1}{10}$	$\frac{6}{10}$
3.	$\frac{1}{3}$	$\frac{1}{3}$	$\frac{2}{3}$
4.	$\frac{4}{6}$	$\frac{1}{6}$	$\frac{5}{6}$
5.	$\frac{8}{12}$	$\frac{1}{12}$	$\frac{9}{12}$
6.	$\frac{5}{8}$	$\frac{2}{8}$	$\frac{7}{8}$
7.	$\frac{10}{12}$	$\frac{1}{12}$	$\frac{11}{12}$
8.	$\frac{1}{4}$	$\frac{2}{4}$	$\frac{3}{4}$
9.	$\frac{1}{12}$	$\frac{6}{12}$	$\frac{7}{12}$
10.	$\frac{1}{4}$	$\frac{1}{4}$	$\frac{2}{4}$

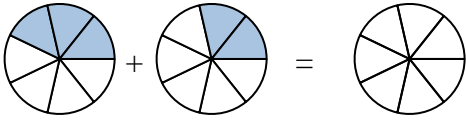




Ajoutez les fractions visuelles pour résoudre les problèmes.

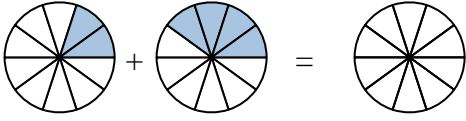
**Réponses**

Ex)



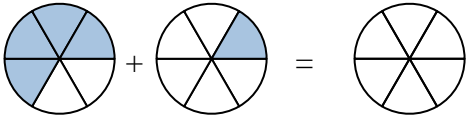
Ex.  $\frac{3}{7}$     $\frac{2}{7}$     $\frac{5}{7}$

1)



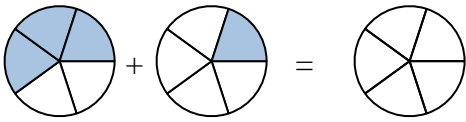
1. \_\_\_\_\_

2)



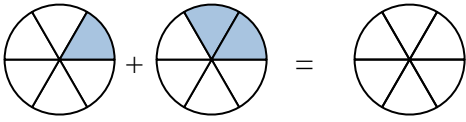
2. \_\_\_\_\_

3)



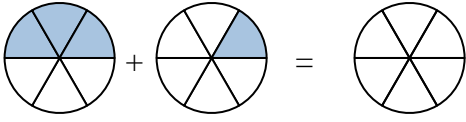
3. \_\_\_\_\_

4)



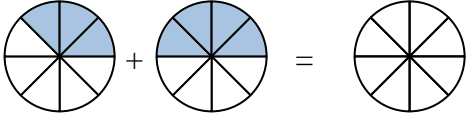
4. \_\_\_\_\_

5)



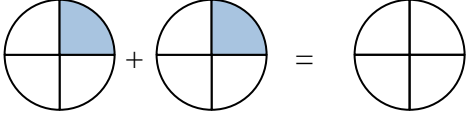
5. \_\_\_\_\_

6)



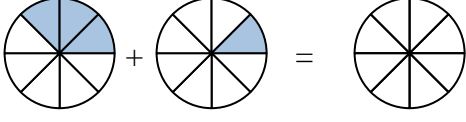
6. \_\_\_\_\_

7)



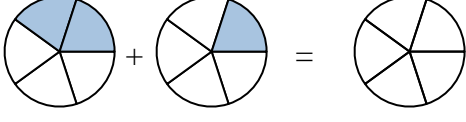
7. \_\_\_\_\_

8)



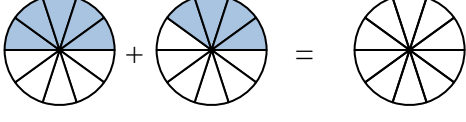
8. \_\_\_\_\_

9)



9. \_\_\_\_\_

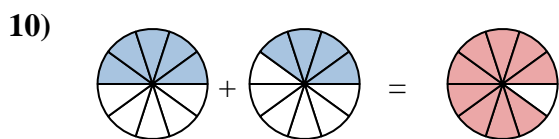
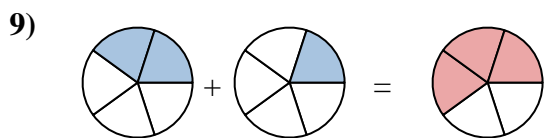
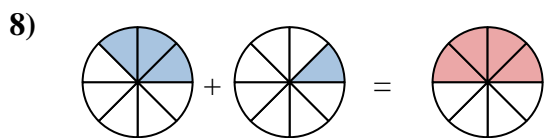
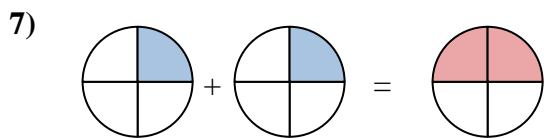
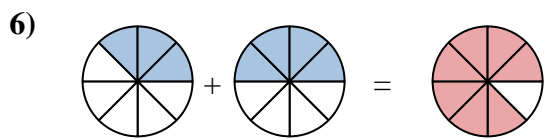
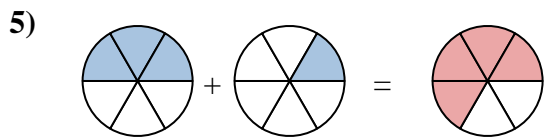
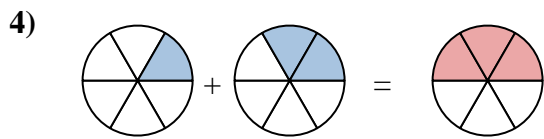
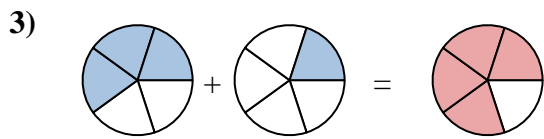
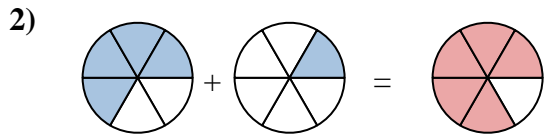
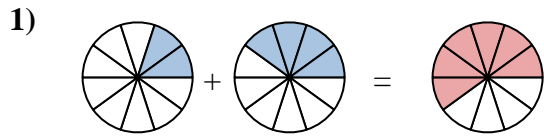
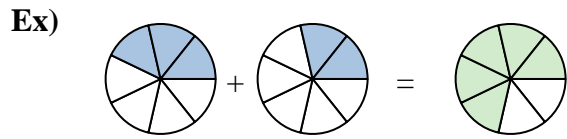
10)



10. \_\_\_\_\_



Ajoutez les fractions visuelles pour résoudre les problèmes.



**Réponses**

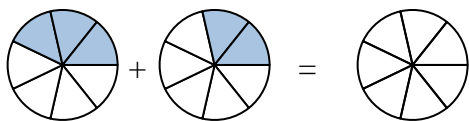
Ex.	$\frac{3}{7}$	$\frac{2}{7}$	$\frac{5}{7}$
1.	$\frac{2}{10}$	$\frac{4}{10}$	$\frac{6}{10}$
2.	$\frac{4}{6}$	$\frac{1}{6}$	$\frac{5}{6}$
3.	$\frac{3}{5}$	$\frac{1}{5}$	$\frac{4}{5}$
4.	$\frac{1}{6}$	$\frac{2}{6}$	$\frac{3}{6}$
5.	$\frac{3}{6}$	$\frac{1}{6}$	$\frac{4}{6}$
6.	$\frac{3}{8}$	$\frac{4}{8}$	$\frac{7}{8}$
7.	$\frac{1}{4}$	$\frac{1}{4}$	$\frac{2}{4}$
8.	$\frac{3}{8}$	$\frac{1}{8}$	$\frac{4}{8}$
9.	$\frac{2}{5}$	$\frac{1}{5}$	$\frac{3}{5}$
10.	$\frac{5}{10}$	$\frac{4}{10}$	$\frac{9}{10}$



Ajoutez les fractions visuelles pour résoudre les problèmes.

**Réponses**

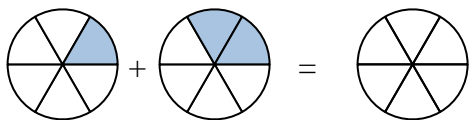
Ex)



Ex.  $\frac{3}{7}$     $\frac{2}{7}$     $\frac{5}{7}$

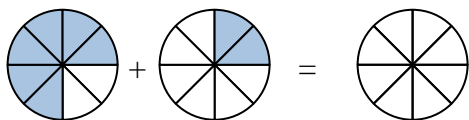
1. \_\_\_\_\_

1)



2. \_\_\_\_\_

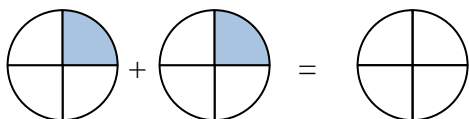
2)



3. \_\_\_\_\_

4. \_\_\_\_\_

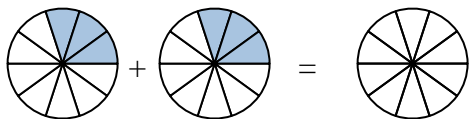
3)



5. \_\_\_\_\_

6. \_\_\_\_\_

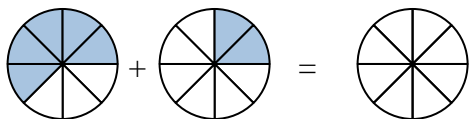
4)



7. \_\_\_\_\_

8. \_\_\_\_\_

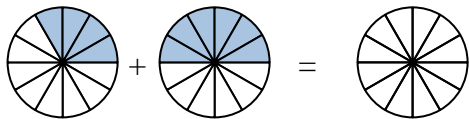
5)



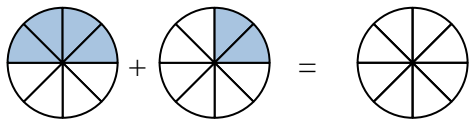
9. \_\_\_\_\_

10. \_\_\_\_\_

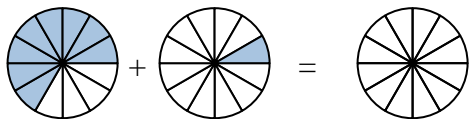
6)



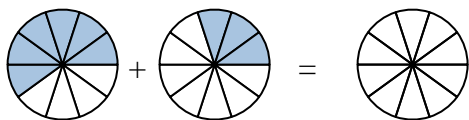
7)



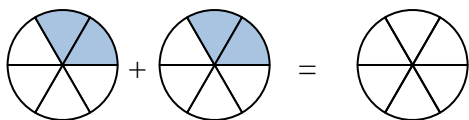
8)



9)

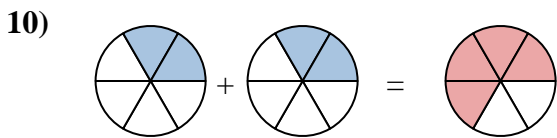
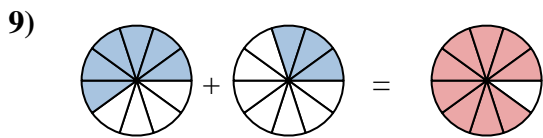
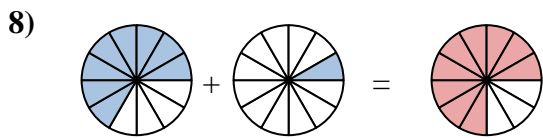
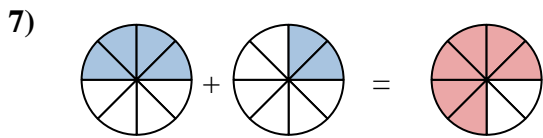
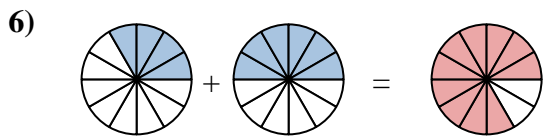
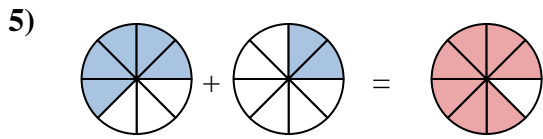
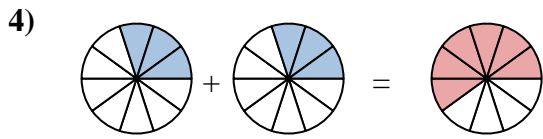
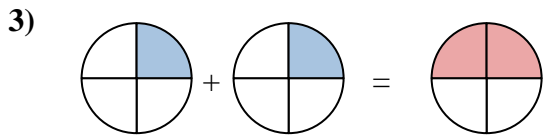
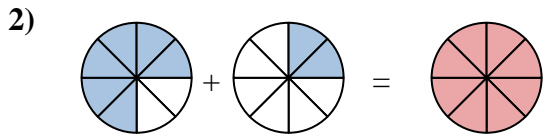
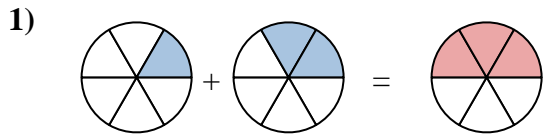
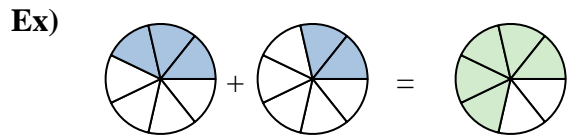


10)





Ajoutez les fractions visuelles pour résoudre les problèmes.



**Réponses**

Ex.	$\frac{3}{7}$	$\frac{2}{7}$	$\frac{5}{7}$
1.	$\frac{1}{6}$	$\frac{2}{6}$	$\frac{3}{6}$
2.	$\frac{6}{8}$	$\frac{2}{8}$	$\frac{8}{8}$
3.	$\frac{1}{4}$	$\frac{1}{4}$	$\frac{2}{4}$
4.	$\frac{3}{10}$	$\frac{3}{10}$	$\frac{6}{10}$
5.	$\frac{5}{8}$	$\frac{2}{8}$	$\frac{7}{8}$
6.	$\frac{4}{12}$	$\frac{6}{12}$	$\frac{10}{12}$
7.	$\frac{4}{8}$	$\frac{2}{8}$	$\frac{6}{8}$
8.	$\frac{8}{12}$	$\frac{1}{12}$	$\frac{9}{12}$
9.	$\frac{6}{10}$	$\frac{3}{10}$	$\frac{9}{10}$
10.	$\frac{2}{6}$	$\frac{2}{6}$	$\frac{4}{6}$