



Résoudre chaque équation et écrire la réponse.

Ex) $\frac{1}{8} + \frac{1}{8} + \frac{1}{8} + \frac{1}{8} + \frac{1}{8}$



Réponses

Ex. **J**

1) $\frac{1}{5} + \frac{1}{5} + \frac{1}{5}$




1. _____

2) $\frac{1}{4} + \frac{1}{4}$




2. _____

3) $\frac{1}{5} + \frac{1}{5} + \frac{1}{5} + \frac{1}{5}$



3. _____

4) $\frac{1}{8} + \frac{1}{8}$



5. _____

5) $\frac{1}{4} + \frac{1}{4} + \frac{1}{4}$




6. _____

6) $\frac{1}{5} + \frac{1}{5}$




7. _____

7) $\frac{1}{8} + \frac{1}{8} + \frac{1}{8} + \frac{1}{8} + \frac{1}{8} + \frac{1}{8}$



8. _____

8) $\frac{1}{6} + \frac{1}{6} + \frac{1}{6} + \frac{1}{6} + \frac{1}{6}$




9. _____

9) $\frac{1}{6} + \frac{1}{6} + \frac{1}{6} + \frac{1}{6}$




10. _____

10) $\frac{1}{12} + \frac{1}{12} + \frac{1}{12} + \frac{1}{12} + \frac{1}{12} + \frac{1}{12}$



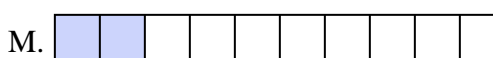
11. _____

11) $\frac{1}{10} + \frac{1}{10} + \frac{1}{10}$



12. _____

12) $\frac{1}{10} + \frac{1}{10} + \frac{1}{10} + \frac{1}{10} + \frac{1}{10}$



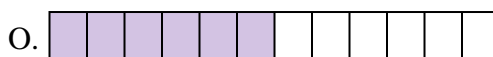
13. _____

13) $\frac{1}{3} + \frac{1}{3}$




14. _____

14) $\frac{1}{8} + \frac{1}{8} + \frac{1}{8} + \frac{1}{8}$



15. _____


15) $\frac{1}{10} + \frac{1}{10}$





Résoudre chaque équation et écrire la réponse.

Ex) $\frac{1}{8} + \frac{1}{8} + \frac{1}{8} + \frac{1}{8} + \frac{1}{8}$




1) $\frac{1}{5} + \frac{1}{5} + \frac{1}{5}$



2) $\frac{1}{4} + \frac{1}{4}$



3) $\frac{1}{5} + \frac{1}{5} + \frac{1}{5} + \frac{1}{5}$



4) $\frac{1}{8} + \frac{1}{8}$




5) $\frac{1}{4} + \frac{1}{4} + \frac{1}{4}$




6) $\frac{1}{5} + \frac{1}{5}$



7) $\frac{1}{8} + \frac{1}{8} + \frac{1}{8} + \frac{1}{8} + \frac{1}{8} + \frac{1}{8}$




8) $\frac{1}{6} + \frac{1}{6} + \frac{1}{6} + \frac{1}{6} + \frac{1}{6}$




9) $\frac{1}{6} + \frac{1}{6} + \frac{1}{6} + \frac{1}{6}$



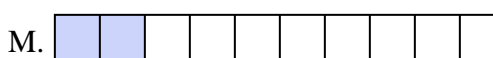
10) $\frac{1}{12} + \frac{1}{12} + \frac{1}{12} + \frac{1}{12} + \frac{1}{12} + \frac{1}{12}$



11) $\frac{1}{10} + \frac{1}{10} + \frac{1}{10}$



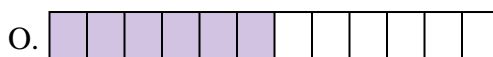
12) $\frac{1}{10} + \frac{1}{10} + \frac{1}{10} + \frac{1}{10} + \frac{1}{10}$




13) $\frac{1}{3} + \frac{1}{3}$



14) $\frac{1}{8} + \frac{1}{8} + \frac{1}{8} + \frac{1}{8}$



15) $\frac{1}{10} + \frac{1}{10}$



Réponses

Ex. **J**

1. **L**

2. **D**

3. **H**

4. **K**

5. **E**

6. **P**

7. **I**

8. **G**

9. **A**

10. **O**

11. **B**

12. **N**

13. **F**

14. **C**

15. **M**