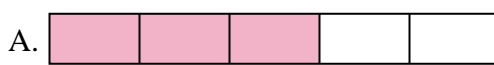




Résoudre chaque équation et écrire la réponse.

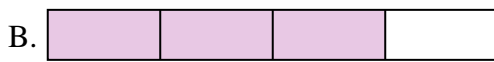
Ex)  $\frac{1}{6} + \frac{1}{6} + \frac{1}{6} + \frac{1}{6}$



**Réponses**

Ex.     **I**    

1)  $\frac{1}{6} + \frac{1}{6}$




1. \_\_\_\_\_

2)  $\frac{1}{8} + \frac{1}{8}$




2. \_\_\_\_\_

3)  $\frac{1}{10} + \frac{1}{10}$




3. \_\_\_\_\_

4)  $\frac{1}{4} + \frac{1}{4} + \frac{1}{4}$



4. \_\_\_\_\_

5)  $\frac{1}{5} + \frac{1}{5} + \frac{1}{5}$



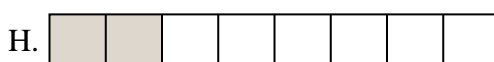
5. \_\_\_\_\_

6)  $\frac{1}{5} + \frac{1}{5} + \frac{1}{5} + \frac{1}{5}$




6. \_\_\_\_\_

7)  $\frac{1}{4} + \frac{1}{4}$



7. \_\_\_\_\_

8)  $\frac{1}{6} + \frac{1}{6} + \frac{1}{6}$



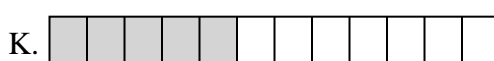
8. \_\_\_\_\_

9)  $\frac{1}{3} + \frac{1}{3}$




9. \_\_\_\_\_

10)  $\frac{1}{8} + \frac{1}{8} + \frac{1}{8}$



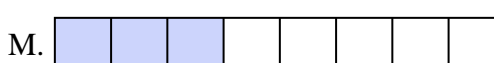
10. \_\_\_\_\_

11)  $\frac{1}{8} + \frac{1}{8} + \frac{1}{8} + \frac{1}{8} + \frac{1}{8}$




11. \_\_\_\_\_

12)  $\frac{1}{5} + \frac{1}{5}$



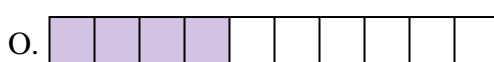
12. \_\_\_\_\_

13)  $\frac{1}{8} + \frac{1}{8} + \frac{1}{8} + \frac{1}{8} + \frac{1}{8} + \frac{1}{8}$



13. \_\_\_\_\_

14)  $\frac{1}{10} + \frac{1}{10} + \frac{1}{10} + \frac{1}{10}$



14. \_\_\_\_\_

15)  $\frac{1}{12} + \frac{1}{12} + \frac{1}{12} + \frac{1}{12} + \frac{1}{12}$




15. \_\_\_\_\_



Résoudre chaque équation et écrire la réponse.

Ex)  $\frac{1}{6} + \frac{1}{6} + \frac{1}{6} + \frac{1}{6}$



1)  $\frac{1}{6} + \frac{1}{6}$



2)  $\frac{1}{8} + \frac{1}{8}$



3)  $\frac{1}{10} + \frac{1}{10}$



4)  $\frac{1}{4} + \frac{1}{4} + \frac{1}{4}$



5)  $\frac{1}{5} + \frac{1}{5} + \frac{1}{5}$




6)  $\frac{1}{5} + \frac{1}{5} + \frac{1}{5} + \frac{1}{5}$




7)  $\frac{1}{4} + \frac{1}{4}$



8)  $\frac{1}{6} + \frac{1}{6} + \frac{1}{6}$




9)  $\frac{1}{3} + \frac{1}{3}$




10)  $\frac{1}{8} + \frac{1}{8} + \frac{1}{8}$




11)  $\frac{1}{8} + \frac{1}{8} + \frac{1}{8} + \frac{1}{8} + \frac{1}{8}$



12)  $\frac{1}{5} + \frac{1}{5}$




13)  $\frac{1}{8} + \frac{1}{8} + \frac{1}{8} + \frac{1}{8} + \frac{1}{8} + \frac{1}{8}$



14)  $\frac{1}{10} + \frac{1}{10} + \frac{1}{10} + \frac{1}{10}$



15)  $\frac{1}{12} + \frac{1}{12} + \frac{1}{12} + \frac{1}{12} + \frac{1}{12}$



**Réponses**

Ex.     **I**    

1.     **J**    

2.     **H**    

3.     **P**    

4.     **B**    

5.     **A**    

6.     **E**    

7.     **G**    

8.     **L**    

9.     **C**    

10.     **M**    

11.     **D**    

12.     **F**    

13.     **N**    

14.     **O**    

15.     **K**