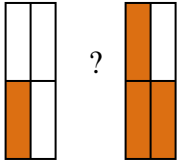


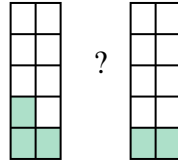


Comparez les fractions visuelles avec < , > ou =.

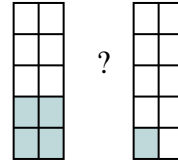
Ex)



1)



2)



**Réponses**

Ex.  $\frac{1}{4}$  <  $\frac{3}{4}$

1. \_\_\_\_\_

2. \_\_\_\_\_

3. \_\_\_\_\_

4. \_\_\_\_\_

5. \_\_\_\_\_

6. \_\_\_\_\_

7. \_\_\_\_\_

8. \_\_\_\_\_

9. \_\_\_\_\_

10. \_\_\_\_\_

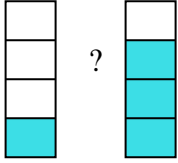
11. \_\_\_\_\_

12. \_\_\_\_\_

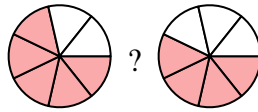
13. \_\_\_\_\_

14. \_\_\_\_\_

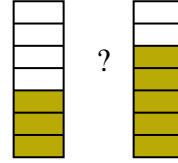
3)



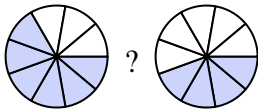
4)



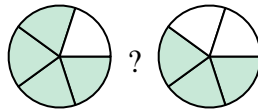
5)



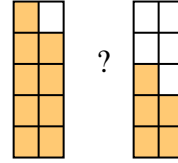
6)



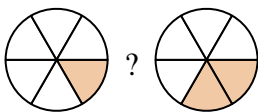
7)



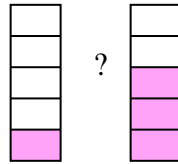
8)



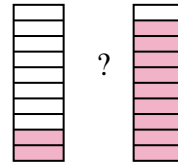
9)



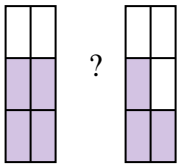
10)



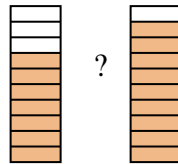
11)



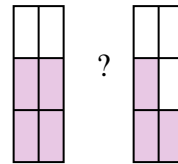
12)



13)

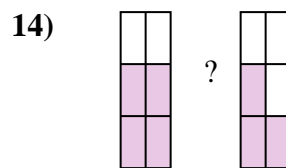
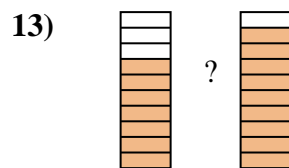
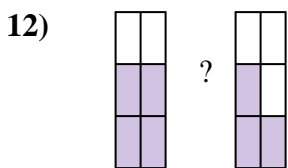
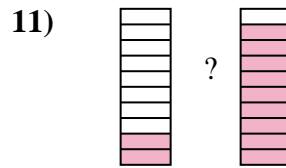
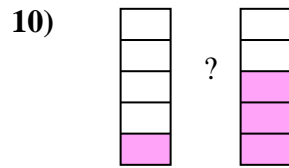
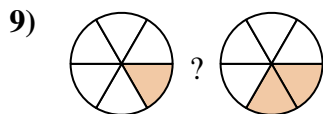
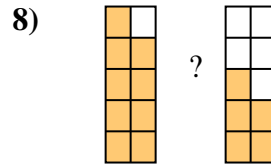
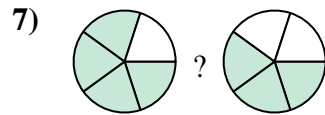
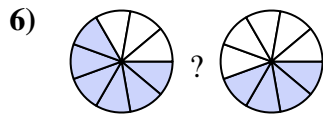

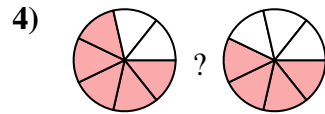
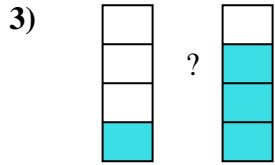
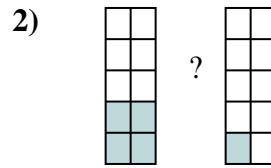
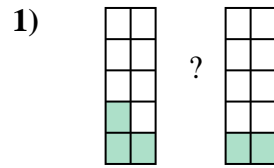
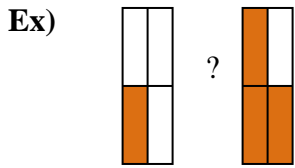


14)





Comparez les fractions visuelles avec  $<$ ,  $>$  ou  $=$ .



**Réponses**

Ex.	$\frac{1}{4}$	$<$	$\frac{3}{4}$
1.	$\frac{3}{10}$	$>$	$\frac{2}{10}$
2.	$\frac{4}{10}$	$>$	$\frac{1}{10}$
3.	$\frac{1}{4}$	$<$	$\frac{3}{4}$
4.	$\frac{5}{7}$	$>$	$\frac{4}{7}$
5.	$\frac{3}{7}$	$<$	$\frac{5}{7}$
6.	$\frac{6}{9}$	$>$	$\frac{4}{9}$
7.	$\frac{4}{5}$	$>$	$\frac{3}{5}$
8.	$\frac{9}{10}$	$>$	$\frac{5}{10}$
9.	$\frac{1}{6}$	$<$	$\frac{2}{6}$
10.	$\frac{1}{5}$	$<$	$\frac{3}{5}$
11.	$\frac{2}{10}$	$<$	$\frac{9}{10}$
12.	$\frac{4}{6}$	$>$	$\frac{3}{6}$
13.	$\frac{7}{10}$	$<$	$\frac{9}{10}$
14.	$\frac{4}{6}$	$>$	$\frac{3}{6}$