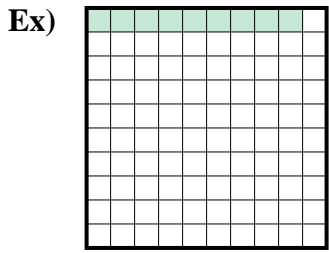
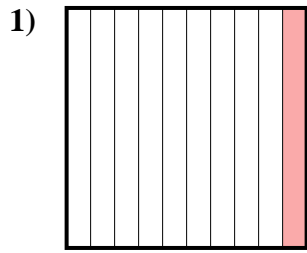




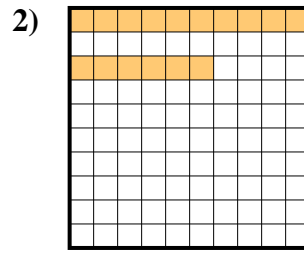
Exprimez la valeur en fraction , décimal & pourcentage.



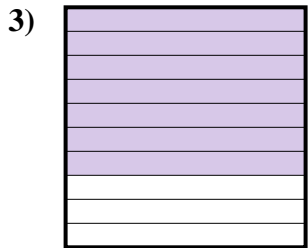
fraction $\frac{9}{100}$
 décimal 0,09
 pourcentage 9



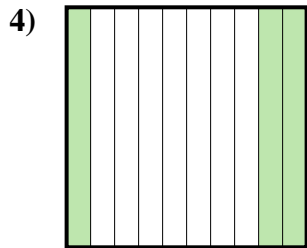
fraction _____
 décimal _____
 pourcentage _____



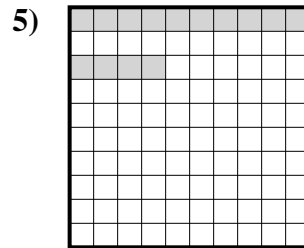
fraction _____
 décimal _____
 pourcentage _____



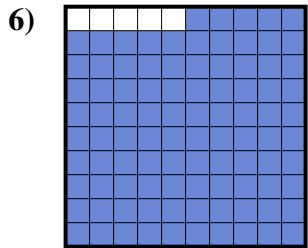
fraction _____
 décimal _____
 pourcentage _____



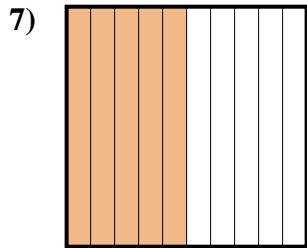
fraction _____
 décimal _____
 pourcentage _____



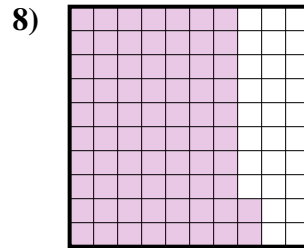
fraction _____
 décimal _____
 pourcentage _____




fraction _____
 décimal _____
 pourcentage _____



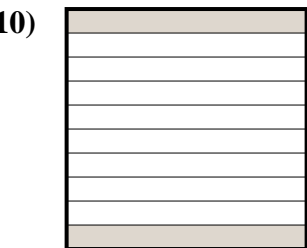
fraction _____
 décimal _____
 pourcentage _____



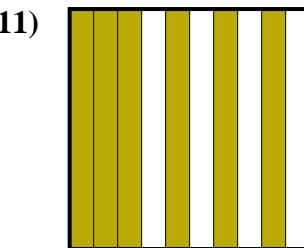
fraction _____
 décimal _____
 pourcentage _____



fraction _____
 décimal _____
 pourcentage _____



fraction _____
 décimal _____
 pourcentage _____



fraction _____
 décimal _____
 pourcentage _____

Réponses

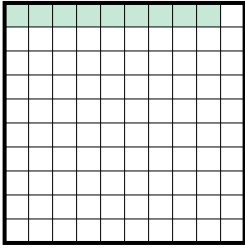
Ex. $\frac{9}{100}$ 0,09 9%

1. _____
2. _____
3. _____
4. _____
5. _____
6. _____
7. _____
8. _____
9. _____
10. _____
11. _____



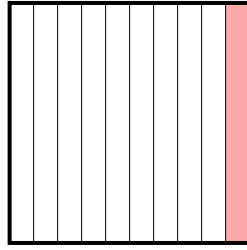
Exprimez la valeur en fraction , décimal & pourcentage.

Ex)



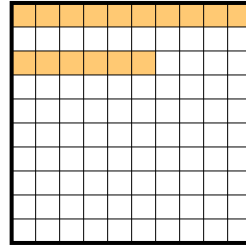
fraction $\frac{9}{100}$
 décimal $0,09$
 pourcentage 9

1)




fraction $\frac{1}{10}$
 décimal $0,1$
 pourcentage 10

2)



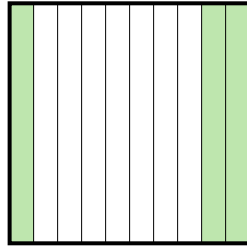
fraction $\frac{16}{100}$
 décimal $0,16$
 pourcentage 16

3)



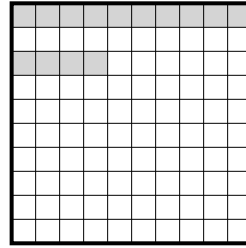
fraction $\frac{7}{10}$
 décimal $0,7$
 pourcentage 70

4)



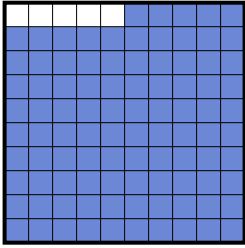
fraction $\frac{3}{10}$
 décimal $0,3$
 pourcentage 30

5)



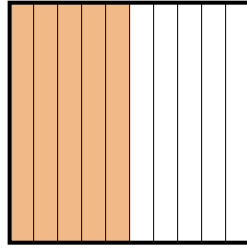
fraction $\frac{14}{100}$
 décimal $0,14$
 pourcentage 14

6)



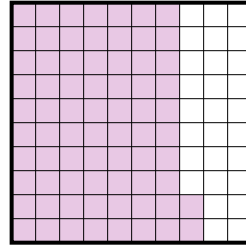
fraction $\frac{95}{100}$
 décimal $0,95$
 pourcentage 95

7)



fraction $\frac{5}{10}$
 décimal $0,5$
 pourcentage 50

8)




fraction $\frac{72}{100}$
 décimal $0,72$
 pourcentage 72

9)




fraction $\frac{4}{10}$
 décimal $0,4$
 pourcentage 40

10)



fraction $\frac{2}{10}$
 décimal $0,2$
 pourcentage 20

11)



fraction $\frac{6}{10}$
 décimal $0,6$
 pourcentage 60

Réponses

Ex.	$\frac{9}{100}$	0,09	9%
1.	$\frac{1}{10}$	0,1	10%
2.	$\frac{16}{100}$	0,16	16%
3.	$\frac{7}{10}$	0,7	70%
4.	$\frac{3}{10}$	0,3	30%
5.	$\frac{14}{100}$	0,14	14%
6.	$\frac{95}{100}$	0,95	95%
7.	$\frac{5}{10}$	0,5	50%
8.	$\frac{72}{100}$	0,72	72%
9.	$\frac{4}{10}$	0,4	40%
10.	$\frac{2}{10}$	0,2	20%
11.	$\frac{6}{10}$	0,6	60%