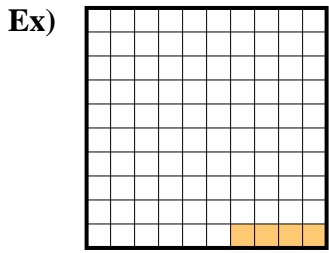
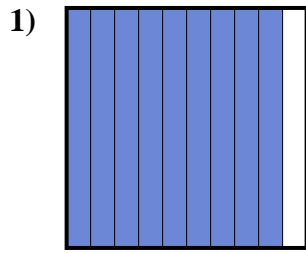




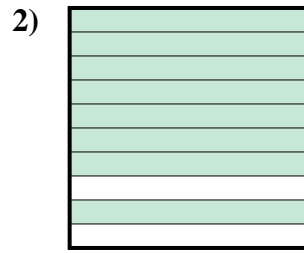
Exprimez la valeur en fraction , décimal & pourcentage.



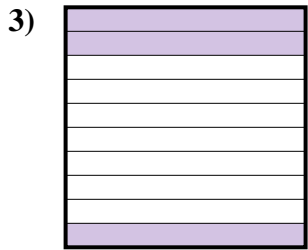
fraction $\frac{4}{100}$
 décimal $0,04$
 pourcentage 4



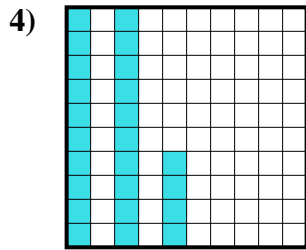
fraction $\frac{9}{10}$
 décimal $0,9$
 pourcentage 90



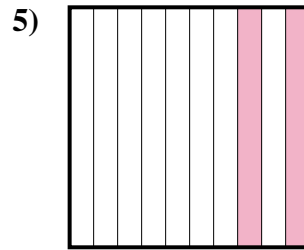
fraction $\frac{8}{10}$
 décimal $0,8$
 pourcentage 80



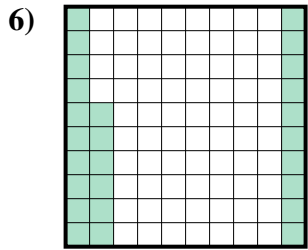
fraction $\frac{3}{10}$
 décimal $0,3$
 pourcentage 30



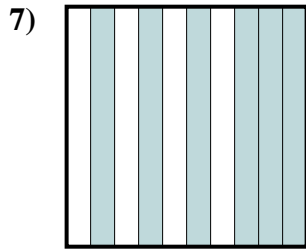
fraction $\frac{24}{100}$
 décimal $0,24$
 pourcentage 24



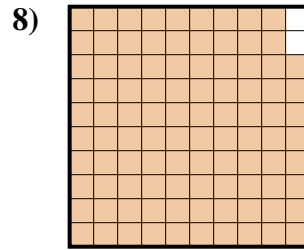
fraction $\frac{2}{10}$
 décimal $0,2$
 pourcentage 20



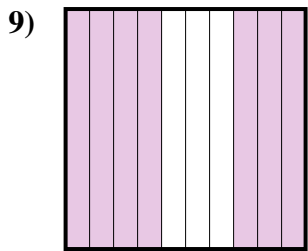
fraction $\frac{26}{100}$
 décimal $0,26$
 pourcentage 26



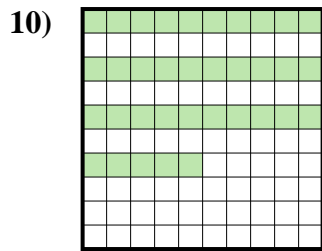
fraction $\frac{6}{10}$
 décimal $0,6$
 pourcentage 60



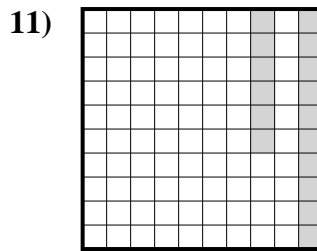
fraction $\frac{98}{100}$
 décimal $0,98$
 pourcentage 98



fraction $\frac{7}{10}$
 décimal $0,7$
 pourcentage 70



fraction $\frac{35}{100}$
 décimal $0,35$
 pourcentage 35



fraction $\frac{16}{100}$
 décimal $0,16$
 pourcentage 16

Réponses

| | | | |
|-----|------------------|-------------|------------|
| Ex. | $\frac{4}{100}$ | 0,04 | 4% |
| 1. | $\frac{9}{10}$ | 0,9 | 90% |
| 2. | $\frac{8}{10}$ | 0,8 | 80% |
| 3. | $\frac{3}{10}$ | 0,3 | 30% |
| 4. | $\frac{24}{100}$ | 0,24 | 24% |
| 5. | $\frac{2}{10}$ | 0,2 | 20% |
| 6. | $\frac{26}{100}$ | 0,26 | 26% |
| 7. | $\frac{6}{10}$ | 0,6 | 60% |
| 8. | $\frac{98}{100}$ | 0,98 | 98% |
| 9. | $\frac{7}{10}$ | 0,7 | 70% |
| 10. | $\frac{35}{100}$ | 0,35 | 35% |
| 11. | $\frac{16}{100}$ | 0,16 | 16% |