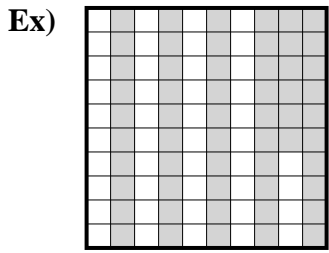
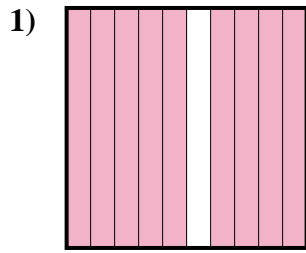




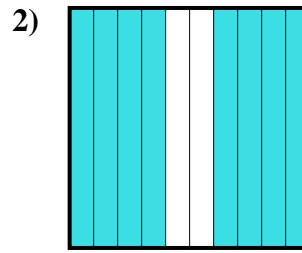
Exprimez la valeur en fraction , décimal & pourcentage.



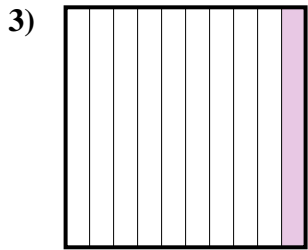
fraction  $\frac{56}{100}$   
 décimal 0,56  
 pourcentage 56



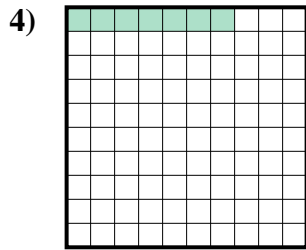
fraction \_\_\_\_\_  
 décimal \_\_\_\_\_  
 pourcentage \_\_\_\_\_



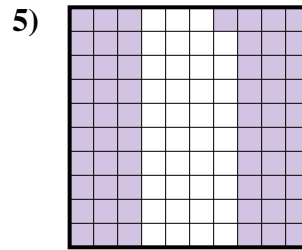
fraction \_\_\_\_\_  
 décimal \_\_\_\_\_  
 pourcentage \_\_\_\_\_



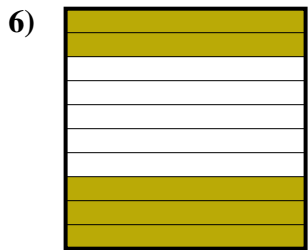
fraction \_\_\_\_\_  
 décimal \_\_\_\_\_  
 pourcentage \_\_\_\_\_



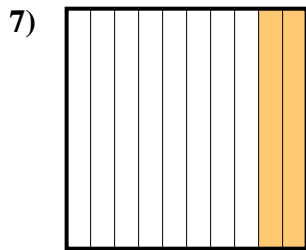
fraction \_\_\_\_\_  
 décimal \_\_\_\_\_  
 pourcentage \_\_\_\_\_




fraction \_\_\_\_\_  
 décimal \_\_\_\_\_  
 pourcentage \_\_\_\_\_




fraction \_\_\_\_\_  
 décimal \_\_\_\_\_  
 pourcentage \_\_\_\_\_



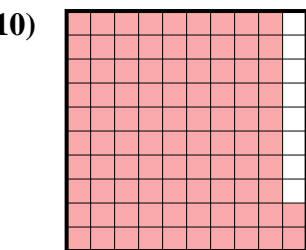
fraction \_\_\_\_\_  
 décimal \_\_\_\_\_  
 pourcentage \_\_\_\_\_



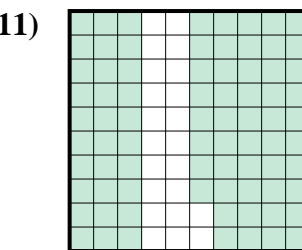
fraction \_\_\_\_\_  
 décimal \_\_\_\_\_  
 pourcentage \_\_\_\_\_



fraction \_\_\_\_\_  
 décimal \_\_\_\_\_  
 pourcentage \_\_\_\_\_



fraction \_\_\_\_\_  
 décimal \_\_\_\_\_  
 pourcentage \_\_\_\_\_



fraction \_\_\_\_\_  
 décimal \_\_\_\_\_  
 pourcentage \_\_\_\_\_

**Réponses**

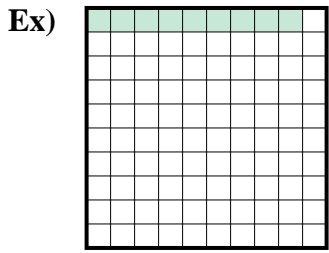
Ex.  $\frac{56}{100}$  **0,56** **56%**

1. \_\_\_\_\_
2. \_\_\_\_\_
3. \_\_\_\_\_
4. \_\_\_\_\_
5. \_\_\_\_\_
6. \_\_\_\_\_
7. \_\_\_\_\_
8. \_\_\_\_\_
9. \_\_\_\_\_
10. \_\_\_\_\_
11. \_\_\_\_\_

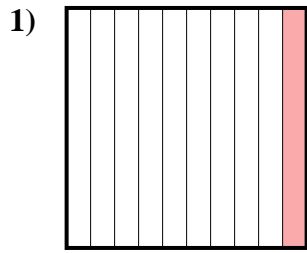




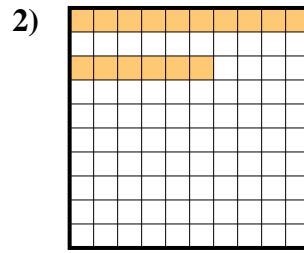
Exprimez la valeur en fraction , décimal & pourcentage.



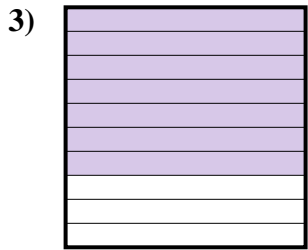
fraction  $\frac{9}{100}$   
 décimal 0,09  
 pourcentage 9



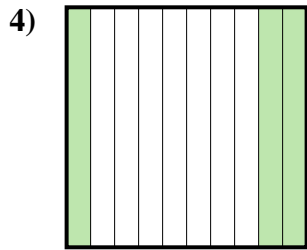
fraction \_\_\_\_\_  
 décimal \_\_\_\_\_  
 pourcentage \_\_\_\_\_



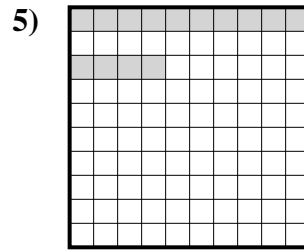
fraction \_\_\_\_\_  
 décimal \_\_\_\_\_  
 pourcentage \_\_\_\_\_



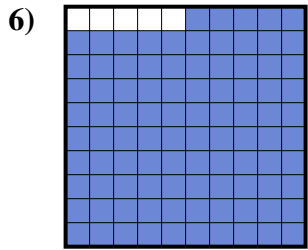
fraction \_\_\_\_\_  
 décimal \_\_\_\_\_  
 pourcentage \_\_\_\_\_



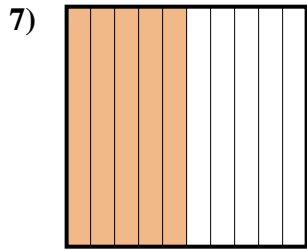
fraction \_\_\_\_\_  
 décimal \_\_\_\_\_  
 pourcentage \_\_\_\_\_



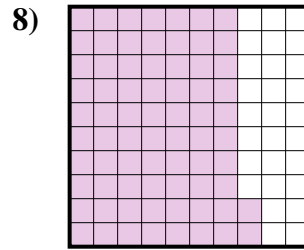
fraction \_\_\_\_\_  
 décimal \_\_\_\_\_  
 pourcentage \_\_\_\_\_



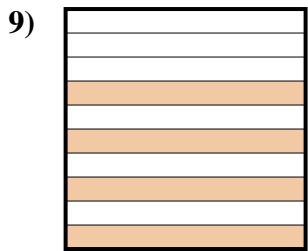
fraction \_\_\_\_\_  
 décimal \_\_\_\_\_  
 pourcentage \_\_\_\_\_



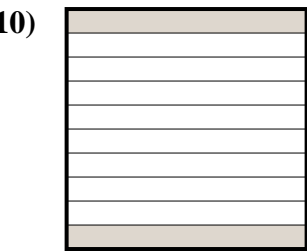
fraction \_\_\_\_\_  
 décimal \_\_\_\_\_  
 pourcentage \_\_\_\_\_



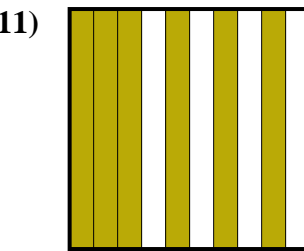
fraction \_\_\_\_\_  
 décimal \_\_\_\_\_  
 pourcentage \_\_\_\_\_



fraction \_\_\_\_\_  
 décimal \_\_\_\_\_  
 pourcentage \_\_\_\_\_



fraction \_\_\_\_\_  
 décimal \_\_\_\_\_  
 pourcentage \_\_\_\_\_



fraction \_\_\_\_\_  
 décimal \_\_\_\_\_  
 pourcentage \_\_\_\_\_

**Réponses**

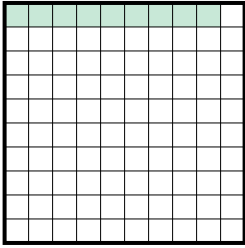
Ex.  $\frac{9}{100}$  0,09 9%

1. \_\_\_\_\_
2. \_\_\_\_\_
3. \_\_\_\_\_
4. \_\_\_\_\_
5. \_\_\_\_\_
6. \_\_\_\_\_
7. \_\_\_\_\_
8. \_\_\_\_\_
9. \_\_\_\_\_
10. \_\_\_\_\_
11. \_\_\_\_\_



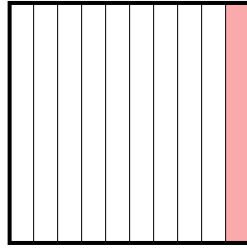
Exprimez la valeur en fraction , décimal & pourcentage.

Ex)



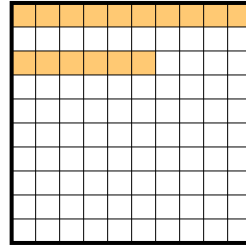
fraction  $\frac{9}{100}$   
 décimal  $0,09$   
 pourcentage  $9$

1)




fraction  $\frac{1}{10}$   
 décimal  $0,1$   
 pourcentage  $10$

2)



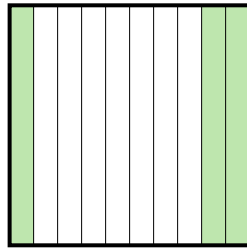
fraction  $\frac{16}{100}$   
 décimal  $0,16$   
 pourcentage  $16$

3)




fraction  $\frac{7}{10}$   
 décimal  $0,7$   
 pourcentage  $70$

4)



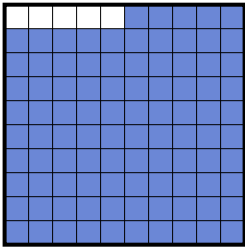
fraction  $\frac{3}{10}$   
 décimal  $0,3$   
 pourcentage  $30$

5)



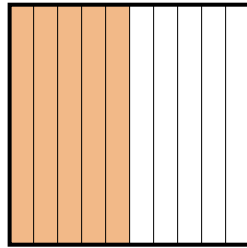
fraction  $\frac{14}{100}$   
 décimal  $0,14$   
 pourcentage  $14$

6)



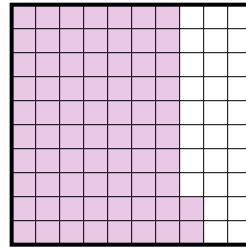
fraction  $\frac{95}{100}$   
 décimal  $0,95$   
 pourcentage  $95$

7)



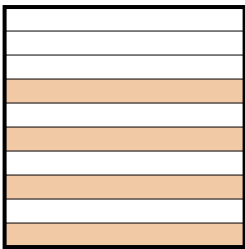
fraction  $\frac{5}{10}$   
 décimal  $0,5$   
 pourcentage  $50$

8)




fraction  $\frac{72}{100}$   
 décimal  $0,72$   
 pourcentage  $72$

9)




fraction  $\frac{4}{10}$   
 décimal  $0,4$   
 pourcentage  $40$

10)



fraction  $\frac{2}{10}$   
 décimal  $0,2$   
 pourcentage  $20$

11)



fraction  $\frac{6}{10}$   
 décimal  $0,6$   
 pourcentage  $60$

**Réponses**

Ex.	$\frac{9}{100}$	<b>0,09</b>	<b>9%</b>
1.	$\frac{1}{10}$	<b>0,1</b>	<b>10%</b>
2.	$\frac{16}{100}$	<b>0,16</b>	<b>16%</b>
3.	$\frac{7}{10}$	<b>0,7</b>	<b>70%</b>
4.	$\frac{3}{10}$	<b>0,3</b>	<b>30%</b>
5.	$\frac{14}{100}$	<b>0,14</b>	<b>14%</b>
6.	$\frac{95}{100}$	<b>0,95</b>	<b>95%</b>
7.	$\frac{5}{10}$	<b>0,5</b>	<b>50%</b>
8.	$\frac{72}{100}$	<b>0,72</b>	<b>72%</b>
9.	$\frac{4}{10}$	<b>0,4</b>	<b>40%</b>
10.	$\frac{2}{10}$	<b>0,2</b>	<b>20%</b>
11.	$\frac{6}{10}$	<b>0,6</b>	<b>60%</b>

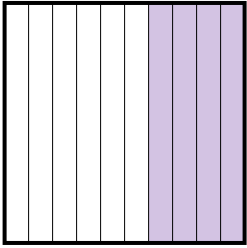






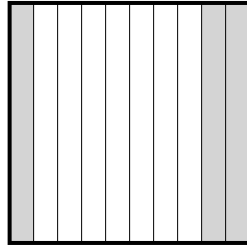
Exprimez la valeur en fraction , décimal & pourcentage.

Ex)



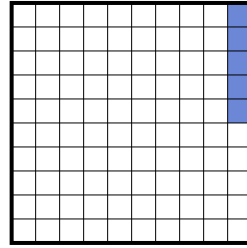
fraction  $\frac{4}{10}$   
 décimal 0,4  
 pourcentage 40

1)




fraction \_\_\_\_\_  
 décimal \_\_\_\_\_  
 pourcentage \_\_\_\_\_

2)



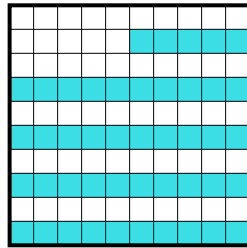
fraction \_\_\_\_\_  
 décimal \_\_\_\_\_  
 pourcentage \_\_\_\_\_

3)



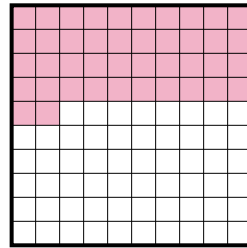
fraction \_\_\_\_\_  
 décimal \_\_\_\_\_  
 pourcentage \_\_\_\_\_

4)




fraction \_\_\_\_\_  
 décimal \_\_\_\_\_  
 pourcentage \_\_\_\_\_

5)



fraction \_\_\_\_\_  
 décimal \_\_\_\_\_  
 pourcentage \_\_\_\_\_

6)



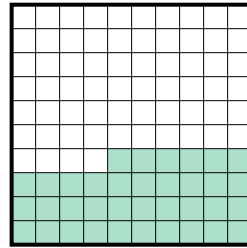
fraction \_\_\_\_\_  
 décimal \_\_\_\_\_  
 pourcentage \_\_\_\_\_

7)



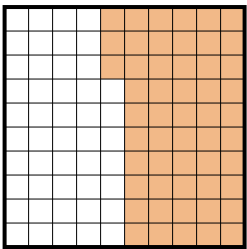
fraction \_\_\_\_\_  
 décimal \_\_\_\_\_  
 pourcentage \_\_\_\_\_

8)



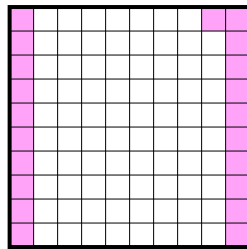
fraction \_\_\_\_\_  
 décimal \_\_\_\_\_  
 pourcentage \_\_\_\_\_

9)




fraction \_\_\_\_\_  
 décimal \_\_\_\_\_  
 pourcentage \_\_\_\_\_

10)



fraction \_\_\_\_\_  
 décimal \_\_\_\_\_  
 pourcentage \_\_\_\_\_

11)



fraction \_\_\_\_\_  
 décimal \_\_\_\_\_  
 pourcentage \_\_\_\_\_

**Réponses**

Ex.  $\frac{4}{10}$  0,4 40%

1. \_\_\_\_\_

2. \_\_\_\_\_

3. \_\_\_\_\_

4. \_\_\_\_\_

5. \_\_\_\_\_

6. \_\_\_\_\_

7. \_\_\_\_\_

8. \_\_\_\_\_

9. \_\_\_\_\_

10. \_\_\_\_\_

11. \_\_\_\_\_



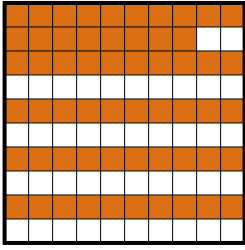






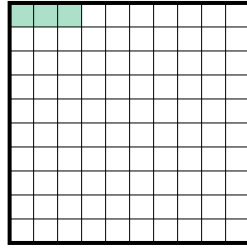
Exprimez la valeur en fraction , décimal & pourcentage.

Ex)



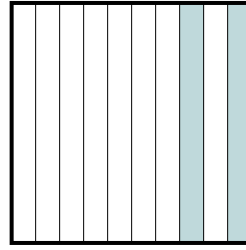
fraction  $\frac{58}{100}$   
 décimal  $0,58$   
 pourcentage  $58$

1)




fraction  $\frac{3}{100}$   
 décimal  $0,03$   
 pourcentage  $3$

2)



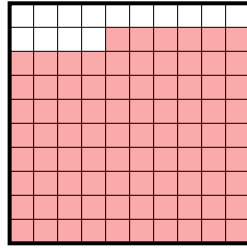
fraction  $\frac{2}{10}$   
 décimal  $0,2$   
 pourcentage  $20$

3)



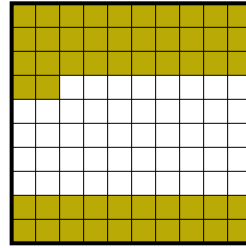
fraction  $\frac{4}{10}$   
 décimal  $0,4$   
 pourcentage  $40$

4)



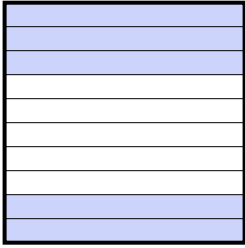
fraction  $\frac{86}{100}$   
 décimal  $0,86$   
 pourcentage  $86$

5)



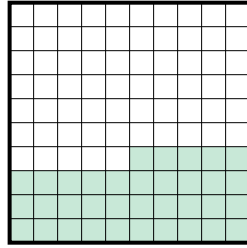
fraction  $\frac{52}{100}$   
 décimal  $0,52$   
 pourcentage  $52$

6)



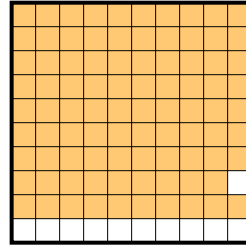
fraction  $\frac{5}{10}$   
 décimal  $0,5$   
 pourcentage  $50$

7)



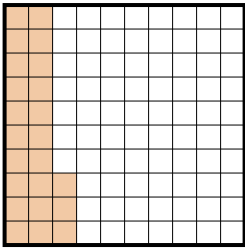
fraction  $\frac{35}{100}$   
 décimal  $0,35$   
 pourcentage  $35$

8)



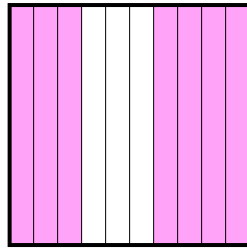
fraction  $\frac{89}{100}$   
 décimal  $0,89$   
 pourcentage  $89$

9)



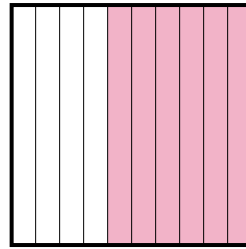
fraction  $\frac{23}{100}$   
 décimal  $0,23$   
 pourcentage  $23$

10)



fraction  $\frac{7}{10}$   
 décimal  $0,7$   
 pourcentage  $70$

11)



fraction  $\frac{6}{10}$   
 décimal  $0,6$   
 pourcentage  $60$

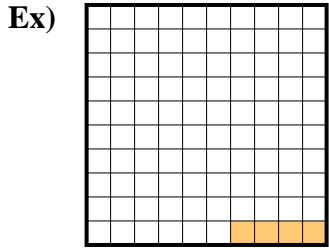
**Réponses**

Ex.	$\frac{58}{100}$	<b>0,58</b>	<b>58%</b>
1.	$\frac{3}{100}$	<b>0,03</b>	<b>3%</b>
2.	$\frac{2}{10}$	<b>0,2</b>	<b>20%</b>
3.	$\frac{4}{10}$	<b>0,4</b>	<b>40%</b>
4.	$\frac{86}{100}$	<b>0,86</b>	<b>86%</b>
5.	$\frac{52}{100}$	<b>0,52</b>	<b>52%</b>
6.	$\frac{5}{10}$	<b>0,5</b>	<b>50%</b>
7.	$\frac{35}{100}$	<b>0,35</b>	<b>35%</b>
8.	$\frac{89}{100}$	<b>0,89</b>	<b>89%</b>
9.	$\frac{23}{100}$	<b>0,23</b>	<b>23%</b>
10.	$\frac{7}{10}$	<b>0,7</b>	<b>70%</b>
11.	$\frac{6}{10}$	<b>0,6</b>	<b>60%</b>

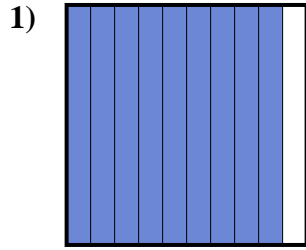




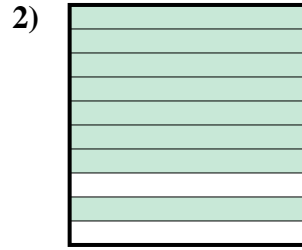
Exprimez la valeur en fraction , décimal & pourcentage.



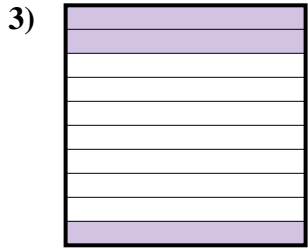
fraction  $\frac{4}{100}$   
 décimal  $0,04$   
 pourcentage  $4$



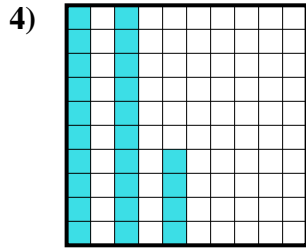
fraction  $\frac{9}{10}$   
 décimal  $0,9$   
 pourcentage  $90$



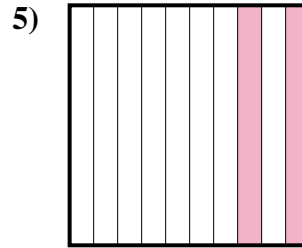
fraction  $\frac{8}{10}$   
 décimal  $0,8$   
 pourcentage  $80$



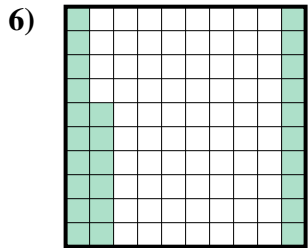
fraction  $\frac{3}{10}$   
 décimal  $0,3$   
 pourcentage  $30$



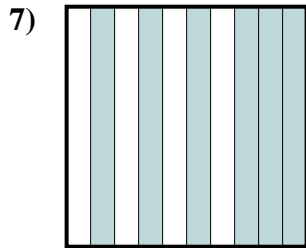
fraction  $\frac{24}{100}$   
 décimal  $0,24$   
 pourcentage  $24$



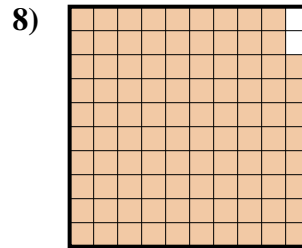
fraction  $\frac{2}{10}$   
 décimal  $0,2$   
 pourcentage  $20$



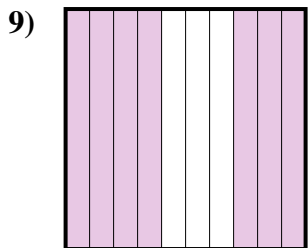
fraction  $\frac{26}{100}$   
 décimal  $0,26$   
 pourcentage  $26$



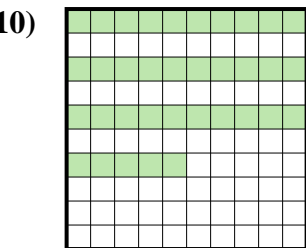
fraction  $\frac{6}{10}$   
 décimal  $0,6$   
 pourcentage  $60$



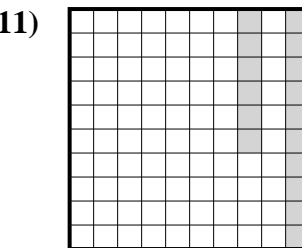
fraction  $\frac{98}{100}$   
 décimal  $0,98$   
 pourcentage  $98$



fraction  $\frac{7}{10}$   
 décimal  $0,7$   
 pourcentage  $70$



fraction  $\frac{35}{100}$   
 décimal  $0,35$   
 pourcentage  $35$



fraction  $\frac{16}{100}$   
 décimal  $0,16$   
 pourcentage  $16$


**Réponses**

Ex.	$\frac{4}{100}$	<b>0,04</b>	<b>4%</b>
1.	$\frac{9}{10}$	<b>0,9</b>	<b>90%</b>
2.	$\frac{8}{10}$	<b>0,8</b>	<b>80%</b>
3.	$\frac{3}{10}$	<b>0,3</b>	<b>30%</b>
4.	$\frac{24}{100}$	<b>0,24</b>	<b>24%</b>
5.	$\frac{2}{10}$	<b>0,2</b>	<b>20%</b>
6.	$\frac{26}{100}$	<b>0,26</b>	<b>26%</b>
7.	$\frac{6}{10}$	<b>0,6</b>	<b>60%</b>
8.	$\frac{98}{100}$	<b>0,98</b>	<b>98%</b>
9.	$\frac{7}{10}$	<b>0,7</b>	<b>70%</b>
10.	$\frac{35}{100}$	<b>0,35</b>	<b>35%</b>
11.	$\frac{16}{100}$	<b>0,16</b>	<b>16%</b>



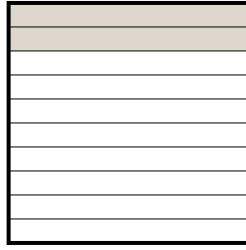
Exprimez la valeur en fraction , décimal & pourcentage.

Ex)



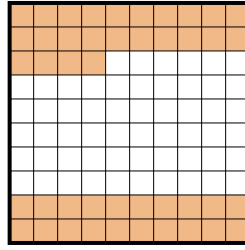
fraction  $\frac{9}{10}$   
 décimal 0,9  
 pourcentage 90

1)



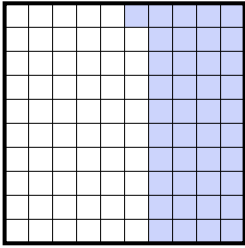
fraction \_\_\_\_\_  
 décimal \_\_\_\_\_  
 pourcentage \_\_\_\_\_

2)




fraction \_\_\_\_\_  
 décimal \_\_\_\_\_  
 pourcentage \_\_\_\_\_

3)



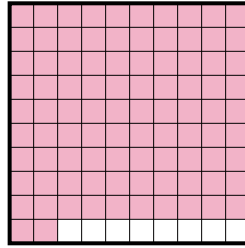
fraction \_\_\_\_\_  
 décimal \_\_\_\_\_  
 pourcentage \_\_\_\_\_

4)



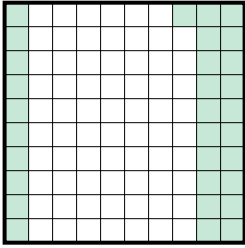
fraction \_\_\_\_\_  
 décimal \_\_\_\_\_  
 pourcentage \_\_\_\_\_

5)



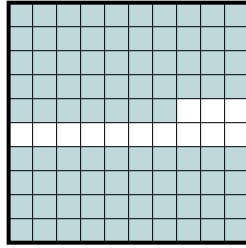
fraction \_\_\_\_\_  
 décimal \_\_\_\_\_  
 pourcentage \_\_\_\_\_

6)



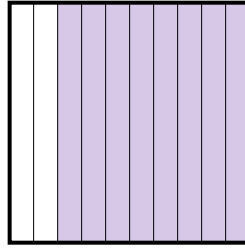
fraction \_\_\_\_\_  
 décimal \_\_\_\_\_  
 pourcentage \_\_\_\_\_

7)




fraction \_\_\_\_\_  
 décimal \_\_\_\_\_  
 pourcentage \_\_\_\_\_

8)



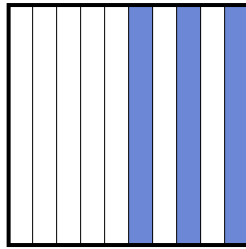
fraction \_\_\_\_\_  
 décimal \_\_\_\_\_  
 pourcentage \_\_\_\_\_

9)



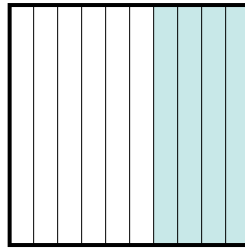
fraction \_\_\_\_\_  
 décimal \_\_\_\_\_  
 pourcentage \_\_\_\_\_

10)



fraction \_\_\_\_\_  
 décimal \_\_\_\_\_  
 pourcentage \_\_\_\_\_

11)



fraction \_\_\_\_\_  
 décimal \_\_\_\_\_  
 pourcentage \_\_\_\_\_

**Réponses**

Ex.  $\frac{9}{10}$  0,9 90%

1. \_\_\_\_\_

2. \_\_\_\_\_

3. \_\_\_\_\_

4. \_\_\_\_\_

5. \_\_\_\_\_

6. \_\_\_\_\_

7. \_\_\_\_\_

8. \_\_\_\_\_

9. \_\_\_\_\_


10. \_\_\_\_\_

11. \_\_\_\_\_



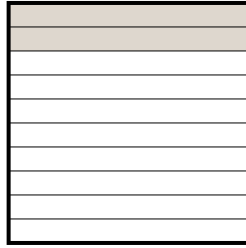
Exprimez la valeur en fraction , décimal & pourcentage.

Ex)



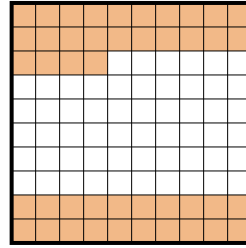
fraction  $\frac{9}{10}$   
 décimal  $0,9$   
 pourcentage  $90$

1)



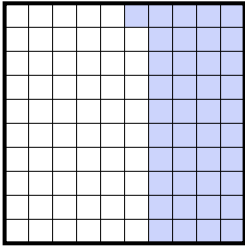
fraction  $\frac{2}{10}$   
 décimal  $0,2$   
 pourcentage  $20$

2)




fraction  $\frac{44}{100}$   
 décimal  $0,44$   
 pourcentage  $44$

3)



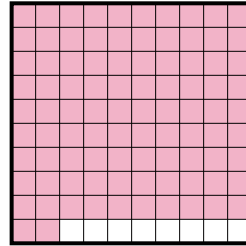
fraction  $\frac{41}{100}$   
 décimal  $0,41$   
 pourcentage  $41$

4)



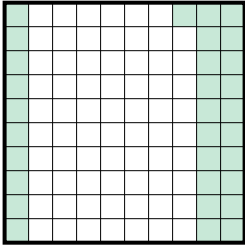
fraction  $\frac{6}{10}$   
 décimal  $0,6$   
 pourcentage  $60$

5)



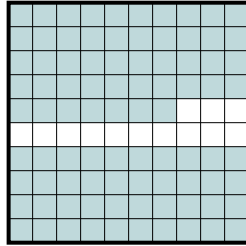
fraction  $\frac{92}{100}$   
 décimal  $0,92$   
 pourcentage  $92$

6)



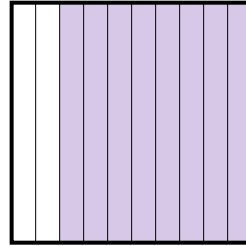
fraction  $\frac{31}{100}$   
 décimal  $0,31$   
 pourcentage  $31$

7)



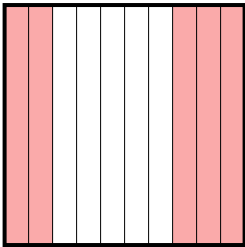
fraction  $\frac{87}{100}$   
 décimal  $0,87$   
 pourcentage  $87$

8)




fraction  $\frac{8}{10}$   
 décimal  $0,8$   
 pourcentage  $80$

9)



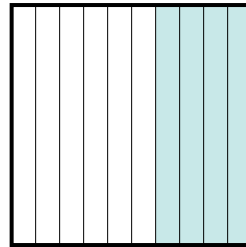
fraction  $\frac{5}{10}$   
 décimal  $0,5$   
 pourcentage  $50$

10)



fraction  $\frac{3}{10}$   
 décimal  $0,3$   
 pourcentage  $30$

11)



fraction  $\frac{4}{10}$   
 décimal  $0,4$   
 pourcentage  $40$

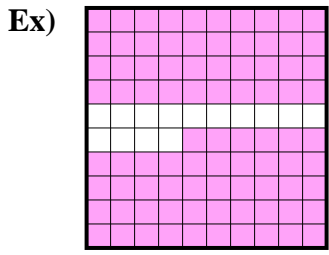
**Réponses**

Ex.	$\frac{9}{10}$	<b>0,9</b>	<b>90%</b>
1.	$\frac{2}{10}$	<b>0,2</b>	<b>20%</b>
2.	$\frac{44}{100}$	<b>0,44</b>	<b>44%</b>
3.	$\frac{41}{100}$	<b>0,41</b>	<b>41%</b>
4.	$\frac{6}{10}$	<b>0,6</b>	<b>60%</b>
5.	$\frac{92}{100}$	<b>0,92</b>	<b>92%</b>
6.	$\frac{31}{100}$	<b>0,31</b>	<b>31%</b>
7.	$\frac{87}{100}$	<b>0,87</b>	<b>87%</b>
8.	$\frac{8}{10}$	<b>0,8</b>	<b>80%</b>
9.	$\frac{5}{10}$	<b>0,5</b>	<b>50%</b>
10.	$\frac{3}{10}$	<b>0,3</b>	<b>30%</b>
11.	$\frac{4}{10}$	<b>0,4</b>	<b>40%</b>

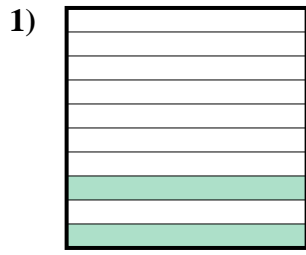




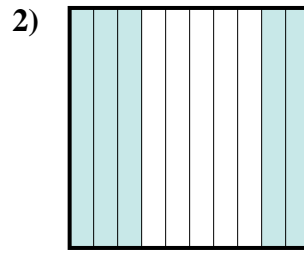
Exprimez la valeur en fraction , décimal & pourcentage.



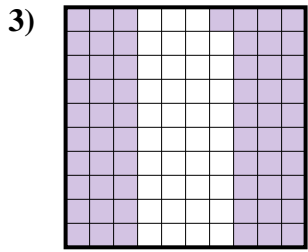
fraction  $\frac{86}{100}$   
 décimal  $0,86$   
 pourcentage  $86$



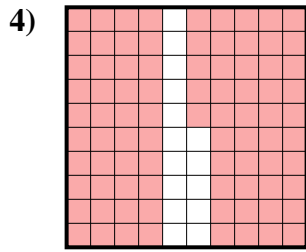
fraction  $\frac{2}{10}$   
 décimal  $0,2$   
 pourcentage  $20$



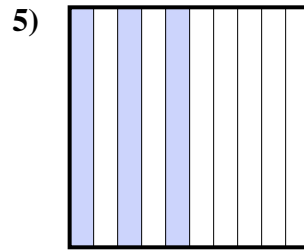
fraction  $\frac{5}{10}$   
 décimal  $0,5$   
 pourcentage  $50$



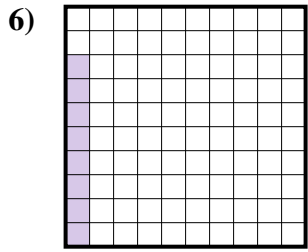
fraction  $\frac{61}{100}$   
 décimal  $0,61$   
 pourcentage  $61$



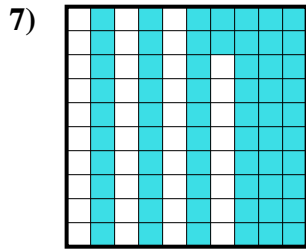
fraction  $\frac{85}{100}$   
 décimal  $0,85$   
 pourcentage  $85$



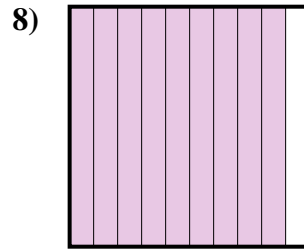
fraction  $\frac{3}{10}$   
 décimal  $0,3$   
 pourcentage  $30$



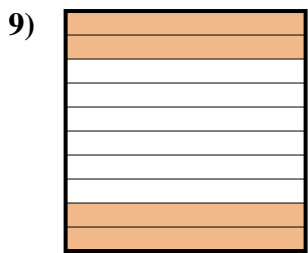
fraction  $\frac{8}{100}$   
 décimal  $0,08$   
 pourcentage  $8$



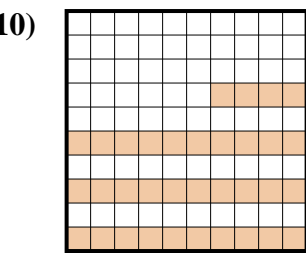
fraction  $\frac{62}{100}$   
 décimal  $0,62$   
 pourcentage  $62$



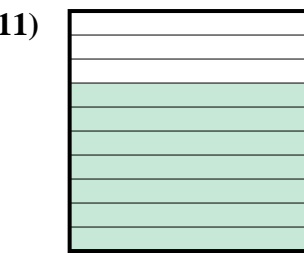
fraction  $\frac{9}{10}$   
 décimal  $0,9$   
 pourcentage  $90$



fraction  $\frac{4}{10}$   
 décimal  $0,4$   
 pourcentage  $40$



fraction  $\frac{34}{100}$   
 décimal  $0,34$   
 pourcentage  $34$



fraction  $\frac{7}{10}$   
 décimal  $0,7$   
 pourcentage  $70$

**Réponses**

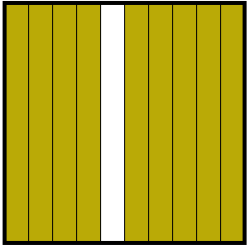
Ex.	$\frac{86}{100}$	<b>0,86</b>	<b>86%</b>
1.	$\frac{2}{10}$	<b>0,2</b>	<b>20%</b>
2.	$\frac{5}{10}$	<b>0,5</b>	<b>50%</b>
3.	$\frac{61}{100}$	<b>0,61</b>	<b>61%</b>
4.	$\frac{85}{100}$	<b>0,85</b>	<b>85%</b>
5.	$\frac{3}{10}$	<b>0,3</b>	<b>30%</b>
6.	$\frac{8}{100}$	<b>0,08</b>	<b>8%</b>
7.	$\frac{62}{100}$	<b>0,62</b>	<b>62%</b>
8.	$\frac{9}{10}$	<b>0,9</b>	<b>90%</b>
9.	$\frac{4}{10}$	<b>0,4</b>	<b>40%</b>
10.	$\frac{34}{100}$	<b>0,34</b>	<b>34%</b>
11.	$\frac{7}{10}$	<b>0,7</b>	<b>70%</b>





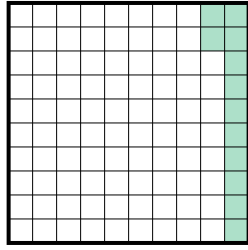
Exprimez la valeur en fraction , décimal & pourcentage.

Ex)



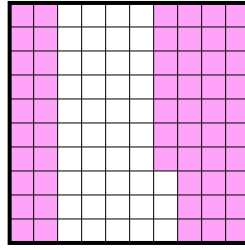
fraction  $\frac{9}{10}$   
 décimal 0,9  
 pourcentage 90

1)



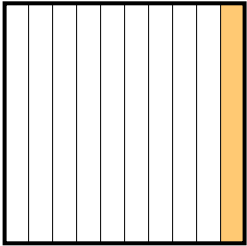
fraction \_\_\_\_\_  
 décimal \_\_\_\_\_  
 pourcentage \_\_\_\_\_

2)



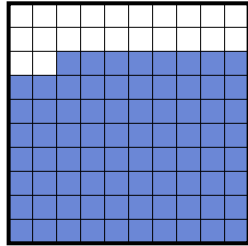
fraction \_\_\_\_\_  
 décimal \_\_\_\_\_  
 pourcentage \_\_\_\_\_

3)




fraction \_\_\_\_\_  
 décimal \_\_\_\_\_  
 pourcentage \_\_\_\_\_

4)



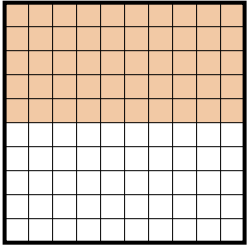
fraction \_\_\_\_\_  
 décimal \_\_\_\_\_  
 pourcentage \_\_\_\_\_

5)



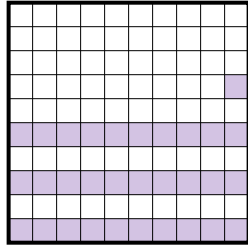
fraction \_\_\_\_\_  
 décimal \_\_\_\_\_  
 pourcentage \_\_\_\_\_

6)



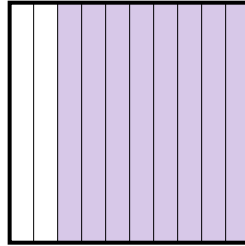
fraction \_\_\_\_\_  
 décimal \_\_\_\_\_  
 pourcentage \_\_\_\_\_

7)



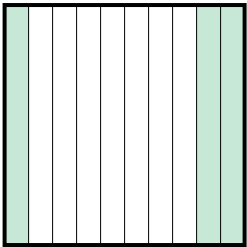
fraction \_\_\_\_\_  
 décimal \_\_\_\_\_  
 pourcentage \_\_\_\_\_

8)



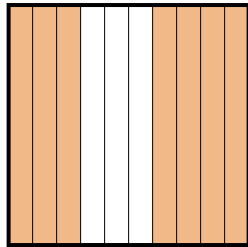
fraction \_\_\_\_\_  
 décimal \_\_\_\_\_  
 pourcentage \_\_\_\_\_

9)



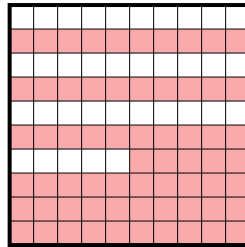
fraction \_\_\_\_\_  
 décimal \_\_\_\_\_  
 pourcentage \_\_\_\_\_

10)



fraction \_\_\_\_\_  
 décimal \_\_\_\_\_  
 pourcentage \_\_\_\_\_

11)



fraction \_\_\_\_\_  
 décimal \_\_\_\_\_  
 pourcentage \_\_\_\_\_

**Réponses**

Ex.  $\frac{9}{10}$  0,9 90%

1. \_\_\_\_\_

2. \_\_\_\_\_

3. \_\_\_\_\_

4. \_\_\_\_\_

5. \_\_\_\_\_

6. \_\_\_\_\_

7. \_\_\_\_\_

8. \_\_\_\_\_

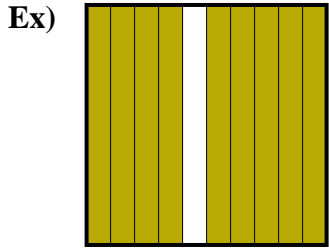
9. \_\_\_\_\_

10. \_\_\_\_\_

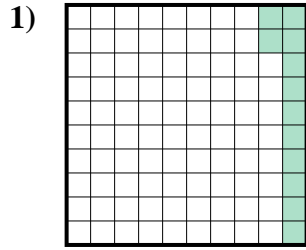
11. \_\_\_\_\_



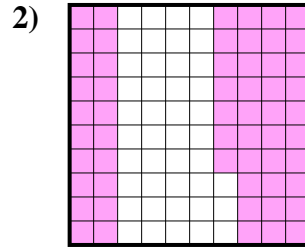
Exprimez la valeur en fraction , décimal & pourcentage.



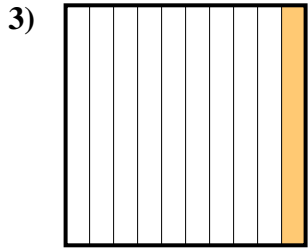
fraction  $\frac{9}{10}$   
 décimal  $0,9$   
 pourcentage  $90$



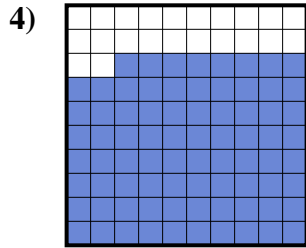
fraction  $\frac{12}{100}$   
 décimal  $0,12$   
 pourcentage  $12$



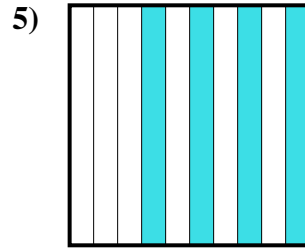
fraction  $\frac{57}{100}$   
 décimal  $0,57$   
 pourcentage  $57$



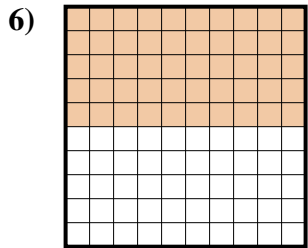
fraction  $\frac{1}{10}$   
 décimal  $0,1$   
 pourcentage  $10$



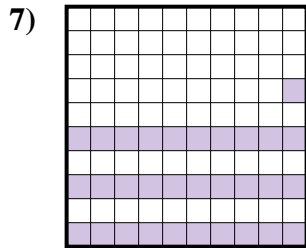
fraction  $\frac{78}{100}$   
 décimal  $0,78$   
 pourcentage  $78$



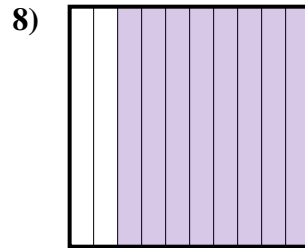
fraction  $\frac{4}{10}$   
 décimal  $0,4$   
 pourcentage  $40$



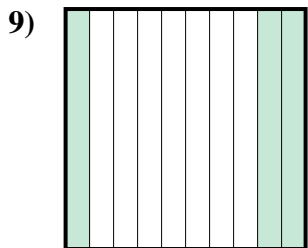
fraction  $\frac{50}{100}$   
 décimal  $0,50$   
 pourcentage  $50$



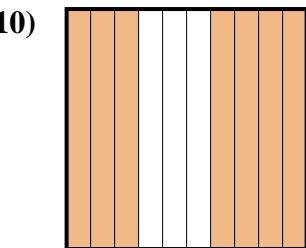
fraction  $\frac{31}{100}$   
 décimal  $0,31$   
 pourcentage  $31$



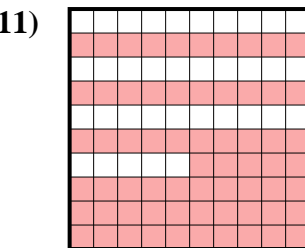
fraction  $\frac{8}{10}$   
 décimal  $0,8$   
 pourcentage  $80$



fraction  $\frac{3}{10}$   
 décimal  $0,3$   
 pourcentage  $30$



fraction  $\frac{7}{10}$   
 décimal  $0,7$   
 pourcentage  $70$



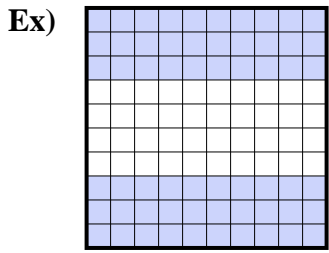
fraction  $\frac{65}{100}$   
 décimal  $0,65$   
 pourcentage  $65$

**Réponses**

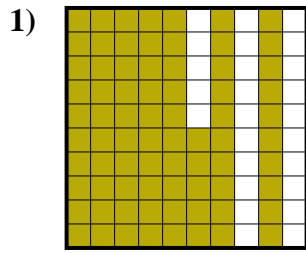
- Ex.  $\frac{9}{10}$  **0,9** **90%**  
 1.  $\frac{12}{100}$  **0,12** **12%**  
 2.  $\frac{57}{100}$  **0,57** **57%**  
 3.  $\frac{1}{10}$  **0,1** **10%**  
 4.  $\frac{78}{100}$  **0,78** **78%**  
 5.  $\frac{4}{10}$  **0,4** **40%**  
 6.  $\frac{50}{100}$  **0,50** **50%**  
 7.  $\frac{31}{100}$  **0,31** **31%**  
 8.  $\frac{8}{10}$  **0,8** **80%**  
 9.  $\frac{3}{10}$  **0,3** **30%**  
 10.  $\frac{7}{10}$  **0,7** **70%**  
 11.  $\frac{65}{100}$  **0,65** **65%**



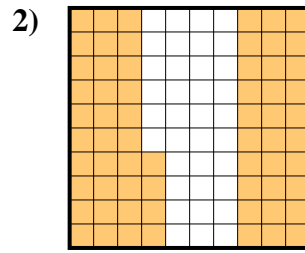
Exprimez la valeur en fraction , décimal & pourcentage.



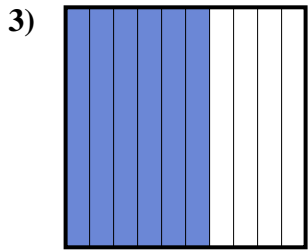
fraction  $\frac{60}{100}$   
 décimal 0,60  
 pourcentage 60



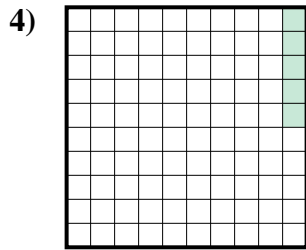
fraction \_\_\_\_\_  
 décimal \_\_\_\_\_  
 pourcentage \_\_\_\_\_



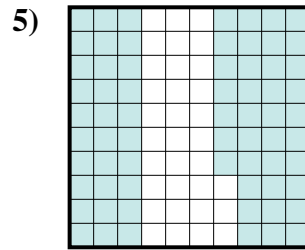
fraction \_\_\_\_\_  
 décimal \_\_\_\_\_  
 pourcentage \_\_\_\_\_



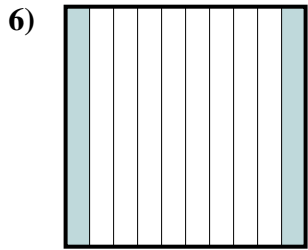
fraction \_\_\_\_\_  
 décimal \_\_\_\_\_  
 pourcentage \_\_\_\_\_



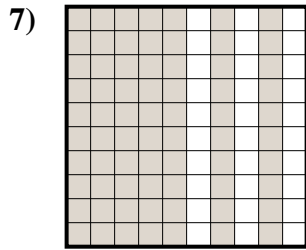
fraction \_\_\_\_\_  
 décimal \_\_\_\_\_  
 pourcentage \_\_\_\_\_



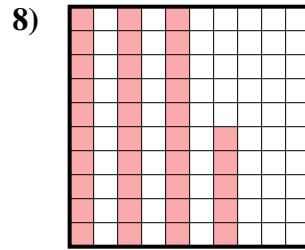
fraction \_\_\_\_\_  
 décimal \_\_\_\_\_  
 pourcentage \_\_\_\_\_



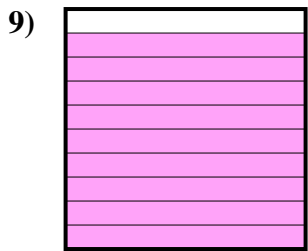
fraction \_\_\_\_\_  
 décimal \_\_\_\_\_  
 pourcentage \_\_\_\_\_



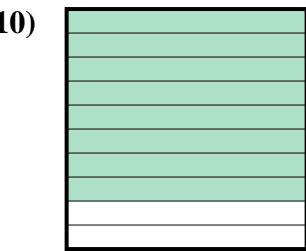
fraction \_\_\_\_\_  
 décimal \_\_\_\_\_  
 pourcentage \_\_\_\_\_



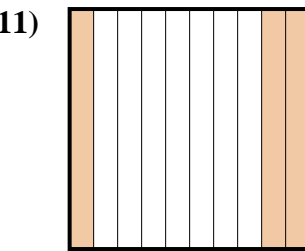
fraction \_\_\_\_\_  
 décimal \_\_\_\_\_  
 pourcentage \_\_\_\_\_



fraction \_\_\_\_\_  
 décimal \_\_\_\_\_  
 pourcentage \_\_\_\_\_



fraction \_\_\_\_\_  
 décimal \_\_\_\_\_  
 pourcentage \_\_\_\_\_



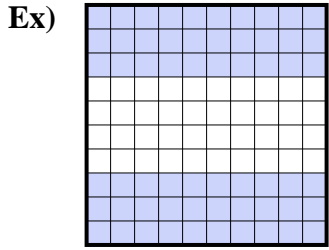
fraction \_\_\_\_\_  
 décimal \_\_\_\_\_  
 pourcentage \_\_\_\_\_

**Réponses**

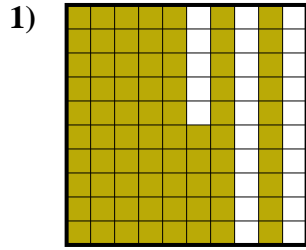
Ex.	$\frac{60}{100}$	0,60	60%
1.	_____	_____	_____
2.	_____	_____	_____
3.	_____	_____	_____
4.	_____	_____	_____
5.	_____	_____	_____
6.	_____	_____	_____
7.	_____	_____	_____
8.	_____	_____	_____
9.	_____	_____	_____
10.	_____	_____	_____
11.	_____	_____	_____



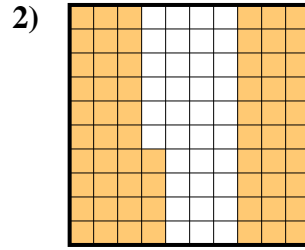
Exprimez la valeur en fraction , décimal & pourcentage.



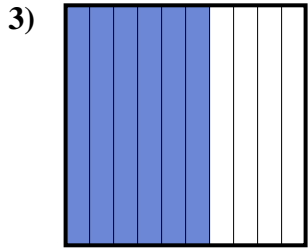
fraction  $\frac{60}{100}$   
 décimal  $0,60$   
 pourcentage  $60$



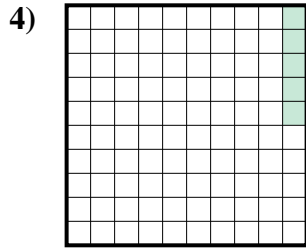
fraction  $\frac{75}{100}$   
 décimal  $0,75$   
 pourcentage  $75$



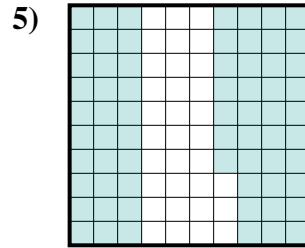
fraction  $\frac{64}{100}$   
 décimal  $0,64$   
 pourcentage  $64$



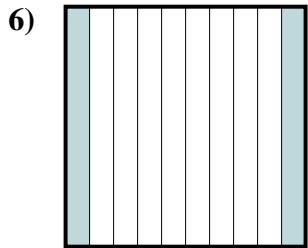
fraction  $\frac{6}{10}$   
 décimal  $0,6$   
 pourcentage  $60$



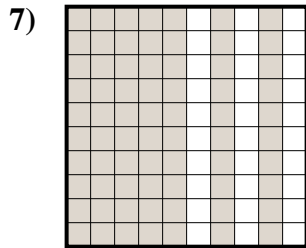
fraction  $\frac{5}{100}$   
 décimal  $0,05$   
 pourcentage  $5$



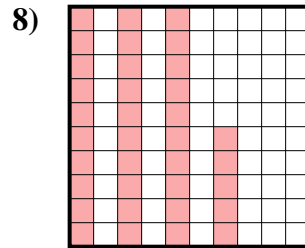
fraction  $\frac{67}{100}$   
 décimal  $0,67$   
 pourcentage  $67$



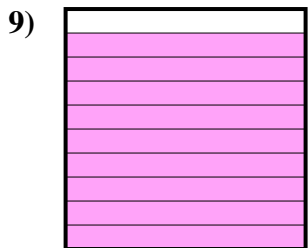
fraction  $\frac{2}{10}$   
 décimal  $0,2$   
 pourcentage  $20$



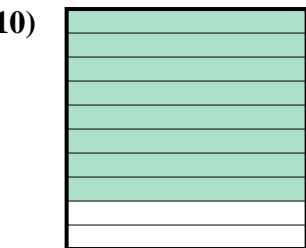
fraction  $\frac{70}{100}$   
 décimal  $0,70$   
 pourcentage  $70$



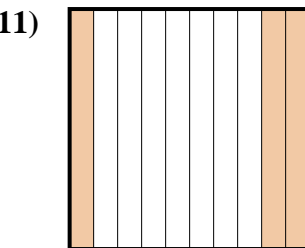
fraction  $\frac{35}{100}$   
 décimal  $0,35$   
 pourcentage  $35$



fraction  $\frac{9}{10}$   
 décimal  $0,9$   
 pourcentage  $90$



fraction  $\frac{8}{10}$   
 décimal  $0,8$   
 pourcentage  $80$



fraction  $\frac{3}{10}$   
 décimal  $0,3$   
 pourcentage  $30$

**Réponses**

- Ex.  $\frac{60}{100}$  **0,60** **60%**  
 1.  $\frac{75}{100}$  **0,75** **75%**  
 2.  $\frac{64}{100}$  **0,64** **64%**  
 3.  $\frac{6}{10}$  **0,6** **60%**  
 4.  $\frac{5}{100}$  **0,05** **5%**  
 5.  $\frac{67}{100}$  **0,67** **67%**  
 6.  $\frac{2}{10}$  **0,2** **20%**  
 7.  $\frac{70}{100}$  **0,70** **70%**  
 8.  $\frac{35}{100}$  **0,35** **35%**  
 9.  $\frac{9}{10}$  **0,9** **90%**  
 10.  $\frac{8}{10}$  **0,8** **80%**  
 11.  $\frac{3}{10}$  **0,3** **30%**