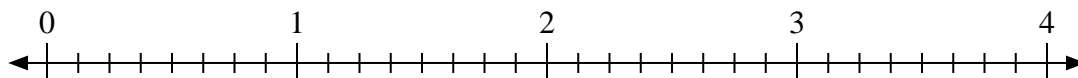




Utilisez la droite numérique pour résoudre les problèmes.

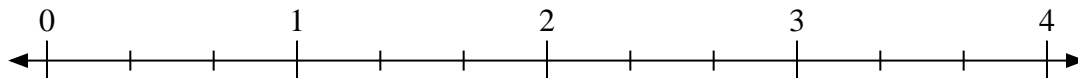
Réponses

1) $2 \div \frac{1}{8}$



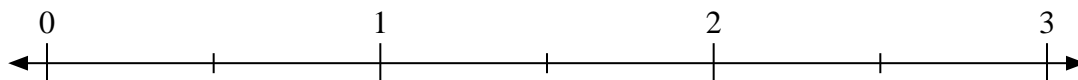
1. _____

2) $2 \div \frac{2}{3}$



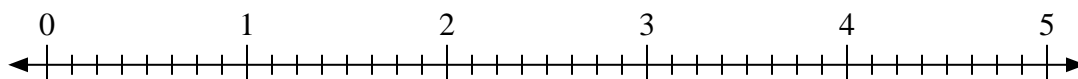
2. _____

3) $2 \div \frac{1}{2}$



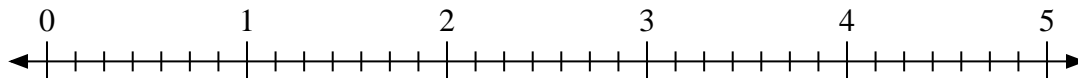
3. _____

4) $3 \div \frac{5}{8}$



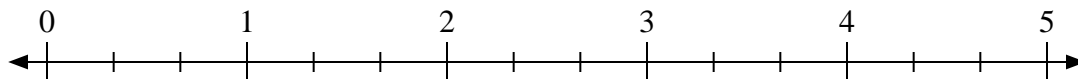
4. _____

5) $2 \div \frac{6}{7}$



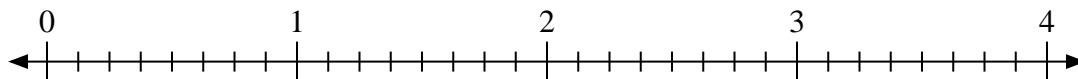
5. _____

6) $4 \div \frac{1}{3}$



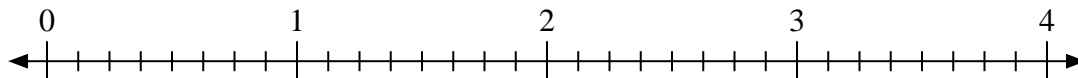
6. _____

7) $2 \div \frac{3}{8}$



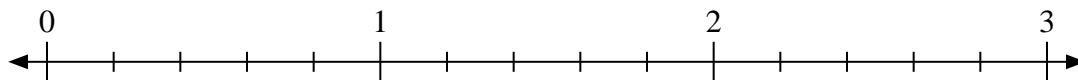
7. _____

8) $2 \div \frac{2}{8}$



8. _____

9) $2 \div \frac{3}{5}$



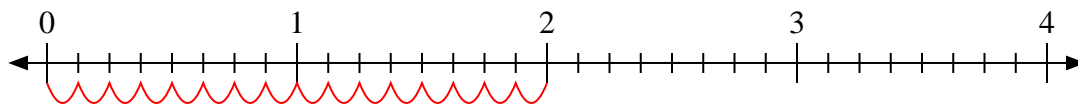
9. _____



Utilisez la droite numérique pour résoudre les problèmes.

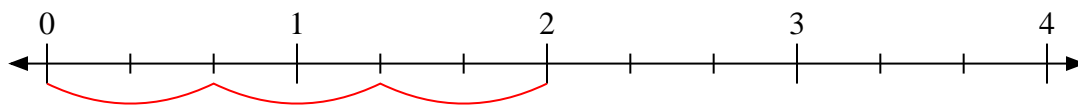
Réponses

1) $2 \div \frac{1}{8}$



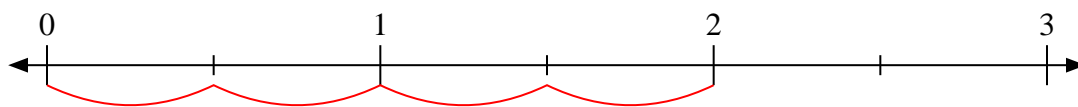
1. 16

2) $2 \div \frac{2}{3}$



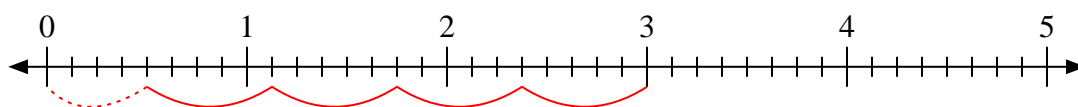
2. 3

3) $2 \div \frac{1}{2}$



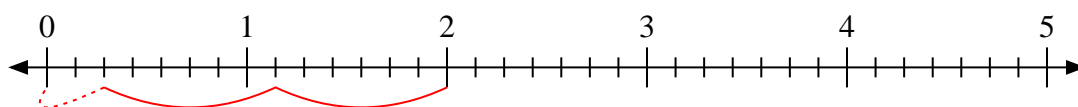
3. 4

4) $3 \div \frac{5}{8}$



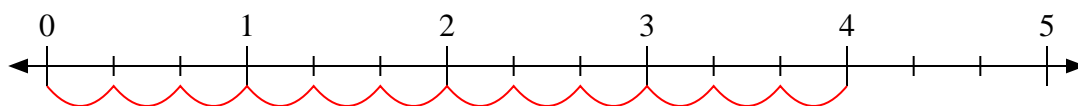
4. $4 \frac{4}{5}$

5) $2 \div \frac{6}{7}$



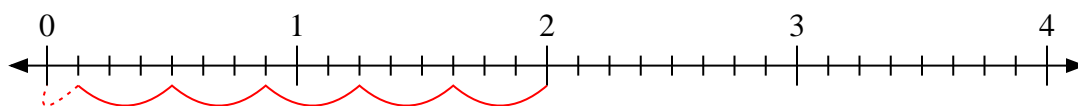
5. $2 \frac{2}{6}$

6) $4 \div \frac{1}{3}$



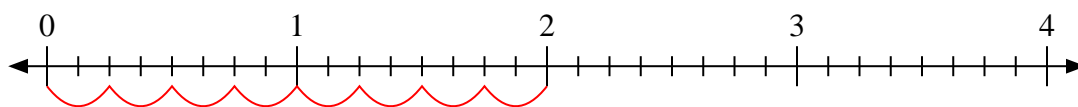
6. 12

7) $2 \div \frac{3}{8}$



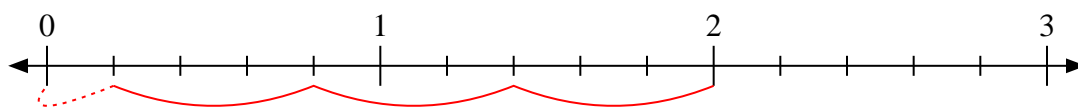
7. $5 \frac{1}{3}$

8) $2 \div \frac{2}{8}$



8. 8

9) $2 \div \frac{3}{5}$



9. $3 \frac{1}{3}$