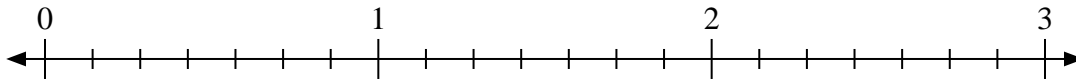




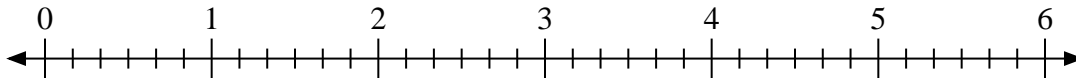
Utilisez la droite numérique pour résoudre les problèmes.

Réponses

1) $2 \div \frac{3}{7}$



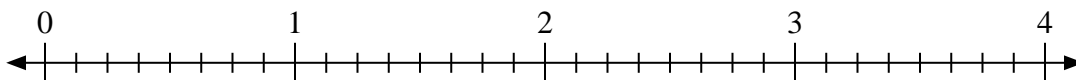
2) $6 \div \frac{3}{6}$



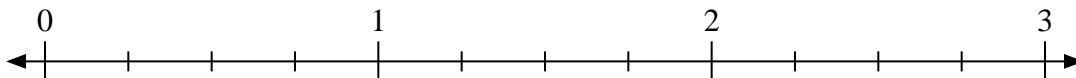
3) $2 \div \frac{1}{4}$



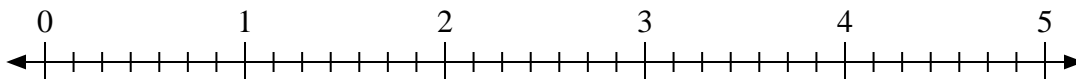
4) $2 \div \frac{2}{8}$



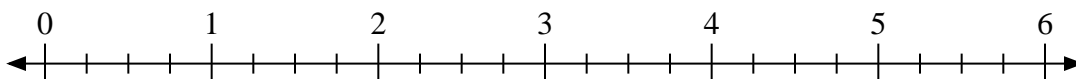
5) $3 \div \frac{2}{4}$



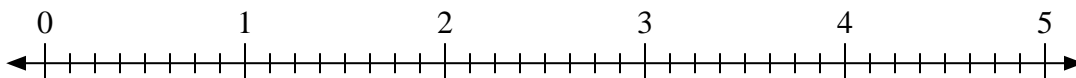
6) $5 \div \frac{4}{7}$



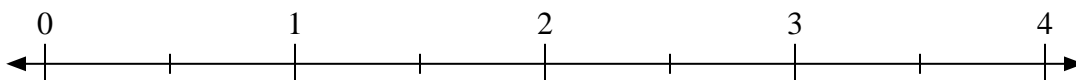
7) $6 \div \frac{1}{4}$



8) $5 \div \frac{5}{8}$



9) $3 \div \frac{1}{2}$

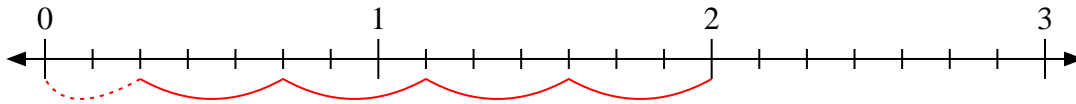


1. _____
2. _____
3. _____
4. _____
5. _____
6. _____
7. _____
8. _____
9. _____

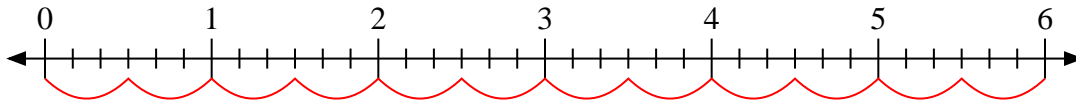


Utilisez la droite numérique pour résoudre les problèmes.

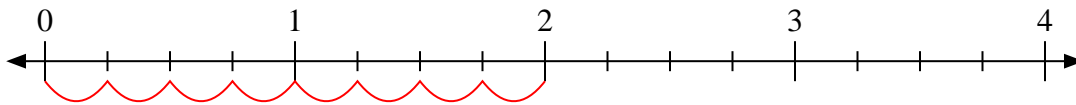
1) $2 \div \frac{3}{7}$



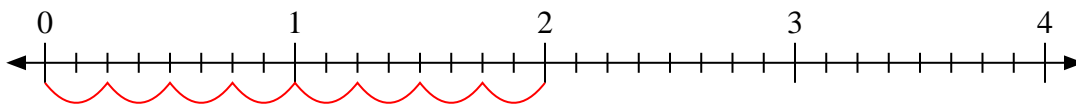
2) $6 \div \frac{3}{6}$



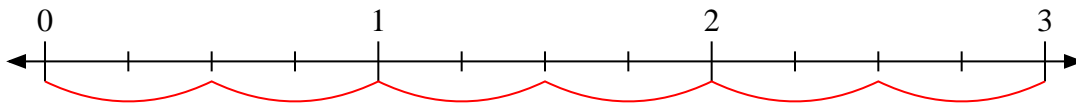
3) $2 \div \frac{1}{4}$



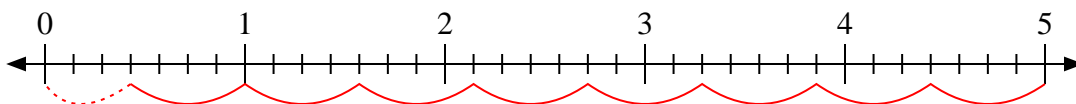
4) $2 \div \frac{2}{8}$



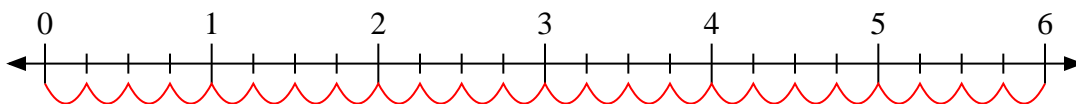
5) $3 \div \frac{2}{4}$



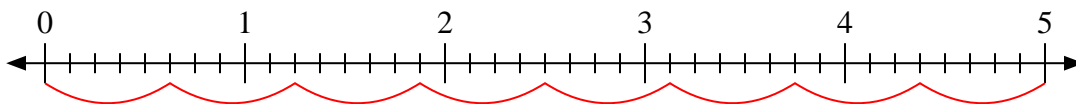
6) $5 \div \frac{4}{7}$



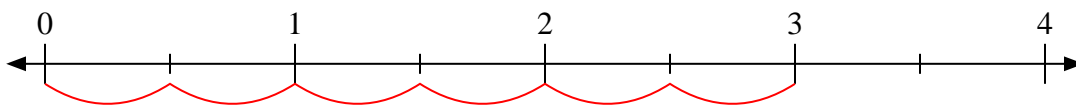
7) $6 \div \frac{1}{4}$



8) $5 \div \frac{5}{8}$



9) $3 \div \frac{1}{2}$



Réponses

1. 4 $\frac{2}{3}$

2. 12

3. 8

4. 8

5. 6

6. 8 $\frac{3}{4}$

7. 24

8. 8

9. 6