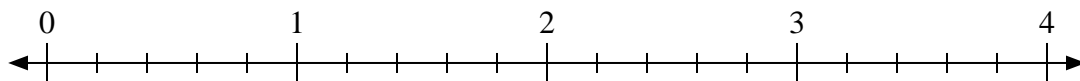




Utilisez la droite numérique pour résoudre les problèmes.

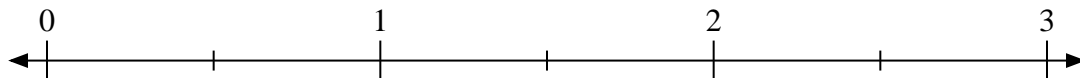
**Réponses**

1)  $2 \div \frac{1}{5}$



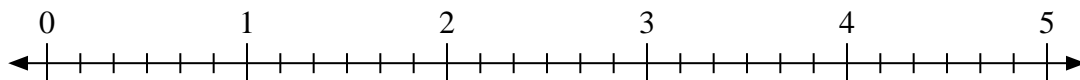
1. \_\_\_\_\_

2)  $3 \div \frac{1}{2}$



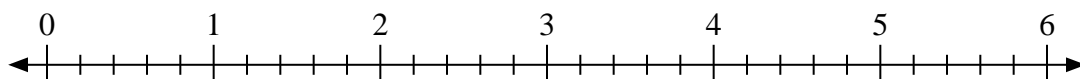
2. \_\_\_\_\_

3)  $3 \div \frac{1}{6}$



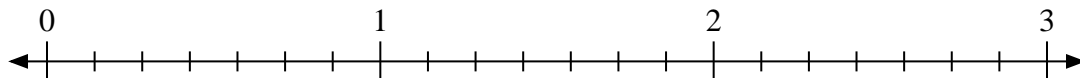
3. \_\_\_\_\_

4)  $6 \div \frac{4}{5}$



4. \_\_\_\_\_

5)  $3 \div \frac{5}{7}$



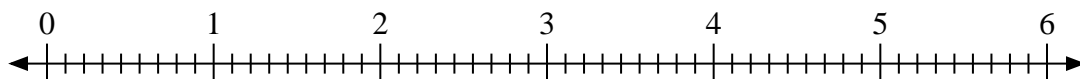
5. \_\_\_\_\_

6)  $4 \div \frac{2}{3}$



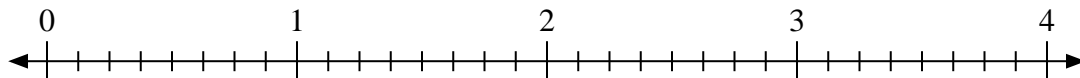
6. \_\_\_\_\_

7)  $4 \div \frac{5}{9}$



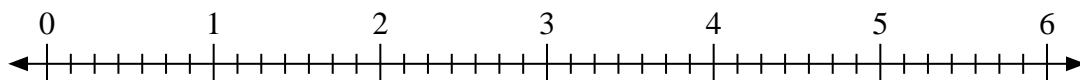
7. \_\_\_\_\_

8)  $4 \div \frac{7}{8}$



8. \_\_\_\_\_

9)  $5 \div \frac{3}{7}$

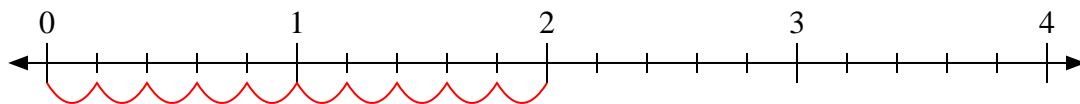


9. \_\_\_\_\_

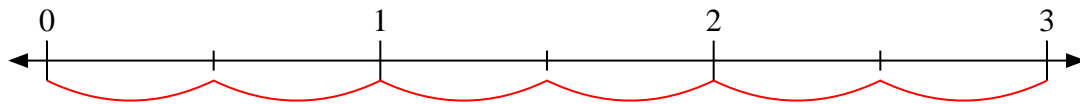


Utilisez la droite numérique pour résoudre les problèmes.

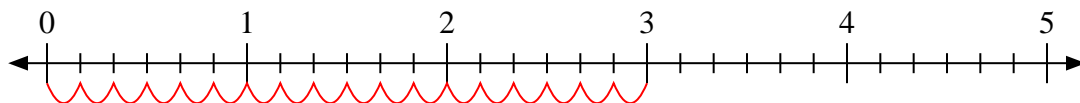
1)  $2 \div \frac{1}{5}$



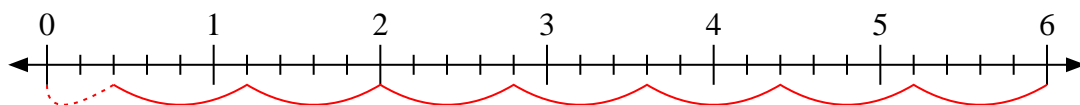
2)  $3 \div \frac{1}{2}$



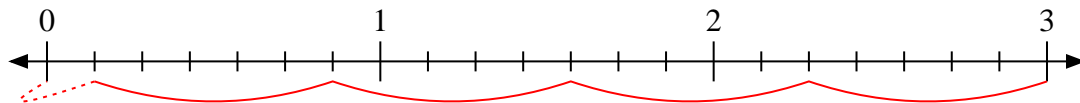
3)  $3 \div \frac{1}{6}$



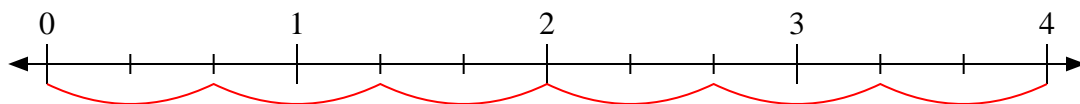
4)  $6 \div \frac{4}{5}$



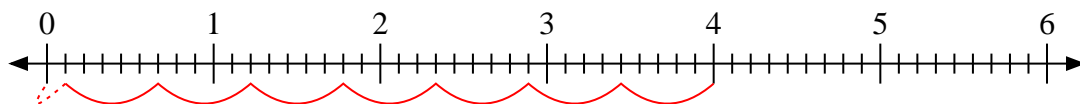
5)  $3 \div \frac{5}{7}$



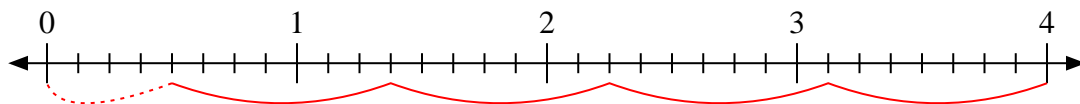
6)  $4 \div \frac{2}{3}$



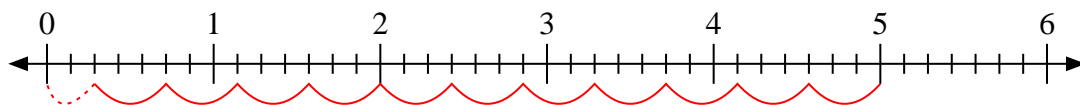
7)  $4 \div \frac{5}{9}$



8)  $4 \div \frac{7}{8}$



9)  $5 \div \frac{3}{7}$



**Réponses**

1. **10**

2. **6**

3. **18**

4.  **$7 \frac{2}{4}$**

5.  **$4 \frac{1}{5}$**

6. **6**

7.  **$7 \frac{1}{5}$**

8.  **$4 \frac{4}{7}$**

9.  **$11 \frac{2}{3}$**