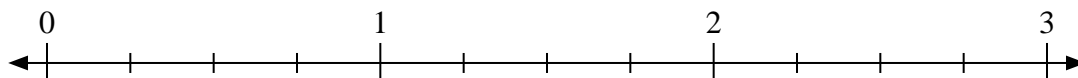




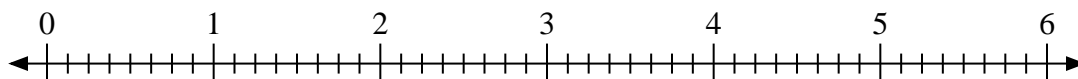
Utilisez la droite numérique pour résoudre les problèmes.

Réponses

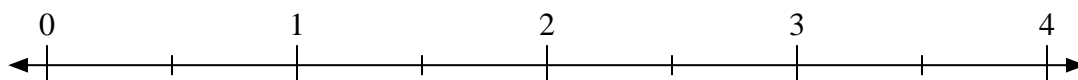
1) $2 \div \frac{3}{4}$



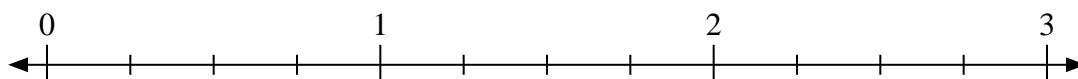
2) $2 \div \frac{7}{8}$



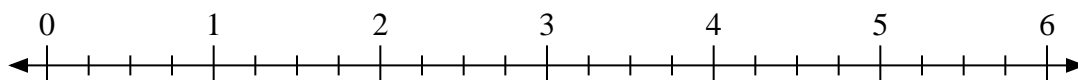
3) $4 \div \frac{1}{2}$



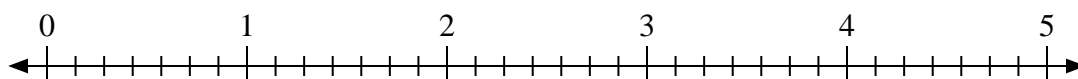
4) $3 \div \frac{2}{4}$



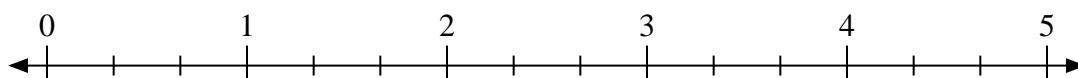
5) $6 \div \frac{3}{4}$



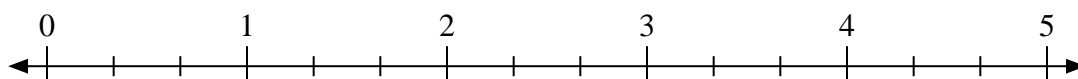
6) $3 \div \frac{1}{7}$



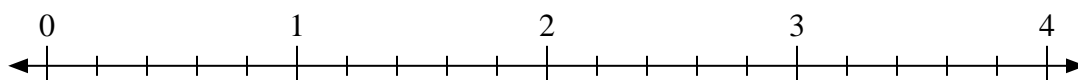
7) $4 \div \frac{1}{3}$



8) $3 \div \frac{2}{3}$



9) $2 \div \frac{3}{5}$



1. _____

2. _____

3. _____

4. _____

5. _____

6. _____

7. _____

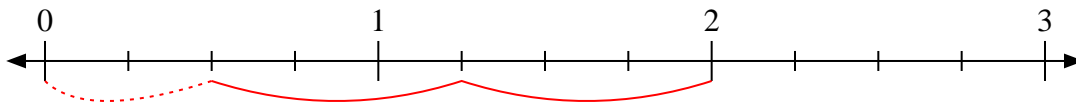
8. _____

9. _____

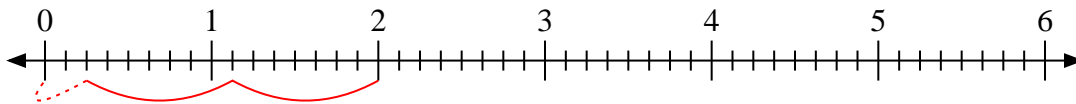


Utilisez la droite numérique pour résoudre les problèmes.

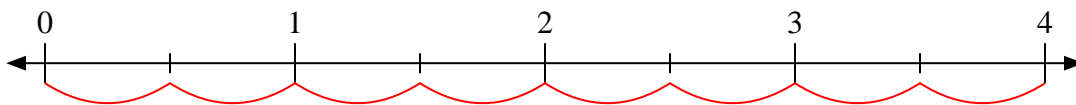
1) $2 \div \frac{3}{4}$



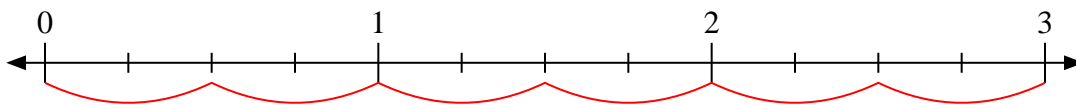
2) $2 \div \frac{7}{8}$



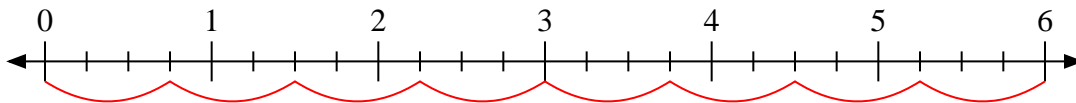
3) $4 \div \frac{1}{2}$



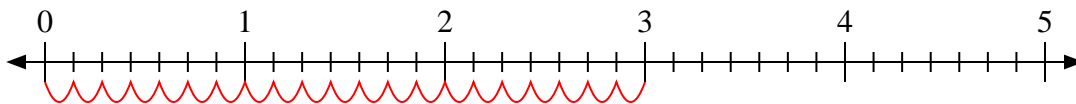
4) $3 \div \frac{2}{4}$



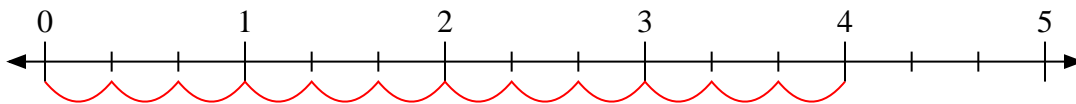
5) $6 \div \frac{3}{4}$



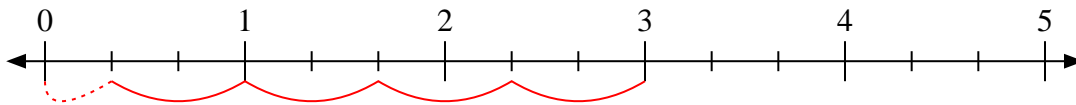
6) $3 \div \frac{1}{7}$



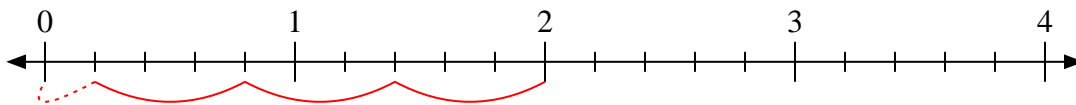
7) $4 \div \frac{1}{3}$



8) $3 \div \frac{2}{3}$



9) $2 \div \frac{3}{5}$



Réponses

1. 2 ²/₃

2. 2 ²/₇

3. 8

4. 6

5. 8

6. 21

7. 12

8. 4 ¹/₂

9. 3 ¹/₃