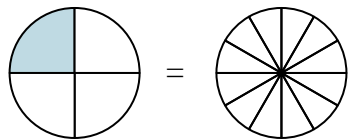




Colorez la fraction visuelle pour obtenir la fraction équivalente.

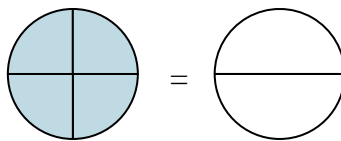
Ex)

$$\frac{1}{4} = \frac{3}{12}$$



1)

$$\frac{4}{4} =$$



Réponses

Ex. $\frac{3}{12}$

1. _____

2. _____

3. _____

4. _____

5. _____

6. _____

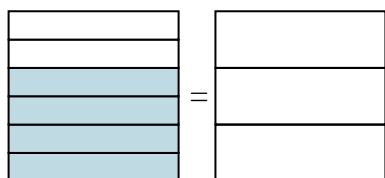
7. _____

8. _____

9. _____

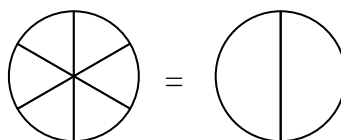
2)

$$\frac{4}{6} =$$



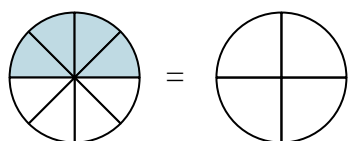
3)

$$\frac{0}{6} =$$



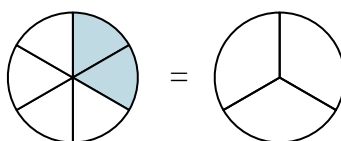
4)

$$\frac{4}{8} =$$



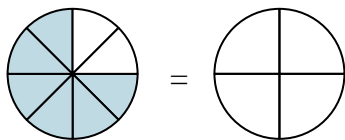
5)

$$\frac{2}{6} =$$



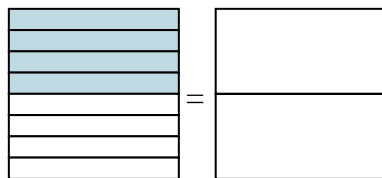
6)

$$\frac{6}{8} =$$



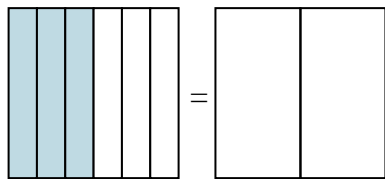
7)

$$\frac{4}{8} =$$



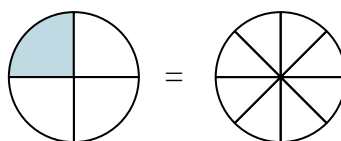
8)

$$\frac{3}{6} =$$



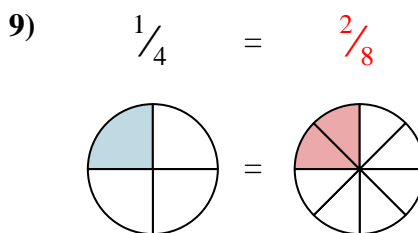
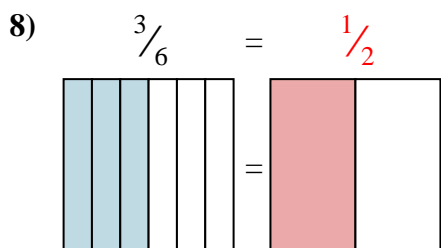
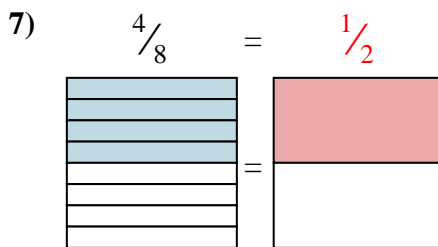
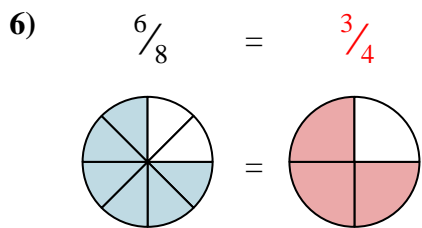
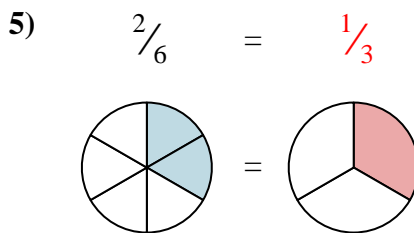
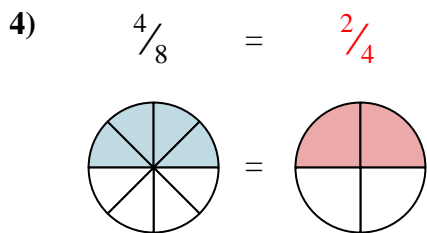
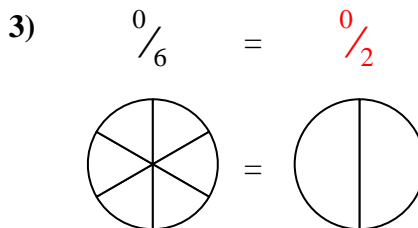
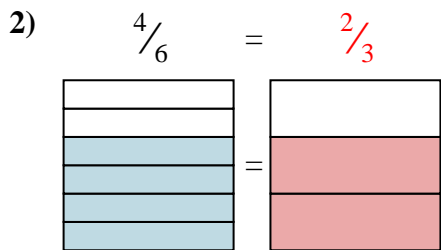
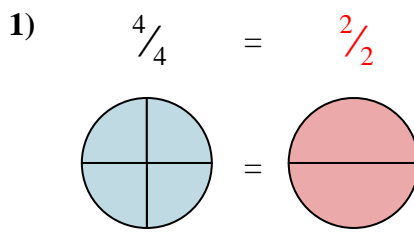
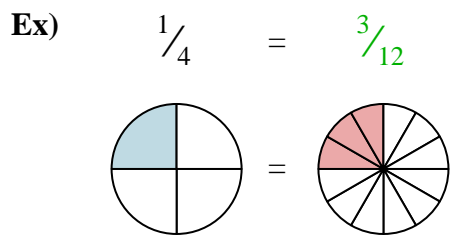
9)

$$\frac{1}{4} =$$





Colorez la fraction visuelle pour obtenir la fraction équivalente.



Réponses

- Ex. $\frac{3}{12}$
1. $\frac{2}{2}$
2. $\frac{2}{3}$
3. $\frac{0}{2}$
4. $\frac{2}{4}$
5. $\frac{1}{3}$
6. $\frac{3}{4}$
7. $\frac{1}{2}$
8. $\frac{1}{2}$
9. $\frac{2}{8}$