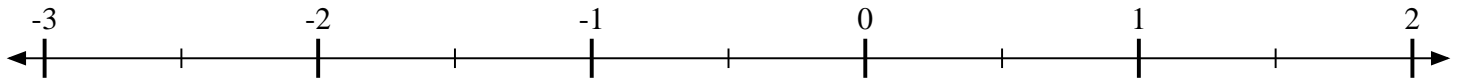


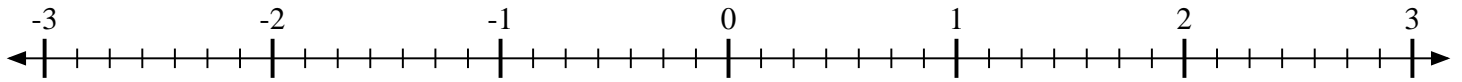


Indiquez la position de chaque fraction.

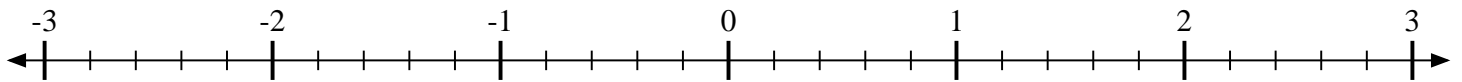
1) Indiquez la position de  $1\frac{1}{2}$



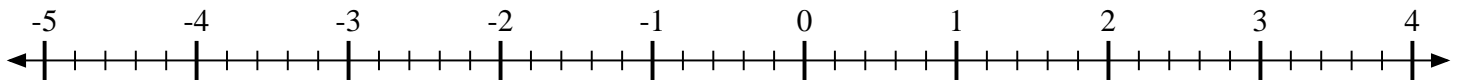
2) Indiquez la position de  $-1\frac{4}{7}$



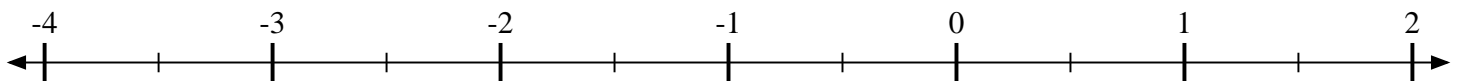
3) Indiquez la position de  $-2\frac{4}{5}$



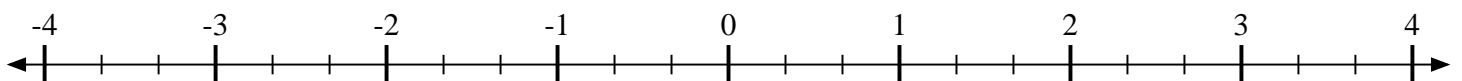
4) Indiquez la position de  $1\frac{1}{5}$



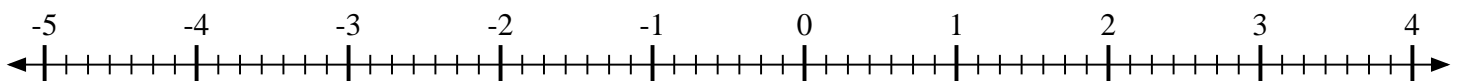
5) Indiquez la position de  $-3\frac{1}{2}$



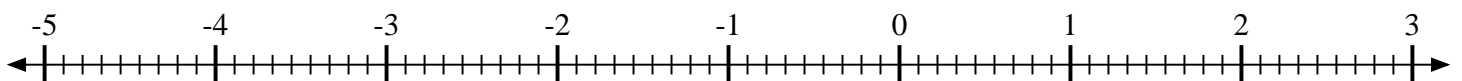
6) Indiquez la position de  $-2\frac{2}{3}$



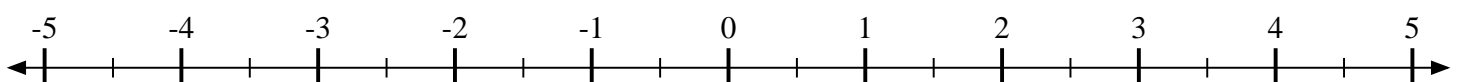
7) Indiquez la position de  $-1\frac{3}{7}$



8) Indiquez la position de  $-2\frac{6}{9}$



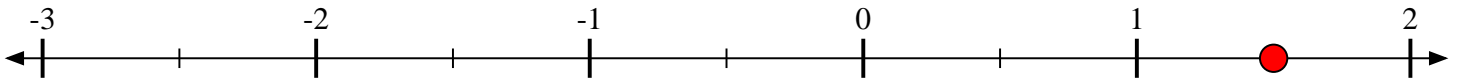
9) Indiquez la position de  $2\frac{1}{2}$



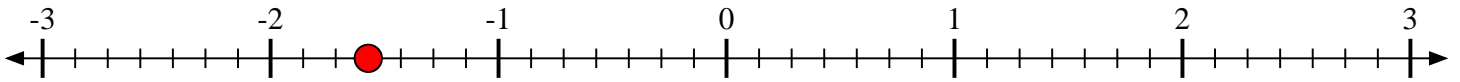


Indiquez la position de chaque fraction.

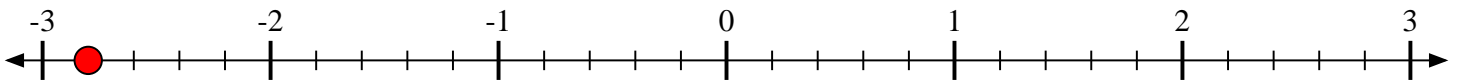
- 1) Indiquez la position de  $1\frac{1}{2}$



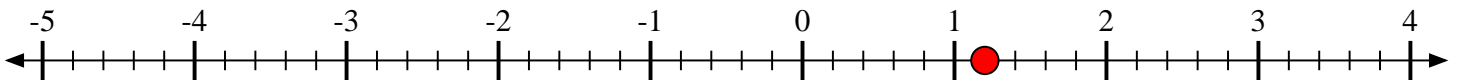
- 2) Indiquez la position de  $-1\frac{4}{7}$



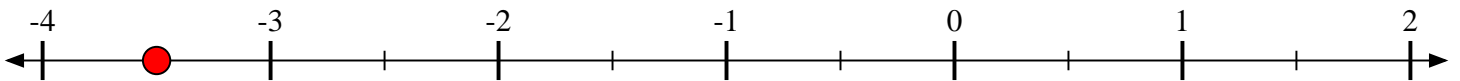
- 3) Indiquez la position de  $-2\frac{4}{5}$



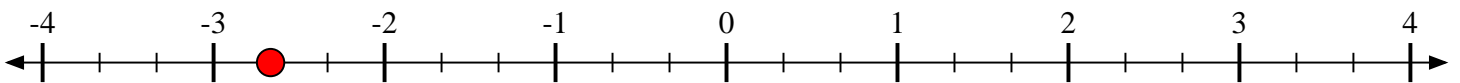
- 4) Indiquez la position de  $1\frac{1}{5}$



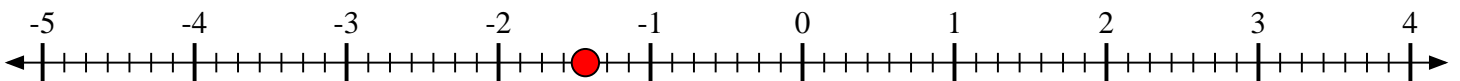
- 5) Indiquez la position de  $-3\frac{1}{2}$



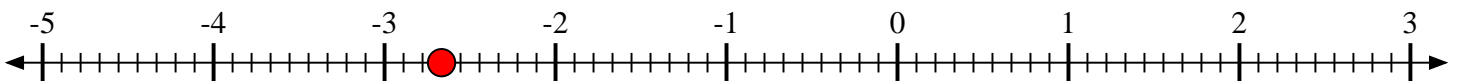
- 6) Indiquez la position de  $-2\frac{2}{3}$



- 7) Indiquez la position de  $-1\frac{3}{7}$



- 8) Indiquez la position de  $-2\frac{6}{9}$



- 9) Indiquez la position de  $2\frac{1}{2}$

