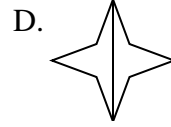
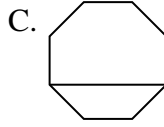

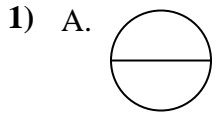




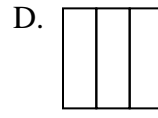
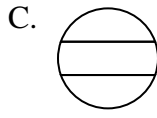
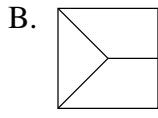
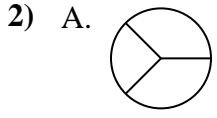
Quelle(s) figure(s) divisée(s) représente(nt) la même surface, si pas de réponse, écrire: 'aucune'

Réponses



1. _____

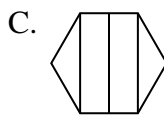
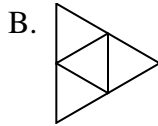
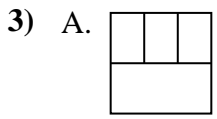
2. _____



3. _____

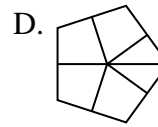
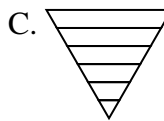
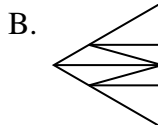
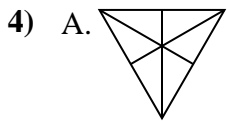
4. _____

5. _____

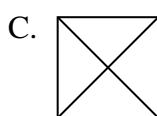
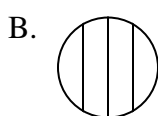
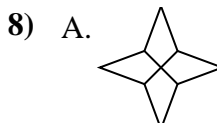
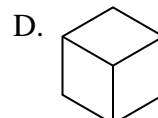
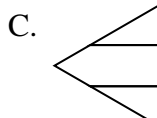
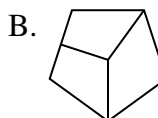
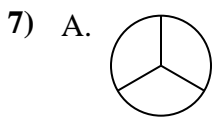
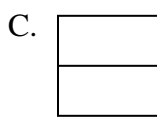
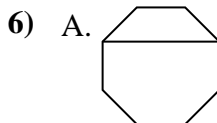
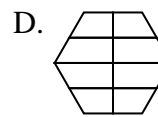
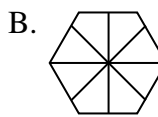
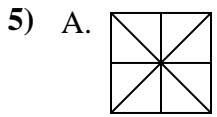


6. _____

7. _____



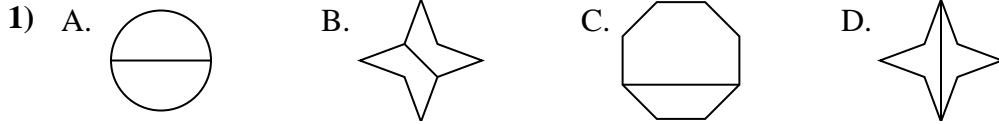
8. _____





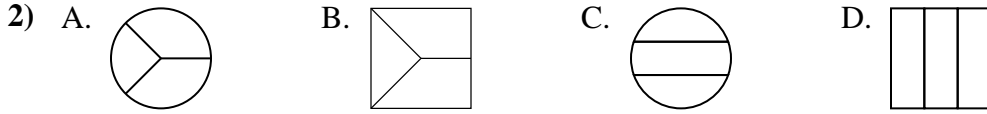
Quelle(s) figure(s) divisée(s) représente(nt) la même surface, si pas de réponse, écrire: 'aucune'

Réponses



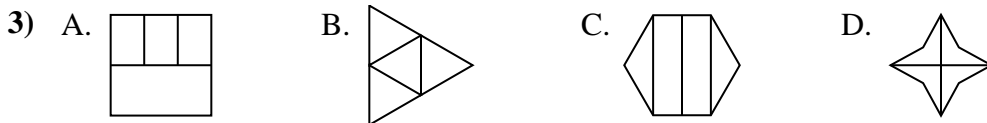
1. **A,B,D**

2. **D**



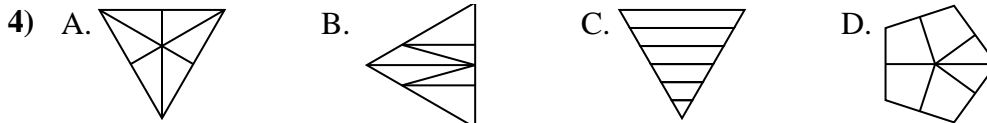
3. **B,D**

4. **A**



5. **A**

6. **B,C,D**



7. **A,D**

8. **A,C**

