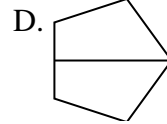

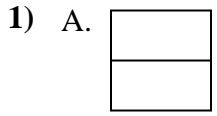




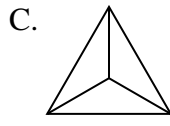
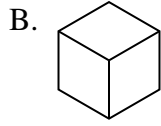
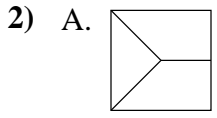
Quelle(s) figure(s) divisée(s) représente(nt) la même surface, si pas de réponse, écrire: 'aucune'

Réponses



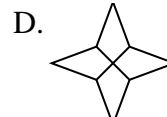
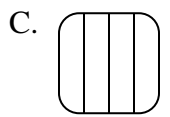
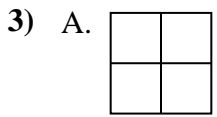
1. _____

2. _____



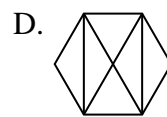
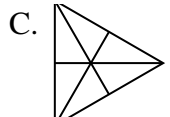
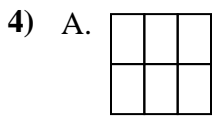
3. _____

4. _____



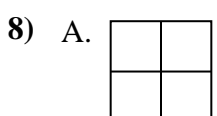
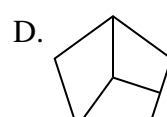
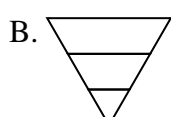
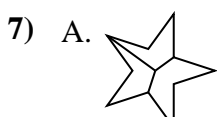
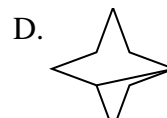
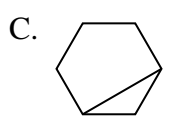
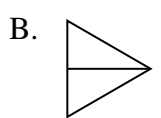
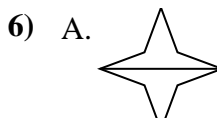
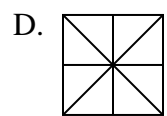
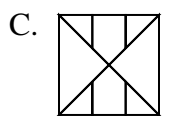
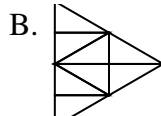
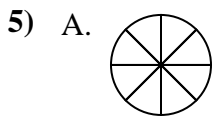
5. _____

6. _____



7. _____

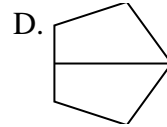
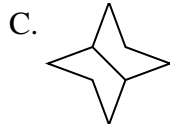

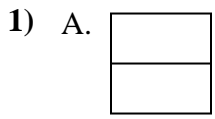
8. _____



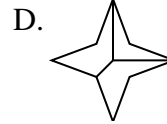
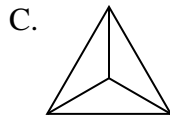
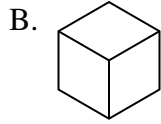
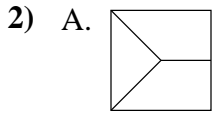


Quelle(s) figure(s) divisée(s) représente(nt) la même surface, si pas de réponse, écrire: 'aucune'

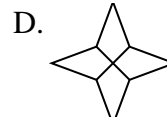
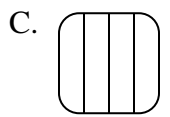
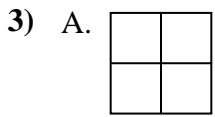
Réponses



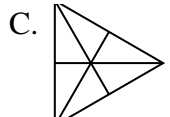
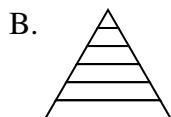
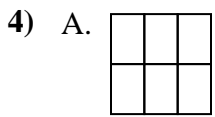
1. **A,B,C,D**



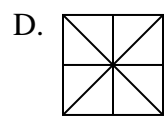
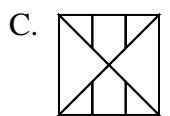
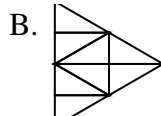
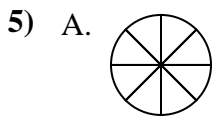
2. **B,C**



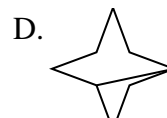
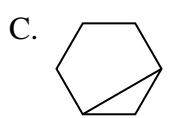
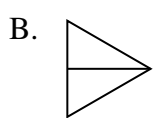
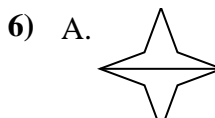
3. **A,B,D**



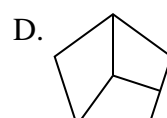
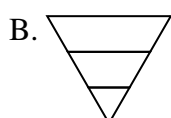
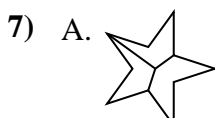
4. **A,C**



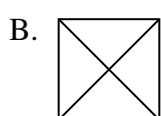
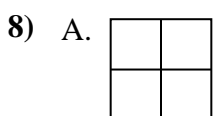
5. **A,B,D**



6. **A,B**



7. **C**



8. **A,B**