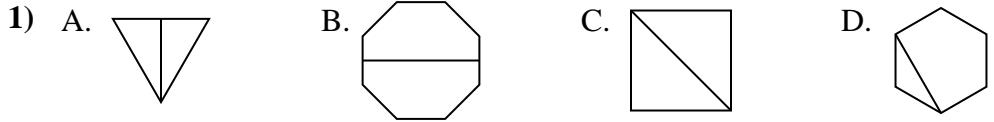




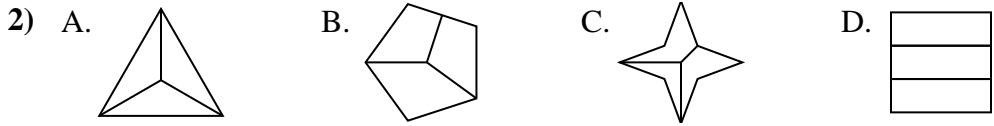
Quelle(s) figure(s) divisée(s) représente(nt) la même surface, si pas de réponse, écrire: 'aucune'

Réponses



1. _____

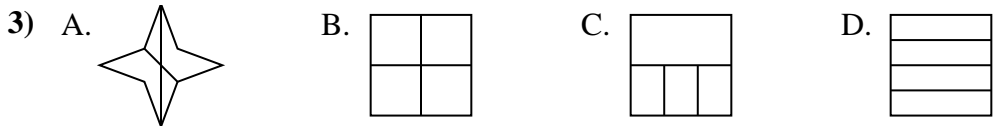
2. _____



3. _____

4. _____


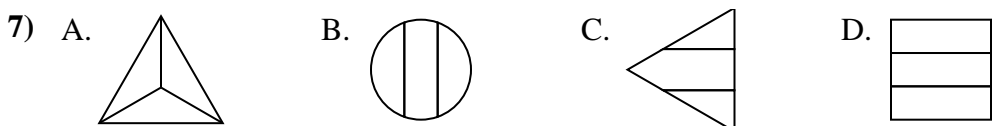
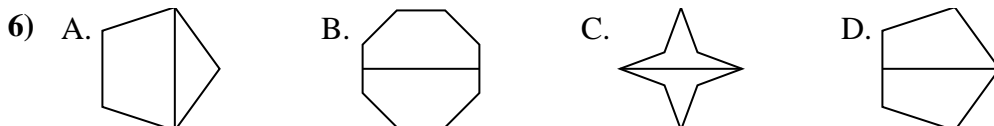
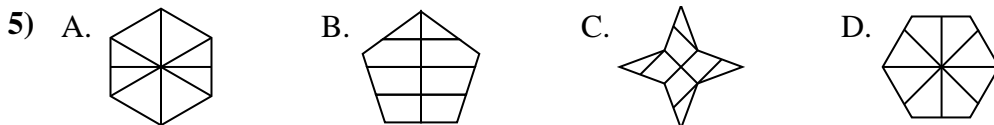
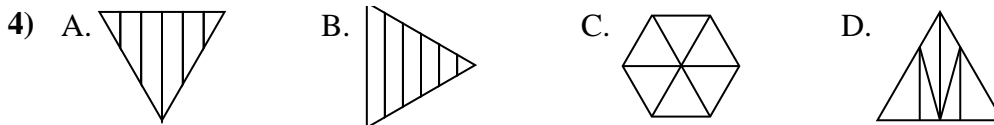
5. _____



6. _____

7. _____


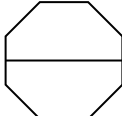
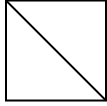
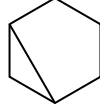
8. _____

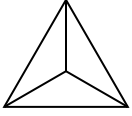
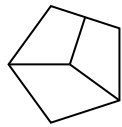





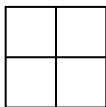
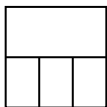



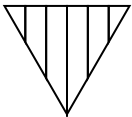
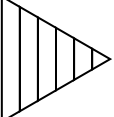
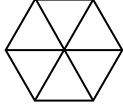
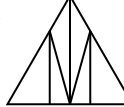
Quelle(s) figure(s) divisée(s) représente(nt) la même surface, si pas de réponse, écrire: 'aucune'

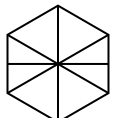
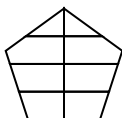
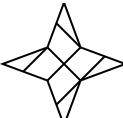
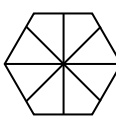
Réponses

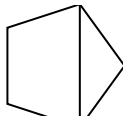
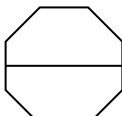

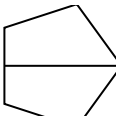
1) A.  B.  C.  D. 

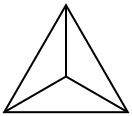
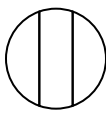
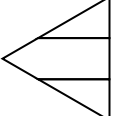

2) A.  B.  C.  D. 

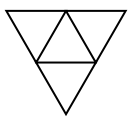

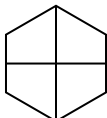
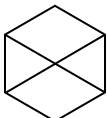
3) A.  B.  C.  D. 

4) A.  B.  C.  D. 

5) A.  B.  C.  D. 

6) A.  B.  C.  D. 

7) A.  B.  C.  D. 

8) A.  B.  C.  D. 

1. A,B,C
2. A,D
3. B,D
4. C
5. aucune
6. B,C,D
7. A,D
8. A,C