

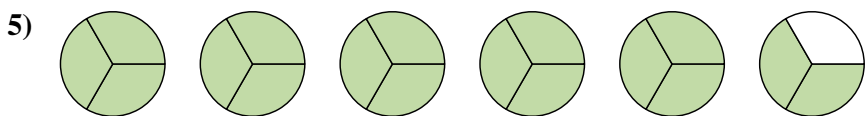
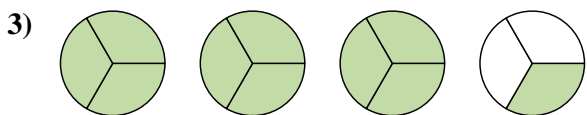
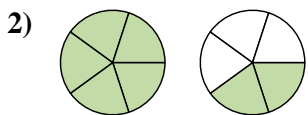
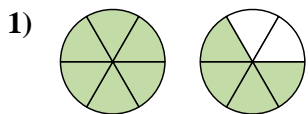




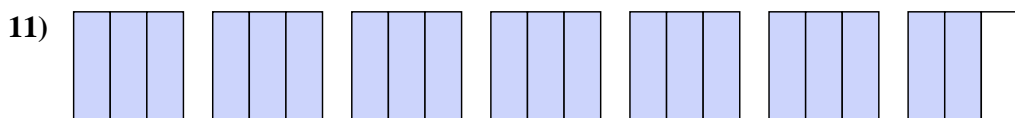
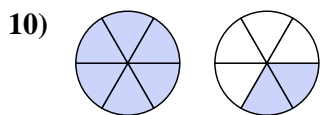
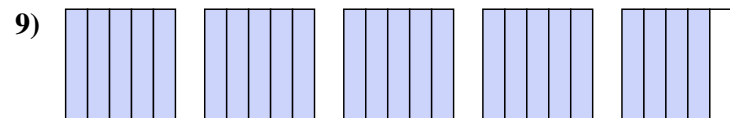
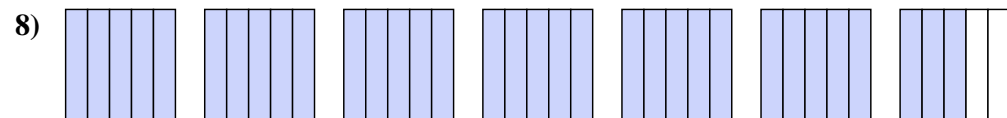
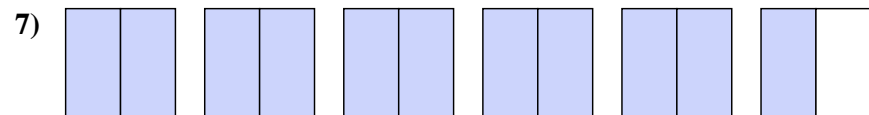
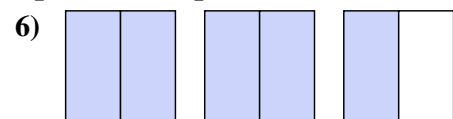




Exprimez chaque montant en un nombre mixte.



Exprimez chaque montant en une fraction impropre.

**Réponses**

1.  $1\frac{4}{6}$

2.  $1\frac{2}{5}$

3.  $3\frac{1}{3}$

4.  $3\frac{4}{6}$

5.  $5\frac{2}{3}$

6.  $\frac{5}{2}$

7.  $11\frac{1}{2}$

8.  $33\frac{2}{5}$

9.  $24\frac{4}{5}$

10.  $8\frac{4}{6}$

11.  $20\frac{8}{10}$



































