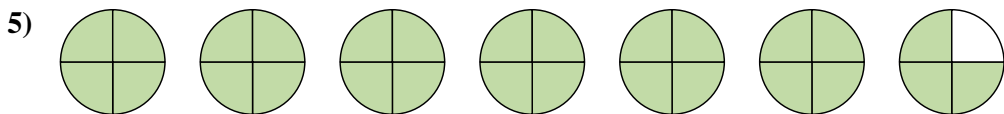
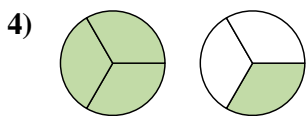
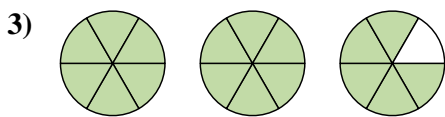
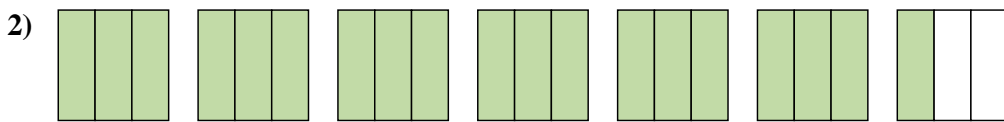
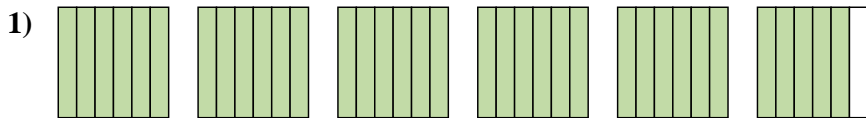


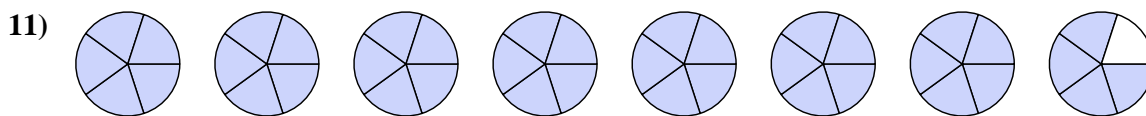
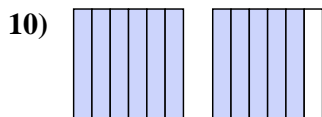
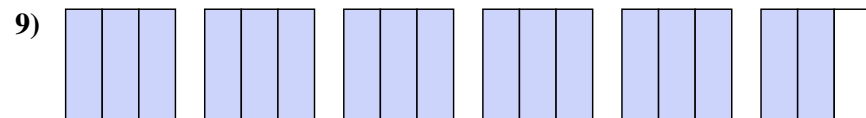
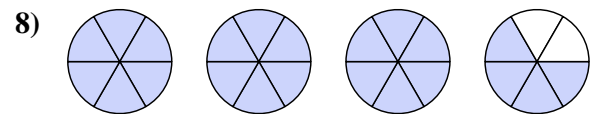
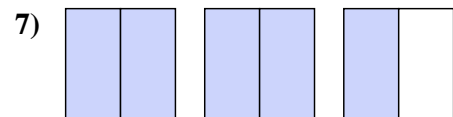
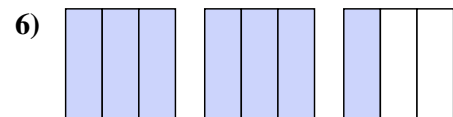




Exprimez chaque montant en un nombre mixte.



Exprimez chaque montant en une fraction impropre.



**Réponses**

1.  $5\frac{5}{6}$

2.  $6\frac{1}{3}$

3.  $2\frac{5}{6}$

4.  $1\frac{1}{3}$

5.  $6\frac{3}{4}$

6.  $\frac{7}{3}$

7.  $\frac{5}{2}$

8.  $\frac{22}{6}$

9.  $\frac{17}{3}$

10.  $\frac{11}{6}$

11.  $\frac{39}{5}$