

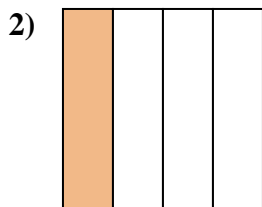


Déterminez quelle lettre représente le mieux la partie colorée de la figure.

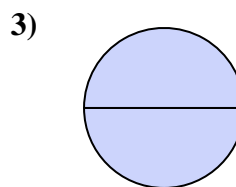
Réponses



- A. one-fourth
- B. three-fourths
- C. one-half



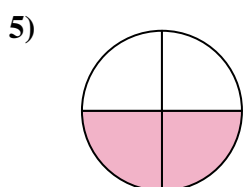
- A. one-half
- B. one-fourth
- C. two-halves



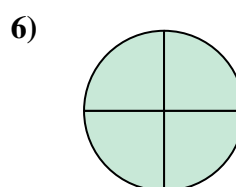
- A. one-half
- B. one-fourth
- C. two-halves



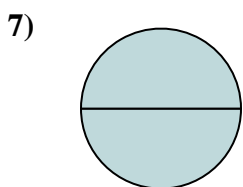
- A. two-halves
- B. three-fourths
- C. one-half



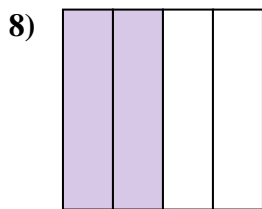
- A. two-quarters
- B. three-fourths
- C. two-halves



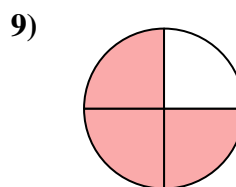
- A. two-quarters
- B. three-fourths
- C. one-half



- A. one-quarter
- B. two-halves
- C. three-fourths



- A. four-quarters
- B. two-quarters
- C. two-halves



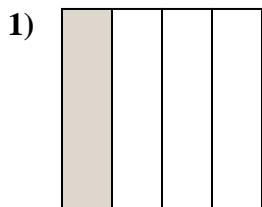
- A. two-halves
- B. three-fourths
- C. two-fourths

1. _____
2. _____
3. _____
4. _____
5. _____
6. _____
7. _____
8. _____
9. _____

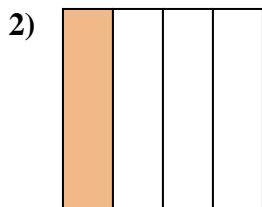


Déterminez quelle lettre représente le mieux la partie colorée de la figure.

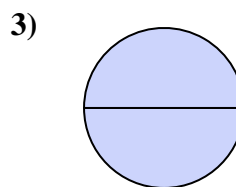
Réponses



- A. one-fourth
- B. three-fourths
- C. one-half



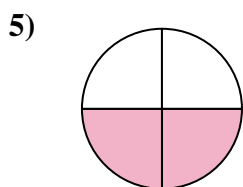
- A. one-half
- B. one-fourth
- C. two-halves



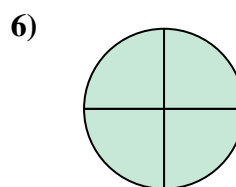
- A. one-half
- B. one-fourth
- C. two-halves



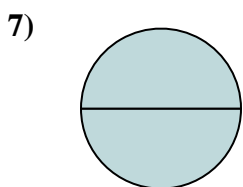
- A. two-halves
- B. three-fourths
- C. one-half



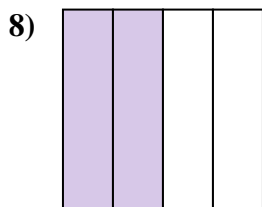
- A. two-quarters
- B. three-fourths
- C. two-halves



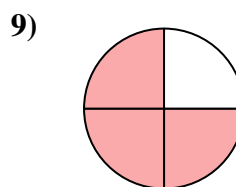
- A. two-quarters
- B. three-fourths
- C. one-half



- A. one-quarter
- B. two-halves
- C. three-fourths



- A. four-quarters
- B. two-quarters
- C. two-halves



- A. two-halves
- B. three-fourths
- C. two-fourths

1. **A**

2. **B**

3. **C**

4. **C**

5. **A**

6. **B**

7. **B**

8. **B**

9. **B**