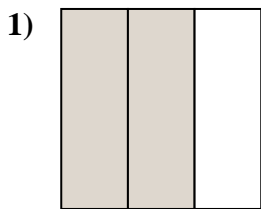


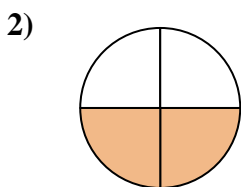


Déterminez quelle lettre représente le mieux la partie colorée de la figure.

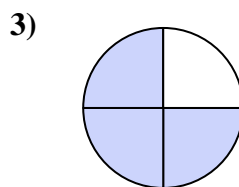
Réponses



- A. two-thirds
- B. two-fourths
- C. two-halves



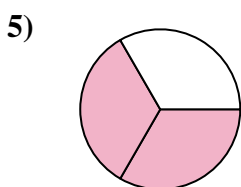
- A. three-fourths
- B. two-fourths
- C. one-half



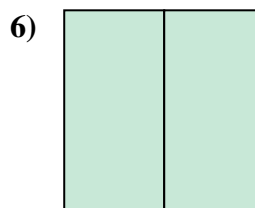
- A. three-fourths
- B. four-quarters
- C. two-halves



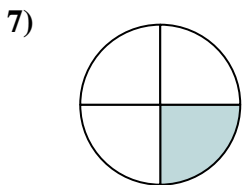
- A. three-thirds
- B. one-fourth
- C. two-halves



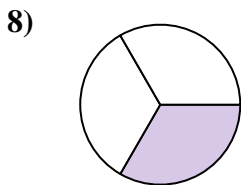
- A. two-halves
- B. two-fourths
- C. two-thirds



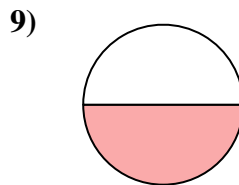
- A. one-fourth
- B. two-fourths
- C. two-halves



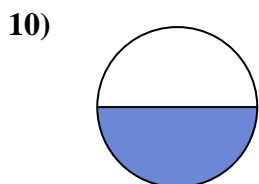
- A. two-halves
- B. three-fourths
- C. one-fourth



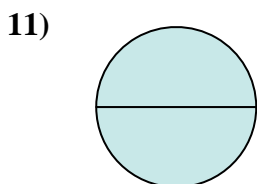
- A. two-halves
- B. two-fourths
- C. one-third



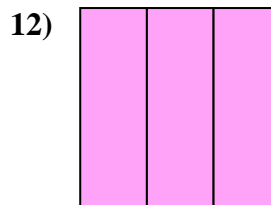
- A. two-halves
- B. three-fourths
- C. one-half



- A. two-fourths
- B. one-fourth
- C. one-half



- A. two-halves
- B. three-fourths
- C. four-quarters



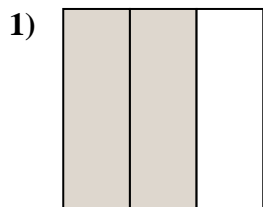
- A. three-thirds
- B. one-fourth
- C. three-quarters

- 1. _____
- 2. _____
- 3. _____
- 4. _____
- 5. _____
- 6. _____
- 7. _____
- 8. _____
- 9. _____
- 10. _____
- 11. _____
- 12. _____

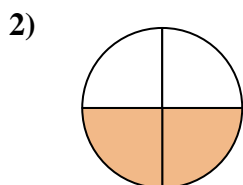


Déterminez quelle lettre représente le mieux la partie colorée de la figure.

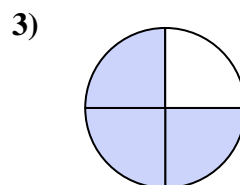
Réponses



- A. two-thirds
- B. two-fourths
- C. two-halves



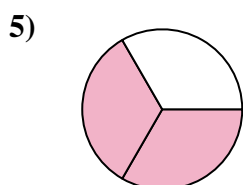
- A. three-fourths
- B. two-fourths
- C. one-half



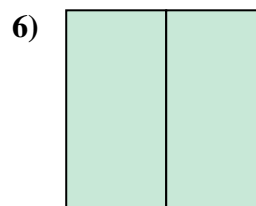
- A. three-fourths
- B. four-quarters
- C. two-halves



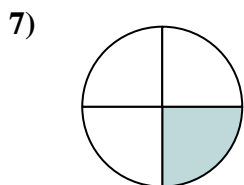
- A. three-thirds
- B. one-fourth
- C. two-halves



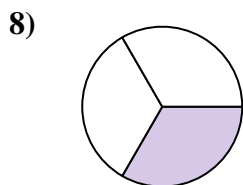
- A. two-halves
- B. two-fourths
- C. two-thirds



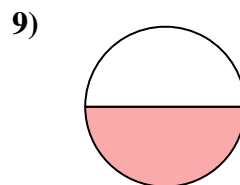
- A. one-fourth
- B. two-fourths
- C. two-halves



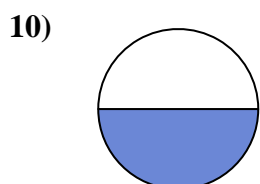
- A. two-halves
- B. three-fourths
- C. one-fourth



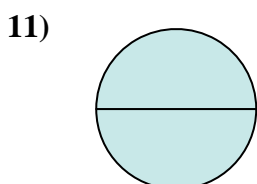
- A. two-halves
- B. two-fourths
- C. one-third



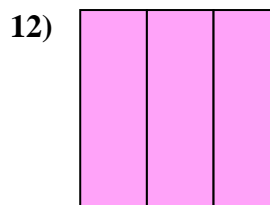
- A. two-halves
- B. three-fourths
- C. one-half



- A. two-fourths
- B. one-fourth
- C. one-half



- A. two-halves
- B. three-fourths
- C. four-quarters



- A. three-thirds
- B. one-fourth
- C. three-quarters

- 1. **A**
- 2. **B**
- 3. **A**
- 4. **A**
- 5. **C**
- 6. **C**
- 7. **C**
- 8. **C**
- 9. **C**
- 10. **C**
- 11. **A**
- 12. **A**