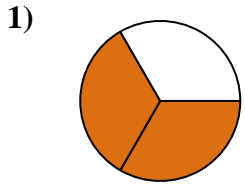


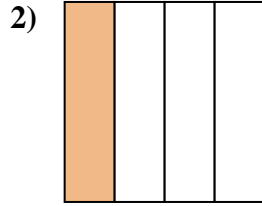


Déterminez quelle lettre représente le mieux la partie colorée de la figure.

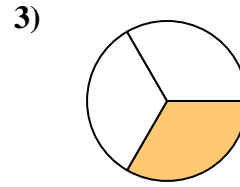
Réponses



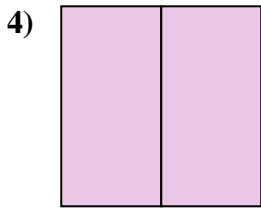
- A. two-halves
- B. two-quarters
- C. two-thirds



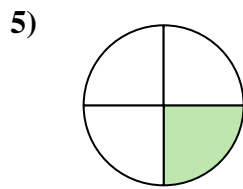
- A. two-quarters
- B. one-quarter
- C. four-quarters



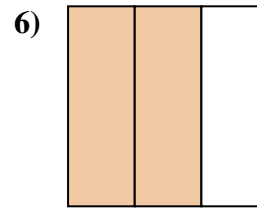
- A. one-third
- B. three-fourths
- C. two-halves



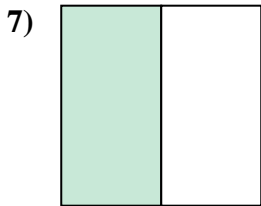
- A. two-halves
- B. one-half
- C. two-fourths



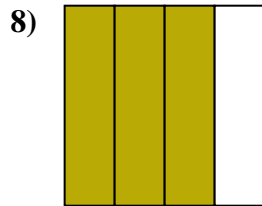
- A. three-fourths
- B. one-fourth
- C. two-halves



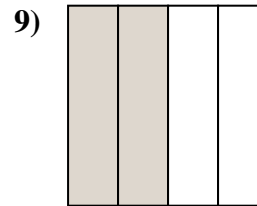
- A. two-thirds
- B. one-quarter
- C. two-fourths



- A. three-fourths
- B. one-half
- C. three-fourths



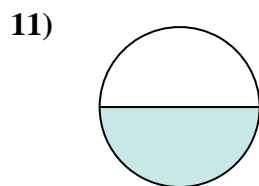
- A. one-half
- B. three-quarters
- C. one-fourth



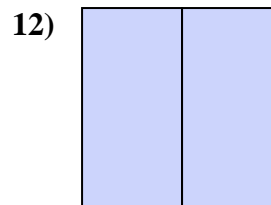
- A. three-quarters
- B. two-fourths
- C. one-quarter



- A. two-quarters
- B. one-half
- C. three-thirds



- A. two-fourths
- B. one-half
- C. two-halves



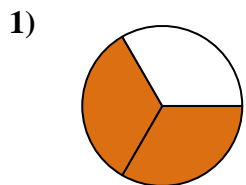
- A. one-quarter
- B. two-halves
- C. two-quarters

- 1. _____
- 2. _____
- 3. _____
- 4. _____
- 5. _____
- 6. _____
- 7. _____
- 8. _____
- 9. _____
- 10. _____
- 11. _____
- 12. _____

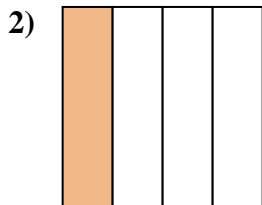


Déterminez quelle lettre représente le mieux la partie colorée de la figure.

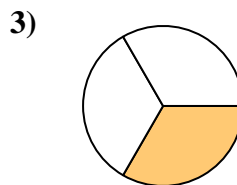
Réponses



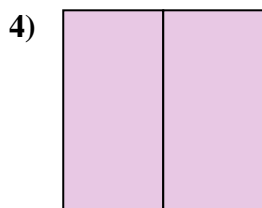
- A. two-halves
- B. two-quarters
- C. two-thirds



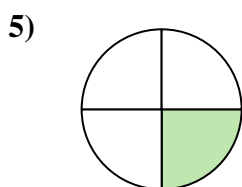
- A. two-quarters
- B. one-quarter
- C. four-quarters



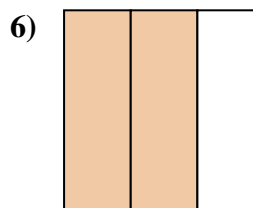
- A. one-third
- B. three-fourths
- C. two-halves



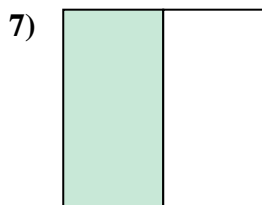
- A. two-halves
- B. one-half
- C. two-fourths



- A. three-fourths
- B. one-fourth
- C. two-halves



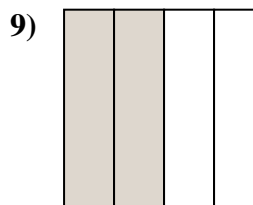
- A. two-thirds
- B. one-quarter
- C. two-fourths



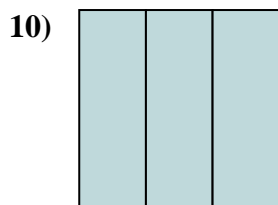
- A. three-fourths
- B. one-half
- C. three-fourths



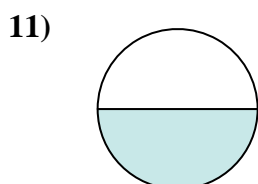
- A. one-half
- B. three-quarters
- C. one-fourth



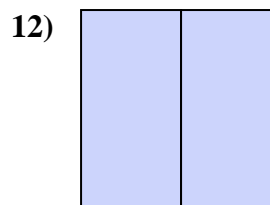
- A. three-quarters
- B. two-fourths
- C. one-quarter



- A. two-quarters
- B. one-half
- C. three-thirds



- A. two-fourths
- B. one-half
- C. two-halves



- A. one-quarter
- B. two-halves
- C. two-quarters

1. **C**

2. **B**

3. **A**

4. **A**

5. **B**

6. **A**

7. **B**

8. **B**

9. **B**

10. **C**

11. **B**

12. **B**