




Utilisez la droite numérique pour résoudre chaque problème. Le premier est résolu.

Réponses



1. _____

2. _____



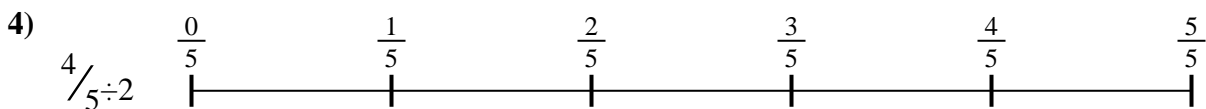
3. _____

4. _____



5. _____

6. _____

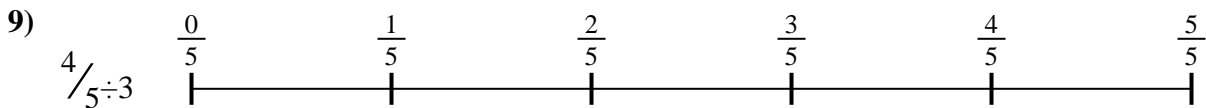
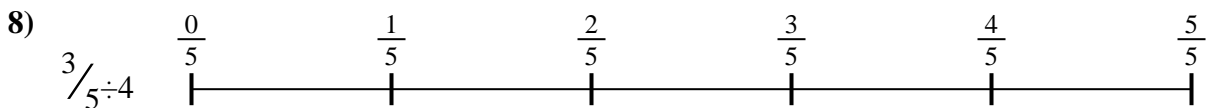


7. _____

8. _____



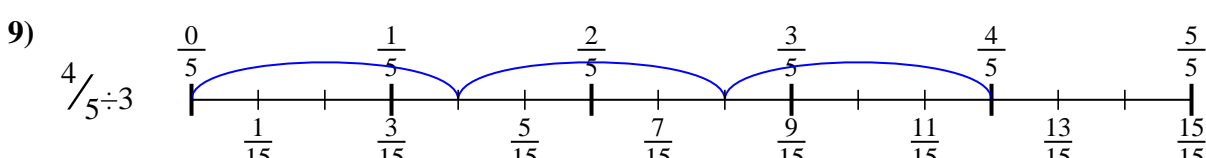
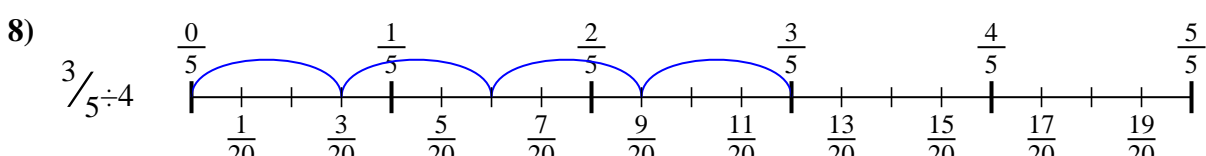
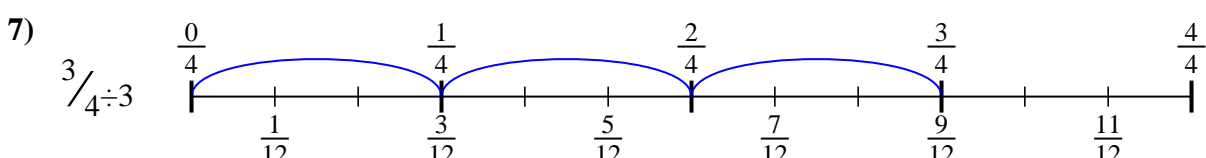
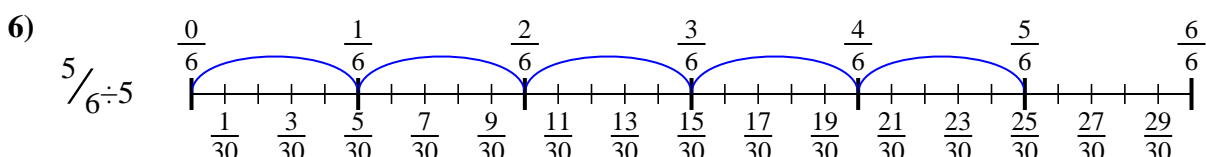
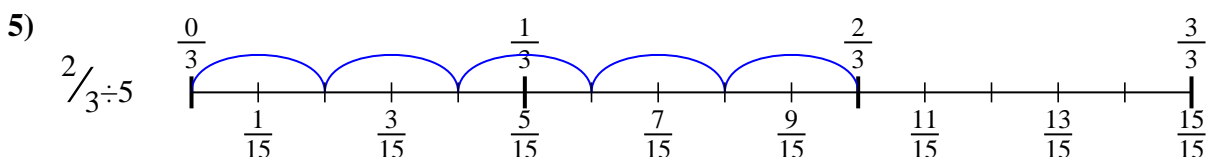
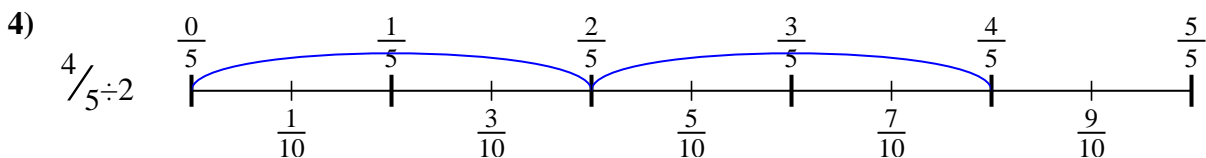
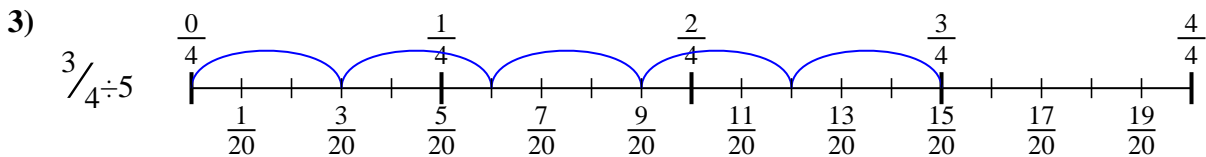
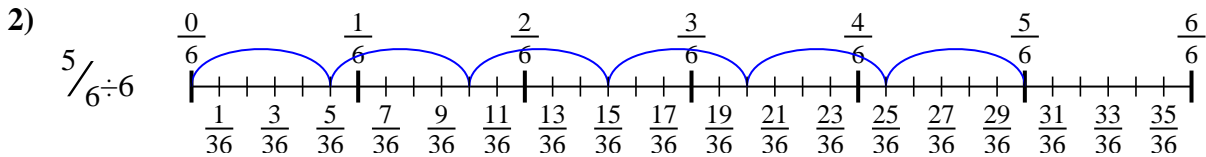
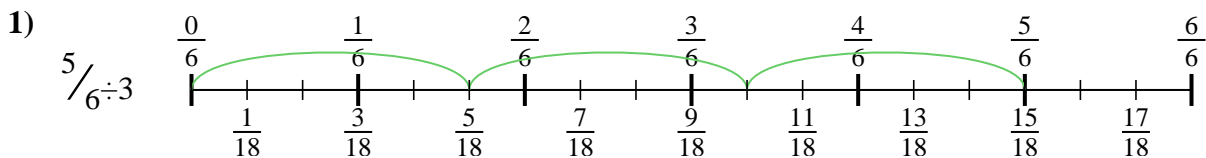
9. _____





Utilisez la droite numérique pour résoudre chaque problème. Le premier est résolu.

Réponses



1. $\frac{5}{18}$

2. $\frac{5}{36}$

3. $\frac{3}{20}$

4. $\frac{4}{10}$

5. $\frac{2}{15}$

6. $\frac{5}{30}$

7. $\frac{3}{12}$

8. $\frac{3}{20}$

9. $\frac{4}{15}$



Utilisez la droite numérique pour résoudre chaque problème. Le premier est résolu.

Réponses

$\frac{3}{20}$

$\frac{4}{15}$

$\frac{4}{10}$

$\frac{5}{18}$

$\frac{5}{30}$

$\frac{3}{12}$

$\frac{5}{36}$

$\frac{3}{20}$

$\frac{2}{15}$

1. _____

2. _____

3. _____

4. _____

5. _____

6. _____

7. _____

8. _____

9. _____

