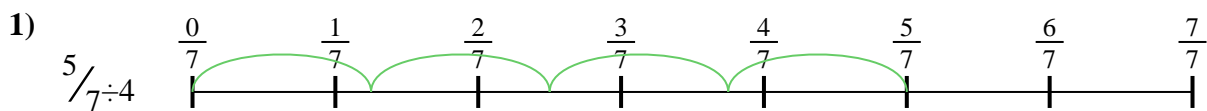





Utilisez la droite numérique pour résoudre chaque problème. Le premier est résolu.

Réponses

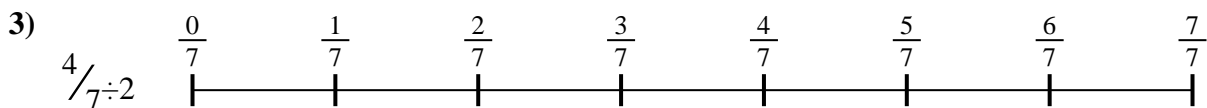
1. _____

2. _____




3. _____

4. _____



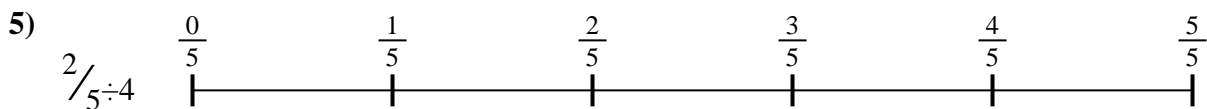
5. _____

6. _____

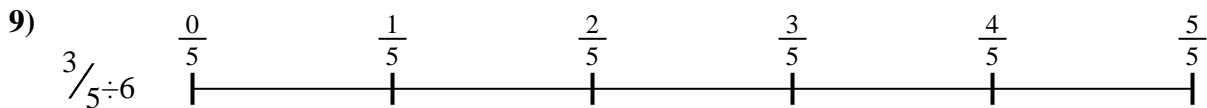


7. _____

8. _____



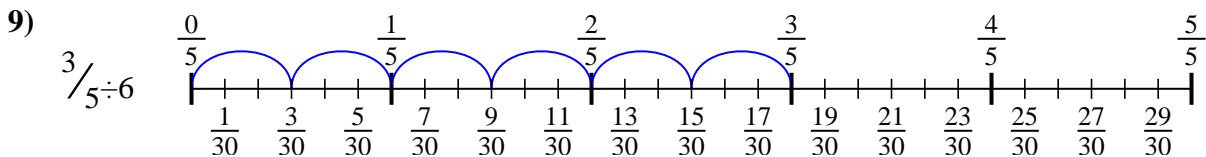
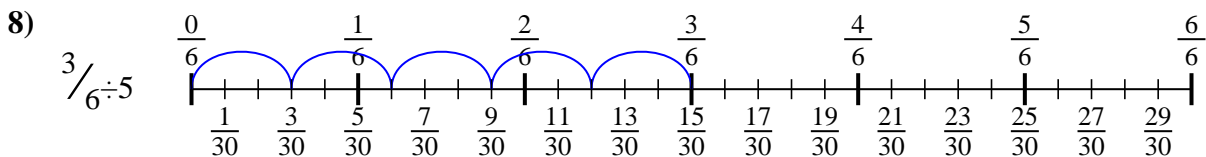
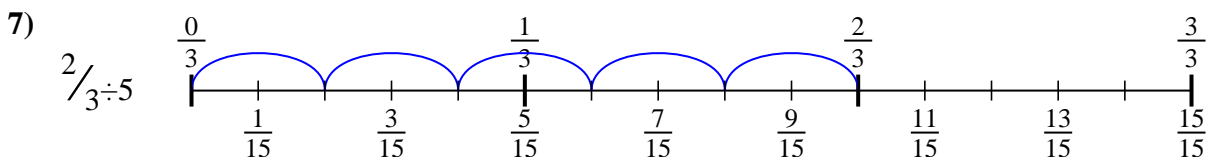
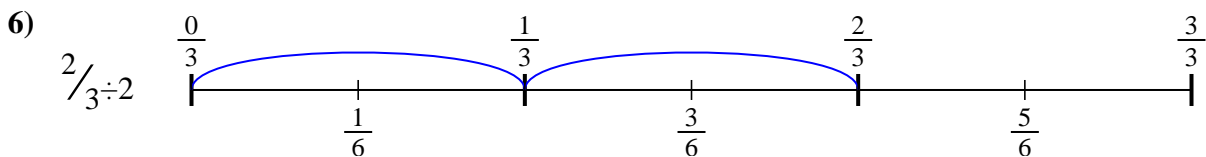
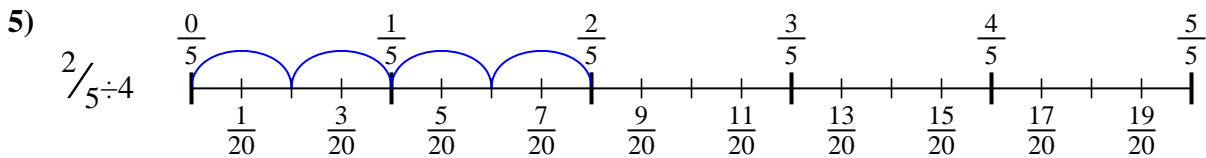
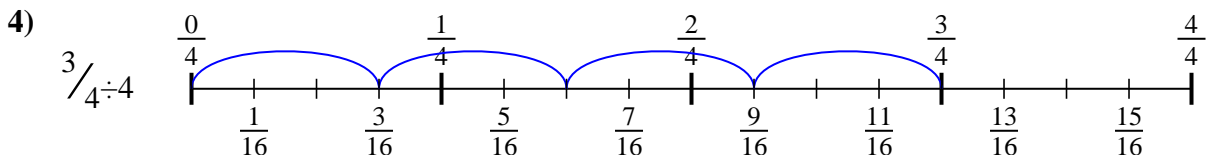
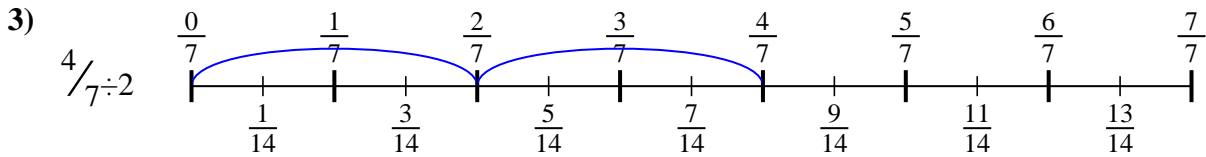
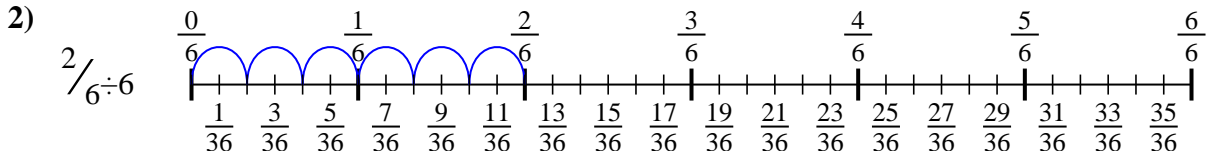
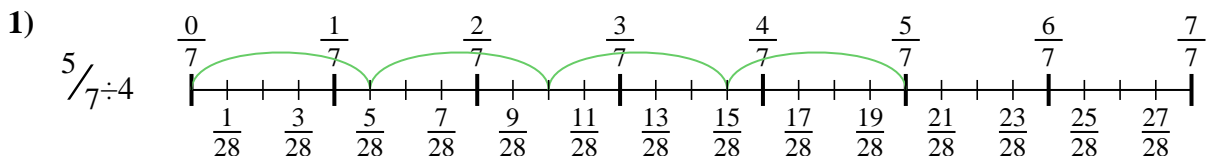
9. _____





Utilisez la droite numérique pour résoudre chaque problème. Le premier est résolu.

Réponses



1. $\frac{5}{28}$
2. $\frac{2}{36}$
3. $\frac{4}{14}$
4. $\frac{3}{16}$
5. $\frac{2}{20}$
6. $\frac{2}{6}$
7. $\frac{2}{15}$
8. $\frac{3}{30}$
9. $\frac{3}{30}$



Utilisez la droite numérique pour résoudre chaque problème. Le premier est résolu.

Réponses

$\frac{2}{20}$

$\frac{2}{15}$

$\frac{5}{28}$

$\frac{3}{30}$

$\frac{3}{30}$

$\frac{3}{16}$

$\frac{2}{6}$

$\frac{4}{14}$

$\frac{2}{36}$

1. _____

2. _____

3. _____

4. _____

5. _____

6. _____

7. _____

8. _____

9. _____

