











Déterminez quelle fraction est située entre les fraction comparées.



Réponses



1)  $\frac{2}{4}$   < ? <  $\frac{2}{3}$  



$\frac{1}{3}$    $\frac{3}{4}$  



$\frac{5}{8}$    $\frac{1}{6}$  



2)  $\frac{1}{3}$   < ? <  $\frac{4}{6}$  



$\frac{4}{8}$    $\frac{5}{6}$  



$\frac{1}{6}$    $\frac{6}{8}$  



3)  $\frac{4}{8}$   < ? <  $\frac{3}{4}$  



$\frac{2}{3}$    $\frac{7}{8}$  



$\frac{3}{8}$    $\frac{1}{4}$  



4)  $\frac{2}{8}$   < ? <  $\frac{5}{8}$  



$\frac{6}{8}$    $\frac{4}{6}$  



$\frac{1}{8}$    $\frac{4}{8}$  



5)  $\frac{2}{8}$   < ? <  $\frac{3}{6}$  



$\frac{3}{8}$    $\frac{5}{6}$  



$\frac{7}{8}$    $\frac{2}{3}$  



6)  $\frac{3}{8}$   < ? <  $\frac{4}{6}$  



$\frac{4}{8}$    $\frac{1}{6}$  



$\frac{2}{8}$    $\frac{3}{4}$  



7)  $\frac{2}{8}$   < ? <  $\frac{5}{8}$  

$\frac{1}{6}$    $\frac{3}{6}$  

$\frac{1}{8}$    $\frac{4}{6}$  

8)  $\frac{1}{2}$   < ? <  $\frac{6}{8}$  

$\frac{1}{6}$    $\frac{1}{8}$  

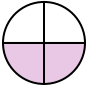

$\frac{5}{6}$    $\frac{4}{6}$  

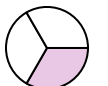

1. \_\_\_\_\_
2. \_\_\_\_\_
3. \_\_\_\_\_
4. \_\_\_\_\_
5. \_\_\_\_\_
6. \_\_\_\_\_
7. \_\_\_\_\_
8. \_\_\_\_\_

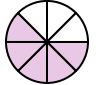



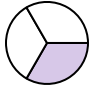

Déterminez quelle fraction est située entre les fraction comparées.

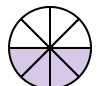

**Réponses**

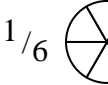

1)  $\frac{2}{4}$   < ? <  $\frac{2}{3}$  



$\frac{1}{3}$    $\frac{3}{4}$  

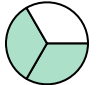

$\frac{5}{8}$    $\frac{1}{6}$  



2)  $\frac{1}{3}$   < ? <  $\frac{4}{6}$  



$\frac{4}{8}$    $\frac{5}{6}$  



$\frac{1}{6}$    $\frac{6}{8}$  

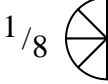

3)  $\frac{4}{8}$   < ? <  $\frac{3}{4}$  


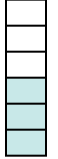
$\frac{2}{3}$    $\frac{7}{8}$  



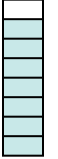
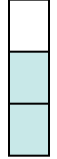
$\frac{3}{8}$    $\frac{1}{4}$  


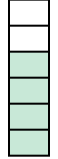
4)  $\frac{2}{8}$   < ? <  $\frac{5}{8}$  




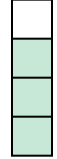
$\frac{6}{8}$    $\frac{4}{6}$  



$\frac{1}{8}$    $\frac{4}{8}$  



5)  $\frac{2}{8}$   < ? <  $\frac{3}{6}$  



$\frac{3}{8}$    $\frac{5}{6}$    $\frac{7}{8}$    $\frac{2}{3}$  



6)  $\frac{3}{8}$   < ? <  $\frac{4}{6}$  



$\frac{4}{8}$    $\frac{1}{6}$    $\frac{2}{8}$    $\frac{3}{4}$  



7)  $\frac{2}{8}$   < ? <  $\frac{5}{8}$  

$\frac{1}{6}$    $\frac{3}{6}$  

$\frac{1}{8}$    $\frac{4}{6}$  

8)  $\frac{1}{2}$   < ? <  $\frac{6}{8}$  

$\frac{1}{6}$    $\frac{1}{8}$  

$\frac{5}{6}$    $\frac{4}{6}$  

1.  $\frac{5}{8}$
2.  $\frac{4}{8}$
3.  $\frac{2}{3}$
4.  $\frac{4}{8}$
5.  $\frac{3}{8}$
6.  $\frac{4}{8}$
7.  $\frac{3}{6}$
8.  $\frac{4}{6}$