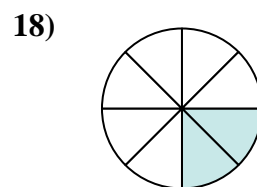
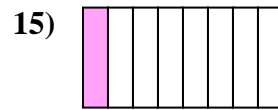
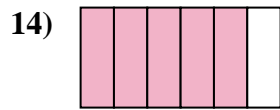
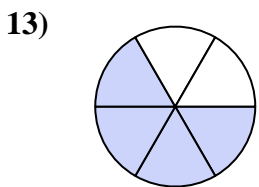
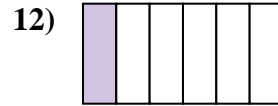
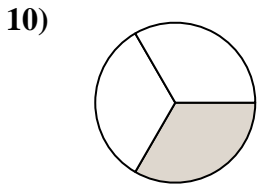
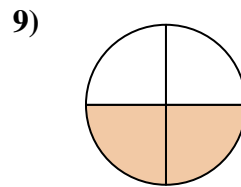
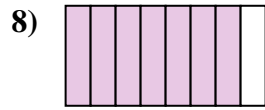
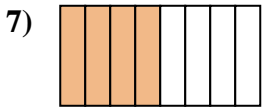
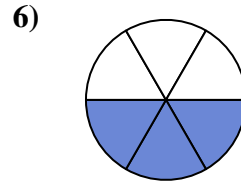
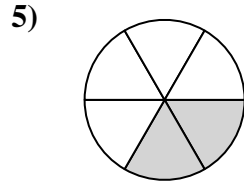
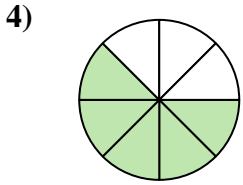
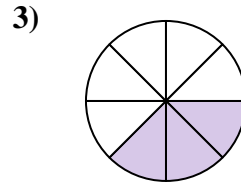
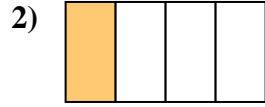
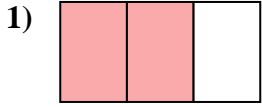




Ecrire la fraction de la représentation de la partie colorée du camembert.

Réponses



1. _____

2. _____

3. _____

4. _____

5. _____

6. _____

7. _____

8. _____

9. _____

10. _____

11. _____

12. _____

13. _____

14. _____

15. _____

16. _____

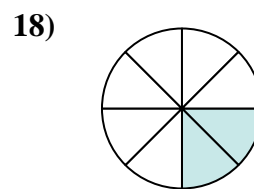
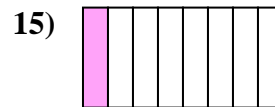
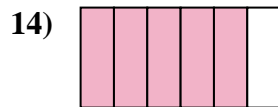
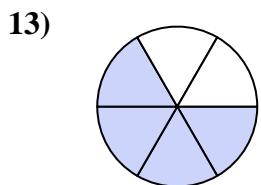
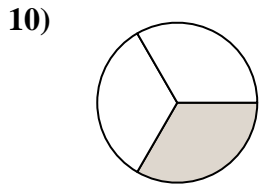
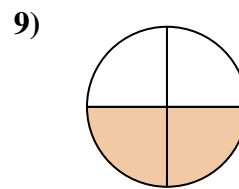
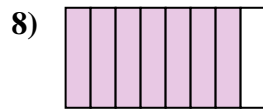
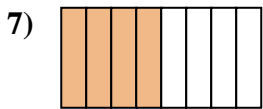
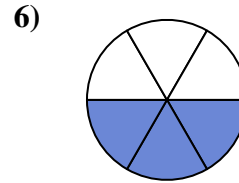
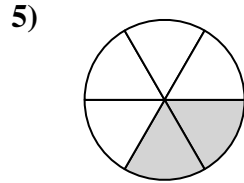
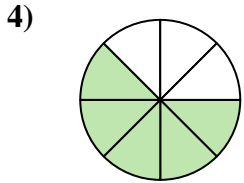
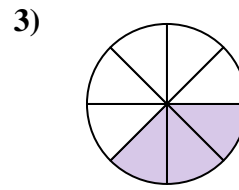
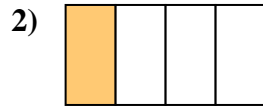
17. _____

18. _____



Ecrire la fraction de la représentation de la partie colorée du camembert.

Réponses



1. 2/3

2. 1/4

3. 3/8

4. 5/8

5. 2/6

6. 3/6

7. 4/8

8. 7/8

9. 2/4

10. 1/3

11. 1/2

12. 1/6

13. 4/6

14. 5/6

15. 1/8

16. 3/4

17. 6/8

18. 2/8