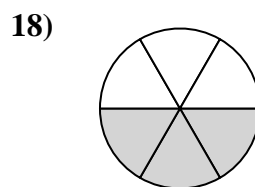
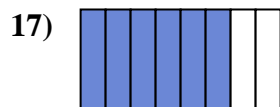
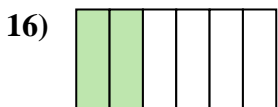
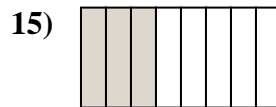
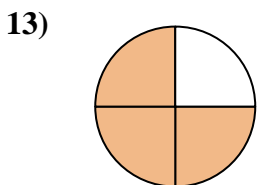
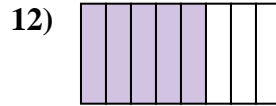
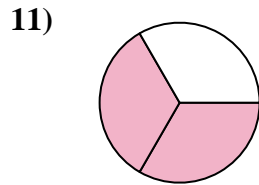
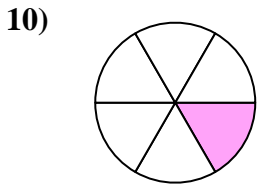
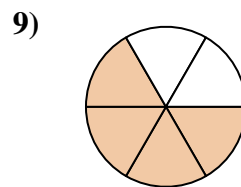
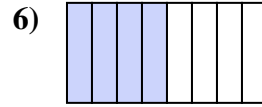
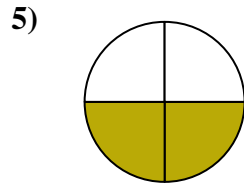
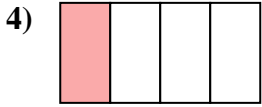
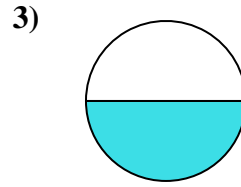
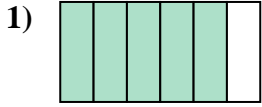




Ecrire la fraction de la représentation de la partie colorée du camembert.

Réponses



1. _____

2. _____

3. _____

4. _____

5. _____

6. _____

7. _____

8. _____

9. _____

10. _____

11. _____

12. _____

13. _____

14. _____

15. _____

16. _____

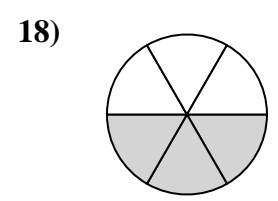
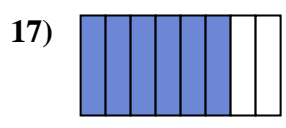
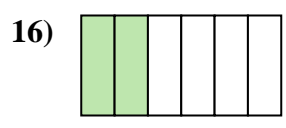
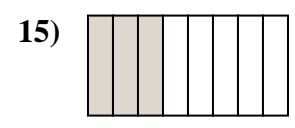
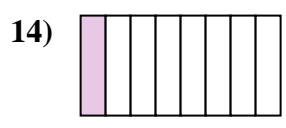
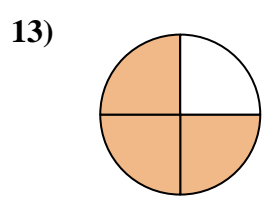
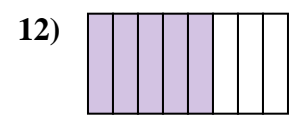
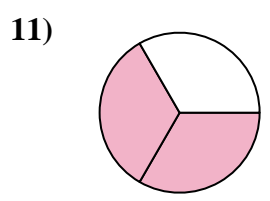
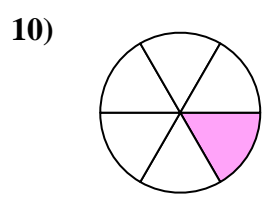
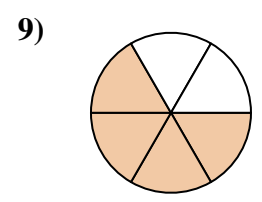
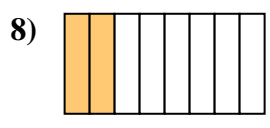
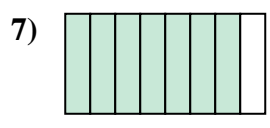
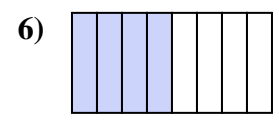
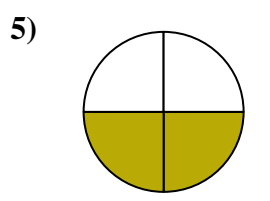
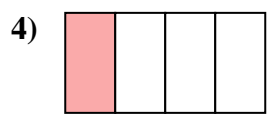
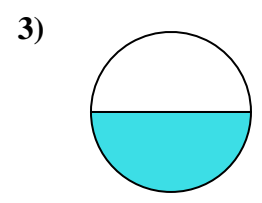
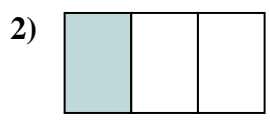
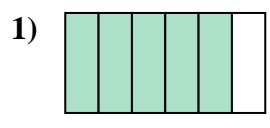
17. _____

18. _____



Ecrire la fraction de la représentation de la partie colorée du camembert.

Réponses



1. 5/6

2. 1/3

3. 1/2

4. 1/4

5. 2/4

6. 4/8

7. 7/8

8. 2/8

9. 4/6

10. 1/6

11. 2/3

12. 5/8

13. 3/4

14. 1/8

15. 3/8

16. 2/6

17. 6/8

18. 3/6