
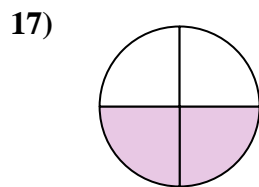
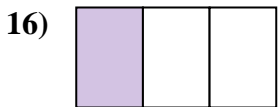
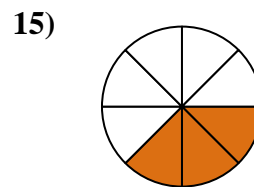
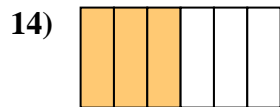
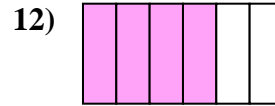
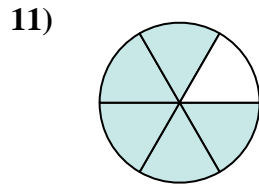
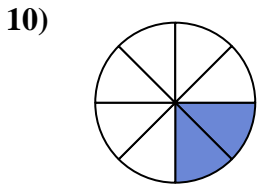
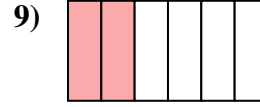
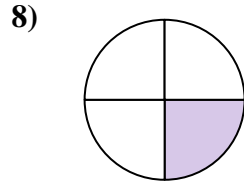
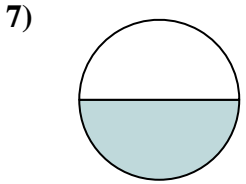
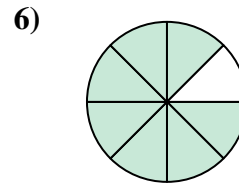
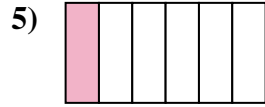
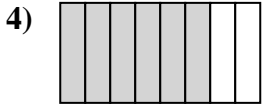
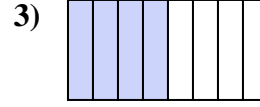
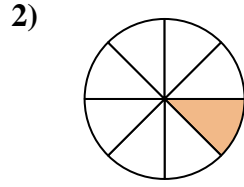
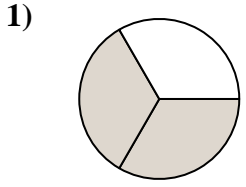




Ecrire la fraction de la représentation de la partie colorée du camembert.

Réponses



1. _____

2. _____

3. _____

4. _____

5. _____

6. _____

7. _____

8. _____

9. _____

10. _____

11. _____

12. _____

13. _____

14. _____

15. _____

16. _____


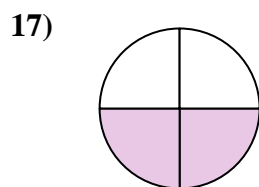

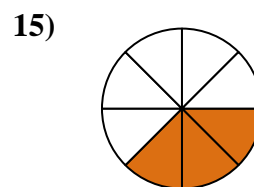
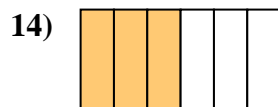

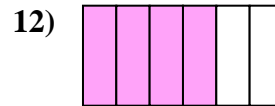
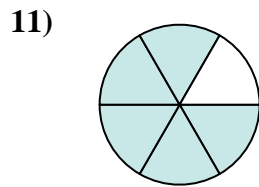
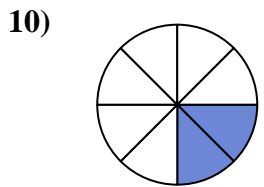
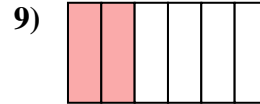
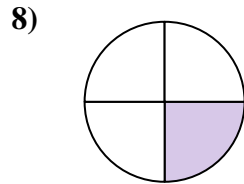
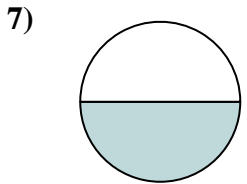
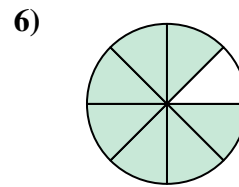
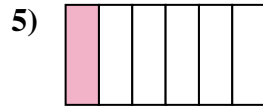
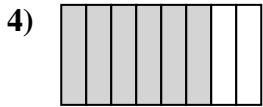
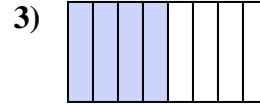
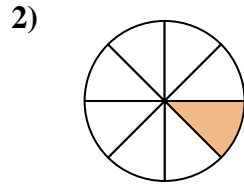
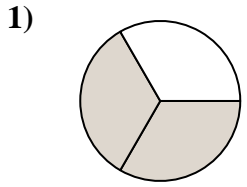
17. _____

18. _____



Ecrire la fraction de la représentation de la partie colorée du camembert.

Réponses



1. $\frac{2}{3}$
2. $\frac{1}{8}$
3. $\frac{4}{8}$
4. $\frac{6}{8}$
5. $\frac{1}{6}$
6. $\frac{7}{8}$
7. $\frac{1}{2}$
8. $\frac{1}{4}$
9. $\frac{2}{6}$
10. $\frac{2}{8}$
11. $\frac{5}{6}$
12. $\frac{4}{6}$
13. $\frac{5}{8}$
14. $\frac{3}{6}$
15. $\frac{3}{8}$
16. $\frac{1}{3}$
17. $\frac{2}{4}$
18. $\frac{3}{4}$