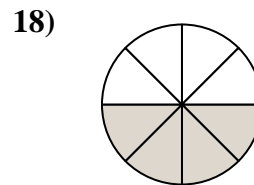
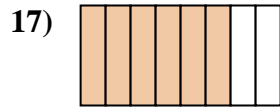
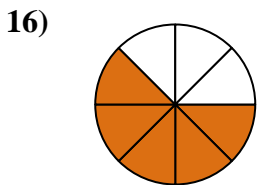
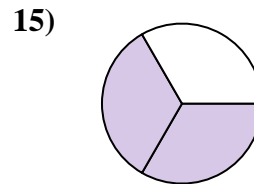
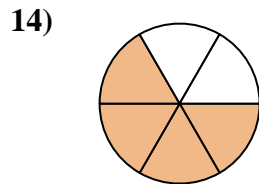
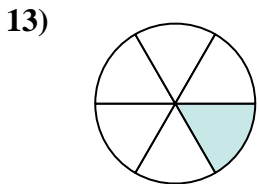
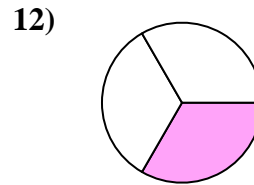
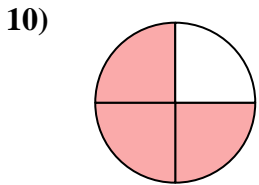
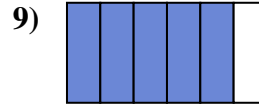
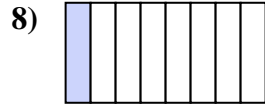
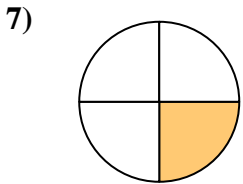
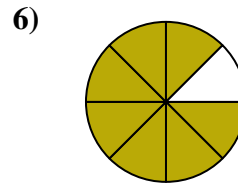
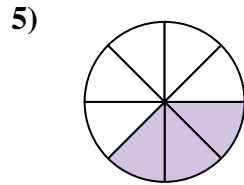
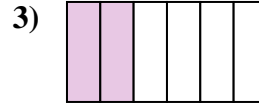
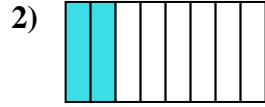




Ecrire la fraction de la représentation de la partie colorée du camembert.



Réponses

1. _____

2. _____

3. _____

4. _____

5. _____

6. _____

7. _____

8. _____

9. _____

10. _____

11. _____

12. _____

13. _____

14. _____

15. _____

16. _____

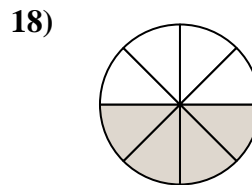
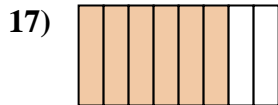
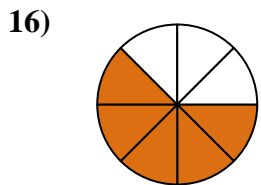
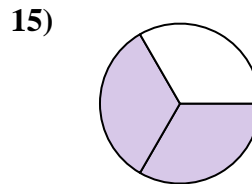
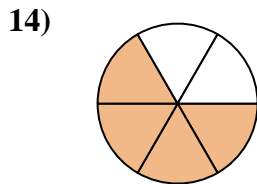
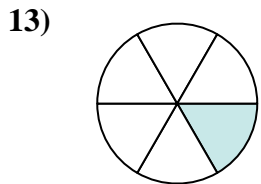
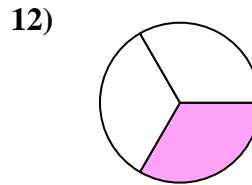
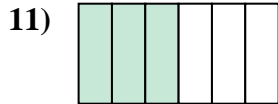
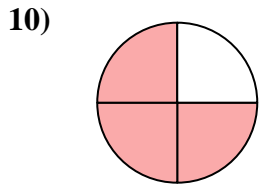
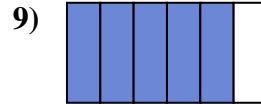
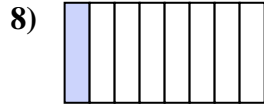
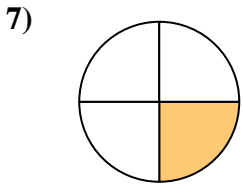
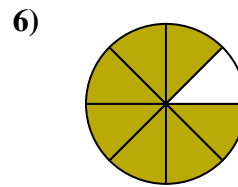
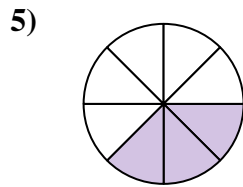
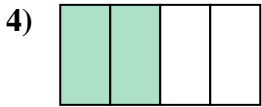
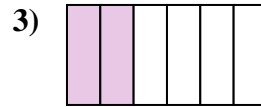
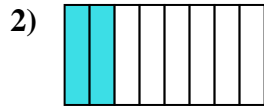
17. _____

18. _____



Ecrire la fraction de la représentation de la partie colorée du camembert.

Réponses

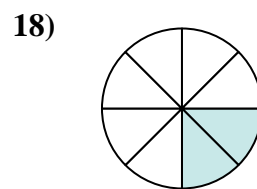
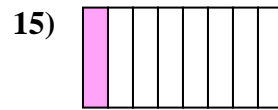
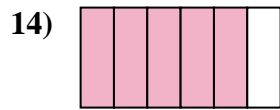
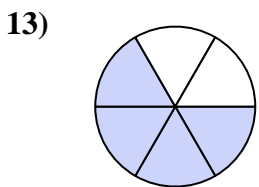
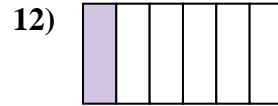
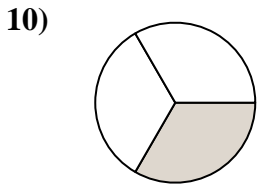
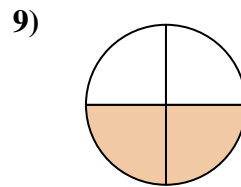
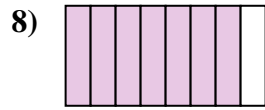
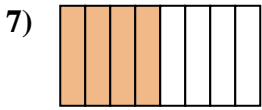
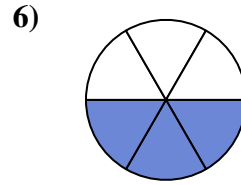
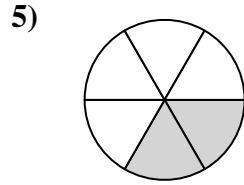
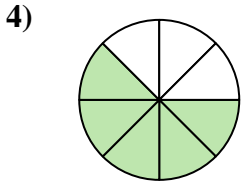
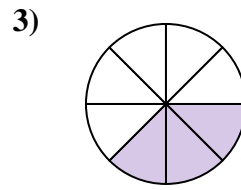
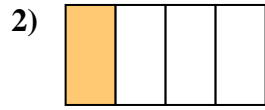


1. 1/2
2. 2/8
3. 2/6
4. 2/4
5. 3/8
6. 7/8
7. 1/4
8. 1/8
9. 5/6
10. 3/4
11. 3/6
12. 1/3
13. 1/6
14. 4/6
15. 2/3
16. 5/8
17. 6/8
18. 4/8



Ecrire la fraction de la représentation de la partie colorée du camembert.

Réponses



1. _____

2. _____

3. _____

4. _____

5. _____

6. _____

7. _____

8. _____

9. _____

10. _____

11. _____

12. _____

13. _____

14. _____

15. _____

16. _____

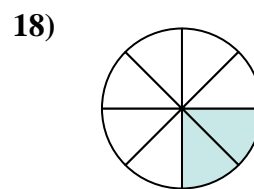
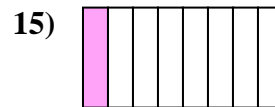
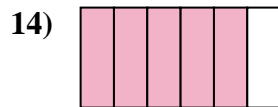
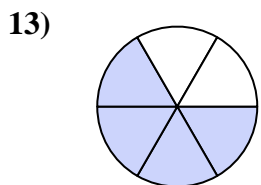
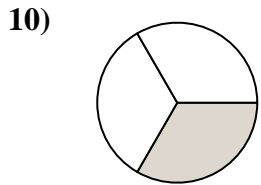
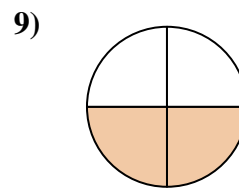
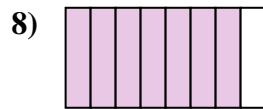
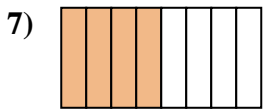
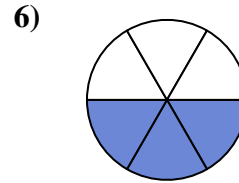
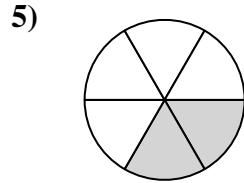
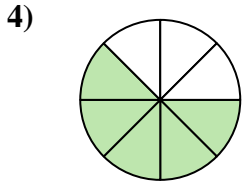
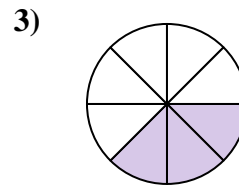
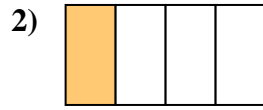
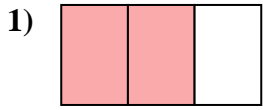
17. _____

18. _____



Ecrire la fraction de la représentation de la partie colorée du camembert.

Réponses



1. $\frac{2}{3}$

2. $\frac{1}{4}$

3. $\frac{3}{8}$

4. $\frac{5}{8}$

5. $\frac{2}{6}$

6. $\frac{3}{6}$

7. $\frac{4}{8}$

8. $\frac{7}{8}$

9. $\frac{2}{4}$

10. $\frac{1}{3}$

11. $\frac{1}{2}$

12. $\frac{1}{6}$

13. $\frac{4}{6}$

14. $\frac{5}{6}$

15. $\frac{1}{8}$

16. $\frac{3}{4}$

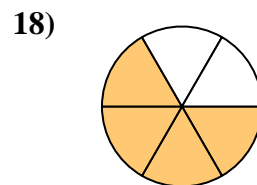
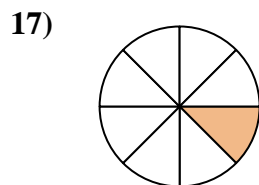
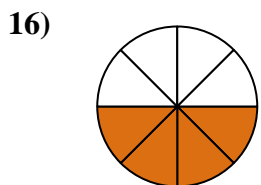
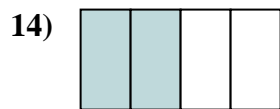
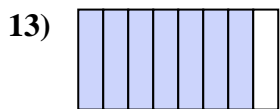
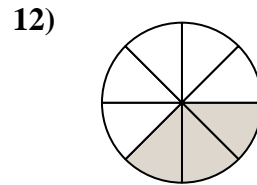

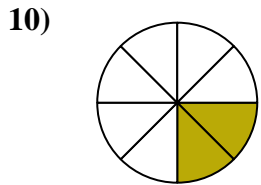
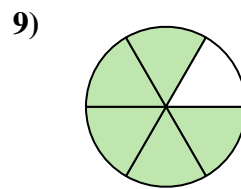
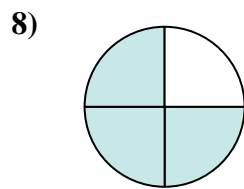
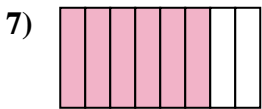
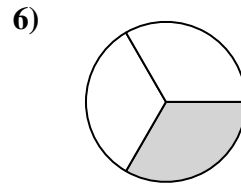
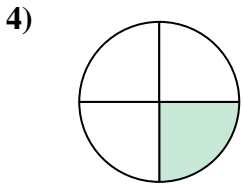
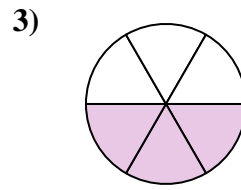
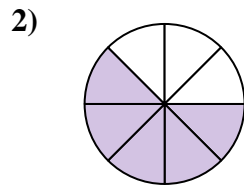
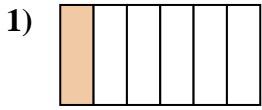
17. $\frac{6}{8}$

18. $\frac{2}{8}$



Ecrire la fraction de la représentation de la partie colorée du camembert.

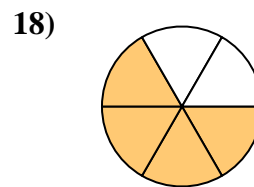
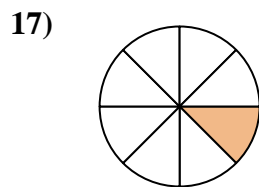
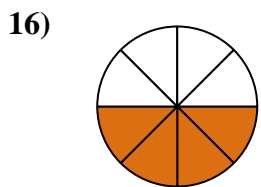
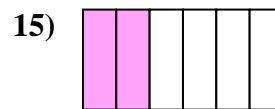
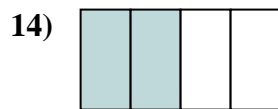
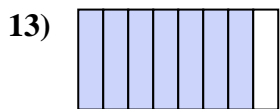
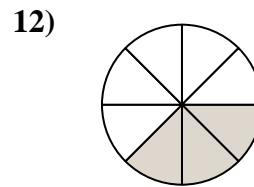

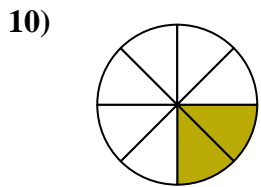
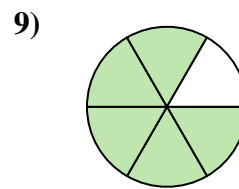
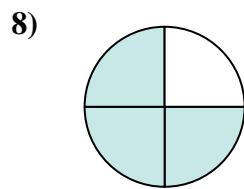
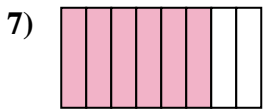
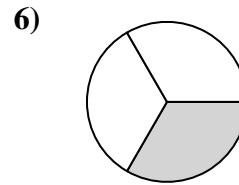
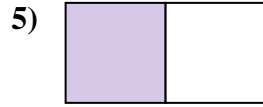
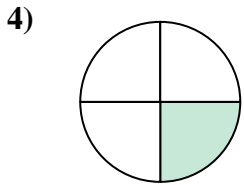
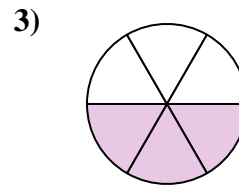
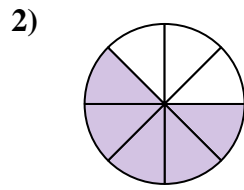
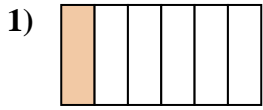
Réponses



1. _____
2. _____
3. _____
4. _____
5. _____
6. _____
7. _____
8. _____
9. _____
10. _____
11. _____
12. _____
13. _____
14. _____
15. _____
16. _____
17. _____
18. _____



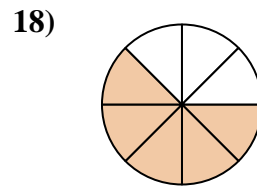
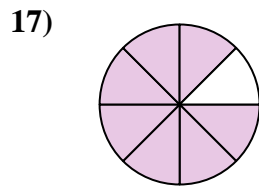
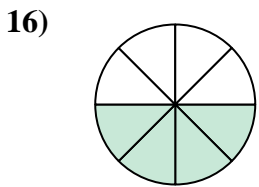
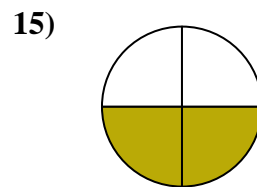
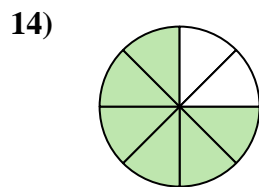
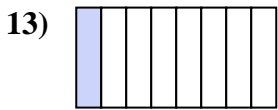
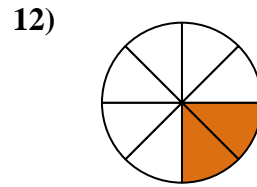
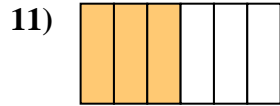
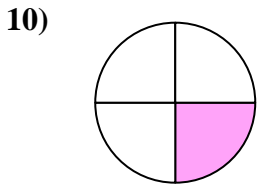
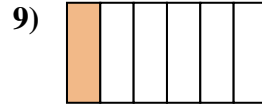
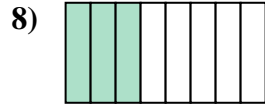
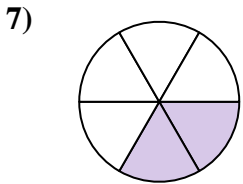
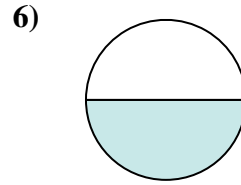
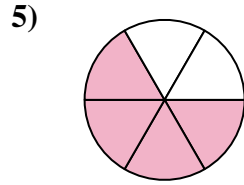
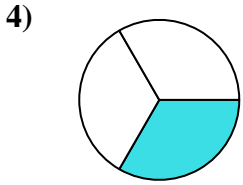
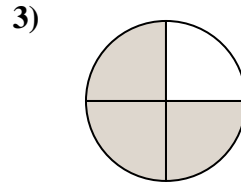
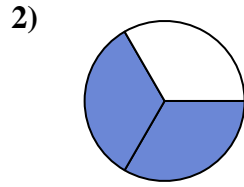
Ecrire la fraction de la représentation de la partie colorée du camembert.

**Réponses**1. $\frac{1}{6}$ 2. $\frac{5}{8}$ 3. $\frac{3}{6}$ 4. $\frac{1}{4}$ 5. $\frac{1}{2}$ 6. $\frac{1}{3}$ 7. $\frac{6}{8}$ 8. $\frac{3}{4}$ 9. $\frac{5}{6}$ 10. $\frac{2}{8}$ 11. $\frac{2}{3}$ 12. $\frac{3}{8}$ 13. $\frac{7}{8}$ 14. $\frac{2}{4}$ 15. $\frac{2}{6}$ 16. $\frac{4}{8}$ 17. $\frac{1}{8}$ 18. $\frac{4}{6}$



Ecrire la fraction de la représentation de la partie colorée du camembert.

Réponses



1. _____

2. _____

3. _____

4. _____

5. _____

6. _____

7. _____

8. _____

9. _____

10. _____

11. _____

12. _____

13. _____

14. _____

15. _____

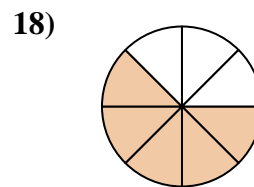
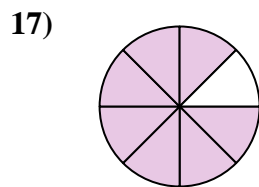
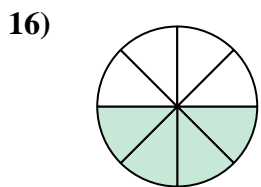
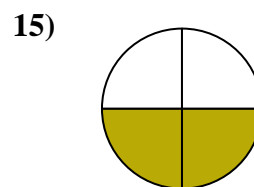
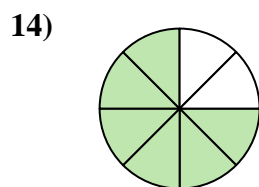
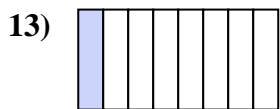
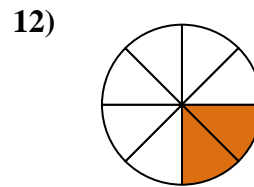
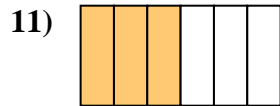
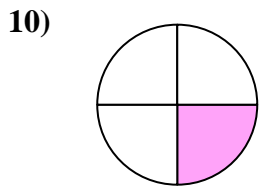
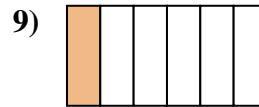
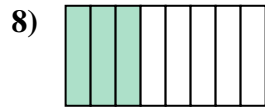
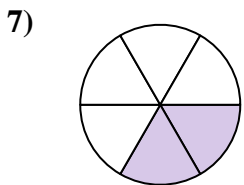
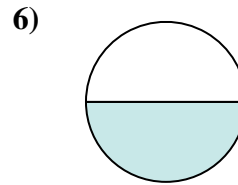
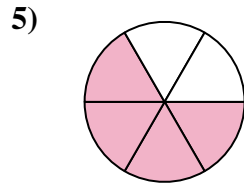
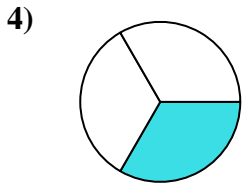
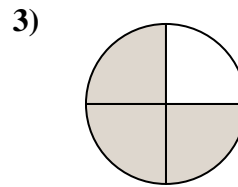
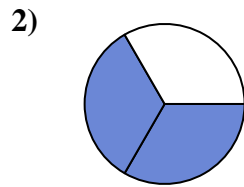
16. _____

17. _____

18. _____



Ecrire la fraction de la représentation de la partie colorée du camembert.



Réponses

1. $\frac{5}{6}$

2. $\frac{2}{3}$

3. $\frac{3}{4}$

4. $\frac{1}{3}$

5. $\frac{4}{6}$

6. $\frac{1}{2}$

7. $\frac{2}{6}$

8. $\frac{3}{8}$

9. $\frac{1}{6}$

10. $\frac{1}{4}$

11. $\frac{3}{6}$

12. $\frac{2}{8}$

13. $\frac{1}{8}$

14. $\frac{6}{8}$

15. $\frac{2}{4}$

16. $\frac{4}{8}$

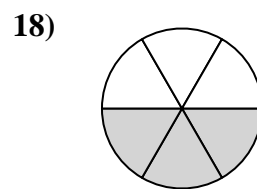
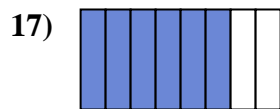
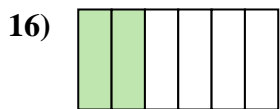
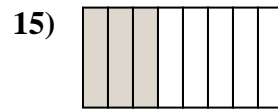
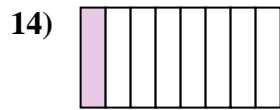
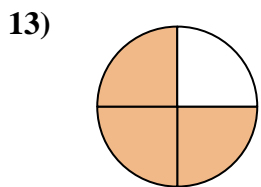
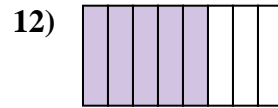
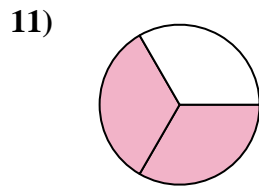
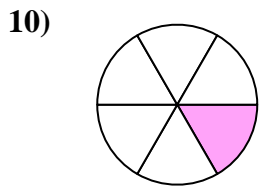
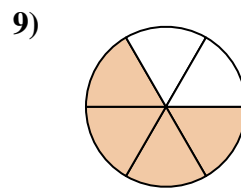
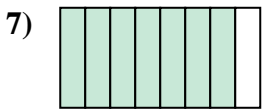
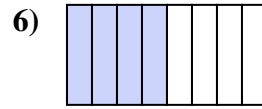
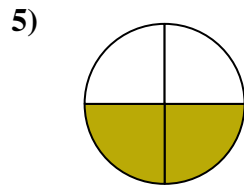
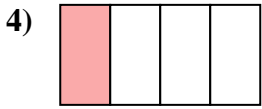
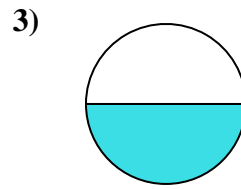
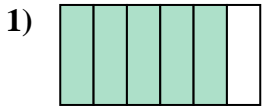
17. $\frac{7}{8}$

18. $\frac{5}{8}$



Ecrire la fraction de la représentation de la partie colorée du camembert.

Réponses

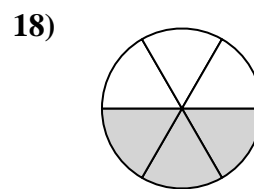
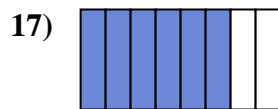
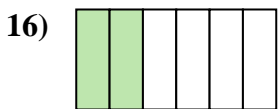
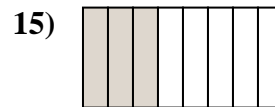
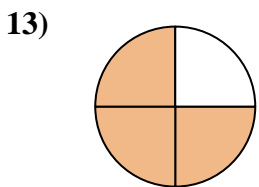
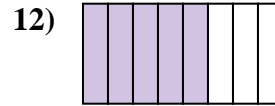
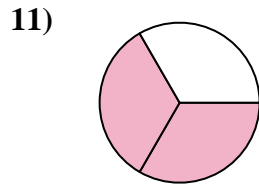
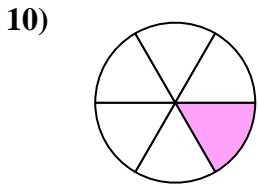
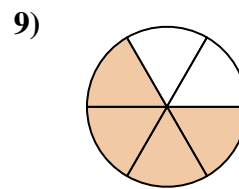
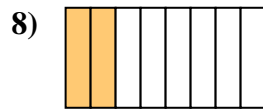
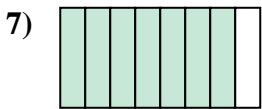
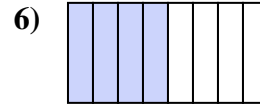
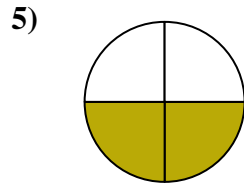
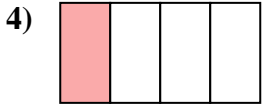
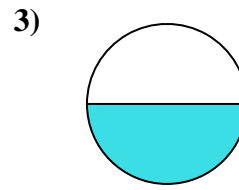
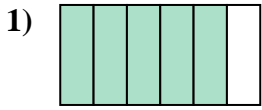


1. _____
2. _____
3. _____
4. _____
5. _____
6. _____
7. _____
8. _____
9. _____
10. _____
11. _____
12. _____
13. _____
14. _____
15. _____
16. _____
17. _____
18. _____



Ecrire la fraction de la représentation de la partie colorée du camembert.

Réponses



1. 5/6

2. 1/3

3. 1/2

4. 1/4

5. 2/4

6. 4/8

7. 7/8

8. 2/8

9. 4/6

10. 1/6

11. 2/3

12. 5/8

13. 3/4

14. 1/8

15. 3/8

16. 2/6

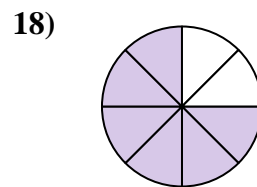
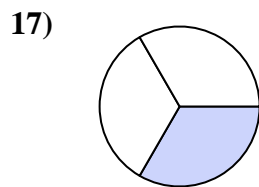
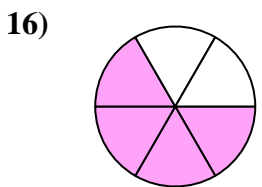
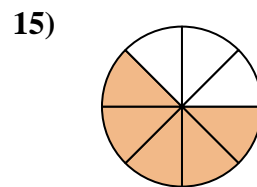
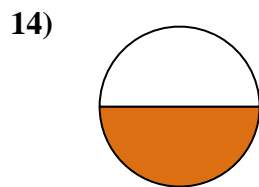
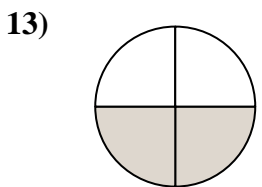
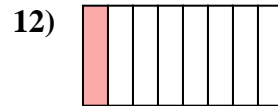

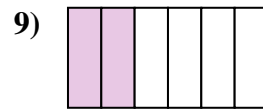
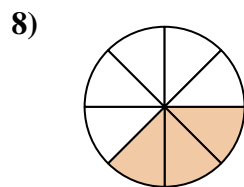
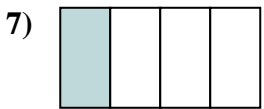
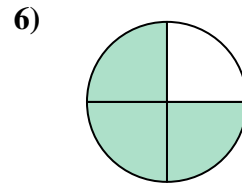
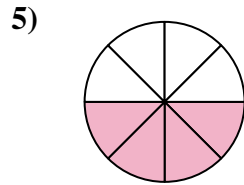
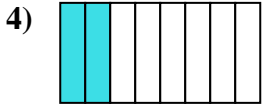
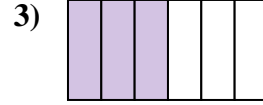

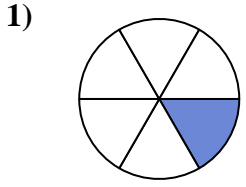
17. 6/8

18. 3/6



Ecrire la fraction de la représentation de la partie colorée du camembert.

Réponses



1. _____

2. _____

3. _____

4. _____

5. _____

6. _____

7. _____

8. _____

9. _____

10. _____

11. _____

12. _____

13. _____

14. _____

15. _____

16. _____

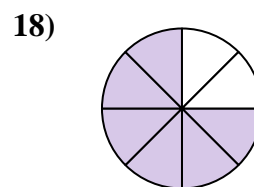
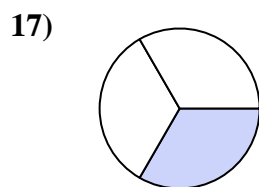
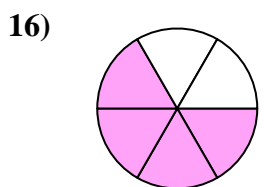
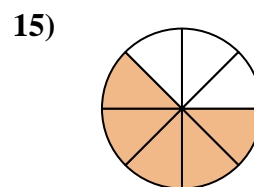
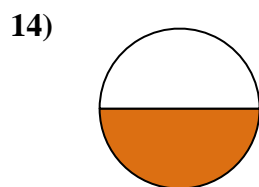
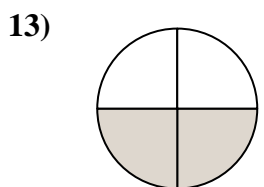
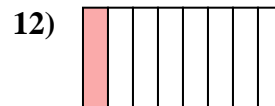

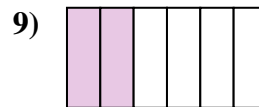
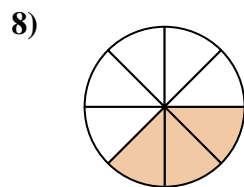

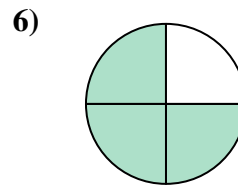
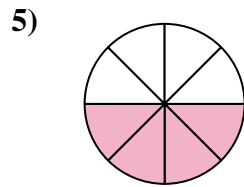
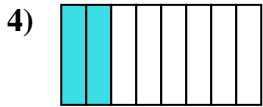
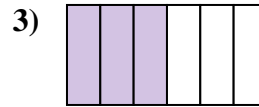
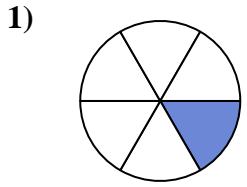
17. _____

18. _____



Ecrire la fraction de la représentation de la partie colorée du camembert.

Réponses


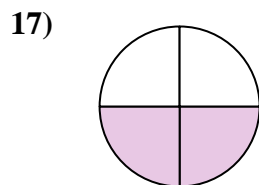

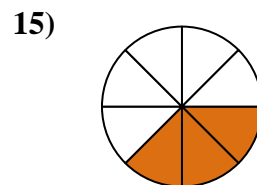
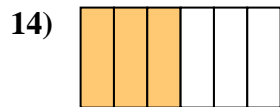
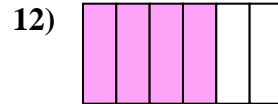
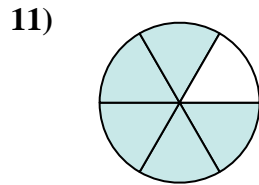
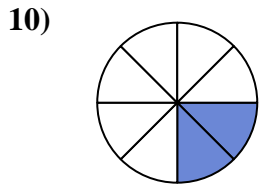
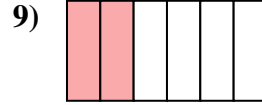
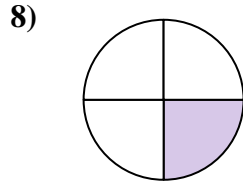
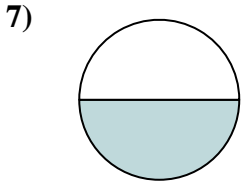
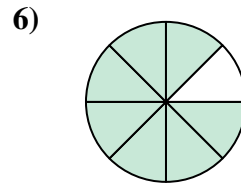
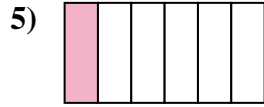
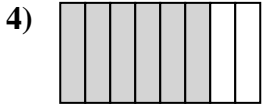
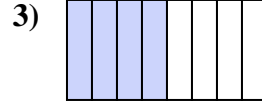
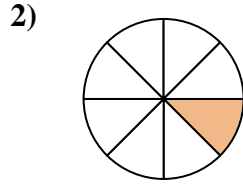
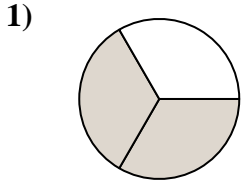


1. 1/6
2. 5/6
3. 3/6
4. 2/8
5. 4/8
6. 3/4
7. 1/4
8. 3/8
9. 2/6
10. 2/3
11. 7/8
12. 1/8
13. 2/4
14. 1/2
15. 5/8
16. 4/6
17. 1/3
18. 6/8



Ecrire la fraction de la représentation de la partie colorée du camembert.

Réponses


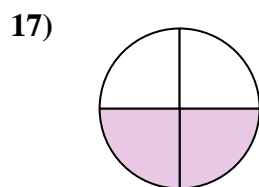

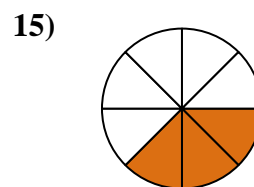
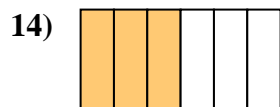

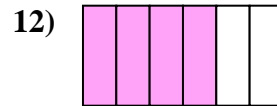
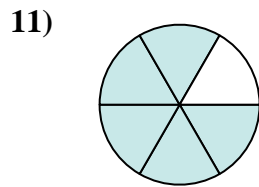
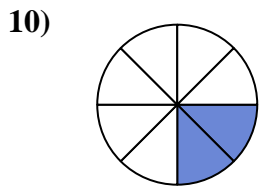
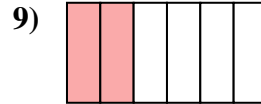
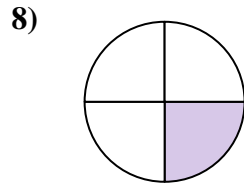
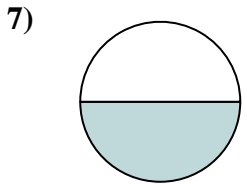
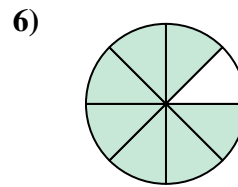
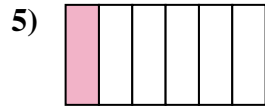
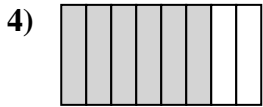
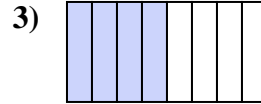
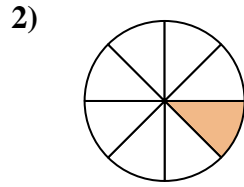
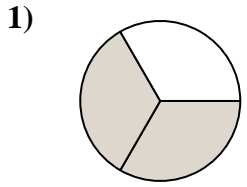


1. _____
2. _____
3. _____
4. _____
5. _____
6. _____
7. _____
8. _____
9. _____
10. _____
11. _____
12. _____
13. _____
14. _____
15. _____
16. _____
17. _____
18. _____



Ecrire la fraction de la représentation de la partie colorée du camembert.

Réponses


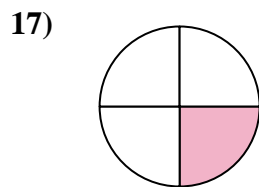
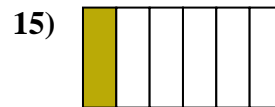
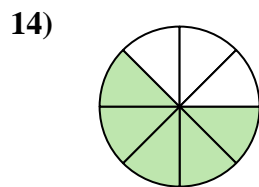
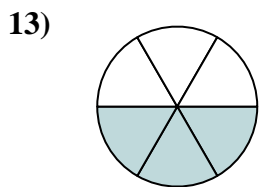
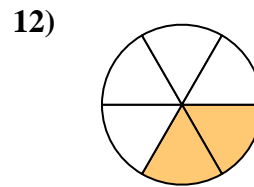
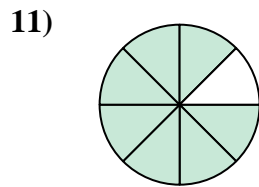
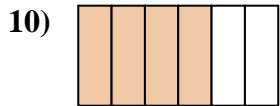

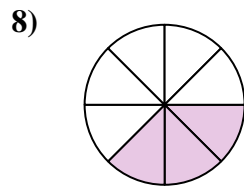
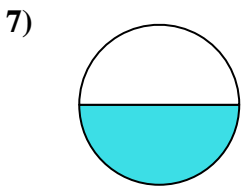
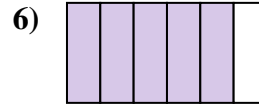
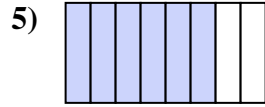
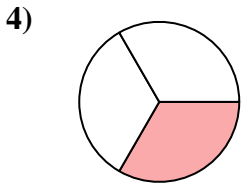
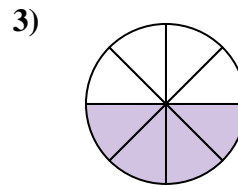
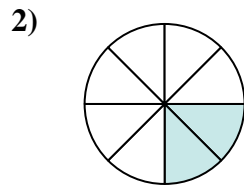
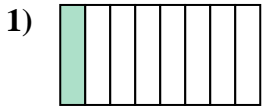


1. $\frac{2}{3}$
2. $\frac{1}{8}$
3. $\frac{4}{8}$
4. $\frac{6}{8}$
5. $\frac{1}{6}$
6. $\frac{7}{8}$
7. $\frac{1}{2}$
8. $\frac{1}{4}$
9. $\frac{2}{6}$
10. $\frac{2}{8}$
11. $\frac{5}{6}$
12. $\frac{4}{6}$
13. $\frac{5}{8}$
14. $\frac{3}{6}$
15. $\frac{3}{8}$
16. $\frac{1}{3}$
17. $\frac{2}{4}$
18. $\frac{3}{4}$



Ecrire la fraction de la représentation de la partie colorée du camembert.

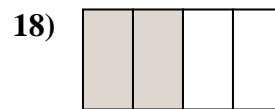
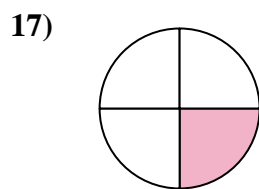
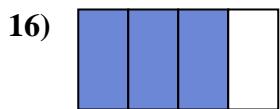
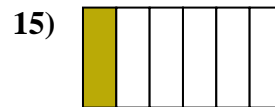
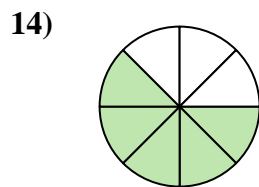
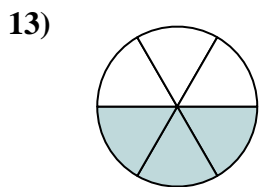
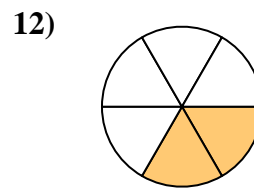
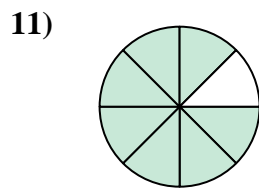
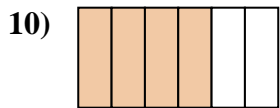

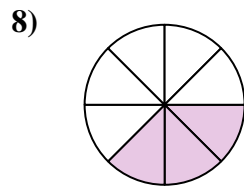
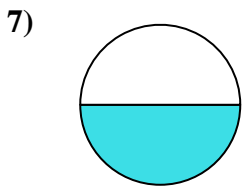
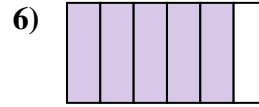
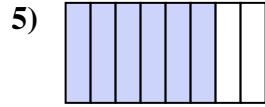
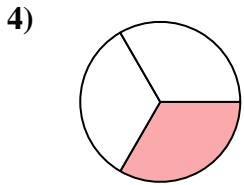
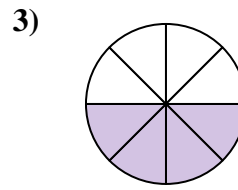
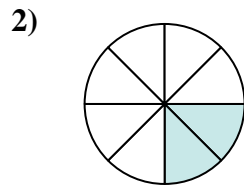
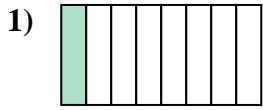
Réponses



1. _____
2. _____
3. _____
4. _____
5. _____
6. _____
7. _____
8. _____
9. _____
10. _____
11. _____
12. _____
13. _____
14. _____
15. _____
16. _____
17. _____
18. _____



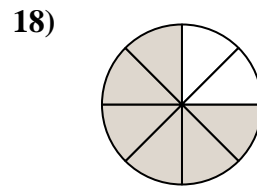
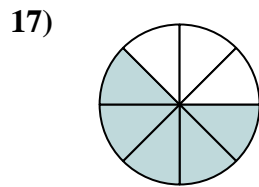
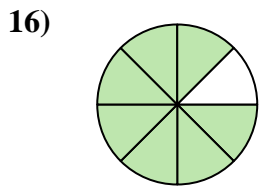
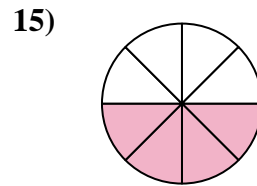
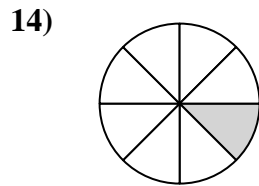
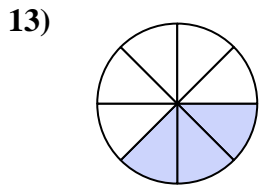
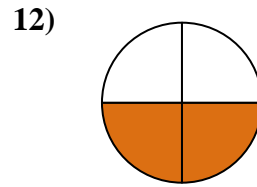
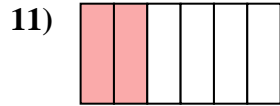
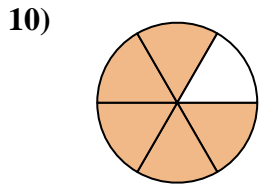
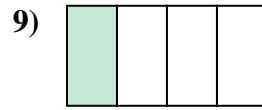
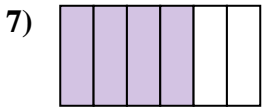
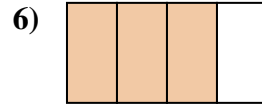
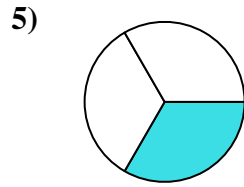

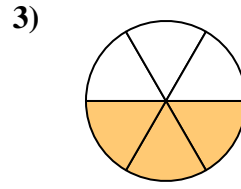
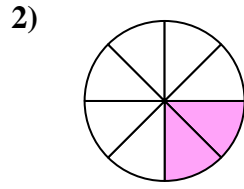
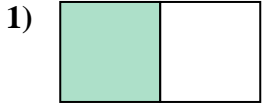
Ecrire la fraction de la représentation de la partie colorée du camembert.

**Réponses**1. $\frac{1}{8}$ 2. $\frac{2}{8}$ 3. $\frac{4}{8}$ 4. $\frac{1}{3}$ 5. $\frac{6}{8}$ 6. $\frac{5}{6}$ 7. $\frac{1}{2}$ 8. $\frac{3}{8}$ 9. $\frac{2}{3}$ 10. $\frac{4}{6}$ 11. $\frac{7}{8}$ 12. $\frac{2}{6}$ 13. $\frac{3}{6}$ 14. $\frac{5}{8}$ 15. $\frac{1}{6}$ 16. $\frac{3}{4}$ 17. $\frac{1}{4}$ 18. $\frac{2}{4}$



Ecrire la fraction de la représentation de la partie colorée du camembert.

Réponses



1. _____

2. _____

3. _____

4. _____

5. _____

6. _____

7. _____

8. _____

9. _____

10. _____

11. _____

12. _____

13. _____

14. _____

15. _____

16. _____

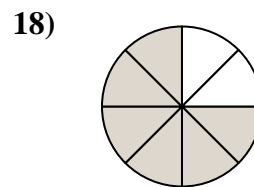
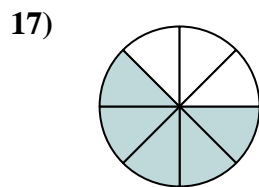
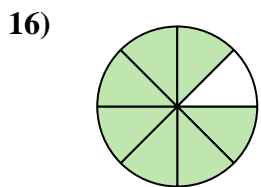
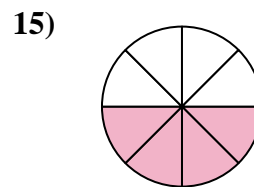
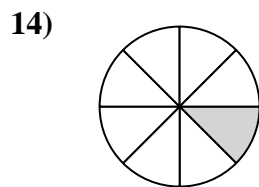
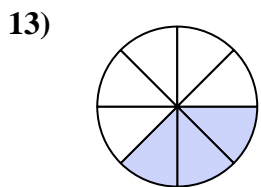
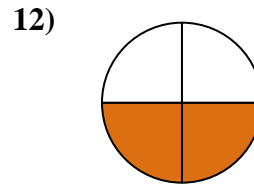
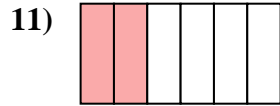
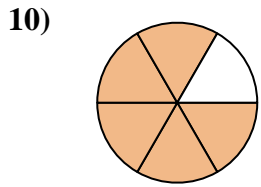
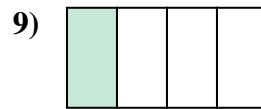
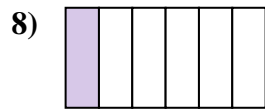
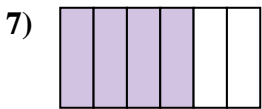
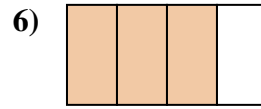
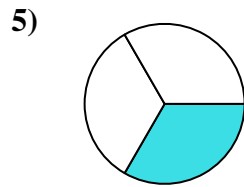

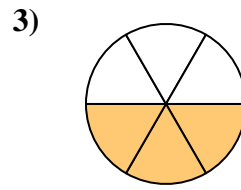
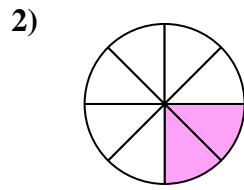
17. _____

18. _____



Ecrire la fraction de la représentation de la partie colorée du camembert.

Réponses



1. 1/2

2. 2/8

3. 3/6

4. 2/3

5. 1/3

6. 3/4

7. 4/6

8. 1/6

9. 1/4

10. 5/6

11. 2/6

12. 2/4

13. 3/8

14. 1/8

15. 4/8

16. 7/8

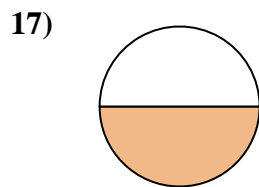
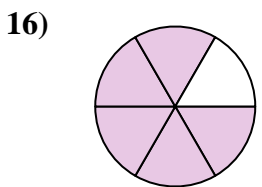
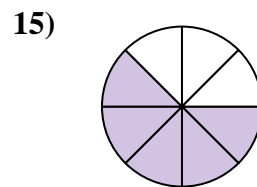
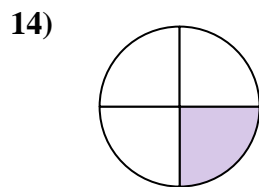
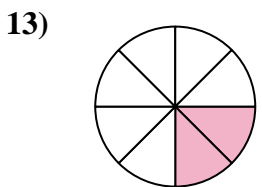
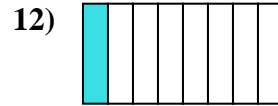
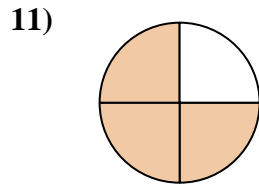
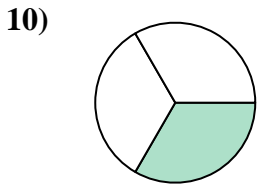
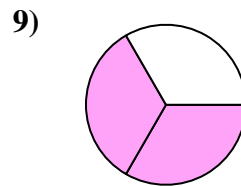
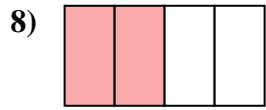
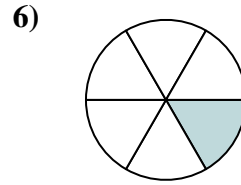
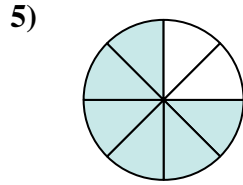
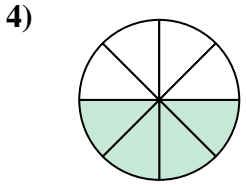
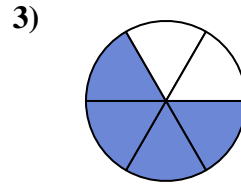
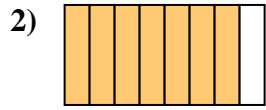
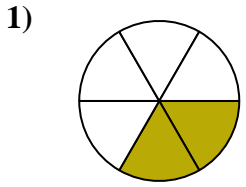
17. 5/8

18. 6/8



Ecrire la fraction de la représentation de la partie colorée du camembert.

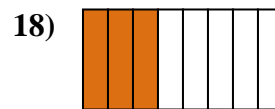
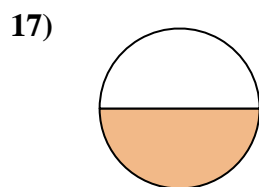
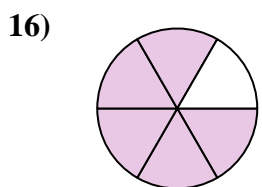
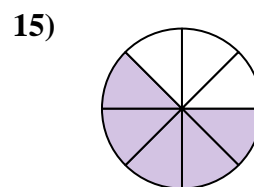
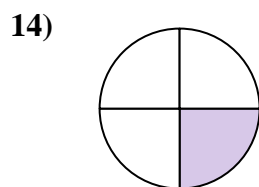
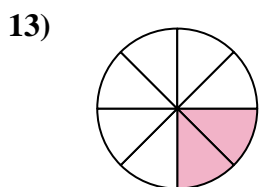
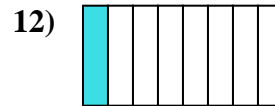
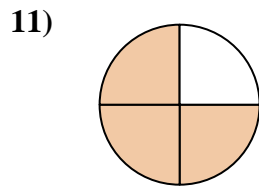
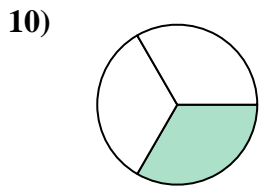
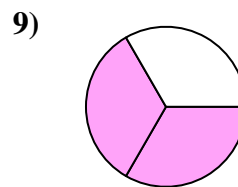
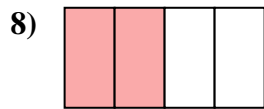
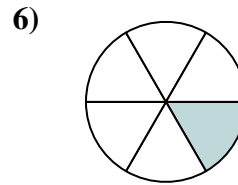
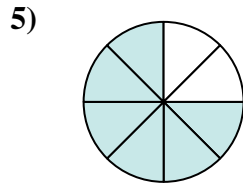
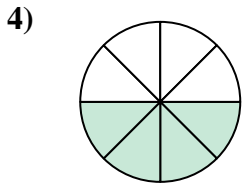
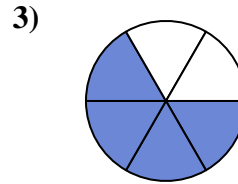
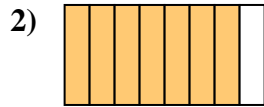
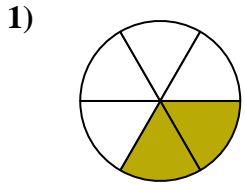
Réponses



1. _____
2. _____
3. _____
4. _____
5. _____
6. _____
7. _____
8. _____
9. _____
10. _____
11. _____
12. _____
13. _____
14. _____
15. _____
16. _____
17. _____
18. _____



Ecrire la fraction de la représentation de la partie colorée du camembert.

**Réponses**1. $\frac{2}{6}$ 2. $\frac{7}{8}$ 3. $\frac{4}{6}$ 4. $\frac{4}{8}$ 5. $\frac{6}{8}$ 6. $\frac{1}{6}$ 7. $\frac{3}{8}$ 8. $\frac{2}{4}$ 9. $\frac{2}{3}$ 10. $\frac{1}{3}$ 11. $\frac{3}{4}$ 12. $\frac{1}{8}$ 13. $\frac{2}{8}$ 14. $\frac{1}{4}$ 15. $\frac{5}{8}$ 16. $\frac{5}{6}$ 17. $\frac{1}{2}$ 18. $\frac{3}{8}$