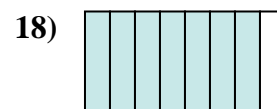
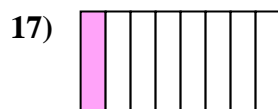

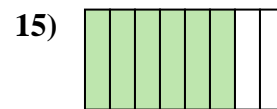
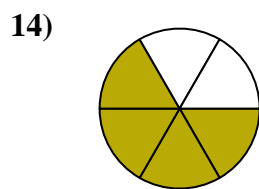
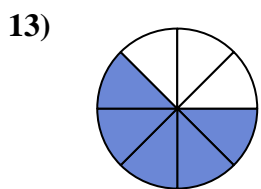
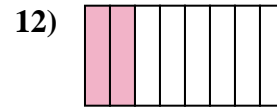
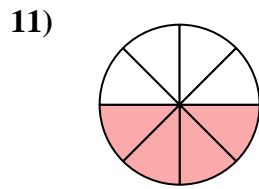
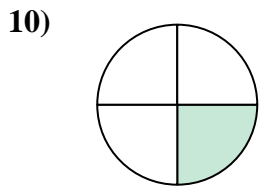
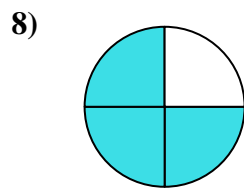

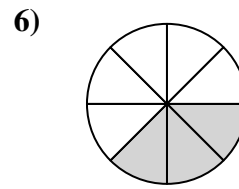
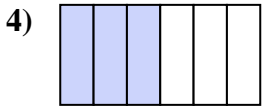
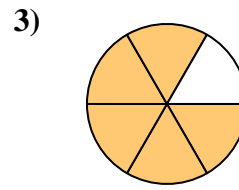
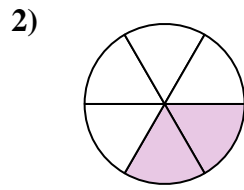




Ecrire la fraction de la représentation de la partie colorée du camembert.

Réponses


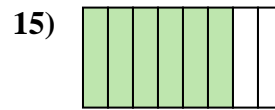
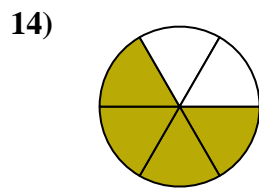
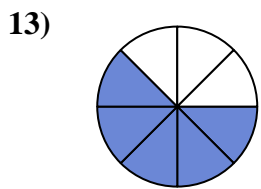
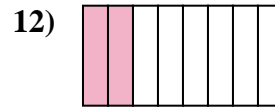
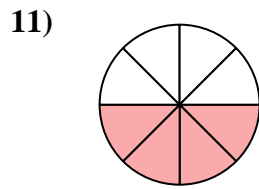
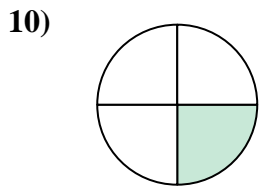
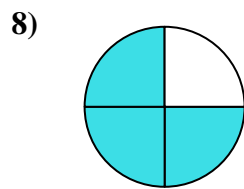

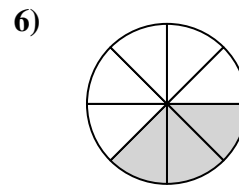
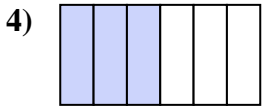
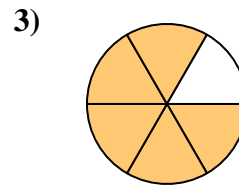
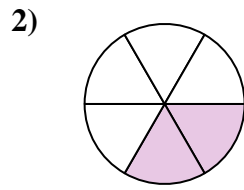
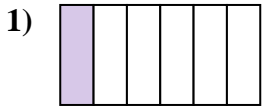


1. _____
2. _____
3. _____
4. _____
5. _____
6. _____
7. _____
8. _____
9. _____
10. _____
11. _____
12. _____
13. _____
14. _____
15. _____
16. _____
17. _____
18. _____



Ecrire la fraction de la représentation de la partie colorée du camembert.

Réponses



1. 1/6

2. 2/6

3. 5/6

4. 3/6

5. 1/2

6. 3/8

7. 2/3

8. 3/4

9. 2/4

10. 1/4

11. 4/8

12. 2/8

13. 5/8

14. 4/6

15. 6/8

16. 1/3

17. 1/8

18. 7/8