



Mesurez la largeur de chaque barre en centimètres.

Ex)



**Réponses**

Ex. 1 2-3

1)



1. \_\_\_\_\_

2)




2. \_\_\_\_\_

3)



3. \_\_\_\_\_

4)



4. \_\_\_\_\_

5)




5. \_\_\_\_\_

6)



6. \_\_\_\_\_

7)




7. \_\_\_\_\_

8)



8. \_\_\_\_\_

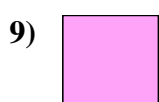
9)



9. \_\_\_\_\_



Mesurez la largeur de chaque barre en centimètres.



**Réponses**

Ex. 1    2 - 3

1. 3 1/2    8 - 9

2. 5 1/2    13 - 14

3. 5    12 - 13

4. 4 1/2    11 - 12

5. 1 1/2    3 - 4

6. 4    10 - 11

7. 2    5 - 6

8. 3    7 - 8

9. 0 1/2    1 - 2