




Mesurez la longueur et la largeur de chaque barre en centimètres.

Ex)



Réponses

Ex. 2 1/2 1 6,4 2,5


1. _____

2. _____


3. _____

4. _____


1)



2)



3)



4)





Mesurez la longueur et la largeur de chaque barre en centimètres.

Ex)



Réponses

Ex. 2 1/2 1 6,4 2,5


1. 4 1/2 1 1/2 11,4 3,8

2. 3 1 7,6 2,5


3. 5 1 1/2 12,7 3,8

4. 2 0 1/2 5,1 1,3


1)



2)



3)



4)

