





Mesurez la longueur et la largeur de chaque barre en centimètres.


Ex)



1)




2)



3)



4)



**Réponses**

Ex. 1 1 1/2 2,5 3,8

1. \_\_\_\_\_

2. \_\_\_\_\_

3. \_\_\_\_\_

4. \_\_\_\_\_




Mesurez la longueur et la largeur de chaque barre en centimètres.


Ex)



1)




2)



3)



4)



**Réponses**

Ex. 1 1 1/2 2,5 3,8

1. 1 1/2 1 1/2 3,8 3,8

2. 5 1 12,7 2,5

3. 5 1/2 0 1/2 14 1,3

4. 0 1/2 1 1/2 1,3 3,8