



Mesurez la longueur et la largeur de chaque barre en centimètres.

Ex)



Réponses

Ex. 5 1/2 0 1/2 **14** **1,3**


1. _____

2. _____


3. _____

4. _____


1)




2)



3)



4)





Mesurez la longueur et la largeur de chaque barre en centimètres.

Ex)



Réponses

Ex. 5 1/2 0 1/2 **14** **1,3**


1. 3 1/2 1 1/2 **8,9** **3,8**

2. **4** 0 1/2 10,2 **1,3**


3. **5** **1** 12,7 2,5

4. **1** **1** 2,5 2,5


1)



2)



3)



4)

