



Déterminez le montant d'argent indiqué.

**Réponses**



1. \_\_\_\_\_




2. \_\_\_\_\_



3. \_\_\_\_\_



4. \_\_\_\_\_



5. \_\_\_\_\_




6. \_\_\_\_\_



7. \_\_\_\_\_



8. \_\_\_\_\_



9. \_\_\_\_\_



10. \_\_\_\_\_



Déterminez le montant d'argent indiqué.

**Réponses**



1. \$0,96




2. \$0,96



3. \$0,97



4. \$0,95



5. \$0,95




6. \$0,99



7. \$0,99



8. \$0,98



9. \$0,97



10. \$0,97