



Déterminez le montant d'argent indiqué.

**Réponses**

1)



1. \_\_\_\_\_

2)



2. \_\_\_\_\_

3)



3. \_\_\_\_\_

4. \_\_\_\_\_

4)



5. \_\_\_\_\_

6. \_\_\_\_\_

5)



7. \_\_\_\_\_

8. \_\_\_\_\_

6)



9. \_\_\_\_\_

10. \_\_\_\_\_


7)



8)



9)





10)








Déterminez le montant d'argent indiqué.


1) 


2) 


3) 


4) 


5) 

6) 

7) 

8) 

9) 

10) 

**Réponses**

1. \$0,96
2. \$0,91
3. \$0,71
4. \$0,88
5. \$0,95
6. \$0,85
7. \$0,88
8. \$0,90
9. \$0,97
10. \$0,99