




Déterminez le montant d'argent indiqué.

**Réponses**



1. \_\_\_\_\_



2. \_\_\_\_\_



3. \_\_\_\_\_



4. \_\_\_\_\_



5. \_\_\_\_\_



6. \_\_\_\_\_




7. \_\_\_\_\_



8. \_\_\_\_\_



9. \_\_\_\_\_




10. \_\_\_\_\_



Déterminez le montant d'argent indiqué.

**Réponses**



1. \$0,95



2. \$0,80



3. \$0,96



4. \$0,90




5. \$0,69



6. \$0,95



7. \$0,98



8. \$0,78



9. \$0,98



10. \$0,96



Déterminez le montant d'argent indiqué.

**Réponses**



1. \_\_\_\_\_



2. \_\_\_\_\_



3. \_\_\_\_\_




4. \_\_\_\_\_



5. \_\_\_\_\_



6. \_\_\_\_\_



7. \_\_\_\_\_



8. \_\_\_\_\_



9. \_\_\_\_\_



10. \_\_\_\_\_



Déterminez le montant d'argent indiqué.



**Réponses**

1. \$0,52

2. \$0,95

3. \$0,99

4. \$0,70

5. \$0,69

6. \$0,95

7. \$0,95

8. \$0,97

9. \$0,59

10. \$0,66



Déterminez le montant d'argent indiqué.


**Réponses**



1. \_\_\_\_\_



2. \_\_\_\_\_



3. \_\_\_\_\_

4. \_\_\_\_\_



5. \_\_\_\_\_

6. \_\_\_\_\_




7. \_\_\_\_\_

8. \_\_\_\_\_




9. \_\_\_\_\_

10. \_\_\_\_\_





Déterminez le montant d'argent indiqué.



**Réponses**

1. \$0,43

2. \$0,85

3. \$0,71

4. \$0,69

5. \$0,96

6. \$0,96

7. \$0,81

8. \$0,93

9. \$0,96

10. \$0,99





Déterminez le montant d'argent indiqué.

**Réponses**



1. \_\_\_\_\_



2. \_\_\_\_\_



3. \_\_\_\_\_



4. \_\_\_\_\_



5. \_\_\_\_\_



6. \_\_\_\_\_



7. \_\_\_\_\_



8. \_\_\_\_\_



9. \_\_\_\_\_



10. \_\_\_\_\_



Déterminez le montant d'argent indiqué.



**Réponses**

1. \$0,95

2. \$0,71

3. \$0,63

4. \$0,50

5. \$0,97

6. \$0,90

7. \$0,97

8. \$0,85

9. \$0,97

10. \$0,96





Déterminez le montant d'argent indiqué.

**Réponses**



1. \_\_\_\_\_



2. \_\_\_\_\_



3. \_\_\_\_\_



4. \_\_\_\_\_



5. \_\_\_\_\_



6. \_\_\_\_\_



7. \_\_\_\_\_



8. \_\_\_\_\_




9. \_\_\_\_\_



10. \_\_\_\_\_



Déterminez le montant d'argent indiqué.



**Réponses**

1. \$0,96

2. \$0,95

3. \$0,88

4. \$0,97

5. \$0,99

6. \$0,76

7. \$0,91

8. \$0,99


9. \$0,97

10. \$0,85



Déterminez le montant d'argent indiqué.

**Réponses**



1. \_\_\_\_\_




2. \_\_\_\_\_



3. \_\_\_\_\_

4. \_\_\_\_\_



5. \_\_\_\_\_

6. \_\_\_\_\_




7. \_\_\_\_\_

8. \_\_\_\_\_






9. \_\_\_\_\_

10. \_\_\_\_\_





Déterminez le montant d'argent indiqué.



**Réponses**

1. \$0,81

2. \$0,95

3. \$0,98

4. \$0,99

5. \$0,96

6. \$0,92

7. \$0,98

8. \$0,99

9. \$0,98

10. \$0,68



Déterminez le montant d'argent indiqué.

**Réponses**



1. \_\_\_\_\_




2. \_\_\_\_\_



3. \_\_\_\_\_



4. \_\_\_\_\_



5. \_\_\_\_\_




6. \_\_\_\_\_



7. \_\_\_\_\_



8. \_\_\_\_\_



9. \_\_\_\_\_



10. \_\_\_\_\_





Déterminez le montant d'argent indiqué.

**Réponses**



1. \$0,96



2. \$0,96



3. \$0,97



4. \$0,95



5. \$0,95



6. \$0,99



7. \$0,99



8. \$0,98



9. \$0,97



10. \$0,97



Déterminez le montant d'argent indiqué.

**Réponses**

1)



1. \_\_\_\_\_

2)



2. \_\_\_\_\_

3)



3. \_\_\_\_\_

4)



4. \_\_\_\_\_

5)



5. \_\_\_\_\_

6)



6. \_\_\_\_\_

7)




7. \_\_\_\_\_

8)



8. \_\_\_\_\_

9)



9. \_\_\_\_\_


10)





10. \_\_\_\_\_





Déterminez le montant d'argent indiqué.


1) 


2) 


3) 


4) 


5) 

6) 

7) 

8) 

9) 

10) 

**Réponses**

1. \$0,96
2. \$0,91
3. \$0,71
4. \$0,88
5. \$0,95
6. \$0,85
7. \$0,88
8. \$0,90
9. \$0,97
10. \$0,99



Déterminez le montant d'argent indiqué.

**Réponses**



1. \_\_\_\_\_



2. \_\_\_\_\_



3. \_\_\_\_\_



4. \_\_\_\_\_



5. \_\_\_\_\_



6. \_\_\_\_\_



7. \_\_\_\_\_



8. \_\_\_\_\_



9. \_\_\_\_\_



10. \_\_\_\_\_



Déterminez le montant d'argent indiqué.

**Réponses**



1. \$0,95



2. \$0,91



3. \$0,81



4. \$0,96



5. \$0,93



6. \$0,53



7. \$0,79



8. \$0,96



9. \$0,98



10. \$0,54





Déterminez le montant d'argent indiqué.

**Réponses**



1. \_\_\_\_\_



2. \_\_\_\_\_



3. \_\_\_\_\_

4. \_\_\_\_\_



5. \_\_\_\_\_

6. \_\_\_\_\_



7. \_\_\_\_\_

8. \_\_\_\_\_



9. \_\_\_\_\_

10. \_\_\_\_\_





Déterminez le montant d'argent indiqué.

**Réponses**



1. \$0,90



2. \$0,73



3. \$0,99

4. \$0,68



5. \$0,98

6. \$0,96



7. \$0,98

8. \$0,89



9. \$0,88

10. \$0,95

