




Déterminez le montant d'argent indiqué.

**Réponses**




1. \_\_\_\_\_



2. \_\_\_\_\_



3. \_\_\_\_\_



4. \_\_\_\_\_



5. \_\_\_\_\_



6. \_\_\_\_\_



7. \_\_\_\_\_



8. \_\_\_\_\_




9. \_\_\_\_\_



10. \_\_\_\_\_



Déterminez le montant d'argent indiqué.



**Réponses**

1. \$0,75

2. \$0,94

3. \$0,93

4. \$0,98

5. \$0,75

6. \$0,95

7. \$0,82

8. \$0,89

9. \$0,88

10. \$0,63