





Utilisez les rectangles pour résoudre chaque problème.

Réponses

1) $36 \times 55 =$



2) $42 \times 26 =$



1. _____

2. _____

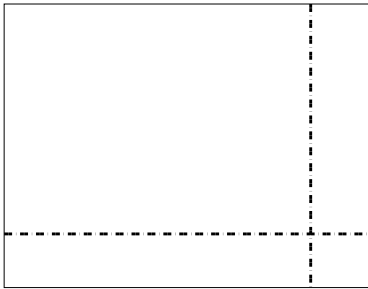
3. _____

4. _____


5. _____

6. _____


3) $37 \times 48 =$




4) $44 \times 59 =$



5) $46 \times 39 =$



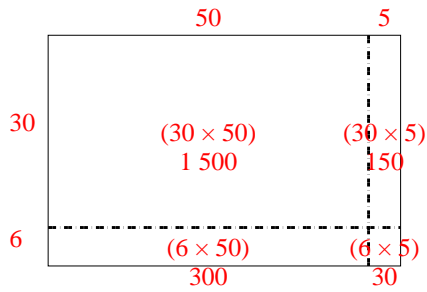
6) $47 \times 59 =$



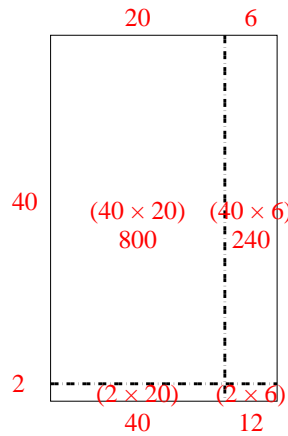


Utilisez les rectangles pour résoudre chaque problème.

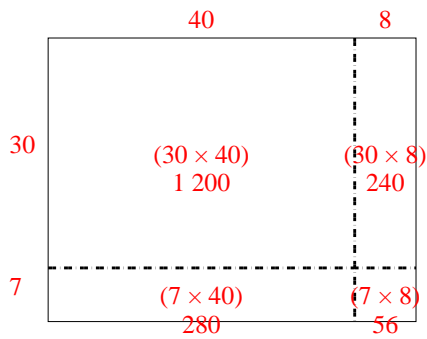
1) $36 \times 55 =$



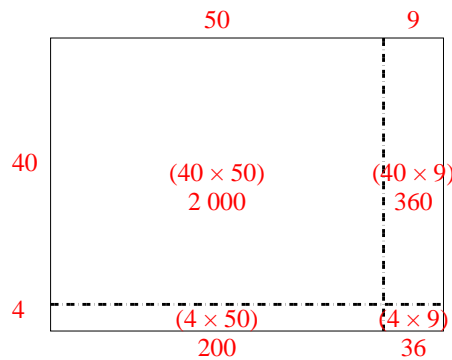
2) $42 \times 26 =$



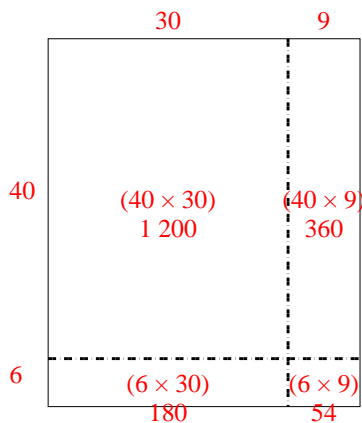
3) $37 \times 48 =$



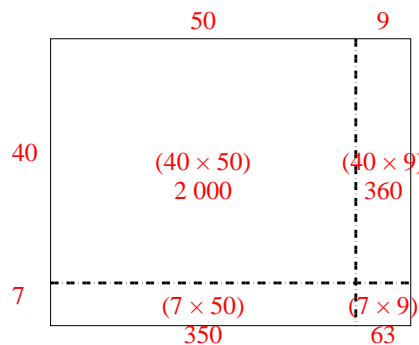
4) $44 \times 59 =$



5) $46 \times 39 =$



6) $47 \times 59 =$



Réponses

1. **1 980**

2. **1 092**

3. **1 776**

4. **2 596**

5. **1 794**

6. **2 773**