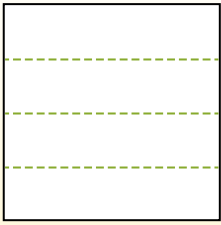


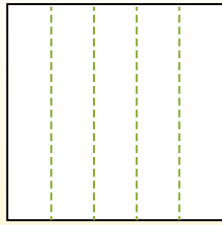


Partitionnez la figure comme indiqué et comptez le nombre de cellules formées.

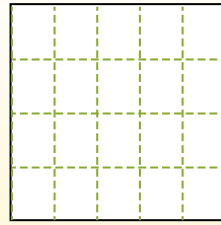
Las filas van de izquierda a derecha.



Las columnas van de arriba a abajo.




Aqui tem 4 linhas e 5 colunas .
Existem 20 caixas no total.



Réponses

- 1. _____
- 2. _____
- 3. _____
- 4. _____
- 5. _____
- 6. _____
- 7. _____
- 8. _____
- 9. _____


1) 2 lignes
5 colonnes




2) 3 lignes
5 colonnes




3) 5 lignes
5 colonnes




4) 4 lignes
3 colonnes




5) 5 lignes
3 colonnes




6) 2 lignes
3 colonnes




7) 5 lignes
4 colonnes



8) 2 lignes
2 colonnes



9) 4 lignes
4 colonnes



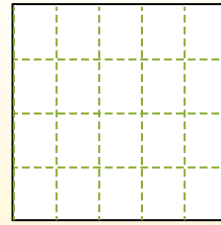
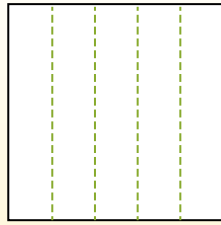
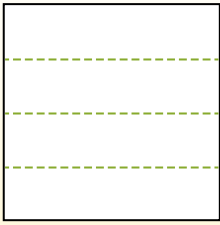


Partitionnez la figure comme indiqué et comptez le nombre de cellules formées.

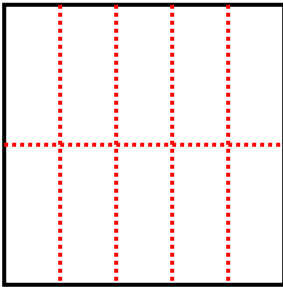
Las filas van de izquierda a derecha.

Las columnas van de arriba a abajo.

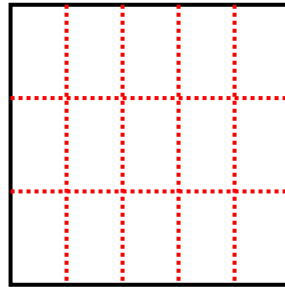
Aqui tem 4 linhas e 5 colunas. Existem 20 caixas no total.



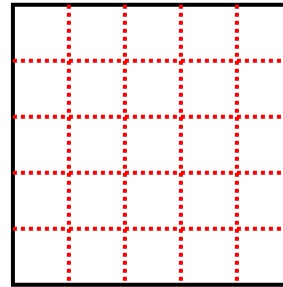
1) 2 lignes
5 colonnes



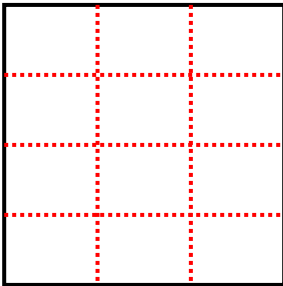
2) 3 lignes
5 colonnes



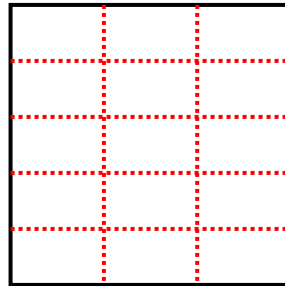
3) 5 lignes
5 colonnes



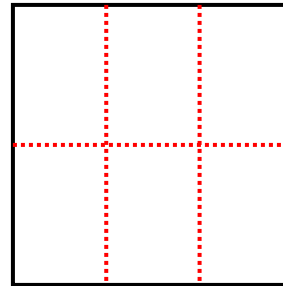
4) 4 lignes
3 colonnes



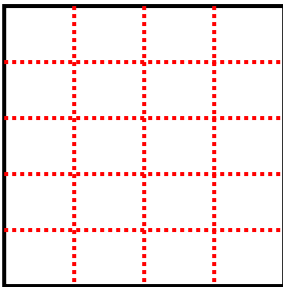
5) 5 lignes
3 colonnes



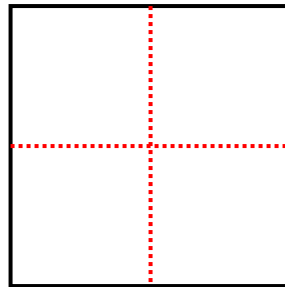
6) 2 lignes
3 colonnes



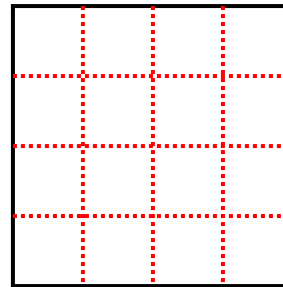
7) 5 lignes
4 colonnes



8) 2 lignes
2 colonnes



9) 4 lignes
4 colonnes



Réponses

1. **10**

2. **15**

3. **25**

4. **12**

5. **15**

6. **6**

7. **20**

8. **4**

9. **16**