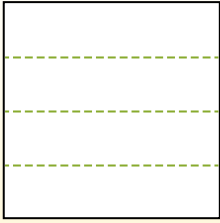


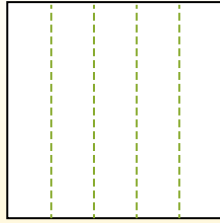


Partitionnez la figure comme indiqué et comptez le nombre de cellules formées.

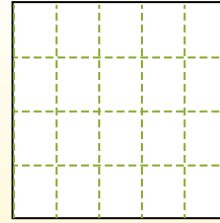
Las filas van de izquierda a derecha.



Las columnas van de arriba a abajo.




Aqui tem 4 linhas e 5 colunas .
Existem 20 caixas no total.




Réponses

- 1. _____
- 2. _____
- 3. _____
- 4. _____
- 5. _____
- 6. _____
- 7. _____
- 8. _____
- 9. _____


1) 5 lignes
2 colonnes




2) 3 lignes
3 colonnes




3) 2 lignes
3 colonnes




4) 3 lignes
4 colonnes




5) 2 lignes
2 colonnes




6) 5 lignes
4 colonnes




7) 3 lignes
2 colonnes



8) 5 lignes
3 colonnes



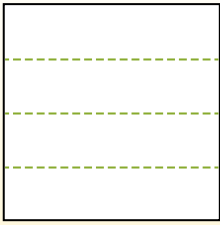
9) 2 lignes
5 colonnes



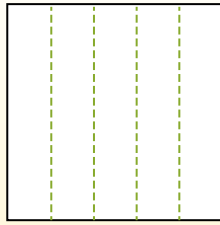


Partitionnez la figure comme indiqué et comptez le nombre de cellules formées.

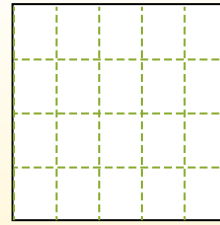
Las filas van de izquierda a derecha.



Las columnas van de arriba a abajo.

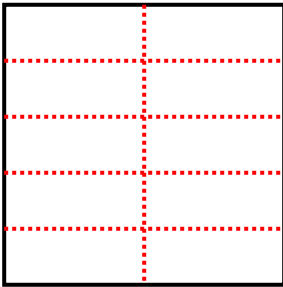


Aqui tem 4 linhas e 5 colunas .
Existem 20 caixas no total.

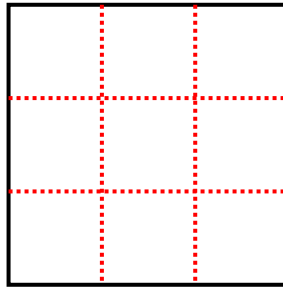


Réponses

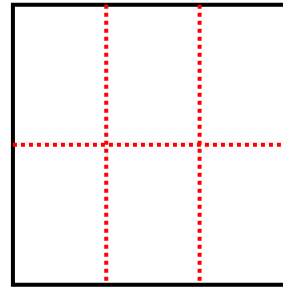
1) 5 lignes
2 colonnes



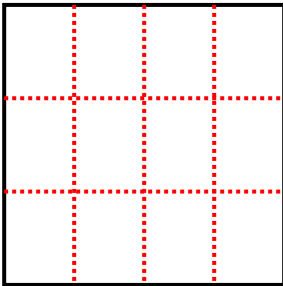
2) 3 lignes
3 colonnes



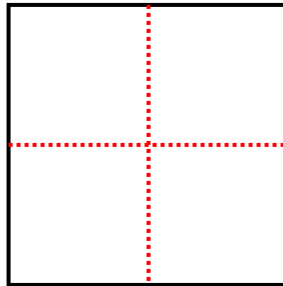
3) 2 lignes
3 colonnes



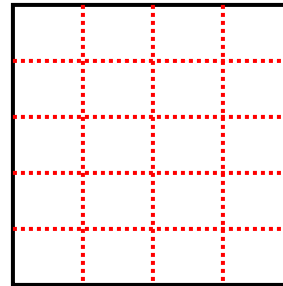
4) 3 lignes
4 colonnes



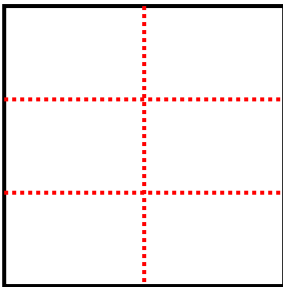
5) 2 lignes
2 colonnes



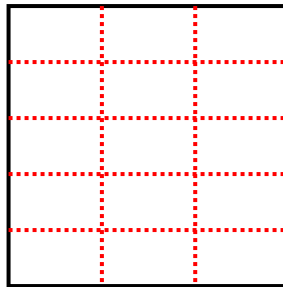
6) 5 lignes
4 colonnes



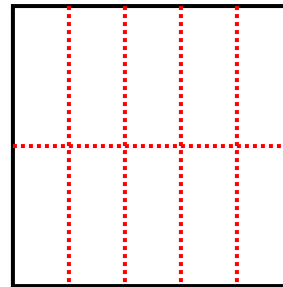
7) 3 lignes
2 colonnes



8) 5 lignes
3 colonnes



9) 2 lignes
5 colonnes



- 1. 10
- 2. 9
- 3. 6
- 4. 12
- 5. 4
- 6. 20
- 7. 6
- 8. 15
- 9. 10