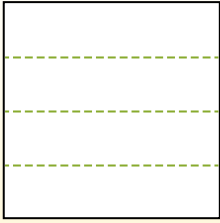


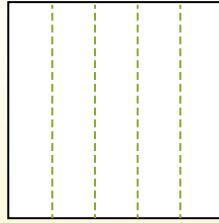


Partitionnez la figure comme indiqué et comptez le nombre de cellules formées.

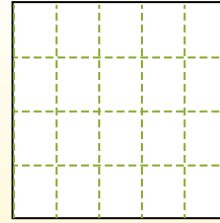
Las filas van de izquierda a derecha.




Las columnas van de arriba a abajo.



Aqui tem 4 linhas e 5 colunas .  
Existem 20 caixas no total.




1) 2 lignes  
4 colonnes




2) 5 lignes  
2 colonnes



3) 3 lignes  
4 colonnes




4) 3 lignes  
5 colonnes




5) 2 lignes  
3 colonnes



6) 4 lignes  
3 colonnes




7) 5 lignes  
3 colonnes



8) 3 lignes  
2 colonnes



9) 3 lignes  
3 colonnes



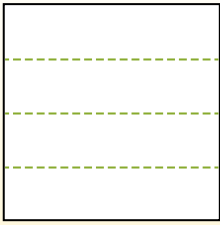
**Réponses**

- 1. \_\_\_\_\_
- 2. \_\_\_\_\_
- 3. \_\_\_\_\_
- 4. \_\_\_\_\_
- 5. \_\_\_\_\_
- 6. \_\_\_\_\_
- 7. \_\_\_\_\_
- 8. \_\_\_\_\_
- 9. \_\_\_\_\_

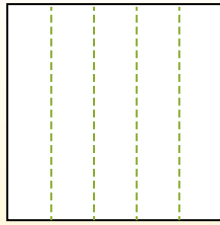


Partitionnez la figure comme indiqué et comptez le nombre de cellules formées.

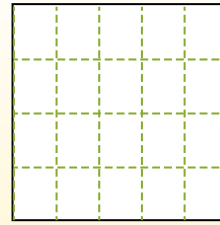
Las filas van de izquierda a derecha.



Las columnas van de arriba a abajo.



Aqui tem 4 linhas e 5 colunas. Existem 20 caixas no total.



**Réponses**

1. 8

2. 10

3. 12

4. 15

5. 6

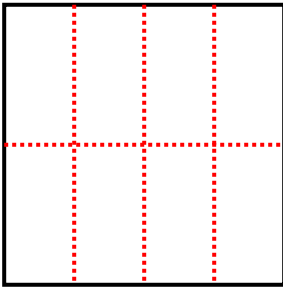
6. 12

7. 15

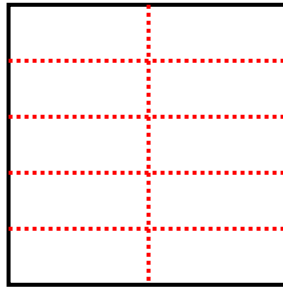
8. 6

9. 9

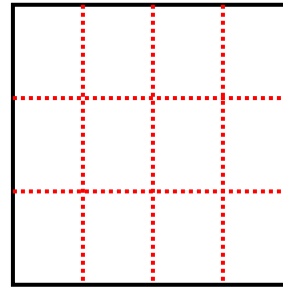
1) 2 lignes  
4 colonnes



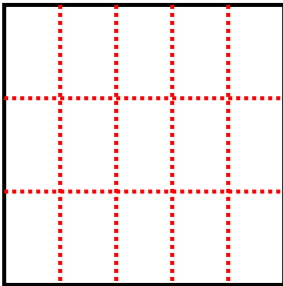
2) 5 lignes  
2 colonnes



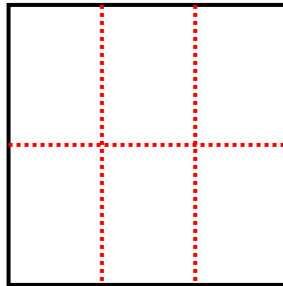
3) 3 lignes  
4 colonnes



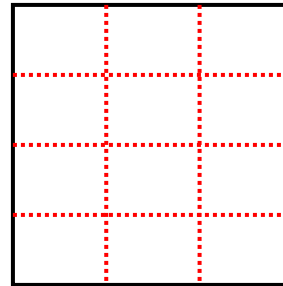
4) 3 lignes  
5 colonnes



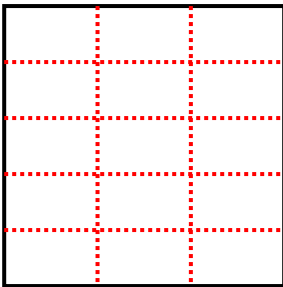
5) 2 lignes  
3 colonnes



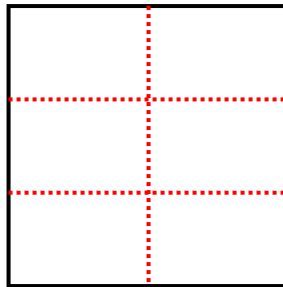
6) 4 lignes  
3 colonnes



7) 5 lignes  
3 colonnes



8) 3 lignes  
2 colonnes



9) 3 lignes  
3 colonnes

