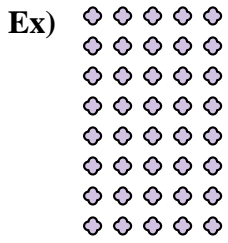




Interpréter chaque figure en multiplication.

Réponses



Ex. 8 x 5 = 40

1. _____

2. _____

3. _____

4. _____





5. _____

6. _____

7. _____

8. _____

9. _____



10. _____

11. _____

