






Interpréter chaque figure en multiplication.

Réponses



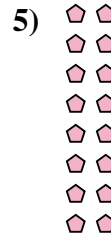


Ex. $7 \times 7 = 49$

1. _____

2. _____

3. _____

4. _____




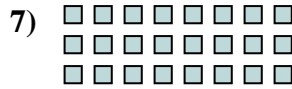

5. _____

6. _____

7. _____

8. _____

9. _____



10. _____

11. _____

