
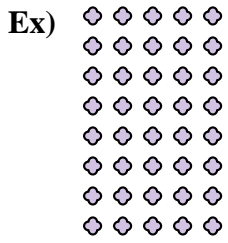




Interpréter chaque figure en multiplication.

Réponses




Ex. 8 x 5 = 40

1. _____

2. _____

3. _____

4. _____





5. _____

6. _____

7. _____

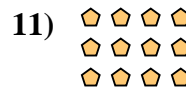

8. _____

9. _____



10. _____


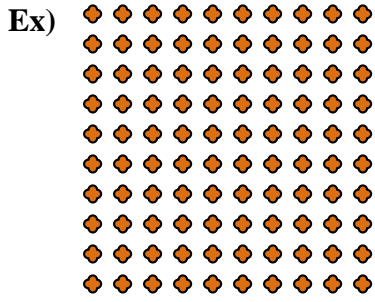
11. _____





Interpréter chaque figure en multiplication.

Réponses





Ex. 10 × 10 = 100

1. _____

2. _____

3. _____

4. _____



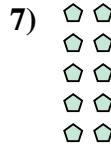
5. _____

6. _____

7. _____


8. _____

9. _____





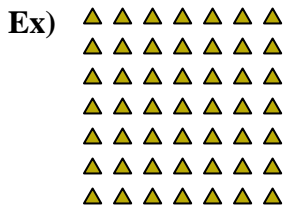
10. _____

11. _____





Interpréter chaque figure en multiplication.



Réponses

Ex. 7 × 7 = 49

1. 8 × 6 = 48

2. 6 × 8 = 48

3. 5 × 2 = 10

4. 10 × 8 = 80

5. 8 × 2 = 16

6. 9 × 10 = 90

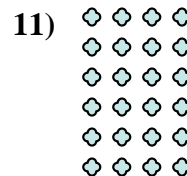
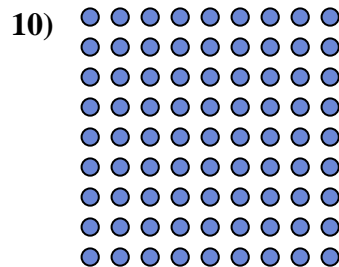



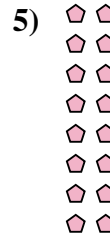

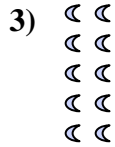
7. 3 × 8 = 24

8. 8 × 9 = 72

9. 3 × 9 = 27


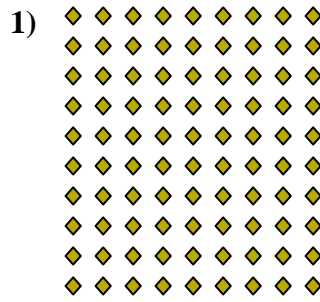

10. 9 × 9 = 81

11. 6 × 4 = 24





Interpréter chaque figure en multiplication.



Réponses

Ex. 6 × 3 = 18

1. 10 × 9 = 90

2. 9 × 5 = 45

3. 5 × 2 = 10

4. 8 × 4 = 32

5. 9 × 10 = 90

6. 3 × 2 = 6

7. 4 × 9 = 36

8. 10 × 3 = 30

9. 10 × 7 = 70

10. 2 × 8 = 16

11. 3 × 4 = 12

